

Glencoe McGraw-Hill

**Study Guide and  
Intervention Workbook**

# Algebra 1



**Glencoe**

### **To the Student**

This *Study Guide and Intervention Workbook* gives you additional examples and problems for the concept exercises in each lesson. The exercises are designed to aid your study of mathematics by reinforcing important mathematical skills needed to succeed in the everyday world. The materials are organized by chapter and lesson, with two Study Guide and Intervention worksheets for every lesson in *Glencoe Algebra 1*.

Always keep your workbook handy. Along with your textbook, daily homework, and class notes, the completed *Study Guide and Intervention Workbook* can help you in reviewing for quizzes and tests.

### **To the Teacher**

These worksheets are the same ones found in the Chapter Resource Masters for *Glencoe Algebra 1*. The answers to these worksheets are available at the end of each Chapter Resource Masters booklet as well as in your Teacher Wraparound Edition interleaf pages.

The McGraw-Hill Companies



Copyright © by The McGraw-Hill Companies, Inc. All rights reserved.  
Except as permitted under the United States Copyright Act, no part of this publication may be reproduced or distributed in any form or by any means, or stored in a database or retrieval system, without prior written permission of the publisher.

Send all inquiries to:  
Glencoe/McGraw-Hill  
8787 Orion Place  
Columbus, OH 43240

ISBN: 978-0-07-890835-4  
MHID: 0-07-890835-3

*Study Guide and Intervention Workbook, Algebra 1*

Printed in the United States of America

1 2 3 4 5 6 7 8 9 10 047 14 13 12 11 10 09 08

# Contents

Lesson/Title	Page	Lesson/Title	Page
1-1 Variables and Expressions.....	1	6-1 Graphing Systems of Equations.....	73
1-2 Order of Operations.....	3	6-2 Substitution.....	75
1-3 Properties of Numbers.....	5	6-3 Elimination Using Addition and Subtraction.....	77
1-4 The Distributive Property.....	7	6-4 Elimination Using Multiplication.....	79
1-5 Equations.....	9	6-5 Applying Systems of Linear Equations.....	81
1-6 Relations.....	11	6-6 Organizing Data Using Matrices.....	83
1-7 Functions.....	13	6-7 Using Matrices to Solve Systems of Equations.....	85
1-8 Logical Reasoning and Counterexamples.....	15	6-8 Systems of Inequalities.....	87
2-1 Writing Equations.....	17	7-1 Multiplying Monomials.....	89
2-2 Solving One-Step Equations.....	19	7-2 Dividing Monomials.....	91
2-3 Solving Multi-Step Equations.....	21	7-3 Scientific Notation.....	93
2-4 Solving Equations with the Variable on Each Side.....	23	7-4 Polynomials.....	95
2-5 Solving Equations Involving Absolute Value.....	25	7-5 Adding and Subtracting Polynomials.....	97
2-6 Ratios and Proportions.....	27	7-6 Multiplying a Polynomial by a Monomial.....	99
2-7 Percent of Change.....	29	7-7 Multiplying Polynomials.....	100
2-8 Literal Equations and Dimensional Analysis.....	31	7-8 Special Products.....	101
2-9 Weighted Averages.....	33	8-1 Monomials and Factoring.....	103
3-1 Graphing Linear Relations.....	35	8-2 Using the Distributive Property.....	105
3-2 Solving Linear Equations by Graphing.....	37	8-3 Quadratic Equations: $x^2 + bx + c = 0$ .....	107
3-3 Rate of Change and Slope.....	39	8-4 Quadratic Equations: $ax^2 + bx + c = 0$ .....	109
3-4 Direct Variation.....	41	8-5 Quadratic Equations: Differences of Squares.....	111
3-5 Arithmetic Sequences as Linear Functions.....	43	8-6 Quadratic Equations: Perfects Squares.....	113
3-6 Proportional and Nonproportional Relationships.....	45	9-1 Graphing Quadratic Functions.....	115
4-1 Graphing Equations in Slope-Intercept Form.....	47	9-2 Solving Quadratic Equations by Graphing.....	117
4-2 Writing Equations in Slope-Intercept Form.....	49	9-3 Transformations of Quadratic Functions.....	119
4-3 Writing Equations in Point-Slope Form.....	51	9-4 Solving Quadratic Equations by Completing the Square.....	121
4-4 Parallel and Perpendicular Lines.....	53	9-5 Solving Quadratic Equations by Using the Quadratic Formula.....	123
4-5 Scatter Plots and Lines of Fit.....	55	9-6 Exponential Functions.....	125
4-6 Regression and Median-Fit Lines.....	57	9-7 Growth and Decay.....	127
4-7 Special Functions.....	59	9-8 Geometric Sequences as Exponential Functions.....	129
5-1 Solving Inequalities by Addition and Subtraction.....	61	9-9 Analyzing Functions with Successive Differences and Ratios.....	131
5-2 Solving Inequalities by Multiplication and Division.....	63	10-1 Square Root Functions.....	133
5-3 Solving Multi-Step Inequalities.....	65	10-2 Simplifying Radical Expressions.....	135
5-4 Solving Compound Inequalities.....	67	10-3 Operations with Radical Expressions.....	137
5-5 Inequalities Involving Absolute Value.....	69	10-4 Radical Equations.....	139
5-6 Graphing Inequalities in Two Variables.....	71		

<b>Lesson/Title</b>	<b>Page</b>
<b>10-5</b> The Pythagorean Theorem.....	<b>141</b>
<b>10-6</b> The Distance and Midpoint Formulas.....	<b>143</b>
<b>10-7</b> Similar Triangles.....	<b>145</b>
<b>10-8</b> Trigonometric Ratios .....	<b>147</b>
<b>11-1</b> Inverse Variation.....	<b>149</b>
<b>11-2</b> Rational Functions.....	<b>151</b>
<b>11-3</b> Simplifying Rational Expressions .....	<b>153</b>
<b>11-4</b> Multiplying and Dividing Rational Expressions .....	<b>155</b>
<b>11-5</b> Dividing Polynomials .....	<b>157</b>
<b>11-6</b> Adding and Subtracting Rational Expressions .....	<b>159</b>

<b>Lesson/Title</b>	<b>Page</b>
<b>11-7</b> Mixed Expressions and Complex Fractions.....	<b>161</b>
<b>11-8</b> Rational Equations and Functions.....	<b>163</b>
<b>12-1</b> Designing a Survey .....	<b>165</b>
<b>12-2</b> Analyzing Survey Results.....	<b>167</b>
<b>12-3</b> Statistics and Parameters.....	<b>169</b>
<b>12-4</b> Permutations and Combinations .....	<b>171</b>
<b>12-5</b> Probability of Compound Events .....	<b>173</b>
<b>12-6</b> Probability Distributions .....	<b>175</b>
<b>12-7</b> Probability Simulations .....	<b>177</b>



**1-1 Study Guide and Intervention****Variables and Expressions**

**Write Verbal Expressions** An **algebraic expression** consists of one or more numbers and variables along with one or more arithmetic operations. In algebra, **variables** are symbols used to represent unspecified numbers or values. Any letter may be used as a variable.

**Example** Write a verbal expression for each algebraic expression.

a.  $6n^2$

the product of 6 and  $n$  squared

b.  $n^3 - 12m$

the difference of  $n$  cubed and twelve times  $m$

**Exercises**

Write a verbal expression for each algebraic expression.

1.  $w - 1$

2.  $\frac{1}{3}a^3$

3.  $81 + 2x$

4.  $12d$

5.  $8^4$

6.  $6^2$

7.  $2n^2 + 4$

8.  $a^3 \cdot b^3$

9.  $2x^3 - 3$

10.  $\frac{6k^3}{5}$

11.  $\frac{1}{4}b^2$

12.  $7n^5$

13.  $3x + 4$

14.  $\frac{2}{3}k^5$

15.  $3b^2 + 2a^3$

16.  $4(n^2 + 1)$

**1-1 Study Guide and Intervention** *(continued)***Variables and Expressions**

**Write Algebraic Expressions** Translating verbal expressions into algebraic expressions is an important algebraic skill.

**Example** Write an algebraic expression for each verbal expression.

**a. four more than a number  $n$**

The words *more than* imply addition.

four more than a number  $n$

$$4 + n$$

The algebraic expression is  $4 + n$ .

**b. the difference of a number squared and 8**

The expression *difference of* implies subtraction.

the difference of a number squared and 8

$$n^2 - 8$$

The algebraic expression is  $n^2 - 8$ .

**Exercises**

Write an algebraic expression for each verbal expression.

1. a number decreased by 8
2. a number divided by 8
3. a number squared
4. four times a number
5. a number divided by 6
6. a number multiplied by 37
7. the sum of 9 and a number
8. 3 less than 5 times a number
9. twice the sum of 15 and a number
10. one-half the square of  $b$
11. 7 more than the product of 6 and a number
12. 30 increased by 3 times the square of a number

**1-2 Study Guide and Intervention****Order of Operations**

**Evaluate Numerical Expressions** Numerical expressions often contain more than one operation. To evaluate them, use the rules for order of operations shown below.

<b>Order of Operations</b>	<p><b>Step 1</b> Evaluate expressions inside grouping symbols.</p> <p><b>Step 2</b> Evaluate all powers.</p> <p><b>Step 3</b> Do all multiplication and/or division from left to right.</p> <p><b>Step 4</b> Do all addition and/or subtraction from left to right.</p>
----------------------------	---

**Example 1 Evaluate each expression.****a.  $3^4$** 

$$3^4 = 3 \cdot 3 \cdot 3 \cdot 3 \quad \text{Use 3 as a factor 4 times.}$$

$$= 81 \quad \text{Multiply.}$$

**b.  $6^3$** 

$$6^3 = 6 \cdot 6 \cdot 6 \quad \text{Use 6 as a factor 3 times.}$$

$$= 216 \quad \text{Multiply.}$$

**Example 2 Evaluate each expression.****a.  $3[2 + (12 \div 3)^2]$** 

$$3[2 + (12 \div 3)^2] = 3(2 + 4^2) \quad \text{Divide 12 by 3.}$$

$$= 3(2 + 16) \quad \text{Find 4 squared.}$$

$$= 3(18) \quad \text{Add 2 and 16.}$$

$$= 54 \quad \text{Multiply 3 and 18.}$$

**b.  $\frac{3 + 2^3}{4^2 \cdot 3}$** 

$$\frac{3 + 2^3}{4^2 \cdot 3} = \frac{3 + 8}{4^2 \cdot 3} \quad \text{Evaluate power in numerator.}$$

$$= \frac{11}{4^2 \cdot 3} \quad \text{Add 3 and 8 in the numerator.}$$

$$= \frac{11}{16 \cdot 3} \quad \text{Evaluate power in denominator.}$$

$$= \frac{11}{48} \quad \text{Multiply.}$$

**Exercises****Evaluate each expression.**

1.  $5^2$

2.  $3^3$

3.  $10^4$

4.  $12^2$

5.  $8^3$

6.  $2^8$

7.  $(8 - 4) \cdot 2$

8.  $(12 + 4) \cdot 6$

9.  $10 + 8 \cdot 1$

10.  $15 - 12 \div 4$

11.  $12(20 - 17) - 3 \cdot 6$

12.  $24 \div 3 \cdot 2 - 3^2$

13.  $3^2 \div 3 + 2^2 \cdot 7 - 20 \div 5$

14.  $\frac{4 + 3^2}{12 + 1}$

15.  $250 \div [5(3 \cdot 7 + 4)]$

16.  $\frac{2 \cdot 4^2 - 8 \div 2}{(5 + 2) \cdot 2}$

17.  $\frac{4(5^2) - 4 \cdot 3}{4(4 \cdot 5 + 2)}$

18.  $\frac{5^2 - 3}{20(3) + 2(3)}$

**1-2 Study Guide and Intervention** *(continued)***Order of Operations**

**Evaluate Algebraic Expressions** Algebraic expressions may contain more than one operation. Algebraic expressions can be evaluated if the values of the variables are known. First, replace the variables with their values. Then use the order of operations to calculate the value of the resulting numerical expression.

**Example****Evaluate  $x^3 + 5(y - 3)$  if  $x = 2$  and  $y = 12$ .**

$x^3 + 5(y - 3)$	$= 2^3 + 5(12 - 3)$	Replace $x$ with 2 and $y$ with 12.
	$= 8 + 5(12 - 3)$	Evaluate $2^3$ .
	$= 8 + 5(9)$	Subtract 3 from 12.
	$= 8 + 45$	Multiply 5 and 9.
	$= 53$	Add 8 and 45.

The solution is 53.

**Exercises****Evaluate each expression if  $x = 2$ ,  $y = 3$ ,  $z = 4$ ,  $a = \frac{4}{5}$ , and  $b = \frac{3}{5}$ .**

1.  $x + 7$

2.  $3x - 5$

3.  $x + y^2$

4.  $x^3 + y + z^2$

5.  $6a + 8b$

6.  $23 - (a + b)$

7.  $\frac{y^2}{x^2}$

8.  $2xyz + 5$

9.  $x(2y + 3z)$

10.  $(10x)^2 + 100a$

11.  $\frac{3xy - 4}{7x}$

12.  $a^2 + 2b$

13.  $\frac{z^2 - y^2}{x^2}$

14.  $6xz + 5xy$

15.  $\frac{(z - y)^2}{x}$

16.  $\frac{25ab + y}{xz}$

17.  $\frac{5a^2b}{y}$

18.  $(z \div x)^2 + ax$

19.  $\left(\frac{x}{z}\right)^2 + \left(\frac{y}{z}\right)^2$

20.  $\frac{x + z}{y + 2z}$

21.  $\left(\frac{z \div x}{y}\right) + \left(\frac{y \div x}{z}\right)$

**1-3 Study Guide and Intervention****Properties of Numbers**

**Identity and Equality Properties** The identity and equality properties in the chart below can help you solve algebraic equations and evaluate mathematical expressions.

<b>Additive Identity</b>	For any number $a$ , $a + 0 = a$ .
<b>Additive Inverse</b>	For any number $a$ , $a + (-a) = a$ .
<b>Multiplicative Identity</b>	For any number $a$ , $a \cdot 1 = a$ .
<b>Multiplicative Property of 0</b>	For any number $a$ , $a \cdot 0 = 0$ .
<b>Multiplicative Inverse Property</b>	For every number $a$ , $a \neq 0$ , there is exactly one number $\frac{b}{a}$ such that $\frac{a}{b} \cdot \frac{b}{a} = 1$ .
<b>Reflexive Property</b>	For any number $a$ , $a = a$ .
<b>Symmetric Property</b>	For any numbers $a$ and $b$ , if $a = b$ , then $b = a$ .
<b>Transitive Property</b>	For any numbers $a$ , $b$ , and $c$ , if $a = b$ and $b = c$ , then $a = c$ .
<b>Substitution Property</b>	If $a = b$ , then $a$ may be replaced by $b$ in any expression.

**Example** Evaluate  $24 \cdot 1 - 8 + 5(9 \div 3 - 3)$ . Name the property used in each step.

$$\begin{aligned}
 24 \cdot 1 - 8 + 5(9 \div 3 - 3) &= 24 \cdot 1 - 8 + 5(3 - 3) && \text{Substitution; } 9 \div 3 = 3 \\
 &= 24 \cdot 1 - 8 + 5(0) && \text{Substitution; } 3 - 3 = 0 \\
 &= 24 - 8 + 5(0) && \text{Multiplicative Identity; } 24 \cdot 1 = 24 \\
 &= 24 - 8 + 0 && \text{Multiplicative Property of Zero; } 5(0) = 0 \\
 &= 16 + 0 && \text{Substitution; } 24 - 8 = 16 \\
 &= 16 && \text{Additive Identity; } 16 + 0 = 16
 \end{aligned}$$

**Exercises**

Evaluate each expression. Name the property used in each step.

1.  $2 \left[ \frac{1}{4} + \left( \frac{1}{2} \right)^2 \right]$

2.  $15 \cdot 1 - 9 + 2(15 \div 3 - 5)$

3.  $2(3 \cdot 5 \cdot 1 - 14) - 4 \cdot \frac{1}{4}$

4.  $18 \cdot 1 - 3 \cdot 2 + 2(6 \div 3 - 2)$

# 1-3 Study Guide and Intervention *(continued)*

## Properties of Numbers

**Commutative and Associative Properties** The Commutative and Associative Properties can be used to simplify expressions. The Commutative Properties state that the order in which you add or multiply numbers does not change their sum or product. The Associative Properties state that the way you group three or more numbers when adding or multiplying does not change their sum or product.

<b>Commutative Properties</b>	For any numbers $a$ and $b$ , $a + b = b + a$ and $a \cdot b = b \cdot a$ .
<b>Associative Properties</b>	For any numbers $a$ , $b$ , and $c$ , $(a + b) + c = a + (b + c)$ and $(ab)c = a(bc)$ .

**Example 1** Evaluate  $6 \cdot 2 \cdot 3 \cdot 5$  using properties of numbers. Name the property used in each step.

$$\begin{aligned}
 6 \cdot 2 \cdot 3 \cdot 5 &= 6 \cdot 3 \cdot 2 \cdot 5 && \text{Commutative Property} \\
 &= (6 \cdot 3)(2 \cdot 5) && \text{Associative Property} \\
 &= 18 \cdot 10 && \text{Multiply.} \\
 &= 180 && \text{Multiply.}
 \end{aligned}$$

The product is 180.

**Example 2** Evaluate  $8.2 + 2.5 + 2.5 + 1.8$  using properties of numbers. Name the property used in each step.

$$\begin{aligned}
 8.2 + 2.5 + 2.5 + 1.8 & \\
 &= 8.2 + 1.8 + 2.5 + 2.5 && \text{Commutative Prop.} \\
 &= (8.2 + 1.8) + (2.5 + 2.5) && \text{Associative Prop.} \\
 &= 10 + 5 && \text{Add.} \\
 &= 15 && \text{Add.}
 \end{aligned}$$

The sum is 15.

## Exercises

Evaluate each expression using properties of numbers. Name the property used in each step.

- |   |   |   |
|---|---|---|
| 1. $12 + 10 + 8 + 5$                                  | 2. $16 + 8 + 22 + 12$                                 | 3. $10 \cdot 7 \cdot 2.5$                             |
| 4. $4 \cdot 8 \cdot 5 \cdot 3$                        | 5. $12 + 20 + 10 + 5$                                 | 6. $26 + 8 + 4 + 22$                                  |
| 7. $3\frac{1}{2} + 4 + 2\frac{1}{2} + 3$              | 8. $\frac{3}{4} \cdot 12 \cdot 4 \cdot 2$             | 9. $3.5 + 2.4 + 3.6 + 4.2$                            |
| 10. $4\frac{1}{2} + 5 + \frac{1}{2} + 3$              | 11. $0.5 \cdot 2.8 \cdot 4$                           | 12. $2.5 + 2.4 + 2.5 + 3.6$                           |
| 13. $\frac{4}{5} \cdot 18 \cdot 25 \cdot \frac{2}{9}$ | 14. $32 \cdot \frac{1}{5} \cdot \frac{1}{2} \cdot 10$ | 15. $\frac{1}{4} \cdot 7 \cdot 16 \cdot \frac{1}{7}$  |
| 16. $3.5 + 8 + 2.5 + 2$                               | 17. $18 \cdot 8 \cdot \frac{1}{2} \cdot \frac{1}{9}$  | 18. $\frac{3}{4} \cdot 10 \cdot 16 \cdot \frac{1}{2}$ |

**1-4 Study Guide and Intervention*****The Distributive Property***

**Evaluate Expressions** The Distributive Property can be used to help evaluate expressions.

<b>Distributive Property</b>	For any numbers $a$ , $b$ , and $c$ , $a(b + c) = ab + ac$ and $(b + c)a = ba + ca$ and $a(b - c) = ab - ac$ and $(b - c)a = ba - ca$ .
------------------------------	---

**Example 1** Use the Distributive Property to rewrite  $6(8 + 10)$ . Then evaluate.

$$\begin{aligned} 6(8 + 10) &= 6 \cdot 8 + 6 \cdot 10 && \text{Distributive Property} \\ &= 48 + 60 && \text{Multiply.} \\ &= 108 && \text{Add.} \end{aligned}$$

**Example 2** Use the Distributive Property to rewrite  $-2(3x^2 + 5x + 1)$ . Then simplify.

$$\begin{aligned} -2(3x^2 + 5x + 1) &= -2(3x^2) + (-2)(5x) + (-2)(1) && \text{Distributive Property} \\ &= -6x^2 + (-10x) + (-2) && \text{Multiply.} \\ &= -6x^2 - 10x - 2 && \text{Simplify.} \end{aligned}$$

**Exercises**

Use the Distributive Property to rewrite each expression. Then evaluate.

- |                                      |                            |                                      |
|--------------------------------------|----------------------------|--------------------------------------|
| 1. $20(31)$                          | 2. $12 \cdot 4\frac{1}{2}$ | 3. $5(311)$                          |
| 4. $5(4x - 9)$                       | 5. $3(8 - 2x)$             | 6. $12\left(6 - \frac{1}{2}x\right)$ |
| 7. $12\left(2 + \frac{1}{2}x\right)$ | 8. $\frac{1}{4}(12 - 4t)$  | 9. $3(2x - y)$                       |
| 10. $2(3x + 2y - z)$                 | 11. $(x - 2)y$             | 12. $2(3a - 2b + c)$                 |
| 13. $\frac{1}{4}(16x - 12y + 4z)$    | 14. $(2 - 3x + x^2)3$      | 15. $-2(2x^2 + 3x + 1)$              |

**1-4 Study Guide and Intervention** *(continued)***The Distributive Property**

**Simplify Expressions** A **term** is a number, a variable, or a product or quotient of numbers and variables. **Like terms** are terms that contain the same variables, with corresponding variables having the same powers. The Distributive Property and properties of equalities can be used to simplify expressions. An expression is in **simplest form** if it is replaced by an **equivalent** expression with no like terms or parentheses.

**Example** Simplify  $4(a^2 + 3ab) - ab$ .

$$\begin{aligned}
 4(a^2 + 3ab) - ab &= 4(a^2 + 3ab) - 1ab && \text{Multiplicative Identity} \\
 &= 4a^2 + 12ab - 1ab && \text{Distributive Property} \\
 &= 4a^2 + (12 - 1)ab && \text{Distributive Property} \\
 &= 4a^2 + 11ab && \text{Substitution}
 \end{aligned}$$

**Exercises**

Simplify each expression. If not possible, write *simplified*.

1.  $12a - a$

2.  $3x + 6x$

3.  $3x - 1$

4.  $20a + 12a - 8$

5.  $3x^2 + 2x^2$

6.  $-6x + 3x^2 + 10x^2$

7.  $2p + \frac{1}{2}q$

8.  $10xy - 4(xy + xy)$

9.  $21a + 18a + 31b - 3b$

10.  $4x + \frac{1}{4}(16x - 20y)$

11.  $2 - 1 - 6x + x^2$

12.  $4x^2 + 3x^2 + 2x$

Write an algebraic expression for each verbal expression. Then simplify, indicating the properties used.

13. six times the difference of  $2a$  and  $b$ , increased by  $4b$

14. two times the sum of  $x$  squared and  $y$  squared, increased by three times the sum of  $x$  squared and  $y$  squared



**1-5 Study Guide and Intervention****Equations**

**Solve Equations** A mathematical sentence with one or more variables is called an **open sentence**. Open sentences are **solved** by finding replacements for the variables that result in true sentences. The set of numbers from which replacements for a variable may be chosen is called the **replacement set**. The set of all replacements for the variable that result in true statements is called the **solution set** for the variable. A sentence that contains an equal sign, =, is called an **equation**.

**Example 1** Find the solution set of  $3a + 12 = 39$  if the replacement set is {6, 7, 8, 9, 10}.

Replace  $a$  in  $3a + 12 = 39$  with each value in the replacement set.

$$3(6) + 12 \stackrel{?}{=} 39 \rightarrow 30 \neq 39 \quad \text{false}$$

$$3(7) + 12 \stackrel{?}{=} 39 \rightarrow 33 \neq 39 \quad \text{false}$$

$$3(8) + 12 \stackrel{?}{=} 39 \rightarrow 36 \neq 39 \quad \text{false}$$

$$3(9) + 12 \stackrel{?}{=} 39 \rightarrow 39 = 39 \quad \text{true}$$

$$3(10) + 12 \stackrel{?}{=} 39 \rightarrow 42 \neq 39 \quad \text{false}$$

Since  $a = 9$  makes the equation  $3a + 12 = 39$  true, the solution is 9.

The solution set is {9}.

**Example 2** Solve  $\frac{2(3 + 1)}{3(7 - 4)} = b$ .

$$\frac{2(3 + 1)}{3(7 - 4)} = b \quad \text{Original equation}$$

$$\frac{2(4)}{3(3)} = b \quad \text{Add in the numerator; subtract in the denominator.}$$

$$\frac{8}{9} = b \quad \text{Simplify.}$$

The solution is  $\frac{8}{9}$ .

**Exercises**

Find the solution of each equation if the replacement sets are  $x = \left\{\frac{1}{4}, \frac{1}{2}, 1, 2, 3\right\}$  and  $y = \{2, 4, 6, 8\}$ .

1.  $x + \frac{1}{2} = \frac{5}{2}$

2.  $x + 8 = 11$

3.  $y - 2 = 6$

4.  $x^2 - 1 = 8$

5.  $y^2 - 2 = 34$

6.  $x^2 + 5 = 5\frac{1}{16}$

7.  $2(x + 3) = 7$

8.  $(y + 1)^2 = \frac{9}{4}$

9.  $y^2 + y = 20$

Solve each equation.

10.  $a = 2^3 - 1$

11.  $n = 6^2 - 4^2$

12.  $w = 6^2 \cdot 3^2$

13.  $\frac{1}{4} + \frac{5}{8} = k$

14.  $\frac{18 - 3}{2 + 3} = p$

15.  $t = \frac{15 - 6}{27 - 24}$

16.  $18.4 - 3.2 = m$

17.  $k = 9.8 + 5.7$

18.  $c = 3\frac{1}{2} + 2\frac{1}{4}$

**1-5 Study Guide and Intervention** *(continued)***Equations**

**Solve Equations with Two Variables** Some equations contain two variables. It is often useful to make a table of values in which you can use substitution to find the corresponding values of the second variable.

**Example**

**MUSIC DOWNLOADS** Emily belongs to an Internet music service that charges \$5.99 per month and \$0.89 per song. Write and solve an equation to find the total amount Emily spends if she downloads 10 songs this month.

The cost of the music service is a flat rate. The variable is the number of songs she downloads. The total cost is the price of the service plus \$0.89 times the number of songs.

$$C = 0.89n + 5.99$$

To find the total cost for the month, substitute 10 for  $n$  in the equation.

$C = 0.89n + 5.99$	Original equation
$= 0.89(10) + 5.99$	Substitute 10 for $n$
$= 8.90 + 5.99$	Multiply.
$= 14.89$	

Emily spent \$14.89 on music downloads in one month.

**Exercises**

- 1. AUTO REPAIR** A mechanic repairs Mr. Estes' car. The amount for parts is \$48.00 and the rate for the mechanic is \$40.00 per hour. Write and solve an equation to find the total cost of repairs to Mr. Estes' car if the mechanic works for 1.5 hours.
  
- 2. SHIPPING FEES** Mr. Moore purchases an inflatable kayak weighing 30 pounds from an online company. The standard rate to ship his purchase is \$2.99 plus \$0.85 per pound. Write and solve an equation to find the total amount Mr. Moore will pay to have the kayak shipped to his home.
  
- 3. SOUND** The speed of sound is 1088 feet per second at sea level at 32° F. Write and solve an equation to find the distance sound travels in 8 seconds under these conditions.
  
- 4. VOLLEYBALL** Your town decides to build a volleyball court. If the court is approximately 40 by 70 feet and its surface is of sand, one foot deep, the court will require about 166 tons of sand. A local sand pit sells sand for \$11.00 per ton with a delivery charge is \$3.00 per ton. Write and solve an equation to find the total cost of the sand for this court.

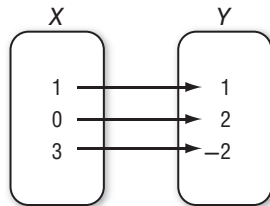
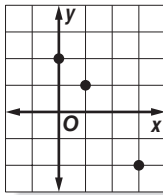
# 1-6 Study Guide and Intervention

## Representing Relations

**Represent a Relation** A **relation** is a set of ordered pairs. A relation can be represented by a set of ordered pairs, a table, a graph, or a **mapping**. A mapping illustrates how each element of the domain is paired with an element in the range. The set of first numbers of the ordered pairs is the **domain**. The set of second numbers of the ordered pairs is the **range** of the relation.

**Example** a. Express the relation  $\{(1, 1), (0, 2), (3, -2)\}$  as a table, a graph, and a mapping.

x	y
1	1
0	2
3	-2



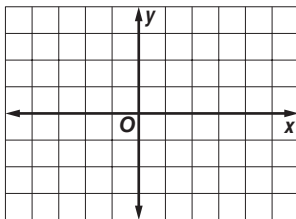
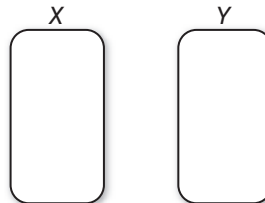
b. Determine the domain and the range of the relation.

The domain for this relation is  $\{0, 1, 3\}$ . The range for this relation is  $\{-2, 1, 2\}$ .

### Exercises

1A. Express the relation  $\{(-2, -1), (3, 3), (4, 3)\}$  as a table, a graph, and a mapping.

x	y



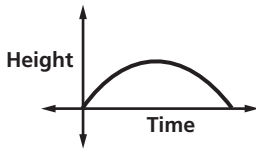
1B. Determine the domain and the range of the relation.

# 1-6 Study Guide and Intervention *(continued)*

## Representing Relations

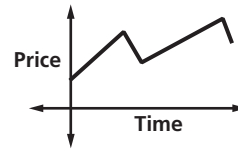
**Graphs of a Relation** The value of the variable in a relation that is subject to choice is called the **independent variable**. The variable with a value that is dependent on the value of the independent variable is called the **dependent variable**. These relations can be graphed without a scale on either axis, and interpreted by analyzing the shape.

**Example 1** The graph below represents the height of a football after it is kicked downfield. Identify the independent and the dependent variable for the relation. Then describe what happens in the graph.



The independent variable is time, and the dependent variable is height. The football starts on the ground when it is kicked. It gains altitude until it reaches a maximum height, then it loses altitude until it falls to the ground.

**Example 2** The graph below represents the price of stock over time. Identify the independent and dependent variable for the relation. Then describe what happens in the graph.

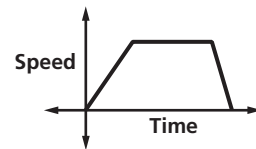


The independent variable is time and the dependent variable is price. The price increases steadily, then it falls, then increases, then falls again.

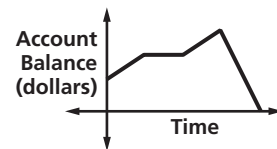
### Exercises

Identify the independent and dependent variables for each relation. Then describe what is happening in each graph.

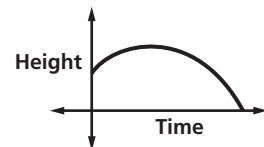
1. The graph represents the speed of a car as it travels to the grocery store.



2. The graph represents the balance of a savings account over time.



3. The graph represents the height of a baseball after it is hit.



# 1-7 Study Guide and Intervention

## Representing Functions

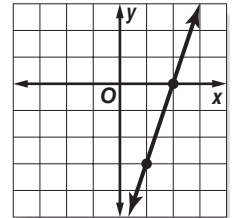
**Identify Functions** Relations in which each element of the domain is paired with exactly one element of the range are called **functions**.

**Example 1** Determine whether the relation  $\{(6, -3), (4, 1), (7, -2), (-3, 1)\}$  is a function. Explain.

Since each element of the domain is paired with exactly one element of the range, this relation is a function.

**Example 2** Determine whether  $3x - y = 6$  is a function.

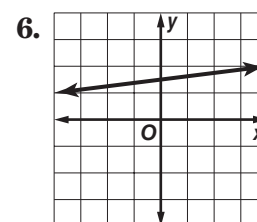
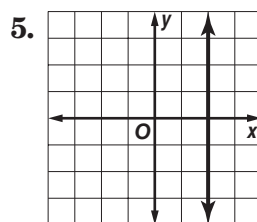
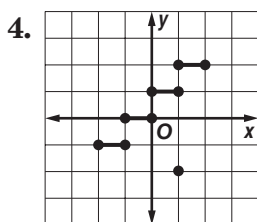
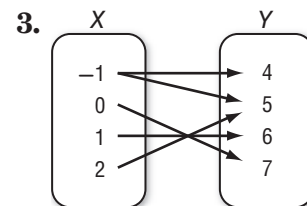
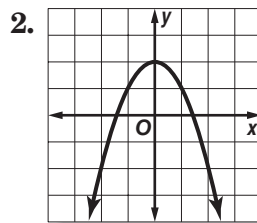
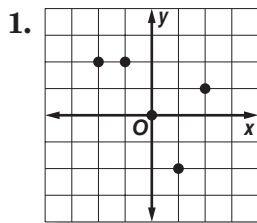
Since the equation is in the form  $Ax + By = C$ , the graph of the equation will be a line, as shown at the right.



If you draw a vertical line through each value of  $x$ , the vertical line passes through just one point of the graph. Thus, the line represents a function.

### Exercises

Determine whether each relation is a function.



7.  $\{(4, 2), (2, 3), (6, 1)\}$

8.  $\{(-3, -3), (-3, 4), (-2, 4)\}$

9.  $\{(-1, 0), (1, 0)\}$

10.  $-2x + 4y = 0$

11.  $x^2 + y^2 = 8$

12.  $x = -4$

**1-7 Study Guide and Intervention** *(continued)***Representing Functions**

**Find Function Values** Equations that are functions can be written in a form called **function notation**. For example,  $y = 2x - 1$  can be written as  $f(x) = 2x - 1$ . In the function,  $x$  represents the elements of the domain, and  $f(x)$  represents the elements of the range. Suppose you want to find the value in the range that corresponds to the element 2 in the domain. This is written  $f(2)$  and is read “ $f$  of 2.” The value of  $f(2)$  is found by substituting 2 for  $x$  in the equation.

**Example** If  $f(x) = 3x - 4$ , find each value.

a.  $f(3)$

$$\begin{aligned} f(3) &= 3(3) - 4 && \text{Replace } x \text{ with } 3. \\ &= 9 - 4 && \text{Multiply.} \\ &= 5 && \text{Simplify.} \end{aligned}$$

b.  $f(-2)$

$$\begin{aligned} f(-2) &= 3(-2) - 4 && \text{Replace } x \text{ with } -2. \\ &= -6 - 4 && \text{Multiply.} \\ &= -10 && \text{Simplify.} \end{aligned}$$

**Exercises**

If  $f(x) = 2x - 4$  and  $g(x) = x^2 - 4x$ , find each value.

1.  $f(4)$

2.  $g(2)$

3.  $f(-5)$

4.  $g(-3)$

5.  $f(0)$

6.  $g(0)$

7.  $f(3) - 1$

8.  $f\left(\frac{1}{4}\right)$

9.  $g\left(\frac{1}{4}\right)$

10.  $f(a^2)$

11.  $f(k + 1)$

12.  $g(2n)$

13.  $f(3x)$

14.  $f(2) + 3$

15.  $g(-4)$

**1-8 Study Guide and Intervention****Logical Reasoning and Counterexamples**

**Conditional Statements** A **conditional statement** is a statement of the form *If A, then B*. Statements in this form are called **if-then statements**. The part of the statement immediately following the word *if* is called the **hypothesis**. The part of the statement immediately following the word *then* is called the **conclusion**.

**Example 1** Identify the hypothesis and conclusion of each statement.

- a. **If it is Wednesday, then Jerri has aerobics class.**

Hypothesis: it is Wednesday  
Conclusion: Jerri has aerobics class

- b. **If  $2x - 4 < 10$ , then  $x < 7$ .**

Hypothesis:  $2x - 4 < 10$   
Conclusion:  $x < 7$

**Example 2** Identify the hypothesis and conclusion of each statement. Then write the statement in if-then form.

- a. **You and Marylynn can watch a movie on Thursday.**

Hypothesis: it is Thursday  
Conclusion: you and Marylynn can watch a movie  
If it is Thursday, then you and Marylynn can watch a movie.

- b. **For a number  $a$  such that  $3a + 2 = 11$ ,  $a = 3$ .**

Hypothesis:  $3a + 2 = 11$   
Conclusion:  $a = 3$   
If  $3a + 2 = 11$ , then  $a = 3$ .

**Exercises**

Identify the hypothesis and conclusion of each statement.

- If it is April, then it might rain.
- If you are a sprinter, then you can run fast.
- If  $12 - 4x = 4$ , then  $x = 2$ .
- If it is Monday, then you are in school.
- If the area of a square is 49, then the square has side length 7.

Identify the hypothesis and conclusion of each statement. Then write the statement in if-then form.

- A quadrilateral with equal sides is a rhombus.
- A number that is divisible by 8 is also divisible by 4.
- Karlyn goes to the movies when she does not have homework.

**1-8 Study Guide and Intervention** *(continued)***Logical Reasoning and Counterexamples**

**Deductive Reasoning and Counterexamples** Deductive reasoning is the process of using facts, rules, definitions, or properties to reach a valid conclusion. To show that a conditional statement is false, use a **counterexample**, one example for which the conditional statement is false. You need to find only one counterexample for the statement to be false.

**Example 1** Determine a valid conclusion from the statement *If two numbers are even, then their sum is even* for the given conditions. If a valid conclusion does not follow, write *no valid conclusion* and explain why.

a. The two numbers are 4 and 8.

4 and 8 are even, and  $4 + 8 = 12$ . Conclusion: The sum of 4 and 8 is even.

b. The sum of two numbers is 20.

Consider 13 and 7.  $13 + 7 = 20$

However,  $12 + 8$ ,  $19 + 1$ , and  $18 + 2$  all equal 20. There is no way to determine the two numbers. Therefore there is no valid conclusion.

**Example 2** Provide a counterexample to this conditional statement. *If you use a calculator for a math problem, then you will get the answer correct.*

Counterexample: If the problem is  $475 \div 5$  and you press  $475 - 5$ , you will not get the correct answer.

**Exercises**

Determine a valid conclusion that follows from the statement *If the last digit of a number is 0 or 5, then the number is divisible by 5* for the given conditions. If a valid conclusion does not follow, write *no valid conclusion* and explain why.

1. The number is 120.
2. The number is a multiple of 4.
3. The number is 101.

Find a counterexample for each conditional statement.

4. If Susan is in school, then she is in math class.
5. If a number is a square, then it is divisible by 2.
6. If a quadrilateral has 4 right angles, then the quadrilateral is a square.
7. If you were born in New York, then you live in New York.
8. If three times a number is greater than 15, then the number must be greater than six.
9. If  $3x - 2 \leq 10$ , then  $x < 4$ .



## 2-1 Study Guide and Intervention

### Writing Equations

**Write Equations** Writing equations is one strategy for solving problems. You can use a variable to represent an unspecified number or measure referred to in a problem. Then you can write a verbal expression as an algebraic expression.

**Example 1** Translate each sentence into an equation or a formula.

- a. Ten times a number  $x$  is equal to 2.8 times the difference  $y$  minus  $z$ .

$$10 \times x = 2.8 \times (y - z)$$

The equation is  $10x = 2.8(y - z)$ .

- b. A number  $m$  minus 8 is the same as a number  $n$  divided by 2.

$$m - 8 = n \div 2$$

The equation is  $m - 8 = \frac{n}{2}$ .

- c. The area of a rectangle equals the length times the width. Translate this sentence into a formula.

Let  $A$  = area,  $\ell$  = length, and  $w$  = width.

Formula: *Area equals length times width.*

$$A = \ell \times w$$

The formula for the area of a rectangle is  $A = \ell w$ .

**Example 2** Use the Four-Step Problem-Solving Plan.

**POPULATION** The population of the United States in July 2007 was about 301,000,000, and the land area of the United States is about 3,500,000 square miles. Find the average number of people per square mile in the United States.

**Step 1** *Explore* You know that there are 301,000,000 people. You want to know the number of people per square mile.

**Step 2** *Plan* Write an equation to represent the situation. Let  $p$  represent the number of people per square mile.

$$3,500,000 \times p = 301,000,000$$

**Step 3** *Solve*  $3,500,000 \times p = 301,000,000$ .

$$3,500,000p = 301,000,000 \quad \text{Divide each side by } 3,500,000.$$

$$p = 86$$

There are 86 people per square mile.

**Step 4** *Check* If there are 86 people per square mile and there are 3,500,000 square miles,  $86 \times 3,500,000 = 301,000,000$ .

The answer makes sense.

### Exercises

Translate each sentence into an equation or formula.

- Three times a number  $t$  minus twelve equals forty.
- One-half of the difference of  $a$  and  $b$  is 54.
- Three times the sum of  $d$  and 4 is 32.
- The area  $A$  of a circle is the product of  $\pi$  and the radius  $r$  squared.
- WEIGHT LOSS** Lou wants to lose weight to audition for a part in a play. He weighs 160 pounds now. He wants to weigh 150 pounds.
  - If  $p$  represents the number of pounds he wants to lose, write an equation to represent this situation.
  - How many pounds does he need to lose to reach his goal?

**2-1 Study Guide and Intervention** *(continued)***Writing Equations****Write Verbal Sentences** You can translate equations into verbal sentences.**Example** Translate each equation into a sentence.

**a.**  $4n - 8 = 12$ .

$$4n \quad - \quad 8 \quad = \quad 12$$

Four times  $n$  minus eight equals twelve.

**b.**  $a^2 + b^2 = c^2$

$$a^2 + b^2 \quad = \quad c^2$$

The sum of the squares of  $a$  and  $b$  is equal to the square of  $c$ .**Exercises****Translate each equation into a sentence.**

1.  $4a - 5 = 23$

2.  $10 + k = 4k$

3.  $6xy = 24$

4.  $x^2 + y^2 = 8$

5.  $p + 3 = 2p$

6.  $b = \frac{1}{3}(h - 1)$

7.  $100 - 2x = 80$

8.  $3(g + h) = 12$

9.  $p^2 - 2p = 9$

10.  $C = \frac{5}{9}(F - 32)$

11.  $V = \frac{1}{3}Bh$

12.  $A = \frac{1}{2}hb$

**2-2 Study Guide and Intervention****Solving One-Step Equations**

**Solve Equations Using Addition and Subtraction** If the same number is added to each side of an equation, the resulting equation is equivalent to the original one. In general if the original equation involves subtraction, this property will help you solve the equation. Similarly, if the same number is subtracted from each side of an equation, the resulting equation is equivalent to the original one. This property will help you solve equations involving addition.

<b>Addition Property of Equality</b>	For any numbers $a$ , $b$ , and $c$ , if $a = b$ , then $a + c = b + c$ .
<b>Subtraction Property of Equality</b>	For any numbers $a$ , $b$ , and $c$ , if $a = b$ , then $a - c = b - c$ .

**Example 1** Solve  $m - 32 = 18$ .

$$m - 32 = 18 \quad \text{Original equation}$$

$$m - 32 + 32 = 18 + 32 \quad \text{Add 32 to each side.}$$

$$m = 50 \quad \text{Simplify.}$$

The solution is 50.

**Example 2** Solve  $22 + p = -12$ .

$$22 + p = -12 \quad \text{Original equation}$$

$$22 + p - 22 = -12 - 22 \quad \text{Subtract 22 from each side.}$$

$$p = -34 \quad \text{Simplify.}$$

The solution is  $-34$ .

**Exercises**

Solve each equation. Check your solution.

1.  $h - 3 = -2$

2.  $m - 8 = -12$

3.  $p - 5 = 15$

4.  $20 = y - 8$

5.  $k - 0.5 = 2.3$

6.  $w - \frac{1}{2} = \frac{5}{8}$

7.  $h - 18 = -17$

8.  $-12 = -24 + k$

9.  $j - 0.2 = 1.8$

10.  $b - 40 = -40$

11.  $m - (-12) = 10$

12.  $w - \frac{3}{2} = \frac{1}{4}$

13.  $x + 12 = 6$

14.  $w + 2 = -13$

15.  $-17 = b + 4$

16.  $k + (-9) = 7$

17.  $-3.2 = \ell + (-0.2)$

18.  $-\frac{3}{8} + x = \frac{5}{8}$

19.  $19 + h = -4$

20.  $-12 = k + 24$

21.  $j + 1.2 = 2.8$

22.  $b + 80 = -80$

23.  $m + (-8) = 2$

24.  $w + \frac{3}{2} = \frac{5}{8}$

## 2-2 Study Guide and Intervention *(continued)*

### Solving One-Step Equations

**Solve Equations Using Multiplication and Division** If each side of an equation is multiplied by the same number, the resulting equation is equivalent to the given one. You can use the property to solve equations involving multiplication and division. To solve equations with multiplication and division, you can also use the Division Property of Equality. If each side of an equation is divided by the same number, the resulting equation is true.

<b>Multiplication Property of Equality</b>	For any numbers $a$ , $b$ , and $c$ , if $a = b$ , then $ac = bc$ .
<b>Division Property of Equality</b>	For any numbers $a$ , $b$ , and $c$ , with $c \neq 0$ , if $a = b$ , then $\frac{a}{c} = \frac{b}{c}$ .

#### Example 1 Solve $3\frac{1}{2}p = 1\frac{1}{2}$ .

$$3\frac{1}{2}p = 1\frac{1}{2}$$

Original equation

$$\frac{7}{2}p = \frac{3}{2}$$

Rewrite each mixed number as an improper fraction

$$\frac{2}{7}\left(\frac{7}{2}p\right) = \frac{2}{7}\left(\frac{3}{2}\right)$$

Multiply each side by  $\frac{2}{7}$ .

$$p = \frac{3}{7}$$

Simplify.

The solution is  $\frac{3}{7}$ .

#### Example 2 Solve $-5n = 60$ .

$$-5n = 60$$

Original equation

$$\frac{-5n}{-5} = \frac{60}{-5}$$

Divide each side by  $-5$ .

$$n = -12$$

Simplify.

The solution is  $-12$ .

### Exercises

Solve each equation. Check your solution.

1.  $\frac{h}{3} = -2$

2.  $\frac{1}{8}m = 6$

3.  $\frac{1}{5}p = \frac{3}{5}$

4.  $5 = \frac{y}{12}$

5.  $-\frac{1}{4}k = -2.5$

6.  $-\frac{m}{8} = \frac{5}{8}$

7.  $-1\frac{1}{2}h = 4$

8.  $-12 = -\frac{3}{2}k$

9.  $\frac{j}{3} = \frac{2}{5}$

10.  $-3\frac{1}{3}b = 5$

11.  $\frac{7}{10}m = 10$

12.  $\frac{p}{5} = -\frac{1}{4}$

13.  $3h = -42$

14.  $8m = 16$

15.  $-3t = 51$

16.  $-3r = -24$

17.  $8k = -64$

18.  $-2m = 16$

19.  $12h = 4$

20.  $-2.4p = 7.2$

21.  $0.5j = 5$

22.  $-25 = 5m$

23.  $6m = 15$

24.  $-1.5p = -75$

**2-3 Study Guide and Intervention****Solving Multi-Step Equations**

**Work Backward** Working backward is one of many problem-solving strategies that you can use to solve problems. To work backward, start with the result given at the end of a problem and undo each step to arrive at the beginning number.

**Example 1** A number is divided by 2, and then 8 is subtracted from the quotient. The result is 16. What is the number?

Solve the problem by working backward.

The final number is 16. Undo subtracting 8 by adding 8 to get 24. To undo dividing 24 by 2, multiply 24 by 2 to get 48.

The original number is 48.

**Example 2** A bacteria culture doubles each half hour. After 3 hours, there are 6400 bacteria. How many bacteria were there to begin with?

Solve the problem by working backward.

The bacteria have grown for 3 hours. Since there are 2 one-half hour periods in one hour, in 3 hours there are 6 one-half hour periods. Since the bacteria culture has grown for 6 time periods, it has doubled 6 times. Undo the doubling by halving the number of bacteria 6 times.

$$6400 \times \frac{1}{2} \times \frac{1}{2} \times \frac{1}{2} \times \frac{1}{2} \times \frac{1}{2} \times \frac{1}{2} = 6400 \times \frac{1}{64}$$

$$= 100$$

There were 100 bacteria to begin with.

**Exercises**

Solve each problem by working backward.

1. A number is divided by 3, and then 4 is added to the quotient. The result is 8. Find the number.
2. A number is multiplied by 5, and then 3 is subtracted from the product. The result is 12. Find the number.
3. Eight is subtracted from a number, and then the difference is multiplied by 2. The result is 24. Find the number.
4. Three times a number plus 3 is 24. Find the number.
5. **CAR RENTAL** Angela rented a car for \$29.99 a day plus a one-time insurance cost of \$5.00. Her bill was \$124.96. For how many days did she rent the car?
6. **MONEY** Mike withdrew an amount of money from his bank account. He spent one fourth for gasoline and had \$90 left. How much money did he withdraw?

**2-3 Study Guide and Intervention** *(continued)***Solving Multi-Step Equations**

**Solve Multi-Step Equations** To solve equations with more than one operation, often called **multi-step equations**, undo operations by working backward. Reverse the usual order of operations as you work.

**Example** Solve  $5x + 3 = 23$ .

$5x + 3 = 23$	Original equation.
$5x + 3 - 3 = 23 - 3$	Subtract 3 from each side.
$5x = 20$	Simplify.
$\frac{5x}{5} = \frac{20}{5}$	Divide each side by 5.
$x = 4$	Simplify.

**Exercises**

Solve each equation. Check your solution.

1.  $5x + 2 = 27$

2.  $6x + 9 = 27$

3.  $5x + 16 = 51$

4.  $14n - 8 = 34$

5.  $0.6x - 1.5 = 1.8$

6.  $\frac{7}{8}p - 4 = 10$

7.  $16 = \frac{d - 12}{14}$

8.  $8 + \frac{3n}{12} = 13$

9.  $\frac{g}{-5} + 3 = -13$

10.  $\frac{4b + 8}{-2} = 10$

11.  $0.2x - 8 = -2$

12.  $3.2y - 1.8 = 3$

13.  $-4 = \frac{7x - (-1)}{-8}$

14.  $8 = -12 + \frac{k}{-4}$

15.  $0 = 10y - 40$

Write an equation and solve each problem.

16. Find three consecutive integers whose sum is 96.

17. Find two consecutive odd integers whose sum is 176.

18. Find three consecutive integers whose sum is  $-93$ .

**2-4 Study Guide and Intervention****Solving Equations with the Variable on Each Side**

**Variables on Each Side** To solve an equation with the same variable on each side, first use the Addition or the Subtraction Property of Equality to write an equivalent equation that has the variable on just one side of the equation. Then solve the equation.

**Example 1** Solve  $5y - 8 = 3y + 12$ .

$$\begin{aligned} 5y - 8 &= 3y + 12 \\ 5y - 8 - 3y &= 3y + 12 - 3y \\ 2y - 8 &= 12 \\ 2y - 8 + 8 &= 12 + 8 \\ 2y &= 20 \\ \frac{2y}{2} &= \frac{20}{2} \\ y &= 10 \end{aligned}$$

The solution is 10.

**Example 2** Solve  $-11 - 3y = 8y + 1$ .

$$\begin{aligned} -11 - 3y &= 8y + 1 \\ -11 - 3y + 3y &= 8y + 1 + 3y \\ -11 &= 11y + 1 \\ -11 - 1 &= 11y + 1 - 1 \\ -12 &= 11y \\ \frac{-12}{11} &= \frac{11y}{11} \\ -1\frac{1}{11} &= y \end{aligned}$$

The solution is  $-1\frac{1}{11}$ .

**Exercises**

Solve each equation. Check your solution.

1.  $6 - b = 5b + 30$

2.  $5y - 2y = 3y + 2$

3.  $5x + 2 = 2x - 10$

4.  $4n - 8 = 3n + 2$

5.  $1.2x + 4.3 = 2.1 - x$

6.  $4.4m + 6.2 = 8.8m - 1.8$

7.  $\frac{1}{2}b + 4 = \frac{1}{8}b + 88$

8.  $\frac{3}{4}k - 5 = \frac{1}{4}k - 1$

9.  $8 - 5p = 4p - 1$

10.  $4b - 8 = 10 - 2b$

11.  $0.2x - 8 = -2 - x$

12.  $3y - 1.8 = 3y - 1.8$

13.  $-4 - 3x = 7x - 6$

14.  $8 + 4k = -10 + k$

15.  $20 - a = 10a - 2$

16.  $\frac{2}{3}n + 8 = \frac{1}{2}n + 2$

17.  $\frac{2}{5}y - 8 = 9 - \frac{3}{5}y$

18.  $-4r + 5 = 5 - 4r$

19.  $-4 - 3x = 6x - 6$

20.  $18 - 4k = -10 - 4k$

21.  $12 + 2y = 10y - 12$

**2-4 Study Guide and Intervention** *(continued)***Solving Equations with the Variable on Each Side**

**Grouping Symbols** When solving equations that contain grouping symbols, first use the Distributive Property to eliminate grouping symbols. Then solve.

**Example** Solve  $4(2a - 1) = -10(a - 5)$ .

$4(2a - 1) = -10(a - 5)$	Original equation
$8a - 4 = -10a + 50$	Distributive Property
$8a - 4 + 10a = -10a + 50 + 10a$	Add $10a$ to each side.
$18a - 4 = 50$	Simplify.
$18a - 4 + 4 = 50 + 4$	Add 4 to each side.
$18a = 54$	Simplify.
$\frac{18a}{18} = \frac{54}{18}$	Divide each side by 18.
$a = 3$	Simplify.

The solution is 3.

**Exercises**

Solve each equation. Check your solution.

1.  $-3(x + 5) = 3(x - 1)$

2.  $2(7 + 3t) = -t$

3.  $3(a + 1) - 5 = 3a - 2$

4.  $75 - 9g = 5(-4 + 2g)$

5.  $5(f + 2) = 2(3 - f)$

6.  $4(p + 3) = 36$

7.  $18 = 3(2t + 2)$

8.  $3(d - 8) = 3d$

9.  $5(p + 3) + 9 = 3(p - 2) + 6$

10.  $4(b - 2) = 2(5 - b)$

11.  $1.2(x - 2) = 2 - x$

12.  $\frac{3x + y}{4} = \frac{-y}{8}$

13.  $\frac{a - 8}{12} = \frac{2a + 5}{3}$

14.  $2(4 + 2k) + 10 = k$

15.  $2(w - 1) + 4 = 4(w + 1)$

16.  $6(n - 1) = 2(2n + 4)$

17.  $2[2 + 3(y - 1)] = 22$

18.  $-4(r + 2) = 4(2 - 4r)$

19.  $-3(x - 8) = 24$

20.  $4(4 - 4k) = -10 - 16k$

21.  $6(2 - 2y) = 5(2y - 2)$



**2-5 Study Guide and Intervention*****Solving Equations Involving Absolute Value***

**Absolute Value Expressions** Expressions with absolute values define an upper and lower range in which a value must lie. Expressions involving absolute value can be evaluated using the given value for the variable.

**Example** Evaluate  $|t - 5| - 7$  if  $t = 3$ .

$ t - 5  - 7 =  3 - 5  - 7$	Replace $t$ with 3.
$=  -2  - 7$	$3 - 5 = -2$
$= 2 - 7$	$ -2  = 2$
$= -5$	Simplify.

**Exercises**

Evaluate each expression if  $r = -2$ ,  $n = -3$ , and  $t = 3$ .

1.  $|8 - t| + 3$

2.  $|t - 3| - 7$

3.  $5 + |3 - n|$

4.  $|r + n| - 7$

5.  $|n - t| + 4$

6.  $-|r + n + t|$

Evaluate each expression if  $n = 2$ ,  $q = -1.5$ ,  $r = -3$ ,  $v = -8$ ,  $w = 4.5$ , and  $x = 4$ .

7.  $|2q + r|$

8.  $10 - |2n + v|$

9.  $|3x - 2w| - q$

10.  $v - |3n + x|$

11.  $1 + |5q - w|$

12.  $2|3r - v|$

13.  $|-2x + 5n| + (n - x)$

14.  $4w - |2r + v|$

15.  $3|w - n| - 5|q - r|$

## 2-5 Study Guide and Intervention *(continued)*

### Solving Equations Involving Absolute Value

**Absolute Value Equations** When solving equations that involve absolute value, there are two cases to consider.

**Case 1:** The value inside the absolute value symbols is positive.

**Case 2:** The value inside the absolute value symbols is negative.

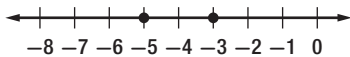
**Example 1** Solve  $|x + 4| = 1$ . Then graph the solution set.

Write  $|x + 4| = 1$  as  $x + 4 = 1$  or  $x + 4 = -1$ .

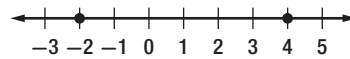
$$\begin{array}{lcl} x + 4 = 1 & \text{or} & x + 4 = -1 \\ x + 4 - 4 = 1 - 4 & & x + 4 = -1 \\ x = -3 & & x + 4 - 4 = -1 - 4 \\ & & x = -5 \end{array}$$

The solution set is  $\{-5, -3\}$ .

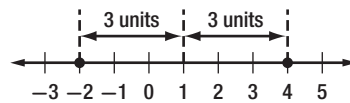
The graph is shown below.



**Example 2** Write an equation involving absolute value for the graph.



Find the point that is the same distance from  $-2$  as it is from  $4$ .



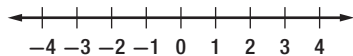
The distance from  $1$  to  $-2$  is  $3$  units. The distance from  $1$  to  $4$  is  $3$  units.

So,  $|x - 1| = 3$ .

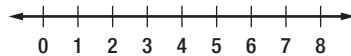
### Exercises

Solve each equation. Then graph the solution set.

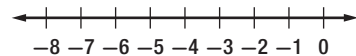
1.  $|y| = 3$



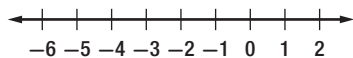
2.  $|x - 4| = 4$



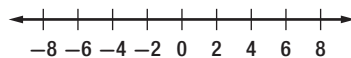
3.  $|y + 3| = 2$



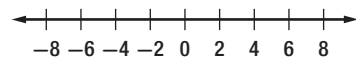
4.  $|b + 2| = 3$



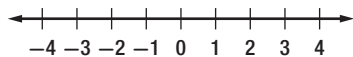
5.  $|w - 2| = 5$




6.  $|t + 2| = 4$



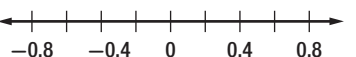
7.  $|2x| = 8$



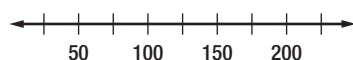
8.  $|5y - 2| = 7$



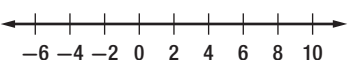
9.  $|p - 0.2| = 0.5$



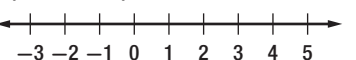
10.  $|d - 100| = 50$



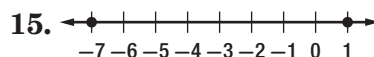
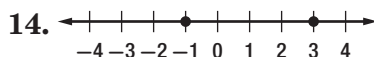
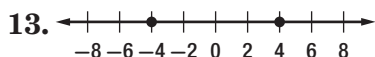
11.  $|2x - 1| = 11$



12.  $\left|3x + \frac{1}{2}\right| = 6$



Write an equation involving absolute value for each graph.



## 2-6 Study Guide and Intervention

### Ratios and Proportions

**Ratios and Proportions** A **ratio** is a comparison of two numbers by division. The ratio of  $x$  to  $y$  can be expressed as  $x$  to  $y$ ,  $x:y$  or  $\frac{x}{y}$ . Ratios are usually expressed in simplest form. An equation stating that two ratios are equal is called a **proportion**. To determine whether two ratios form a proportion, express both ratios in simplest form or check cross products.

**Example 1** Determine whether the ratios  $\frac{24}{36}$  and  $\frac{12}{18}$  are equivalent ratios. Write *yes* or *no*. Justify your answer.

$\frac{24}{36} = \frac{2}{3}$  when expressed in simplest form.

$\frac{12}{18} = \frac{2}{3}$  when expressed in simplest form.

The ratios  $\frac{24}{36}$  and  $\frac{12}{18}$  form a proportion because they are equal when expressed in simplest form.

**Example 2** Use cross products to determine whether  $\frac{10}{18}$  and  $\frac{25}{45}$  form a proportion.

$$\frac{10}{18} \stackrel{?}{=} \frac{25}{45}$$

Write the proportion.

$$10(45) \stackrel{?}{=} 18(25)$$

Cross products

$$450 = 450$$

Simplify.

The cross products are equal, so  $\frac{10}{18} = \frac{25}{45}$ . Since the ratios are equal, they form a proportion.

### Exercises

Determine whether each pair of ratios are equivalent ratios. Write *yes* or *no*.

1.  $\frac{1}{2}, \frac{16}{32}$

2.  $\frac{5}{8}, \frac{10}{15}$

3.  $\frac{10}{20}, \frac{25}{49}$

4.  $\frac{25}{36}, \frac{15}{20}$

5.  $\frac{12}{32}, \frac{3}{16}$

6.  $\frac{4}{9}, \frac{12}{27}$

7.  $\frac{0.1}{2}, \frac{5}{100}$

8.  $\frac{15}{20}, \frac{9}{12}$

9.  $\frac{14}{12}, \frac{20}{30}$

10.  $\frac{2}{3}, \frac{20}{30}$

11.  $\frac{5}{9}, \frac{25}{45}$

12.  $\frac{72}{64}, \frac{9}{8}$

13.  $\frac{5}{5}, \frac{30}{20}$

14.  $\frac{18}{24}, \frac{50}{75}$

15.  $\frac{100}{75}, \frac{44}{33}$

16.  $\frac{0.05}{1}, \frac{1}{20}$

17.  $\frac{1.5}{2}, \frac{6}{8}$

18.  $\frac{0.1}{0.2}, \frac{0.45}{0.9}$

**2-6 Study Guide and Intervention** *(continued)***Ratios and Proportions**

**Solve Proportions** If a proportion involves a variable, you can use cross products to solve the proportion. In the proportion  $\frac{x}{5} = \frac{10}{13}$ ,  $x$  and 13 are called **extremes**. They are the first and last terms of the proportion. 5 and 10 are called **means**. They are the middle terms of the proportion. In a proportion, the product of the extremes is equal to the product of the means.

**Means-Extremes Property of Proportions**

For any numbers  $a$ ,  $b$ ,  $c$ , and  $d$ , if  $\frac{a}{b} = \frac{c}{d}$ , then  $ad = bc$ .

**Example**

Solve  $\frac{x}{5} = \frac{10}{13}$ .

$$\frac{x}{5} = \frac{10}{13}$$

Original proportion

$$13(x) = 5(10)$$

Cross products

$$13x = 50$$

Simplify.

$$\frac{13x}{13} = \frac{50}{13}$$

Divide each side by 13.

$$x = 3\frac{11}{13}$$

Simplify.

**Exercises**

Solve each proportion. If necessary, round to the nearest hundredth.

1.  $\frac{-3}{x} = \frac{2}{8}$

2.  $\frac{1}{t} = \frac{5}{3}$

3.  $\frac{0.1}{2} = \frac{0.5}{x}$

4.  $\frac{x+1}{4} = \frac{3}{4}$

5.  $\frac{4}{6} = \frac{8}{x}$

6.  $\frac{x}{21} = \frac{3}{63}$

7.  $\frac{9}{y+1} = \frac{18}{54}$

8.  $\frac{3}{d} = \frac{18}{3}$

9.  $\frac{5}{8} = \frac{p}{24}$

10.  $\frac{4}{b-2} = \frac{4}{12}$

11.  $\frac{1.5}{x} = \frac{12}{x}$

12.  $\frac{3+y}{4} = \frac{-y}{8}$

13.  $\frac{a-18}{12} = \frac{15}{3}$

14.  $\frac{12}{k} = \frac{24}{k}$

15.  $\frac{2+w}{6} = \frac{12}{9}$

Use a proportion to solve each problem.

**16. MODELS** To make a model of the Guadeloupe River bed, Hermie used 1 inch of clay for 5 miles of the river's actual length. His model river was 50 inches long. How long is the Guadeloupe River?

**17. EDUCATION** Josh finished 24 math problems in one hour. At that rate, how many hours will it take him to complete 72 problems?

## 2-7 Study Guide and Intervention

### Percent of Change

**Percent of Change** When an increase or decrease in an amount is expressed as a percent, the percent is called the **percent of change**. If the new number is greater than the original number, the percent of change is a **percent of increase**. If the new number is less than the original number, the percent of change is the **percent of decrease**.

#### Example 1 Find the percent

of increase.

original: 48

new: 60

First, subtract to find the amount of increase. The amount of increase is  $60 - 48 = 12$ .

Then find the percent of increase by using the original number, 48, as the base.

$$\frac{12}{48} = \frac{r}{100} \quad \text{Percent proportion}$$

$$12(100) = 48(r) \quad \text{Cross products}$$

$$1200 = 48r \quad \text{Simplify.}$$

$$\frac{1200}{48} = \frac{48r}{48} \quad \text{Divide each side by 48.}$$

$$25 = r \quad \text{Simplify.}$$

The percent of increase is 25%.

#### Example 2 Find the percent

of decrease.

original: 30

new: 22

First, subtract to find the amount of decrease. The amount of decrease is  $30 - 22 = 8$ .

Then find the percent of decrease by using the original number, 30, as the base.

$$\frac{8}{30} = \frac{r}{100} \quad \text{Percent proportion}$$

$$8(100) = 30(r) \quad \text{Cross products}$$

$$800 = 30r \quad \text{Simplify.}$$

$$\frac{800}{30} = \frac{30r}{30} \quad \text{Divide each side by 30.}$$

$$26\frac{2}{3} = r \quad \text{Simplify.}$$

The percent of decrease is  $26\frac{2}{3}\%$ , or about 27%.

### Exercises

State whether each percent of change is a percent of *increase* or a percent of *decrease*. Then find each percent of change. Round to the nearest whole percent.

1. original: 50  
new: 80

2. original: 90  
new: 100

3. original: 45  
new: 20

4. original: 77.5  
new: 62

5. original: 140  
new: 150

6. original: 135  
new: 90

7. original: 120  
new: 180

8. original: 90  
new: 270

9. original: 27.5  
new: 25

10. original: 84  
new: 98

11. original: 12.5  
new: 10

12. original: 250  
new: 500

**2-7 Study Guide and Intervention** *(continued)***Percent of Change**

**Solve Problems** Discounted prices and prices including tax are applications of percent of change. Discount is the amount by which the regular price of an item is reduced. Thus, the discounted price is an example of percent of decrease. Sales tax is amount that is added to the cost of an item, so the price including tax is an example of percent of increase.

**Example SALES** A coat is on sale for 25% off the original price. If the original price of the coat is \$75, what is the discounted price?

The discount is 25% of the original price.

$$\begin{aligned} 25\% \text{ of } \$75 &= 0.25 \times 75 & 25\% &= 0.25 \\ &= 18.75 & \text{Use a calculator.} & \end{aligned}$$

Subtract \$18.75 from the original price.

$$\$75 - \$18.75 = \$56.25$$

The discounted price of the coat is \$56.25.

**Exercises**

**Find the total price of each item.**

- |                                    |   |   |
|------------------------------------|---|---|
| 1. Shirt: \$24.00<br>Sales tax: 4% | 2. CD player: \$142.00<br>Sales tax: 5.5% | 3. Celebrity calendar: \$10.95<br>Sales tax: 7.5% |
|------------------------------------|---|---|

**Find the discounted price of each item.**

- |  |   |   |
|--|---|---|
| 4. Compact disc: \$16<br>Discount: 15% | 5. Two concert tickets: \$28<br>Student discount: 28% | 6. Airline ticket: \$248.00<br>Superair discount: 33% |
|--|---|---|

7. **VIDEOS** The original selling price of a new sports video was \$65.00. Due to the demand the price was increased to \$87.75. What was the percent of increase over the original price?
8. **SCHOOL** A high school paper increased its sales by 75% when it ran an issue featuring a contest to win a class party. Before the contest issue, 10% of the school's 800 students bought the paper. How many students bought the contest issue?
9. **BASEBALL** Baseball tickets cost \$15 for general admission or \$20 for box seats. The sales tax on each ticket is 8%. What is the final cost of each type of ticket?

**2-8 Study Guide and Intervention****Literal Equations and Dimensional Analysis**

**Solve for Variables** Sometimes you may want to solve an equation such as  $V = lwh$  for one of its variables. For example, if you know the values of  $V$ ,  $w$ , and  $h$ , then the equation  $\ell = \frac{V}{wh}$  is more useful for finding the value of  $\ell$ . If an equation that contains more than one variable is to be solved for a specific variable, use the properties of equality to isolate the specified variable on one side of the equation.

**Example 1** Solve  $2x - 4y = 8$ , for  $y$ .

$$\begin{aligned} 2x - 4y &= 8 \\ 2x - 4y - 2x &= 8 - 2x \\ -4y &= 8 - 2x \\ \frac{-4y}{-4} &= \frac{8 - 2x}{-4} \\ y &= \frac{8 - 2x}{-4} \text{ or } \frac{2x - 8}{4} \end{aligned}$$

The value of  $y$  is  $\frac{2x - 8}{4}$ .

**Example 2** Solve  $3m - n = km - 8$ , for  $m$ .

$$\begin{aligned} 3m - n &= km - 8 \\ 3m - n - km &= km - 8 - km \\ 3m - n - km &= -8 \\ 3m - n - km + n &= -8 + n \\ 3m - km &= -8 + n \\ m(3 - k) &= -8 + n \\ \frac{m(3 - k)}{3 - k} &= \frac{-8 + n}{3 - k} \\ m &= \frac{-8 + n}{3 - k}, \text{ or } \frac{n - 8}{3 - k} \end{aligned}$$

The value of  $m$  is  $\frac{n - 8}{3 - k}$ . Since division by 0 is undefined,  $3 - k \neq 0$ , or  $k \neq 3$ .

**Exercises**

Solve each equation or formula for the variable indicated.

1.  $ax - b = c$ , for  $x$

2.  $15x + 1 = y$ , for  $x$

3.  $(x + f) + 2 = j$ , for  $x$

4.  $xy + w = 9$ , for  $y$

5.  $x(4 - k) = p$ , for  $k$

6.  $7x + 3y = m$ , for  $y$

7.  $4(r + 3) = t$ , for  $r$

8.  $2x + b = w$ , for  $x$

9.  $x(1 + y) = z$ , for  $x$

10.  $16w + 4x = y$ , for  $x$

11.  $d = rt$ , for  $r$

12.  $A = \frac{h(a + b)}{2}$ , for  $h$

13.  $C = \frac{5}{9}(F - 32)$ , for  $F$

14.  $P = 2\ell + 2w$ , for  $w$

15.  $A = \ell w$ , for  $\ell$

**2-8 Study Guide and Intervention** *(continued)***Literal Equations and Dimensional Analysis**

**Use Formulas** Many real-world problems require the use of formulas. Sometimes solving a formula for a specified variable will help solve the problem.

**Example** The formula  $C = \pi d$  represents the circumference of a circle, or the distance around the circle, where  $d$  is the diameter. If an airplane could fly around Earth at the equator without stopping, it would have traveled about 24,900 miles. Find the diameter of Earth.

$$C = \pi d \quad \text{Given formula}$$

$$d = \frac{C}{\pi} \quad \text{Solve for } d.$$

$$d = \frac{24,900}{3.14} \quad \text{Use } \pi = 3.14.$$

$$d \approx 7930 \quad \text{Simplify.}$$

The diameter of Earth is about 7930 miles.

**Exercises**

- GEOMETRY** The volume of a cylinder  $V$  is given by the formula  $V = \pi r^2 h$ , where  $r$  is the radius and  $h$  is the height.
  - Solve the formula for  $h$ .
  - Find the height of a cylinder with volume  $2500\pi$  feet and radius 10 feet.
- WATER PRESSURE** The water pressure on a submerged object is given by  $P = 64d$ , where  $P$  is the pressure in pounds per square foot, and  $d$  is the depth of the object in feet.
  - Solve the formula for  $d$ .
  - Find the depth of a submerged object if the pressure is 672 pounds per square foot.
- GRAPHS** The equation of a line containing the points  $(a, 0)$  and  $(0, b)$  is given by the formula  $\frac{x}{a} + \frac{y}{b} = 1$ .
  - Solve the equation for  $y$ .
  - Suppose the line contains the points  $(4, 0)$ , and  $(0, -2)$ . If  $x = 3$ , find  $y$ .
- GEOMETRY** The surface area of a rectangular solid is given by the formula  $x = 2lw + 2lh + 2wh$ , where  $\ell$  = length,  $w$  = width, and  $h$  = height.
  - Solve the formula for  $h$ .
  - The surface area of a rectangular solid with length 6 centimeters and width 3 centimeters is 72 square centimeters. Find the height.



## 2-9 Study Guide and Intervention

### Weighted Averages

**Mixture Problems** Mixture Problems are problems where two or more parts are combined into a whole. They involve weighted averages. In a mixture problem, the weight is usually a price or a percent of something.

<b>Weighted Average</b>	The weighted average $M$ of a set of data is the sum of the product of each number in the set and its weight divided by the sum of all the weights.
-------------------------	---

**Example** **COOKIES** Delectable Cookie Company sells chocolate chip cookies for \$6.95 per pound and white chocolate cookies for \$5.95 per pound. How many pounds of chocolate chip cookies should be mixed with 4 pounds of white chocolate cookies to obtain a mixture that sells for \$6.75 per pound.

Let  $w$  = the number of pounds of chocolate chip cookies

	Number of Pounds	Price per Pound	Total Price
Chocolate Chip	$w$	6.95	$6.95w$
White Chocolate	4	5.95	$4(5.95)$
Mixture	$w + 4$	6.75	$6.75(w + 4)$

Equation:  $6.95w + 4(5.95) = 6.75(w + 4)$

Solve the equation.

$6.95w + 4(5.95) = 6.75(w + 4)$	Original equation
$6.95w + 23.80 = 6.75w + 27$	Simplify.
$6.95w + 23.80 - 6.75w = 6.75w + 27 - 6.75w$	Subtract $6.75w$ from each side.
$0.2w + 23.80 = 27$	Simplify.
$0.2w + 23.80 - 23.80 = 27 - 23.80$	Subtract 23.80 from each side.
$0.2w = 3.2$	Simplify.
$w = 16$	Simplify.

16 pounds of chocolate chip cookies should be mixed with 4 pounds of white chocolate cookies.

### Exercises

- SOLUTIONS** How many grams of sugar must be added to 60 grams of a solution that is 32% sugar to obtain a solution that is 50% sugar?
- NUTS** The Quik Mart has two kinds of nuts. Pecans sell for \$1.55 per pound and walnuts sell for \$1.95 per pound. How many pounds of walnuts must be added to 15 pounds of pecans to make a mixture that sells for \$1.75 per pound?
- INVESTMENTS** Alice Gleason invested a portion of \$32,000 at 9% interest and the balance at 11% interest. How much did she invest at each rate if her total income from both investments was \$3,200.
- MILK** Whole milk is 4% butterfat. How much skim milk with 0% butterfat should be added to 32 ounces of whole milk to obtain a mixture that is 2.5% butterfat?

**2-9 Study Guide and Intervention** *(continued)***Weighted Averages**

**Uniform Motion Problems** Motion problems are another application of weighted averages. **Uniform motion problems** are problems where an object moves at a certain speed, or rate. Use the formula  $d = rt$  to solve these problems, where  $d$  is the distance,  $r$  is the rate, and  $t$  is the time.

**Example DRIVING** Bill Gutierrez drove at a speed of 65 miles per hour on an expressway for 2 hours. He then drove for 1.5 hours at a speed of 45 miles per hour on a state highway. What was his average speed?

$$M = \frac{65 \cdot 2 + 45 \cdot 1.5}{2 + 1.5} \quad \text{Definition of weighted average}$$

$$\approx 56.4 \quad \text{Simplify.}$$

Bill drove at an average speed of about 56.4 miles per hour.

**Exercises**

- TRAVEL** Mr. Anders and Ms. Rich each drove home from a business meeting. Mr. Anders traveled east at 100 kilometers per hour and Ms. Rich traveled west at 80 kilometers per hours. In how many hours were they 100 kilometers apart.
- AIRPLANES** An airplane flies 750 miles due west in  $1\frac{1}{2}$  hours and 750 miles due south in 2 hours. What is the average speed of the airplane?
- TRACK** Sprinter A runs 100 meters in 15 seconds, while sprinter B starts 1.5 seconds later and runs 100 meters in 14 seconds. If each of them runs at a constant rate, who is further in 10 seconds after the start of the race? Explain.
- TRAINS** An express train travels 90 kilometers per hour from Smallville to Megatown. A local train takes 2.5 hours longer to travel the same distance at 50 kilometers per hour. How far apart are Smallville and Megatown?
- CYCLING** Two cyclists begin traveling in the same direction on the same bike path. One travels at 15 miles per hour, and the other travels at 12 miles per hour. When will the cyclists be 10 miles apart?
- TRAINS** Two trains leave Chicago, one traveling east at 30 miles per hour and one traveling west at 40 miles per hour. When will the trains be 210 miles apart?

**3-1 Study Guide and Intervention****Graphing Linear Equations**

**Identify Linear Equations and Intercepts** A **linear equation** is an equation that can be written in the form  $Ax + By = C$ . This is called the **standard form** of a linear equation.

<b>Standard Form of a Linear Equation</b>	$Ax + By = C$ , where $A \geq 0$ , $A$ and $B$ are not both zero, and $A$ , $B$ , and $C$ are integers with GCF of 1.
---	---

**Example 1** Determine whether  $y = 6 - 3x$  is a linear equation. Write the equation in standard form.

First rewrite the equation so both variables are on the same side of the equation.

$$y = 6 - 3x \quad \text{Original equation.}$$

$$y + 3x = 6 - 3x + 3x \quad \text{Add } 3x \text{ to each side.}$$

$$3x + y = 6 \quad \text{Simplify.}$$

The equation is now in standard form, with  $A = 3$ ,  $B = 1$  and  $C = 6$ . This is a linear equation.

**Example 2** Determine whether  $3xy + y = 4 + 2x$  is a linear equation. Write the equation in standard form.

Since the term  $3xy$  has two variables, the equation cannot be written in the form  $Ax + By = C$ . Therefore, this is not a linear equation.

**Exercises**

Determine whether each equation is a linear equation. Write *yes* or *no*. If yes, write the equation in standard form.

1.  $2x = 4y$

2.  $6 + y = 8$

3.  $4x - 2y = -1$

4.  $3xy + 8 = 4y$

5.  $3x - 4 = 12$

6.  $y = x^2 + 7$

7.  $y - 4x = 9$

8.  $x + 8 = 0$

9.  $-2x + 3 = 4y$

10.  $2 + \frac{1}{2}x = y$

11.  $\frac{1}{4}y = 12 - 4x$

12.  $3xy - y = 8$

13.  $6x + 4y - 3 = 0$

14.  $yx - 2 = 8$

15.  $6x - 2y = 8 + y$

16.  $\frac{1}{4}x - 12y = 1$

17.  $3 + x + x^2 = 0$

18.  $x^2 = 2xy$

# 3-1 Study Guide and Intervention *(continued)*

## Graphing Linear Equations

**Graph Linear Equations** The graph of a linear equation represents all the solutions of the equation. An  $x$ -coordinate of the point at which a graph of an equation crosses the  $x$ -axis is an  **$x$ -intercept**. A  $y$ -coordinate of the point at which a graph crosses the  $y$ -axis is called a  **$y$ -intercept**.

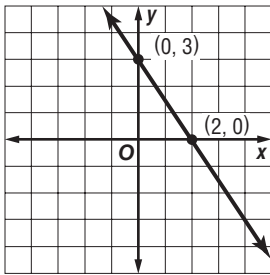
**Example 1** Graph the equation  $3x + 2y = 6$  by using the  $x$  and  $y$ -intercepts.

To find the  $x$ -intercept, let  $y = 0$  and solve for  $x$ . The  $x$ -intercept is 2. The graph intersects the  $x$ -axis at  $(2, 0)$ .

To find the  $y$ -intercept, let  $x = 0$  and solve for  $y$ .

The  $y$ -intercept is 3. The graph intersects the  $y$ -axis at  $(0, 3)$ .

Plot the points  $(2, 0)$  and  $(0, 3)$  and draw the line through them.



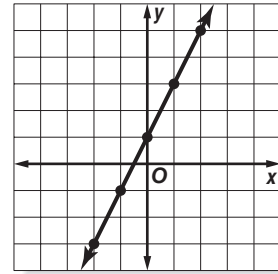
**Example 2** Graph the equation  $y - 2x = 1$  by making a table.

Solve the equation for  $y$ .

$$\begin{array}{rcl}
 y - 2x = 1 & & \text{Original equation.} \\
 y - 2x + 2x = 1 + 2x & & \text{Add } 2x \text{ to each side.} \\
 y = 2x + 1 & & \text{Simplify.}
 \end{array}$$

Select five values for the domain and make a table. Then graph the ordered pairs and draw a line through the points.

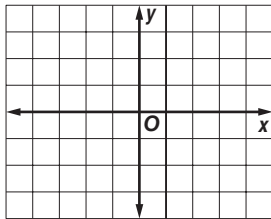
$x$	$2x + 1$	$y$	$(x, y)$
-2	$2(-2) + 1$	-3	$(-2, -3)$
-1	$2(-1) + 1$	-1	$(-1, -1)$
0	$2(0) + 1$	1	$(0, 1)$
1	$2(1) + 1$	3	$(1, 3)$
2	$2(2) + 1$	5	$(2, 5)$



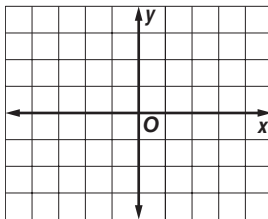
### Exercises

Graph each equation by using the  $x$ - and  $y$ -intercepts.

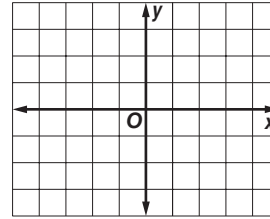
1.  $2x + y = -2$



2.  $3x - 6y = -3$

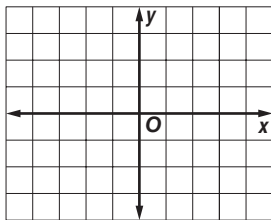


3.  $-2x + y = -2$

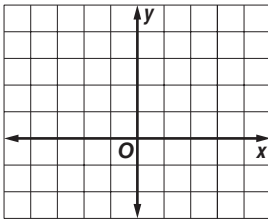


Graph each equation by making a table.

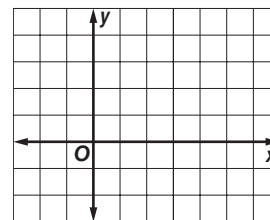
4.  $y = 2x$



5.  $x - y = -1$



6.  $x + 2y = 4$



# 3-2 Study Guide and Intervention

## Solving Linear Equations by Graphing

**Solve by Graphing** You can solve an equation by graphing the related function. The solution of the equation is the  $x$ -intercept of the function.

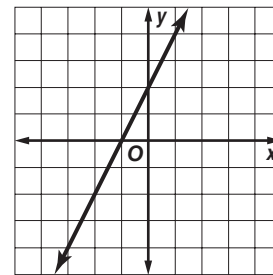
**Example** Solve the equation  $2x - 2 = -4$  by graphing.

First set the equation equal to 0. Then replace 0 with  $f(x)$ . Make a table of ordered pair solutions. Graph the function and locate the  $x$ -intercept.

$2x - 2 = -4$	Original equation
$2x - 2 + 4 = -4 + 4$	Add 4 to each side.
$2x + 2 = 0$	Simplify.
$f(x) = 2x + 2$	Replace 0 with $f(x)$ .

To graph the function, make a table. Graph the ordered pairs.

$x$	$f(x) = 2x + 2$	$f(x)$	$[x, f(x)]$
1	$f(1) = 2(1) + 2$	4	(1, 4)
-1	$f(-1) = 2(-1) + 2$	0	(-1, 0)
-2	$f(-2) = 2(-2) + 2$	-2	(-2, -2)



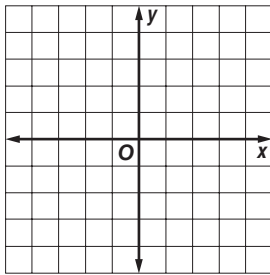
The graph intersects the  $x$ -axis at  $(-1, 0)$ .

The solution to the equation is  $x = -1$ .

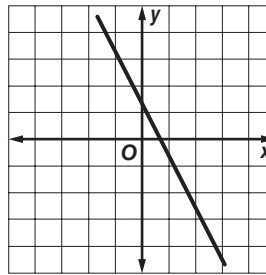
### Exercises

Solve each equation.

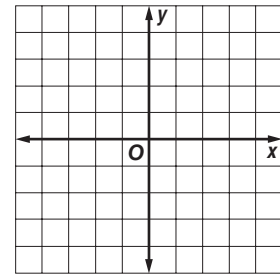
1.  $3x - 3 = 0$



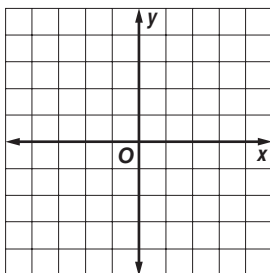
2.  $-2x + 1 = 5 - 2x$



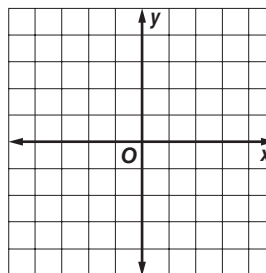
3.  $-x + 4 = 0$



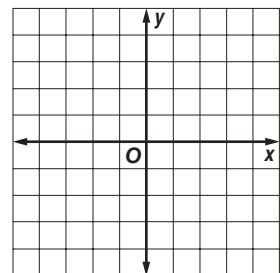
4.  $0 = 4x - 1$



5.  $5x - 1 = 5x$



6.  $-3x + 1 = 0$



# 3-2 Study Guide and Intervention *(continued)*

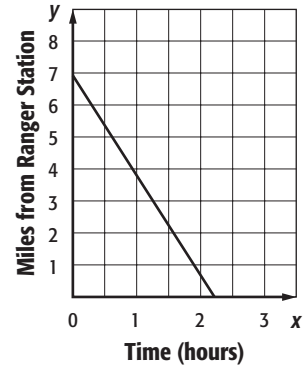
## Solving Linear Equations by Graphing

**Estimate Solutions by Graphing** Sometimes graphing does not provide an exact solution, but only an estimate. In these cases, solve algebraically to find the exact solution.

**Example** **WALKING** You and your cousin decide to walk the 7-mile trail at the state park to the ranger station. The function  $d = 7 - 3.2t$  represents your distance  $d$  from the ranger station after  $t$  hours. Find the zero of this function. Describe what this value means in this context.

Make a table of values to graph the function.

$t$	$d = 7 - 3.2t$	$d$	$(t, d)$
0	$d = 7 - 3.2(0)$	7	(0, 7)
1	$d = 7 - 3.2(1)$	3.8	(1, 3.8)
2	$d = 7 - 3.2(2)$	0.6	(2, 0.6)

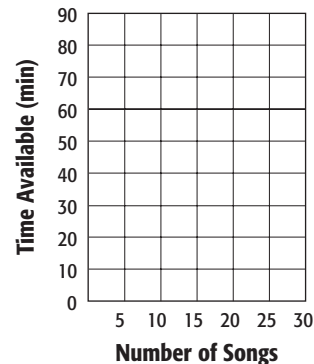


The graph intersects the  $t$ -axis between  $t = 2$  and  $t = 3$ , but closer to  $t = 2$ . It will take you and your cousin just over two hours to reach the ranger station.

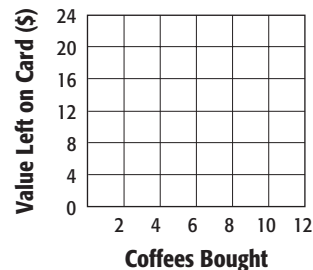
You can check your estimate by solving the equation algebraically.

### Exercises

**1. MUSIC** Jessica wants to record her favorite songs to one CD. The function  $C = 80 - 3.22n$  represents the recording time  $C$  available after  $n$  songs are recorded. Find the zero of this function. Describe what this value means in this context.



**2. GIFT CARDS** Enrique uses a gift card to buy coffee at a coffee shop. The initial value of the gift card is \$20. The function  $n = 20 - 2.75c$  represents the amount of money still left on the gift card  $n$  after purchasing  $c$  cups of coffee. Find the zero of this function. Describe what this value means in this context.



# 3-3 Study Guide and Intervention

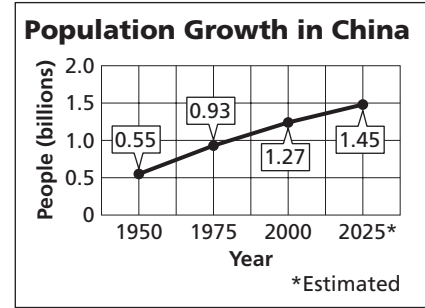
## Rate of Change and Slope

**Rate of Change** The **rate of change** tells, on average, how a quantity is changing over time.

**Example** **POPULATION** The graph shows the population growth in China.

- a. Find the rates of change for 1950–1975 and for 2000–2025.

$$\begin{aligned}
 1950-1975: \frac{\text{change in population}}{\text{change in time}} &= \frac{0.93 - 0.55}{1975 - 1950} \\
 &= \frac{0.38}{25} \text{ or } 0.0152 \\
 2000-2025: \frac{\text{change in population}}{\text{change in time}} &= \frac{1.45 - 1.27}{2025 - 2000} \\
 &= \frac{0.18}{25} \text{ or } 0.0072
 \end{aligned}$$



Source: United Nations Population Division

- b. Explain the meaning of the rate of change in each case.

From 1950–1975, the growth was 0.0152 billion per year, or 15.2 million per year. From 2000–2025, the growth is expected to be 0.0072 billion per year, or 7.2 million per year.

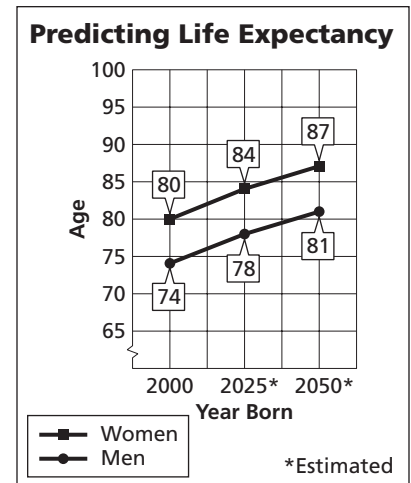
- c. How are the different rates of change shown on the graph?

There is a greater vertical change for 1950–1975 than for 2000–2025. Therefore, the section of the graph for 1950–1975 has a steeper slope.

### Exercises

1. **LONGEVITY** The graph shows the predicted life expectancy for men and women born in a given year.

- Find the rates of change for women from 2000–2025 and 2025–2050.
- Find the rates of change for men from 2000–2025 and 2025–2050.
- Explain the meaning of your results in Exercises 1 and 2.
- What pattern do you see in the increase with each 25-year period?



Source: USA TODAY

- Make a prediction for the life expectancy for 2050–2075. Explain how you arrived at your prediction.

**3-3 Study Guide and Intervention** *(continued)***Rate of Change and Slope**

**Find Slope** The **slope** of a line is the ratio of change in the  $y$ -coordinates (rise) to the change in the  $x$ -coordinates (run) as you move in the positive direction.

<b>Slope of a Line</b>	$m = \frac{\text{rise}}{\text{run}}$ or $m = \frac{y_2 - y_1}{x_2 - x_1}$ , where $(x_1, y_1)$ and $(x_2, y_2)$ are the coordinates of any two points on a nonvertical line
------------------------	---

**Example 1** Find the slope of the line that passes through  $(-3, 5)$  and  $(4, -2)$ .

Let  $(-3, 5) = (x_1, y_1)$  and

$(4, -2) = (x_2, y_2)$ .

$$m = \frac{y_2 - y_1}{x_2 - x_1} \quad \text{Slope formula}$$

$$= \frac{-2 - 5}{-4 - (-3)} \quad y_2 = -2, y_1 = 5, x_2 = 4, x_1 = -3$$

$$= \frac{-7}{-1} \quad \text{Simplify.}$$

$$= 7$$

**Example 2** Find the value of  $r$  so that the line through  $(10, r)$  and  $(3, 4)$  has a slope of  $-\frac{2}{7}$ .

$$m = \frac{y_2 - y_1}{x_2 - x_1} \quad \text{Slope formula}$$

$$-\frac{2}{7} = \frac{4 - r}{3 - 10} \quad m = -\frac{2}{7}, y_2 = 4, y_1 = r, x_2 = 3, x_1 = 10$$

$$-\frac{2}{7} = \frac{4 - r}{-7} \quad \text{Simplify.}$$

$$-2(-7) = 7(4 - r) \quad \text{Cross multiply.}$$

$$14 = 28 - 7r \quad \text{Distributive Property}$$

$$-14 = -7r \quad \text{Subtract 28 from each side.}$$

$$2 = r \quad \text{Divide each side by } -7.$$

**Exercises**

Find the slope of the line that passes through each pair of points.

1.  $(4, 9), (1, 6)$

2.  $(-4, -1), (-2, -5)$

3.  $(-4, -1), (-4, -5)$

4.  $(2, 1), (8, 9)$

5.  $(14, -8), (7, -6)$

6.  $(4, -3), (8, -3)$

7.  $(1, -2), (6, 2)$

8.  $(2, 5), (6, 2)$

9.  $(4, 3.5), (-4, 3.5)$

Find the value of  $r$  so the line that passes through each pair of points has the given slope.

10.  $(6, 8), (r, -2), m = 1$

11.  $(-1, -3), (7, r), m = \frac{3}{4}$

12.  $(2, 8), (r, -4), m = -3$

13.  $(7, -5), (6, r), m = 0$

14.  $(r, 4), (7, 1), m = \frac{3}{4}$

15.  $(7, 5), (r, 9), m = 6$

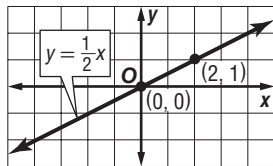


# 3-4 Study Guide and Intervention

## Direct Variation

**Direct Variation Equations** A **direct variation** is described by an equation of the form  $y = kx$ , where  $k \neq 0$ . We say that  $y$  *varies directly as*  $x$ . In the equation  $y = kx$ ,  $k$  is the **constant of variation**.

**Example 1** Name the constant of variation for the equation. Then find the slope of the line that passes through the pair of points.



For  $y = \frac{1}{2}x$ , the constant of variation is  $\frac{1}{2}$ .

$$\begin{aligned}
 m &= \frac{y_2 - y_1}{x_2 - x_1} && \text{Slope formula} \\
 &= \frac{1 - 0}{2 - 0} && (x_1, y_1) = (0, 0), (x_2, y_2) = (2, 1) \\
 &= \frac{1}{2} && \text{Simplify.}
 \end{aligned}$$

The slope is  $\frac{1}{2}$ .

**Example 2** Suppose  $y$  varies directly as  $x$ , and  $y = 30$  when  $x = 5$ .

a. Write a direct variation equation that relates  $x$  and  $y$ .

Find the value of  $k$ .

$$\begin{aligned}
 y &= kx && \text{Direct variation equation} \\
 30 &= k(5) && \text{Replace } y \text{ with } 30 \text{ and } x \text{ with } 5. \\
 6 &= k && \text{Divide each side by } 5.
 \end{aligned}$$

Therefore, the equation is  $y = 6x$ .

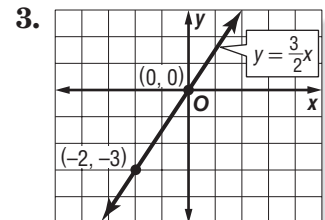
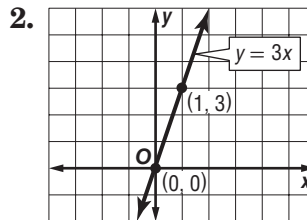
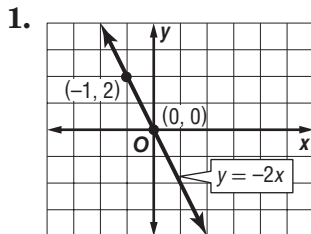
b. Use the direct variation equation to find  $x$  when  $y = 18$ .

$$\begin{aligned}
 y &= 6x && \text{Direct variation equation} \\
 18 &= 6x && \text{Replace } y \text{ with } 18. \\
 3 &= x && \text{Divide each side by } 6.
 \end{aligned}$$

Therefore,  $x = 3$  when  $y = 18$ .

### Exercises

Name the constant of variation for each equation. Then determine the slope of the line that passes through each pair of points.



Suppose  $y$  varies directly as  $x$ . Write a direct variation equation that relates  $x$  to  $y$ . Then solve.

- If  $y = 4$  when  $x = 2$ , find  $y$  when  $x = 16$ .
- If  $y = 9$  when  $x = -3$ , find  $x$  when  $y = 6$ .
- If  $y = -4.8$  when  $x = -1.6$ , find  $x$  when  $y = -24$ .
- If  $y = \frac{1}{4}$  when  $x = \frac{1}{8}$ , find  $x$  when  $y = \frac{3}{16}$ .

# 3-4 Study Guide and Intervention *(continued)*

## Direct Variation

**Direct Variation Problems** The distance formula  $d = rt$  is a direct variation equation. In the formula, distance  $d$  varies directly as time  $t$ , and the rate  $r$  is the constant of variation.

**Example** **TRAVEL** A family drove their car 225 miles in 5 hours.

- a. Write a direct variation equation to find the distance traveled for any number of hours.

Use given values for  $d$  and  $t$  to find  $r$ .

$$\begin{aligned} d &= rt && \text{Original equation} \\ 225 &= r(5) && d = 225 \text{ and } t = 5 \\ 45 &= r && \text{Divide each side by 5.} \end{aligned}$$

Therefore, the direct variation equation is  $d = 45t$ .

- b. Graph the equation.

The graph of  $d = 45t$  passes through the origin with slope 45.

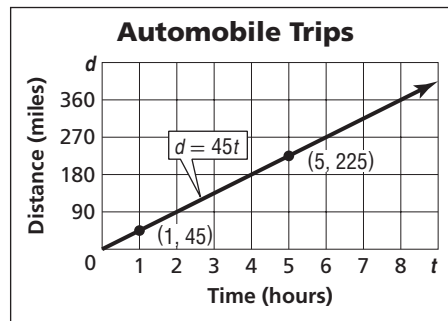
$$m = \frac{45}{1} \quad \frac{\text{rise}}{\text{run}}$$

✓CHECK (5, 225) lies on the graph.

- c. Estimate how many hours it would take the family to drive 360 miles.

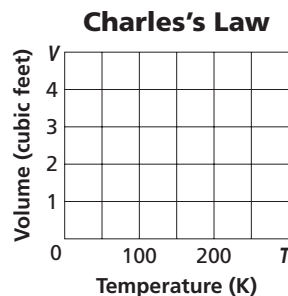
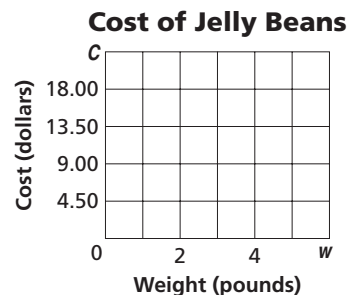
$$\begin{aligned} d &= 45t && \text{Original equation} \\ 360 &= 45t && \text{Replace } d \text{ with 360.} \\ t &= 8 && \text{Divide each side by 45.} \end{aligned}$$

Therefore, it will take 8 hours to drive 360 miles.



## Exercises

- RETAIL** The total cost  $C$  of bulk jelly beans is \$4.49 times the number of pounds  $p$ .
  - Write a direct variation equation that relates the variables.
  - Graph the equation on the grid at the right.
  - Find the cost of  $\frac{3}{4}$  pound of jelly beans.
- CHEMISTRY** Charles's Law states that, at a constant pressure, volume of a gas  $V$  varies directly as its temperature  $T$ . A volume of 4 cubic feet of a certain gas has a temperature of 200 degrees Kelvin.
  - Write a direct variation equation that relates the variables.
  - Graph the equation on the grid at the right.
  - Find the volume of the same gas at 250 degrees Kelvin.



# 3-5 Study Guide and Intervention

## Arithmetic Sequences as Linear Functions

**Recognize Arithmetic Sequences** A **sequence** is a set of numbers in a specific order. If the difference between successive terms is constant, then the sequence is called an **arithmetic sequence**.

<b>Arithmetic Sequence</b>	a numerical pattern that increases or decreases at a constant rate or value called the <b>common difference</b>
<b>Terms of an Arithmetic Sequence</b>	If $a_1$ is the first term of an arithmetic sequence with common difference $d$ , then the sequence is $a_1, a_1 + d, a_1 + 2d, a_1 + 3d, \dots$
<b><math>n</math>th Term of an Arithmetic Sequence</b>	$a_n = a_1 + (n - 1)d$

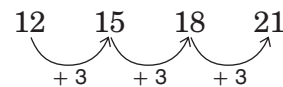
**Example 1** Determine whether the sequence 1, 3, 5, 7, 9, 11, ... is an arithmetic sequence. Justify your answer.

If possible, find the common difference between the terms. Since  $3 - 1 = 2$ ,  $5 - 3 = 2$ , and so on, the common difference is 2.

Since the difference between the terms of 1, 3, 5, 7, 9, 11, ... is constant, this is an arithmetic sequence.

**Example 2** Write an equation for the  $n$ th term of the sequence 12, 15, 18, 21, ...

In this sequence,  $a_1$  is 12. Find the common difference.



The common difference is 3.

Use the formula for the  $n$ th term to write an equation.

$$a_n = a_1 + (n - 1)d \quad \text{Formula for the } n\text{th term}$$

$$a_n = 12 + (n - 1)3 \quad a_1 = 12, d = 3$$

$$a_n = 12 + 3n - 3 \quad \text{Distributive Property}$$

$$a_n = 3n + 9 \quad \text{Simplify.}$$

The equation for the  $n$ th term is  $a_n = 3n + 9$ .

### Exercises

**Determine whether each sequence is an arithmetic sequence. Write yes or no. Explain.**

1. 1, 5, 9, 13, 17, ...

2. 8, 4, 0, -4, -8, ...

3. 1, 3, 9, 27, 81, ...

**Find the next three terms of each arithmetic sequence.**

4. 9, 13, 17, 21, 25, ...

5. 4, 0, -4, -8, -12, ...

6. 29, 35, 41, 47, ...

**Write an equation for the  $n$ th term of each arithmetic sequence. Then graph the first five terms of the sequence.**

7. 1, 3, 5, 7, ...

8. -1, -4, -7, -10, ...

9. -4, -9, -14, -19, ...

# 3-5 Study Guide and Intervention *(continued)*

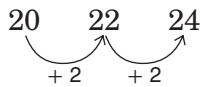
## Arithmetic Sequences as Linear Functions

**Arithmetic Sequences and Functions** An **arithmetic sequence** is a linear function in which  $n$  is the independent variable,  $a_n$  is the dependent variable, and the common difference  $d$  is the slope. The formula can be rewritten as the function  $a_n = a_1 + (n-1)d$ , where  $n$  is a counting number.

**Example SEATING** There are 20 seats in the first row of the balcony of the auditorium. There are 22 seats in the second row, and 24 seats in the third row.

**a. Write a function to represent this sequence.**

The first term  $a_1$  is 20. Find the common difference.



The common difference is 2.

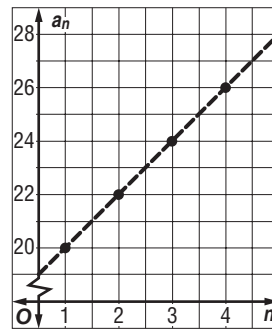
$$\begin{aligned}
 a_n &= a_1 + (n - 1)d && \text{formula for the } n\text{th term} \\
 &= 20 + (n - 1)2 && a_1 = 20 \text{ and } d = 2 \\
 &= 20 + 2n - 2 && \text{Distributive Property} \\
 &= 18 + 2n && \text{Simplify.}
 \end{aligned}$$

The function is  $a_n = 18 + 2n$ .

**b. Graph the function.**

The rate of change is 2. Make a table and plot points.

$n$	$a_n$
1	20
2	22
3	24
4	26



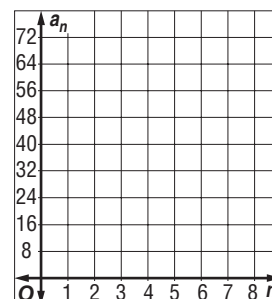
### Exercises

**1. KNITTING** Sarah learns to knit from her grandmother. Two days ago, she measured the length of the scarf she is knitting to be 13 inches. Yesterday, she measured the length of the scarf to be 15.5 inches. Today it measures 18 inches. Write a function to represent the arithmetic sequence.

**2. REFRESHMENTS** You agree to pour water into the cups for the Booster Club at a football game. The pitcher contains 64 ounces of water when you begin. After you have filled 8 cups, the pitcher is empty and must be refilled.

**a.** Write a function to represent the arithmetic sequence.

**b.** Graph the function.



# 3-6 Study Guide and Intervention

## Proportional and Nonproportional Relationships.

**Proportional Relationships** If the relationship between the domain and range of a relation is linear, the relationship can be described by a linear equation. If the equation passes through  $(0, 0)$  and is of the form  $y = kx$ , then the relationship is proportional.

**Example**

**COMPACT DISCS** Suppose you purchased a number of packages of blank compact discs. If each package contains 3 compact discs, you could make a chart to show the relationship between the number of packages of compact discs and the number of discs purchased. Use  $x$  for the number of packages and  $y$  for the number of compact discs.

Make a table of ordered pairs for several points of the graph.

Number of Packages	1	2	3	4	5
Number of CDs	3	6	9	12	15

The difference in the  $x$  values is 1, and the difference in the  $y$  values is 3. This pattern shows that  $y$  is always three times  $x$ . This suggests the relation  $y = 3x$ . Since the relation is also a function, we can write the equation in function notation as  $f(x) = 3x$ .

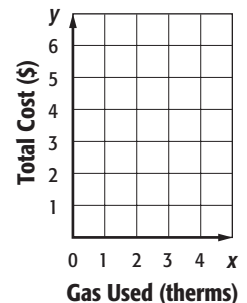
The relation includes the point  $(0, 0)$  because if you buy 0 packages of compact discs, you will not have any compact discs. Therefore, the relationship is proportional.

### Exercises

**1. NATURAL GAS** Natural gas use is often measured in “therms.” The total amount a gas company will charge for natural gas use is based on how much natural gas a household uses. The table shows the relationship between natural gas use and the total cost.

Gas Used (therms)	1	2	3	4
Total Cost (\$)	\$1.30	\$2.60	\$3.90	\$5.20

- Graph the data. What can you deduce from the pattern about the relationship between the number of therms used and the total cost?
- Write an equation to describe this relationship.
- Use this equation to predict how much it will cost if a household uses 40 therms.



# 3-6 Study Guide and Intervention *(continued)*

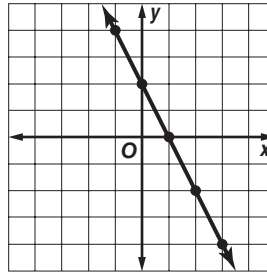
## Proportional and Nonproportional Relationships

**Nonproportional Relationships** If the ratio of the value of  $x$  to the value of  $y$  is different for select ordered pairs on the line, the equation is nonproportional.

**Example** Write an equation in functional notation for the relation shown in the graph.

Select points from the graph and place them in a table.

$x$	-1	0	1	2	3
$y$	4	2	0	-2	-4



The difference between the  $x$ -values is 1, while the difference between the  $y$ -values is  $-2$ . This suggests that  $y = -2x$ .

If  $x = 1$ , then  $y = -2(1)$  or  $-2$ . But the  $y$ -value for  $x = 1$  is 0.

$x$	1	2	3
$-2x$	-2	-4	-6
$y$	0	-2	-4

$y$  is always 2 more than  $-2x$

This pattern shows that 2 should be added to one side of the equation. Thus, the equation is  $y = -2x + 2$ .

### Exercises

Write an equation in function notation for the relation shown in the table. Then complete the table.

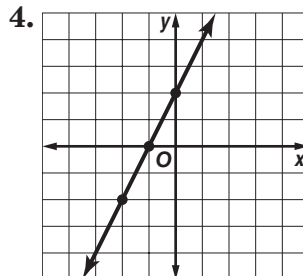
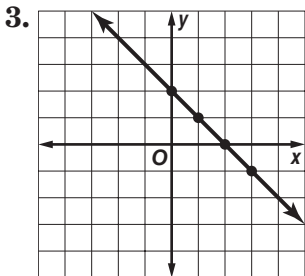
1. 

$x$	-1	0	1	2	3	4
$y$	-2	2	6			

2. 

$x$	-2	-1	0	1	2	3
$y$	10	7	4			

Write an equation in function notation for each relation.



# 4-1 Study Guide and Intervention

## Graphing Equations in Slope-Intercept Form

### Slope-Intercept Form

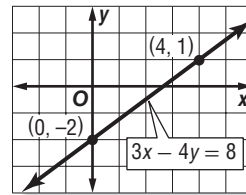
<b>Slope-Intercept Form</b>	$y = mx + b$ , where $m$ is the given slope and $b$ is the $y$ -intercept
-----------------------------	---

**Example 1** Write an equation in slope-intercept form for the line with a slope of  $-4$  and a  $y$ -intercept of  $3$ .

$y = mx + b$                       Slope-intercept form  
 $y = -4x + 3$                       Replace  $m$  with  $-4$  and  $b$  with  $3$ .

**Example 2** Graph  $3x - 4y = 8$ .

$3x - 4y = 8$                       Original equation  
 $-4y = -3x + 8$                       Subtract  $3x$  from each side.  
 $\frac{-4y}{-4} = \frac{-3x + 8}{-4}$                       Divide each side by  $-4$ .  
 $y = \frac{3}{4}x - 2$                       Simplify.



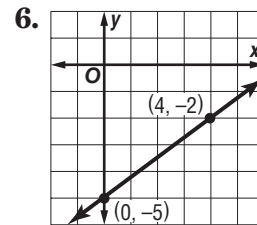
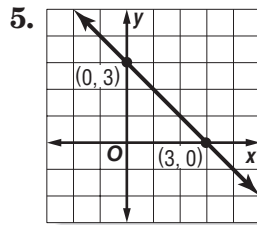
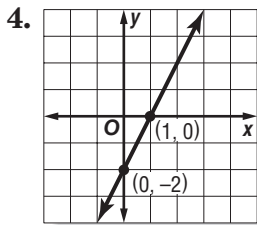
The  $y$ -intercept of  $y = \frac{3}{4}x - 2$  is  $-2$  and the slope is  $\frac{3}{4}$ . So graph the point  $(0, -2)$ . From this point, move up  $3$  units and right  $4$  units. Draw a line passing through both points.

### Exercises

Write an equation of a line in slope-intercept form with the given slope and  $y$ -intercept.

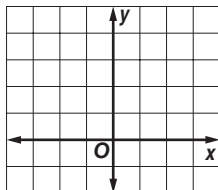
1. slope:  $8$ ,  $y$ -intercept  $-3$       2. slope:  $-2$ ,  $y$ -intercept  $-1$       3. slope:  $-1$ ,  $y$ -intercept  $-7$

Write an equation in slope-intercept form for each graph shown.

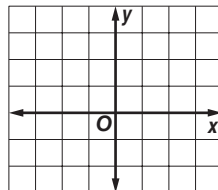


Graph each equation.

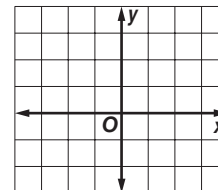
7.  $y = 2x + 1$



8.  $y = -3x + 2$



9.  $y = -x - 1$



# 4-1 Study Guide and Intervention *(continued)*

## Graphing Equations in Slope-Intercept Form

### Modeling Real-World Data

**Example** **MEDIA** Since 1999, the number of music cassettes sold has decreased by an average rate of 27 million per year. There were 124 million music cassettes sold in 1999.

- a. Write a linear equation to find the average number of music cassettes sold in any year after 1999.

The rate of change is  $-27$  million per year. In the first year, the number of music cassettes sold was 124 million. Let  $N$  = the number of millions of music cassettes sold. Let  $x$  = the number of years after 1999. An equation is  $N = -27x + 124$ .

- b. Graph the equation.

The graph of  $N = -27x + 124$  is a line that passes through the point at  $(0, 124)$  and has a slope of  $-27$ .

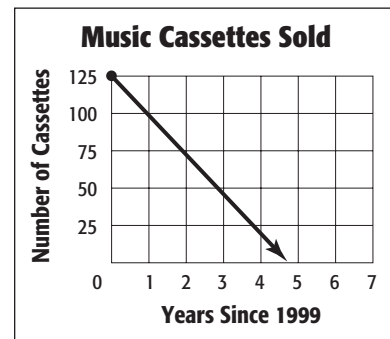
- c. Find the approximate number of music cassettes sold in 2003.

$N = -27x + 124$  Original equation

$N = -27(4) + 124$  Replace  $x$  with 3.

$N = 16$  Simplify.

There were about 16 million music cassettes sold in 2003.



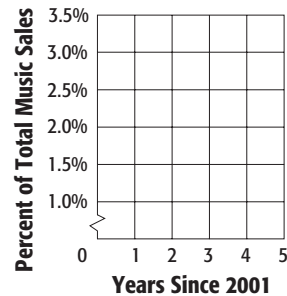
Source: *The World Almanac*

### Exercises

1. **MUSIC** In 2001, full-length cassettes represented 3.4% of total music sales. Between 2001 and 2006, the percent decreased by about 0.5% per year.

- Write an equation to find the percent  $P$  of recorded music sold as full-length cassettes for any year  $x$  between 2001 and 2006.
- Graph the equation on the grid at the right.
- Find the percent of recorded music sold as full-length cassettes in 2004.

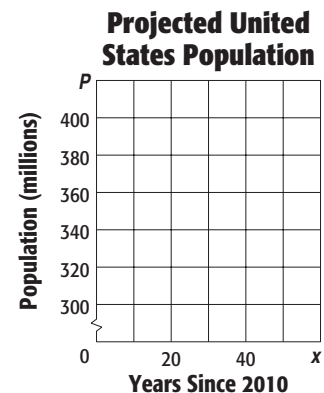
#### Full-length Cassette Sales



Source: *RIAA*

2. **POPULATION** The population of the United States is projected to be 300 million by the year 2010. Between 2010 and 2050, the population is expected to increase by about 2.5 million per year.

- Write an equation to find the population  $P$  in any year  $x$  between 2010 and 2050.
- Graph the equation on the grid at the right.
- Find the population in 2050.



Source: *The World Almanac*



## 4-2 Study Guide and Intervention

### Writing Equations in Slope-Intercept Form

#### Write an Equation Given the Slope and a Point

**Example 1** Write an equation of the line that passes through  $(-4, 2)$  with a slope of 3.

The line has slope 3. To find the  $y$ -intercept, replace  $m$  with 3 and  $(x, y)$  with  $(-4, 2)$  in the slope-intercept form. Then solve for  $b$ .

$$\begin{aligned} y &= mx + b && \text{Slope-intercept form} \\ 2 &= 3(-4) + b && m = 3, y = 2, \text{ and } x = -4 \\ 2 &= -12 + b && \text{Multiply.} \\ 14 &= b && \text{Add 12 to each side.} \end{aligned}$$

Therefore, the equation is  $y = 3x + 14$ .

**Example 2** Write an equation of the line that passes through  $(-2, -1)$  with a slope of  $\frac{1}{4}$ .

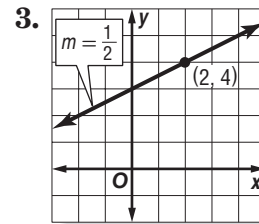
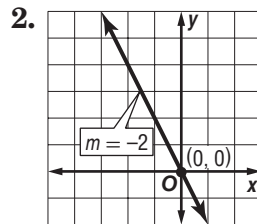
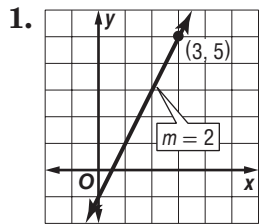
The line has slope  $\frac{1}{4}$ . Replace  $m$  with  $\frac{1}{4}$  and  $(x, y)$  with  $(-2, -1)$  in the slope-intercept form.

$$\begin{aligned} y &= mx + b && \text{Slope-intercept form} \\ -1 &= \frac{1}{4}(-2) + b && m = \frac{1}{4}, y = -1, \text{ and } x = -2 \\ -1 &= -\frac{1}{2} + b && \text{Multiply.} \\ -\frac{1}{2} &= b && \text{Add } \frac{1}{2} \text{ to each side.} \end{aligned}$$

Therefore, the equation is  $y = \frac{1}{4}x - \frac{1}{2}$ .

### Exercises

Write an equation of the line that passes through the given point and has the given slope.



4.  $(8, 2)$ ; slope  $-\frac{3}{4}$

5.  $(-1, -3)$ ; slope 5

6.  $(4, -5)$ ; slope  $-\frac{1}{2}$

7.  $(-5, 4)$ ; slope 0

8.  $(2, 2)$ ; slope  $\frac{1}{2}$

9.  $(1, -4)$ ; slope  $-6$

10.  $(-3, 0)$ ,  $m = 2$

11.  $(0, 4)$ ,  $m = -3$

12.  $(0, 350)$ ,  $m = \frac{1}{5}$

# 4-2 Study Guide and Intervention *(continued)*

## Writing Equations in Slope-Intercept Form

### Write an Equation Given Two Points

#### Example

Write an equation of the line that passes through (1, 2) and (3, -2).

Find the slope  $m$ . To find the  $y$ -intercept, replace  $m$  with its computed value and  $(x, y)$  with (1, 2) in the slope-intercept form. Then solve for  $b$ .

$$m = \frac{y_2 - y_1}{x_2 - x_1}$$

Slope formula

$$m = \frac{-2 - 2}{3 - 1}$$

$$y_2 = -2, y_1 = 2, x_2 = 3, x_1 = 1$$

$$m = -2$$

Simplify.

$$y = mx + b$$

Slope-intercept form

$$2 = -2(1) + b$$

Replace  $m$  with  $-2$ ,  $y$  with  $2$ , and  $x$  with  $1$ .

$$2 = -2 + b$$

Multiply.

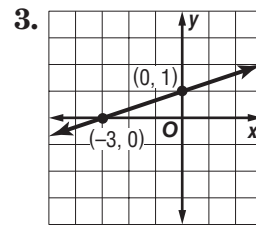
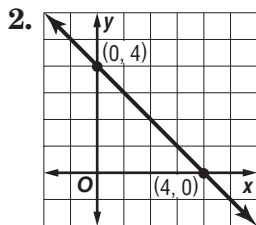
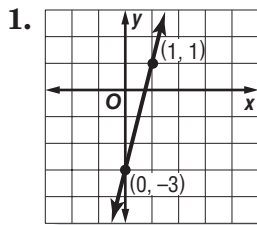
$$4 = b$$

Add 2 to each side.

Therefore, the equation is  $y = -2x + 4$ .

### Exercises

Write an equation of the line that passes through each pair of points.



4.  $(-1, 6), (7, -10)$

5.  $(0, 2), (1, 7)$

6.  $(6, -25), (-1, 3)$

7.  $(-2, -1), (2, 11)$

8.  $(10, -1), (4, 2)$

9.  $(-14, -2), (7, 7)$

10.  $(4, 0), (0, 2)$

11.  $(-3, 0), (0, 5)$

12.  $(0, 16), (-10, 0)$

# 4-3 Study Guide and Intervention

## Point-Slope Form

### Point-Slope Form

<b>Point-Slope Form</b>	$y - y_1 = m(x - x_1)$ , where $(x_1, y_1)$ is a given point on a nonvertical line and $m$ is the slope of the line
-------------------------	---

**Example 1** Write an equation in point-slope form for the line that passes through  $(6, 1)$  with a slope of  $-\frac{5}{2}$ .

$$y - y_1 = m(x - x_1) \quad \text{Point-slope form}$$

$$y - 1 = -\frac{5}{2}(x - 6) \quad m = -\frac{5}{2}; (x_1, y_1) = (6, 1)$$

Therefore, the equation is  $y - 1 = -\frac{5}{2}(x - 6)$ .

**Example 2** Write an equation in point-slope form for a horizontal line that passes through  $(4, -1)$ .

$$y - y_1 = m(x - x_1) \quad \text{Point-slope form}$$

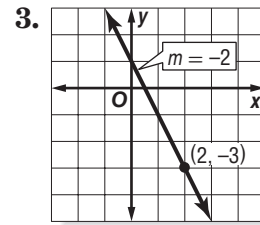
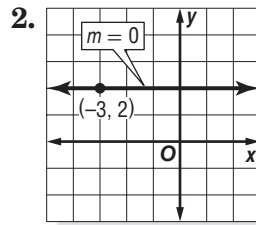
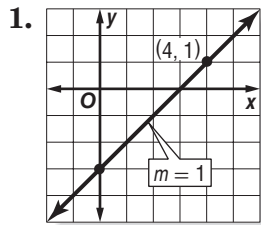
$$y - (-1) = 0(x - 4) \quad m = 0; (x_1, y_1) = (4, -1)$$

$$y + 1 = 0 \quad \text{Simplify.}$$

Therefore, the equation is  $y + 1 = 0$ .

### Exercises

Write an equation in point-slope form for the line that passes through the given point with the slope provided.



4.  $(2, 1), m = 4$

5.  $(-7, 2), m = 6$

6.  $(8, 3), m = 1$

7.  $(-6, 7), m = 0$

8.  $(4, 9), m = \frac{3}{4}$

9.  $(-4, -5), m = -\frac{1}{2}$

10. Write an equation in point-slope form for a horizontal line that passes through  $(4, -2)$ .

11. Write an equation in point-slope form for a horizontal line that passes through  $(-5, 6)$ .

12. Write an equation in point-slope form for a horizontal line that passes through  $(5, 0)$ .

**4-3 Study Guide and Intervention** *(continued)***Point-Slope Form****Forms of Linear Equations**

<b>Slope-Intercept Form</b>	$y = mx + b$	$m = \text{slope}; b = \text{y-intercept}$
<b>Point-Slope Form</b>	$y - y_1 = m(x - x_1)$	$m = \text{slope}; (x_1, y_1)$ is a given point.
<b>Standard Form</b>	$Ax + By = C$	$A$ and $B$ are not both zero. Usually $A$ is nonnegative and $A, B,$ and $C$ are integers whose greatest common factor is 1.

**Example 1** Write  $y + 5 = \frac{2}{3}(x - 6)$  in standard form.

$$\begin{aligned}
 y + 5 &= \frac{2}{3}(x - 6) && \text{Original equation} \\
 3(y + 5) &= 3\left(\frac{2}{3}\right)(x - 6) && \text{Multiply each side by 3.} \\
 3y + 15 &= 2(x - 6) && \text{Distributive Property} \\
 3y + 15 &= 2x - 12 && \text{Distributive Property} \\
 3y &= 2x - 27 && \text{Subtract 15 from each side.} \\
 -2x + 3y &= -27 && \text{Add } -2x \text{ to each side.} \\
 2x - 3y &= 27 && \text{Multiply each side by } -1.
 \end{aligned}$$

Therefore, the standard form of the equation is  $2x - 3y = 27$ .

**Example 2** Write  $y - 2 = -\frac{1}{4}(x - 8)$  in slope-intercept form.

$$\begin{aligned}
 y - 2 &= -\frac{1}{4}(x - 8) && \text{Original equation} \\
 y - 2 &= -\frac{1}{4}x + 2 && \text{Distributive Property} \\
 y &= -\frac{1}{4}x + 4 && \text{Add 2 to each side.}
 \end{aligned}$$

Therefore, the slope-intercept form of the equation is  $y = -\frac{1}{4}x + 4$ .

**Exercises**

Write each equation in standard form.

1.  $y + 2 = -3(x - 1)$

2.  $y - 1 = -\frac{1}{3}(x - 6)$

3.  $y + 2 = \frac{2}{3}(x - 9)$

4.  $y + 3 = -(x - 5)$

5.  $y - 4 = \frac{5}{3}(x + 3)$

6.  $y + 4 = -\frac{2}{5}(x - 1)$

Write each equation in slope-intercept form.

7.  $y + 4 = 4(x - 2)$

8.  $y - 5 = \frac{1}{3}(x - 6)$

9.  $y - 8 = -\frac{1}{4}(x + 8)$

10.  $y - 6 = 3\left(x - \frac{1}{3}\right)$

11.  $y + 4 = -2(x + 5)$

12.  $y + \frac{5}{3} = \frac{1}{2}(x - 2)$

# 4-4 Study Guide and Intervention

## Parallel and Perpendicular Lines

**Parallel Lines** Two nonvertical lines are **parallel** if they have the same slope. All vertical lines are parallel.

**Example** Write an equation in slope-intercept form for the line that passes through  $(-1, 6)$  and is parallel to the graph of  $y = 2x + 12$ .

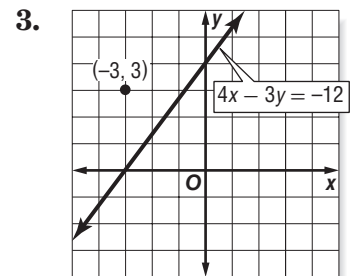
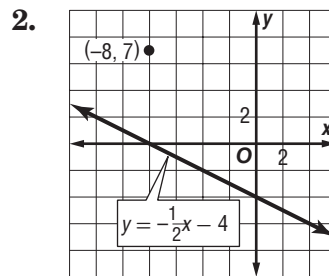
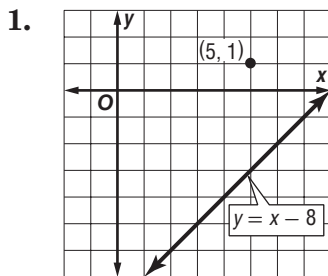
A line parallel to  $y = 2x + 12$  has the same slope, 2. Replace  $m$  with 2 and  $(x_1, y_1)$  with  $(-1, 6)$  in the point-slope form.

$$\begin{aligned}
 y - y_1 &= m(x - x_1) && \text{Point-slope form} \\
 y - 6 &= 2(x - (-1)) && m = 2; (x_1, y_1) = (-1, 6) \\
 y - 6 &= 2(x + 1) && \text{Simplify.} \\
 y - 6 &= 2x + 2 && \text{Distributive Property} \\
 y &= 2x + 8 && \text{Slope-intercept form}
 \end{aligned}$$

Therefore, the equation is  $y = 2x + 8$ .

### Exercises

Write an equation in slope-intercept form for the line that passes through the given point and is parallel to the graph of each equation.



4.  $(-2, 2), y = 4x - 2$

5.  $(6, 4), y = \frac{1}{3}x + 1$

6.  $(4, -2), y = -2x + 3$

7.  $(-2, 4), y = -3x + 10$

8.  $(-1, 6), 3x + y = 12$

9.  $(4, -6), x + 2y = 5$

10. Find an equation of the line that has a  $y$ -intercept of 2 that is parallel to the graph of the line  $4x + 2y = 8$ .

11. Find an equation of the line that has a  $y$ -intercept of  $-1$  that is parallel to the graph of the line  $x - 3y = 6$ .

12. Find an equation of the line that has a  $y$ -intercept of  $-4$  that is parallel to the graph of the line  $y = 6$ .

**4-4 Study Guide and Intervention** *(continued)***Parallel and Perpendicular Lines**

**Perpendicular Lines** Two non-vertical lines are **perpendicular** if their slopes are negative reciprocals of each other. Vertical and horizontal lines are perpendicular.

**Example** Write an equation in slope-intercept form for the line that passes through  $(-4, 2)$  and is perpendicular to the graph of  $2x - 3y = 9$ .

Find the slope of  $2x - 3y = 9$ .

$$\begin{aligned} 2x - 3y &= 9 && \text{Original equation} \\ -3y &= -2x + 9 && \text{Subtract } 2x \text{ from each side.} \\ y &= \frac{2}{3}x - 3 && \text{Divide each side by } -3. \end{aligned}$$

The slope of  $y = \frac{2}{3}x - 3$  is  $\frac{2}{3}$ . So, the slope of the line passing through  $(-4, 2)$  that is perpendicular to this line is the negative reciprocal of  $\frac{2}{3}$ , or  $-\frac{3}{2}$ .

Use the point-slope form to find the equation.

$$\begin{aligned} y - y_1 &= m(x - x_1) && \text{Point-slope form} \\ y - 2 &= -\frac{3}{2}(x - (-4)) && m = -\frac{3}{2}; (x_1, y_1) = (-4, 2) \\ y - 2 &= -\frac{3}{2}(x + 4) && \text{Simplify.} \\ y - 2 &= -\frac{3}{2}x - 6 && \text{Distributive Property} \\ y &= -\frac{3}{2}x - 4 && \text{Slope-intercept form} \end{aligned}$$

**Exercises**

- 1. ARCHITECTURE** On the architect's plans for a new high school, a wall represented by  $\overline{MN}$  has endpoints  $M(-3, -1)$  and  $N(2, 1)$ . A wall represented by  $\overline{PQ}$  has endpoints  $P(4, -4)$  and  $Q(-2, 11)$ . Are the walls perpendicular? Explain.

**Determine whether the graphs of the following equations are *parallel* or *perpendicular*. Explain.**

**2.**  $2x + y = -7, x - 2y = -4, 4x - y = 5$

**3.**  $y = 3x, 6x - 2y = 7, 3y = 9x - 1$

**Write an equation in slope-intercept form for the line that passes through the given point and is perpendicular to the graph of each equation.**

**4.**  $(4, 2), y = \frac{1}{2}x + 1$

**5.**  $(2, -3), y = -\frac{2}{3}x + 4$

**6.**  $(6, 4), y = 7x + 1$

**7.**  $(-8, -7), y = -x - 8$

**8.**  $(6, -2), y = -3x - 6$

**9.**  $(-5, -1), y = \frac{5}{2}x - 3$

# 4-5 Study Guide and Intervention

## Scatter Plots and Lines of Fit

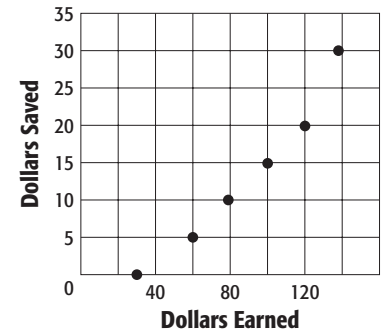
**Investigate Relationships Using Scatter Plots** A **scatter plot** is a graph in which two sets of data are plotted as ordered pairs in a coordinate plane. If  $y$  increases as  $x$  increases, there is a **positive correlation** between  $x$  and  $y$ . If  $y$  decreases as  $x$  increases, there is a **negative correlation** between  $x$  and  $y$ . If  $x$  and  $y$  are not related, there is **no correlation**.

**Example**

**EARNINGS** The graph at the right shows the amount of money Carmen earned each week and the amount she deposited in her savings account that same week. Determine whether the graph shows a *positive correlation*, a *negative correlation*, or *no correlation*. If there is a positive or negative correlation, describe its meaning in the situation.

The graph shows a positive correlation. The more Carmen earns, the more she saves.

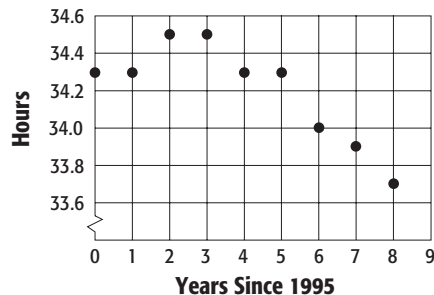
**Carmen's Earnings and Savings**



### Exercises

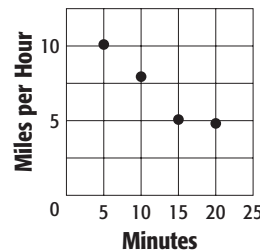
Determine whether each graph shows a *positive correlation*, a *negative correlation*, or *no correlation*. If there is a positive or negative correlation, describe its meaning in the situation.

**1. Average Weekly Work Hours in U.S.**

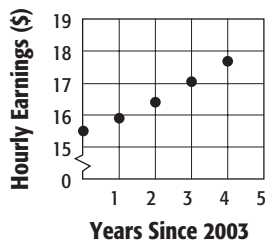


Source: *The World Almanac*

**2. Average Jogging Speed**

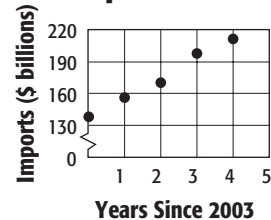


**3. Average U.S. Hourly Earnings**



Source: U.S. Dept. of Labor

**4. U.S. Imports from Mexico**



Source: U.S. Census Bureau

# 4-5 Study Guide and Intervention *(continued)*

## Scatter Plots and Lines of Fit

### Use Lines of Fit

**Example** The table shows the number of students per computer in Easton High School for certain school years from 1996 to 2008.

Year	1996	1998	2000	2002	2004	2006	2008
Students per Computer	22	18	14	10	6.1	5.4	4.9

**a. Draw a scatter plot and determine what relationship exists, if any.**

Since  $y$  decreases as  $x$  increases, the correlation is negative.

**b. Draw a line of fit for the scatter plot.**

Draw a line that passes close to most of the points. A line of fit is shown.

**c. Write the slope-intercept form of an equation for the line of fit.**

The line of fit shown passes through (1999, 16) and (2005, 5.7). Find the slope.

$$m = \frac{5.7 - 16}{2005 - 1999}$$

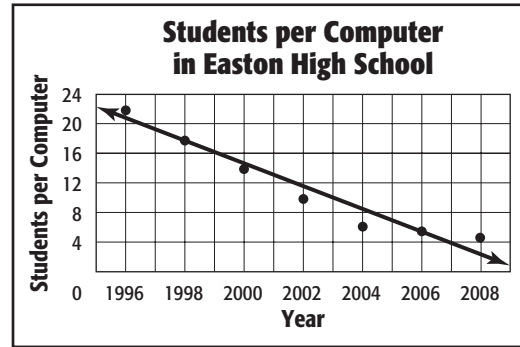
$$m = -1.7$$

Find  $b$  in  $y = -1.7x + b$ .

$$16 = -1.7 \cdot 1993 + b$$

$$3404 = b$$

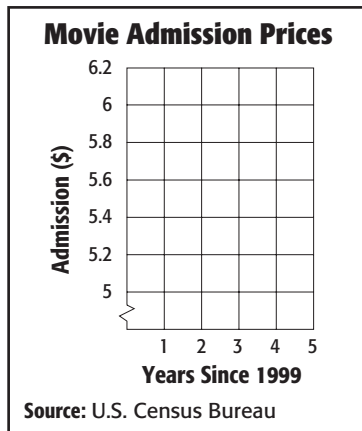
Therefore, an equation of a line of fit is  $y = -1.7x + 3404$ .



### Exercises

Refer to the table for Exercises 1–3.

1. Draw a scatter plot.
2. Draw a line of fit for the data.
3. Write the slope-intercept form of an equation for the line of fit.



Years Since 1999	Admission (dollars)
0	\$5.08
1	\$5.39
2	\$5.66
3	\$5.81
4	\$6.03

Source: U.S. Census Bureau



# 4-6 Study Guide and Intervention

## Regression and Median-Fit Lines

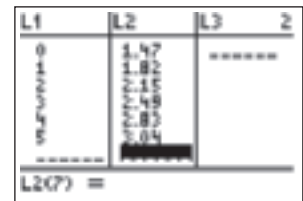
**Equations of Best-Fit Lines** Many graphing calculators utilize an algorithm called **linear regression** to find a precise line of fit called the **best-fit line**. The calculator computes the data, writes an equation, and gives you the **correlation coefficient**, a measure of how closely the equation models the data.

**Example** **GAS PRICES** The table shows the average price of a gallon of regular gasoline in Los Angeles, California.


Year	2002	2003	2004	2005	2006	2007
Average Price	\$1.47	\$1.82	\$2.15	\$2.49	\$2.83	\$3.04

**Source:** U.S. Department of Energy

- a. Use a graphing calculator to write an equation for the best-fit line for that data. Enter the data by pressing **STAT** and selecting the Edit option. Let the year 2002 be represented by 0. Enter the years since 2002 into List 1 (L1). Enter the average price into List 2 (L2).



Then, perform the linear regression by pressing **STAT** and selecting the CALC option. Scroll down to LinReg (ax+b) and press **ENTER**. The best-fit equation for the regression is shown to be  $y = 0.321x + 1.499$ .



- b. Name the correlation coefficient. The correlation coefficient is the value shown for r on the calculator screen. The correlation coefficient is about 0.998.

### Exercises

Write an equation of the regression line for the data in each table below. Then find the correlation coefficient.

1. **OLYMPICS** Below is a table showing the number of gold medals won by the United States at the Winter Olympics during various years.

Year	1988	1992	1994	1998	2002	2006
Gold Medals	2	5	6	6	10	9

**Source:** International Olympic Committee

2. **INTEREST RATES** Below is a table showing the U.S. Federal Reserve's prime interest rate on January 1 of various years.

Year	2003	2004	2005	2006	2007
Prime Rate (percent)	4.25	4.00	5.25	7.25	8.25

**Source:** Federal Reserve Board

# 4-6 Study Guide and Intervention *(continued)*

## Regression and Median-Fit Lines

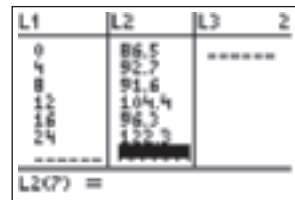
**Equations of Median-Fit Lines** A graphing calculator can also find another type of best-fit line called the **median-fit line**, which is found using the medians of the coordinates of the data points.

**Example** **ELECTIONS** The table shows the total number of people in millions who voted in the U.S. Presidential election in the given years.

<b>Year</b>	1980	1984	1988	1992	1996	2004
<b>Voters</b>	86.5	92.7	91.6	104.4	96.3	122.3

**Source:** George Mason University

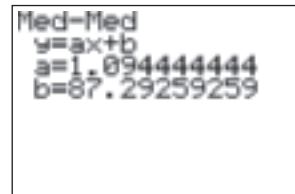
- a. **Find an equation for the median-fit line.** Enter the data by pressing **STAT** and selecting the Edit option. Let the year 1980 be represented by 0. Enter the years since 1980 into List 1 (L1). Enter the number of voters into List 2 (L2).



Then, press **STAT** and select the CALC option. Scroll down to Med-Med option and press **ENTER**. The value of  $a$  is the slope, and the value of  $b$  is the y-intercept.

The equation for the median-fit line is  $y = 1.094x + 87.29$ .

- b. **Estimate the number of people who voted in the 2000 U.S. Presidential election.** Graph the best-fit line. Then use the **TRACE** feature and the arrow keys until you find a point where  $x = 20$ .



When  $x = 20$ ,  $y \approx 109$ . Therefore, about 109 million people voted in the 2000 U.S. Presidential election.

### Exercises

Write an equation of the regression line for the data in each table below. Then find the correlation coefficient.

1. **POPULATION GROWTH** Below is a table showing the estimated population of Arizona in millions on July 1st of various years.

<b>Year</b>	2001	2002	2003	2004	2005	2006
<b>Population</b>	5.30	5.44	5.58	5.74	5.94	6.17

**Source:** U.S. Census Bureau

- Find an equation for the median-fit line.
  - Predict the population of Arizona in 2009.
2. **ENROLLMENT** Below is a table showing the number of students enrolled at Happy Days Preschool in the given years.

<b>Year</b>	1999	2001	2003	2005	2007
<b>Students</b>	130	168	184	201	234

- Find an equation for the median-fit line.
- Estimate how many students were enrolled in 2004.

# 4-7 Study Guide and Intervention

## Special Functions

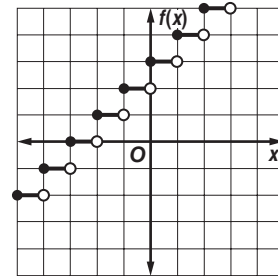
**Step Functions** The graph of a **step function** is a series of disjointed line segments. Because each part of a step function is linear, this type of function is called a **piecewise-linear function**.

One example of a step function is the greatest integer function, written as  $f(x) = \llbracket x \rrbracket$ , where  $f(x)$  is the greatest integer not greater than  $x$ .

**Example** Graph  $f(x) = \llbracket x + 3 \rrbracket$ .

Make a table of values using noninteger values. On the graph, dots represent included points, and circles represent points that are excluded.

$x$	$x + 3$	$\llbracket x + 3 \rrbracket$
0	3	3
0.5	3.5	3
1	4	4
1.5	4.5	4
2	5	5
2.5	5.5	5

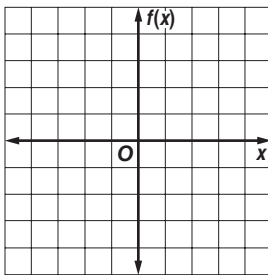


Because the dots and circles overlap, the domain is all real numbers. The range is all integers.

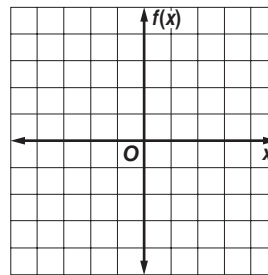
### Exercises

Graph each function. State the domain and range.

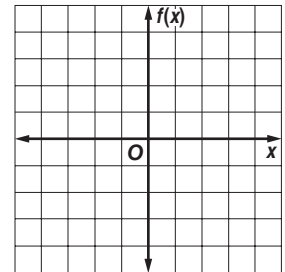
1.  $f(x) = \llbracket x + 1 \rrbracket$



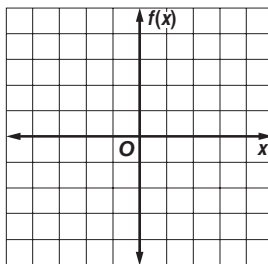
2.  $f(x) = -\llbracket x \rrbracket$



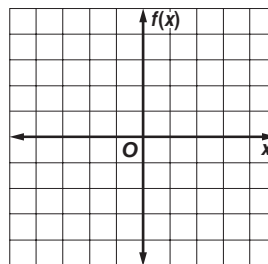
3.  $f(x) = \llbracket x - 1 \rrbracket$



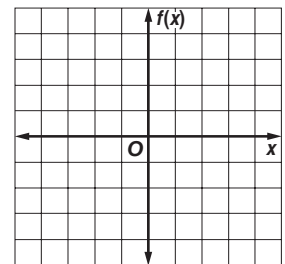
4.  $f(x) = \llbracket x \rrbracket + 4$



5.  $f(x) = \llbracket x \rrbracket - 3$



6.  $f(x) = \llbracket 2x \rrbracket$



# 4-7 Study Guide and Intervention *(continued)*

## Special Functions

**Absolute Value Functions** Another type of piecewise-linear function is the **absolute value function**. Recall that the absolute value of a number is always nonnegative. So in the absolute value function, written as  $f(x) = |x|$ , all of the values of the range are nonnegative.

The absolute value function is called a **piecewise-defined function** because it can be written using two or more expressions.

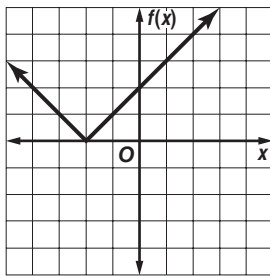
**Example 1** Graph  $f(x) = |x + 2|$ . State the domain and range.

$f(x)$  cannot be negative, so the minimum point is  $f(x) = 0$ .

$f(x) = |x + 2|$       Original function  
 $0 = x + 2$           Replace  $f(x)$  with 0.  
 $-2 = x$               Subtract 2 from each side.

Make a table. Include values for  $x > -2$  and  $x < -2$ .

$x$	$f(x)$
-5	3
-4	2
-3	1
-2	0
-1	1
0	2
1	3
2	4



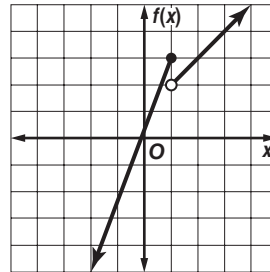
The domain is all real numbers. The range is all real numbers greater than or equal to 0.

**Example 2** Graph

$f(x) = \begin{cases} x + 1 & \text{if } x > 1 \\ 3x & \text{if } x \leq 1 \end{cases}$ . State the domain and range.

Graph the first expression. When  $x > 1$ ,  $f(x) = x + 1$ . Since  $x \neq 1$ , place an open circle at  $(1, 2)$ .

Next, graph the second expression. When  $x \leq 1$ ,  $f(x) = 3x$ . Since  $x = 1$ , place a closed circle at  $(1, 3)$ .

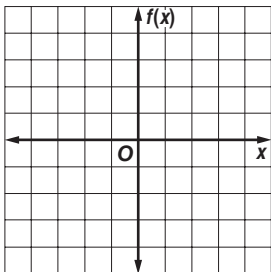


The domain and range are both all real numbers.

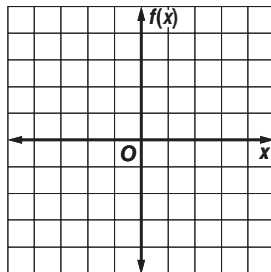
### Exercises

Graph each function. State the domain and range.

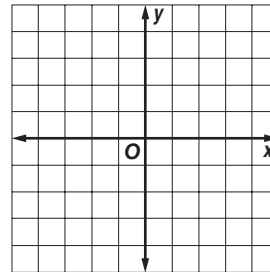
1.  $f(x) = |x - 1|$



2.  $f(x) = |-x + 2|$



3.  $f(x) = \begin{cases} -x + 4 & \text{if } x \leq 1 \\ x - 2 & \text{if } x > 1 \end{cases}$



# 5-1 Study Guide and Intervention

## Solving Inequalities by Addition and Subtraction

**Solve Inequalities by Addition** Addition can be used to solve inequalities. If any number is added to each side of a true inequality, the resulting inequality is also true.

<b>Addition Property of Inequalities</b>	For all numbers $a$ , $b$ , and $c$ , if $a > b$ , then $a + c > b + c$ , and if $a < b$ , then $a + c < b + c$ .
--	---

The property is also true when  $>$  and  $<$  are replaced with  $\geq$  and  $\leq$ .

**Example 1** Solve  $x - 8 \leq -6$ .  
Then graph the solution.

$$\begin{aligned} x - 8 &\leq -6 && \text{Original inequality} \\ x - 8 + 8 &\leq -6 + 8 && \text{Add 8 to each side.} \\ x &\leq 2 && \text{Simplify.} \end{aligned}$$

The solution in set-builder notation is  $\{x \mid x \leq 2\}$ .

Number line graph:

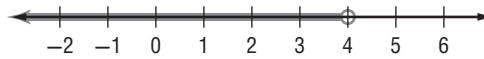


**Example 2** Solve  $4 - 2a > -a$ . Then graph the solution.

$$\begin{aligned} 4 - 2a &> -a && \text{Original inequality} \\ 4 - 2a + 2a &> -a + 2a && \text{Add 2a to each side.} \\ 4 &> a && \text{Simplify.} \\ a &< 4 && 4 > a \text{ is the same as } a < 4. \end{aligned}$$

The solution in set-builder notation is  $\{a \mid a < 4\}$ .

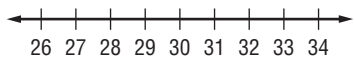
Number line graph:



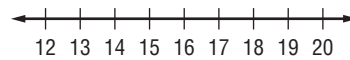
### Exercises

Solve each inequality. Check your solution, and then graph it on a number line.

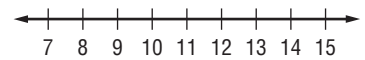
1.  $t - 12 \geq 16$



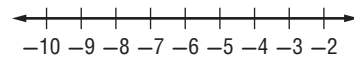
2.  $n - 12 < 6$



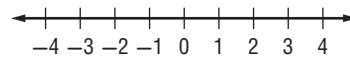
3.  $6 \leq g - 3$



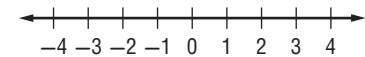
4.  $n - 8 < -13$



5.  $-12 > -12 + y$



6.  $-6 > m - 8$



Solve each inequality. Check your solution.

7.  $-3x \leq 8 - 4x$

8.  $0.6n \geq 12 - 0.4n$

9.  $-8k - 12 < -9k$

10.  $-y - 10 > 15 - 2y$

11.  $z - \frac{1}{3} \leq \frac{4}{3}$

12.  $-2b > -4 - 3b$

Define a variable, write an inequality, and solve each problem. Check your solution.

13. A number decreased by 4 is less than 14.

14. The difference of two numbers is more than 12, and one of the numbers is 3.

15. Forty is no greater than the difference of a number and 2.

# 5-1 Study Guide and Intervention *(continued)*

## Solving Inequalities by Addition and Subtraction

**Solve Inequalities by Subtraction** Subtraction can be used to solve inequalities. If any number is subtracted from each side of a true inequality, the resulting inequality is also true.

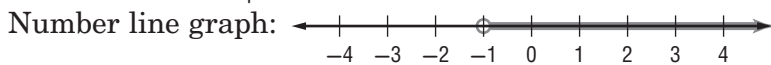
<b>Subtraction Property of Inequalities</b>	For all numbers $a$ , $b$ , and $c$ , if $a > b$ , then $a - c > b - c$ , and if $a < b$ , then $a - c < b - c$ .
---	---

The property is also true when  $>$  and  $<$  are replaced with  $\geq$  and  $\leq$ .

**Example** Solve  $3a + 5 > 4 + 2a$ . Then graph it on a number line.

$3a + 5 > 4 + 2a$	Original inequality
$3a + 5 - 2a > 4 + 2a - 2a$	Subtract $2a$ from each side.
$a + 5 > 4$	Simplify.
$a + 5 - 5 > 4 - 5$	Subtract 5 from each side.
$a > -1$	Simplify.

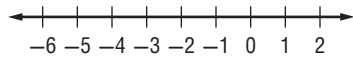
The solution is  $\{a | a > -1\}$ .



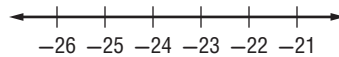
### Exercises

Solve each inequality. Check your solution, and then graph it on a number line.

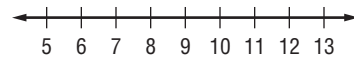
1.  $t + 12 \geq 8$



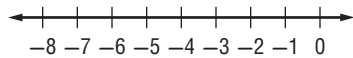
2.  $n + 12 > -12$



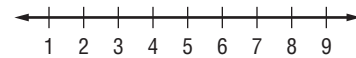
3.  $16 \leq h + 9$



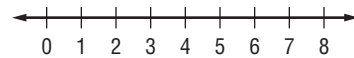
4.  $y + 4 > -2$



5.  $3r + 6 > 4r$



6.  $\frac{3}{2}q - 5 \geq \frac{1}{2}q$



Solve each inequality. Check your solution.

7.  $4p \geq 3p + 0.7$

8.  $r + \frac{1}{4} > \frac{3}{8}$

9.  $9k + 12 > 8k$

10.  $-1.2 > 2.4 + y$

11.  $4y < 5y + 14$

12.  $3n + 17 < 4n$

Define a variable, write an inequality, and solve each problem. Check your solution.

13. The sum of a number and 8 is less than 12.

14. The sum of two numbers is at most 6, and one of the numbers is  $-2$ .

15. The sum of a number and 6 is greater than or equal to  $-4$ .

**5-2 Study Guide and Intervention****Solving Inequalities by Multiplication and Division**

**Solve Inequalities by Multiplication** If each side of an inequality is multiplied by the same positive number, the resulting inequality is also true. However, if each side of an inequality is multiplied by the same negative number, the direction of the inequality must be reversed for the resulting inequality to be true.

<b>Multiplication Property of Inequalities</b>	For all numbers $a$ , $b$ , and $c$ , with $c \neq 0$ ,
	<ol style="list-style-type: none"> <li>if <math>c</math> is positive and <math>a &gt; b</math>, then <math>ac &gt; bc</math>; if <math>c</math> is positive and <math>a &lt; b</math>, then <math>ac &lt; bc</math>;</li> <li>if <math>c</math> is negative and <math>a &gt; b</math>, then <math>ac &lt; bc</math>; if <math>c</math> is negative and <math>a &lt; b</math>, then <math>ac &gt; bc</math>.</li> </ol>

The property is also true when  $>$  and  $<$  are replaced with  $\geq$  and  $\leq$ .

**Example 1** Solve  $-\frac{y}{8} \leq 12$ .

$$-\frac{y}{8} \leq 12 \quad \text{Original equation}$$

$$(-8)\left(-\frac{y}{8}\right) \leq (-8)12 \quad \text{Multiply each side by } -8; \text{ change } \geq \text{ to } \leq.$$

$$y \leq -96 \quad \text{Simplify.}$$

The solution is  $\{y \mid y \leq -96\}$ .

**Example 2** Solve  $\frac{3}{4}k < 15$ .

$$\frac{3}{4}k < 15 \quad \text{Original equation}$$

$$\left(\frac{4}{3}\right)\frac{3}{4}k < \left(\frac{4}{3}\right)15 \quad \text{Multiply each side by } \frac{4}{3}.$$

$$k < 20 \quad \text{Simplify.}$$

The solution is  $\{k \mid k < 20\}$ .

**Exercises**

Solve each inequality. Check your solution.

1.  $\frac{y}{6} \leq 2$

2.  $-\frac{n}{50} > 22$

3.  $\frac{3}{5}h \geq -3$

4.  $-\frac{p}{6} < -6$

5.  $\frac{1}{4}n \geq 10$

6.  $-\frac{2}{3}b < \frac{1}{3}$

7.  $\frac{3m}{5} < -\frac{3}{20}$

8.  $-2.51 \leq -\frac{2h}{4}$

9.  $\frac{g}{5} \geq -2$

10.  $-\frac{3}{4} > -\frac{9p}{5}$

11.  $\frac{n}{10} \geq 5.4$

12.  $\frac{2a}{7} \geq -6$

Define a variable, write an inequality, and solve each problem. Check your solution.

13. Half of a number is at least 14.

14. The opposite of one-third a number is greater than 9.

15. One fifth of a number is at most 30.

**5-2 Study Guide and Intervention** *(continued)***Solving Inequalities by Multiplication and Division**

**Solve Inequalities by Division** If each side of a true inequality is divided by the same positive number, the resulting inequality is also true. However, if each side of an inequality is divided by the same negative number, the direction of the inequality symbol must be reversed for the resulting inequality to be true.

<b>Division Property of Inequalities</b>	<p>For all numbers <math>a</math>, <math>b</math>, and <math>c</math> with <math>c \neq 0</math>,</p> <p>1. if <math>c</math> is positive and <math>a &gt; b</math>, then <math>\frac{a}{c} &gt; \frac{b}{c}</math>; if <math>c</math> is positive and <math>a &lt; b</math>, then <math>\frac{a}{c} &lt; \frac{b}{c}</math>;</p> <p>2. if <math>c</math> is negative and <math>a &gt; b</math>, then <math>\frac{a}{c} &lt; \frac{b}{c}</math>; if <math>c</math> is negative and <math>a &lt; b</math>, then <math>\frac{a}{c} &gt; \frac{b}{c}</math>.</p>
--	---

The property is also true when  $>$  and  $<$  are replaced with  $\geq$  and  $\leq$ .

**Example****Solve  $-12y \geq 48$ .**

$$-12y \geq 48$$

Original inequality

$$\frac{-12y}{-12} \leq \frac{48}{-12}$$

Divide each side by  $-12$  and change  $\geq$  to  $\leq$ .

$$y \leq -4$$

Simplify.

The solution is  $\{y \mid y \leq -4\}$ .

**Exercises**

**Solve each inequality. Check your solution.**

1.  $25g \geq -100$

2.  $-2x \geq 9$

3.  $-5c > 2$

4.  $-8m < -64$

5.  $-6k < \frac{1}{5}$

6.  $18 < -3b$

7.  $30 < -3n$

8.  $-0.24 < 0.6w$

9.  $25 \geq -2m$

10.  $-30 > -5p$

11.  $-2n \geq 6.2$

12.  $35 < 0.05h$

13.  $-40 > 10h$

14.  $-\frac{2}{3n} \geq 6$

15.  $-3 < \frac{p}{4}$

16.  $4 > \frac{-x}{2}$

**Define a variable, write an inequality, and solve each problem. Then check your solution.**

17. Four times a number is no more than 108.

18. The opposite of three times a number is greater than 12.

19. Negative five times a number is at most 100.



**5-3 Study Guide and Intervention****Solving Multi-Step Inequalities**

**Solve Multi-Step Inequalities** To solve linear inequalities involving more than one operation, undo the operations in reverse of the order of operations, just as you would solve an equation with more than one operation.

**Example 1 Solve  $6x - 4 \leq 2x + 12$ .**

$$\begin{array}{ll}
 6x - 4 \leq 2x + 12 & \text{Original inequality} \\
 6x - 4 - 2x \leq 2x + 12 - 2x & \text{Subtract } 2x \text{ from} \\
 & \text{each side.} \\
 4x - 4 \leq 12 & \text{Simplify.} \\
 4x - 4 + 4 \leq 12 + 4 & \text{Add 4 to each side.} \\
 4x \leq 16 & \text{Simplify.} \\
 \frac{4x}{4} \leq \frac{16}{4} & \text{Divide each side by 4.} \\
 x \leq 4 & \text{Simplify.}
 \end{array}$$

The solution is  $\{x \mid x \leq 4\}$ .

**Example 2 Solve  $3a - 15 > 4 + 5a$ .**

$$\begin{array}{ll}
 3a - 15 > 4 + 5a & \text{Original inequality} \\
 3a - 15 - 5a > 4 + 5a - 5a & \text{Subtract } 5a \text{ from} \\
 & \text{each side.} \\
 -2a - 15 > 4 & \text{Simplify.} \\
 -2a - 15 + 15 > 4 + 15 & \text{Add 15 to each side.} \\
 -2a > 19 & \text{Simplify.} \\
 \frac{-2a}{-2} < \frac{19}{-2} & \text{Divide each side by } -2 \\
 & \text{and change } > \text{ to } < . \\
 a < -9\frac{1}{2} & \text{Simplify.}
 \end{array}$$

The solution is  $\{a \mid a < -9\frac{1}{2}\}$ .

**Exercises**

**Solve each inequality. Check your solution.**

1.  $11y + 13 \geq -1$

2.  $8n - 10 < 6 - 2n$

3.  $\frac{q}{7} + 1 > -5$

4.  $6n + 12 < 8 + 8n$

5.  $-12 - d > -12 + 4d$

6.  $5r - 6 > 8r - 18$

7.  $\frac{-3x + 6}{2} \leq 12$

8.  $7.3y - 14.4 > 4.9y$

9.  $-8m - 3 < 18 - m$

10.  $-4y - 10 > 19 - 2y$

11.  $9n - 24n + 45 > 0$

12.  $\frac{4x - 2}{5} \geq -4$

**Define a variable, write an inequality, and solve each problem. Check your solution.**

13. Negative three times a number plus four is no more than the number minus eight.

14. One fourth of a number decreased by three is at least two.

15. The sum of twelve and a number is no greater than the sum of twice the number and  $-8$ .

**5-3 Study Guide and Intervention** *(continued)***Solving Multi-Step Inequalities**

**Solve Inequalities Involving the Distributive Property** When solving inequalities that contain grouping symbols, first use the Distributive Property to remove the grouping symbols. Then undo the operations in reverse of the order of operations, just as you would solve an equation with more than one operation.

**Example** Solve  $3a - 2(6a - 4) > 4 - (4a + 6)$ .

$3a - 2(6a - 4) > 4 - (4a + 6)$	Original inequality
$3a - 12a + 8 > 4 - 4a - 6$	Distributive Property
$-9a + 8 > -2 - 4a$	Combine like terms.
$-9a + 8 + 4a > -2 - 4a + 4a$	Add $4a$ to each side.
$-5a + 8 > -2$	Combine like terms.
$-5a + 8 - 8 > -2 - 8$	Subtract 8 from each side.
$-5a > -10$	Simplify.
$a < 2$	Divide each side by $-5$ and change $>$ to $<$ .

The solution in set-builder notation is  $\{a \mid a < 2\}$ .

**Exercises**

**Solve each inequality. Check your solution.**

1.  $2(t + 3) \geq 16$

2.  $3(d - 2) - 2d > 16$

3.  $4h - 8 < 2(h - 1)$

4.  $6y + 10 > 8 - (y + 14)$

5.  $4.6(x - 3.4) > 5.1x$

6.  $-5x - (2x + 3) \geq 1$

7.  $3(2y - 4) - 2(y + 1) > 10$

8.  $8 - 2(b + 1) < 12 - 3b$

9.  $-2(k - 1) > 8(1 + k)$

10.  $0.3(y - 2) > 0.4(1 + y)$

11.  $m + 17 \leq -(4m - 13)$

12.  $3n + 8 \leq 2(n - 4) - 2(1 - n)$

13.  $2(y - 2) > -4 + 2y$

14.  $k - 17 \leq -(17 - k)$

15.  $n - 4 \leq -3(2 + n)$

**Define a variable, write an inequality, and solve each problem. Check your solution.**

16. Twice the sum of a number and 4 is less than 12.

17. Three times the sum of a number and six is greater than four times the number decreased by two.

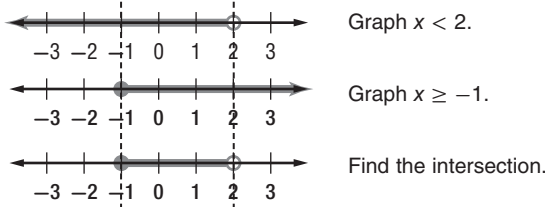
18. Twice the difference of a number and four is less than the sum of the number and five.

# 5-4 Study Guide and Intervention

## Solving Compound Inequalities

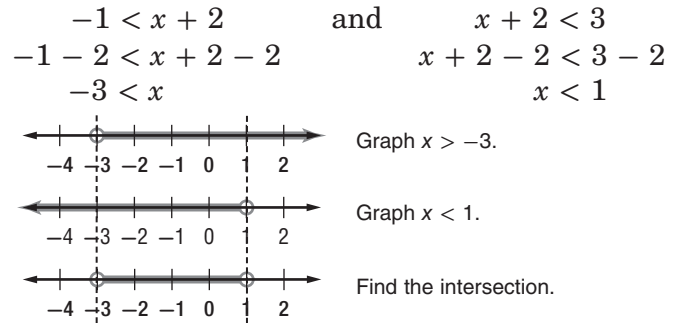
**Inequalities Containing *and*** A compound inequality containing *and* is true only if both inequalities are true. The graph of a compound inequality containing *and* is the **intersection** of the graphs of the two inequalities. Every solution of the compound inequality must be a solution of both inequalities.

**Example 1** Graph the solution set of  $x < 2$  and  $x \geq -1$ .



The solution set is  $\{x \mid -1 \leq x < 2\}$ .

**Example 2** Solve  $-1 < x + 2 < 3$ . Then graph the solution set.

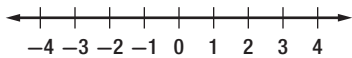


The solution set is  $\{x \mid -3 < x < 1\}$ .

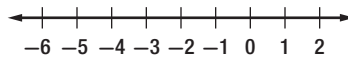
### Exercises

Graph the solution set of each compound inequality.

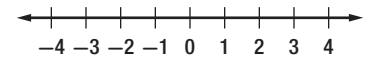
1.  $b > -1$  and  $b \leq 3$



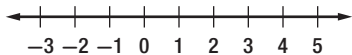
2.  $2 \geq q \geq -5$



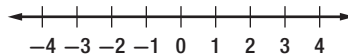
3.  $x > -3$  and  $x \leq 4$



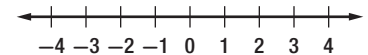
4.  $-2 \leq p < 4$



5.  $-3 < d$  and  $d < 2$

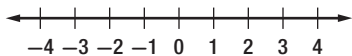


6.  $-1 \leq p \leq 3$

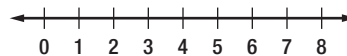


Solve each compound inequality. Then graph the solution set.

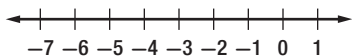
7.  $4 < w + 3 \leq 5$



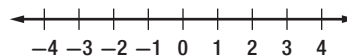
8.  $-3 \leq p - 5 < 2$



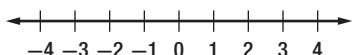
9.  $-4 < x + 2 \leq -2$



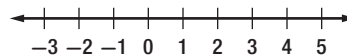
10.  $y - 1 < 2$  and  $y + 2 \geq 1$



11.  $n - 2 > -3$  and  $n + 4 < 6$



12.  $d - 3 < 6d + 12 < 2d + 32$



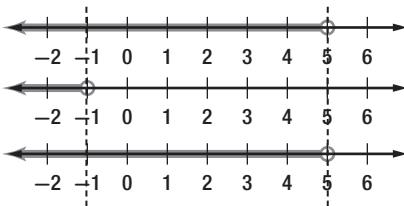
# 5-4 Study Guide and Intervention *(continued)*

## Solving Compound Inequalities

**Inequalities Containing or** A compound inequality containing *or* is true if one or both of the inequalities are true. The graph of a compound inequality containing *or* is the **union** of the graphs of the two inequalities. The union can be found by graphing both inequalities on the same number line. A solution of the compound inequality is a solution of either inequality, not necessarily both.

**Example** Solve  $2a + 1 < 11$  or  $a > 3a + 2$ . Then graph the solution set.

$2a + 1 < 11$	or	$a > 3a + 2$
$2a + 1 - 1 < 11 - 1$		$a - 3a > 3a - 3a + 2$
$2a < 10$		$-2a > 2$
$\frac{2a}{2} < \frac{10}{2}$		$\frac{-2a}{-2} < \frac{-2}{-2}$
$a < 5$		$a < -1$



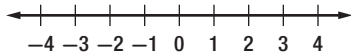
Graph  $a < 5$ .  
Graph  $a < -1$ .  
Find the union.

The solution set is  $\{a \mid a < 5\}$ .

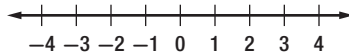
### Exercises

Graph the solution set of each compound inequality.

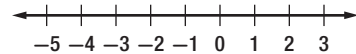
1.  $b > 2$  or  $b \leq -3$



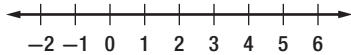
2.  $3 \geq q$  or  $q \leq 1$



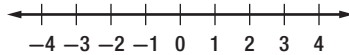
3.  $y \leq -4$  or  $y > 0$



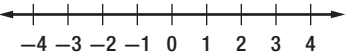
4.  $4 \leq p$  or  $p < 8$



5.  $-3 < d$  or  $d < 2$

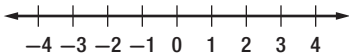


6.  $-2 \leq x$  or  $3 \leq x$

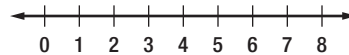


Solve each compound inequality. Then graph the solution set.

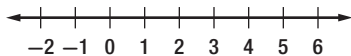
7.  $3 < 3w$  or  $3w \geq 9$



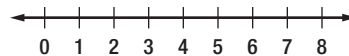
8.  $-3p + 1 \leq -11$  or  $p < 2$



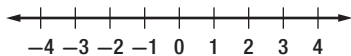
9.  $2x + 4 \leq 6$  or  $x \geq 2x - 4$



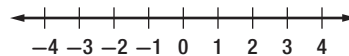
10.  $2y + 2 < 12$  or  $y - 3 \geq 2y$



11.  $\frac{1}{2}n > -2$  or  $2n - 2 < 6 + n$



12.  $3a + 2 \geq 5$  or  $7 + 3a < 2a + 6$



# 5-5 Study Guide and Intervention

## Inequalities Involving Absolute Value

**Inequalities Involving Absolute Value (<)** When solving inequalities that involve absolute value, there are two cases to consider for inequalities involving < (or ≤).

If  $|x| < n$ , then  $x > -n$  and  $x < n$ .

Remember that inequalities with *and* are related to intersections.

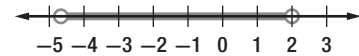
**Example**

Solve  $|3a + 4| < 10$ . Then graph the solution set.

Write  $|3a + 4| < 10$  as  $3a + 4 < 10$  and  $3a + 4 > -10$ .

$3a + 4 < 10$	and	$3a + 4 > -10$
$3a + 4 - 4 < 10 - 4$		$3a + 4 - 4 > -10 - 4$
$3a < 6$		$3a > -14$
$\frac{3a}{3} < \frac{6}{3}$		$\frac{3a}{3} > \frac{-14}{3}$
$a < 2$		$a > -4\frac{2}{3}$

Now graph the solution set.

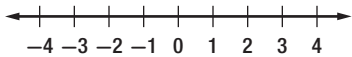


The solution set is  $\left\{a \mid -4\frac{2}{3} < a < 2\right\}$ .

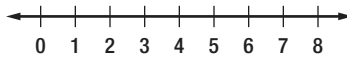
### Exercises

Solve each inequality. Then graph the solution set.

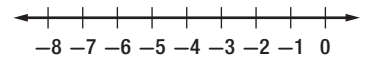
1.  $|y| < 3$



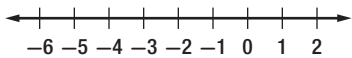
2.  $|x - 4| < 4$



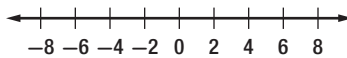
3.  $|y + 3| \leq 2$



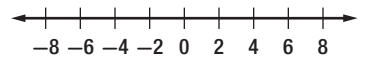
4.  $|b + 2| \leq 3$



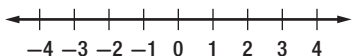
5.  $|w - 2| \leq 5$



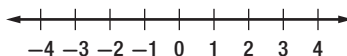
6.  $|t + 2| \leq 4$



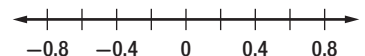
7.  $|2x| \leq 8$



8.  $|5y - 2| \leq 7$



9.  $|p - 0.2| < 0.5$



# 5-5 Study Guide and Intervention *(continued)*

## Inequalities Involving Absolute Value

**Solve Absolute Value Inequalities (>)** When solving inequalities that involve absolute value, there are two cases to consider for inequalities involving > (or ≥). Remember that inequalities with *or* are related to unions.

**Example** Solve  $|2b + 9| > 5$ . Then graph the solution set.

Write  $|2b + 9| > 5$  as  $|2b + 9| > 5$  or  $|2b + 9| < -5$ .

$$2b + 9 > 5 \quad \text{or} \quad 2b + 9 < -5$$

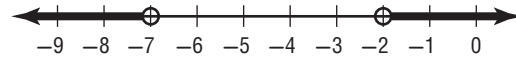
$$2b + 9 - 9 > 5 - 9 \quad 2b + 9 - 9 < -5 - 9$$

$$2b > -4 \quad 2b > -14$$

$$\frac{2b}{2} > \frac{-4}{2} \quad \frac{2b}{2} > \frac{-14}{2}$$

$$b > -2 \quad b < -7$$

Now graph the solution set.

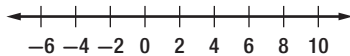


The solution set is  $\{b \mid b > -2, \text{ or } b < -7\}$ .

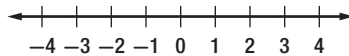
### Exercises

Solve each inequality. Then graph the solution set.

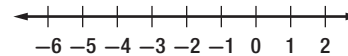
1.  $|c - 2| > 6$



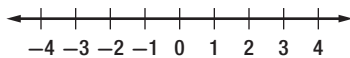
2.  $|x - 3| > 0$



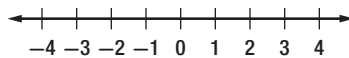
3.  $|3f + 10| \geq 4$



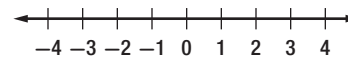
4.  $|x| \geq 2$



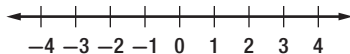
5.  $|x| \geq 3$



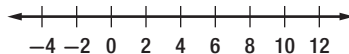
6.  $|2x + 1| \geq -2$



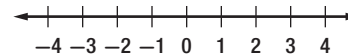
7.  $|2d - 1| \geq 4$



8.  $|3 - (x - 1)| \geq 8$



9.  $|3r + 2| > -5$



# 5-6 Study Guide and Intervention

## Graphing Inequalities in Two Variables

**Graph Linear Inequalities** The solution set of an inequality that involves two variables is graphed by graphing a related linear equation that forms a boundary of a **half-plane**. The graph of the ordered pairs that make up the solution set of the inequality fill a region of the coordinate plane on one side of the half-plane.

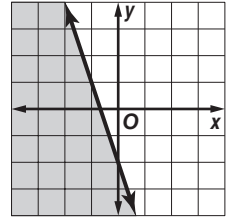
**Example** Graph  $y \leq -3x - 2$ .

Graph  $y = -3x - 2$ .

Since  $y \leq -3x - 2$  is the same as  $y < -3x - 2$  and  $y = -3x - 2$ , the boundary is included in the solution set and the graph should be drawn as a solid line.

Select a point in each half plane and test it. Choose  $(0, 0)$  and  $(-2, -2)$ .

$y \leq -3x - 2$	$y \leq -3x - 2$
$0 \leq -3(0) - 2$	$-2 \leq -3(-2) - 2$
$0 \leq -2$ is false.	$-2 \leq 6 - 2$
$-2 \leq 4$ is true.	

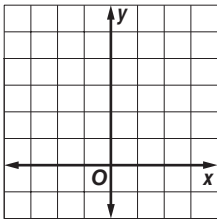


The half-plane that contains  $(-2, -2)$  contains the solution. Shade that half-plane.

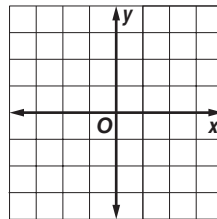
### Exercises

Graph each inequality.

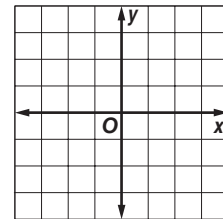
1.  $y < 4$



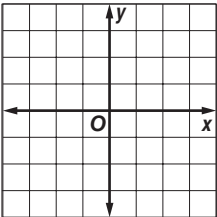
2.  $x \geq 1$



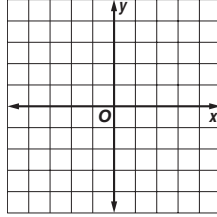
3.  $3x \leq y$



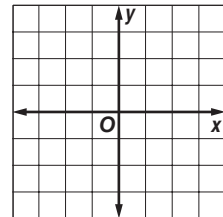
4.  $-x > y$



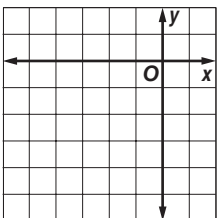
5.  $x - y \geq 1$



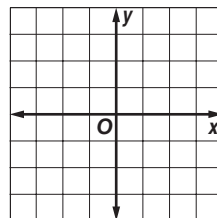
6.  $2x - 3y \leq 6$



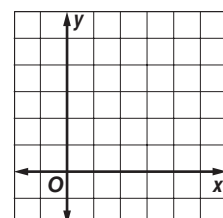
7.  $y < -\frac{1}{2}x - 3$



8.  $4x - 3y < 6$



9.  $3x + 6y \geq 12$



# 5-6 Study Guide and Intervention *(continued)*

## Graphing Inequalities in Two Variables

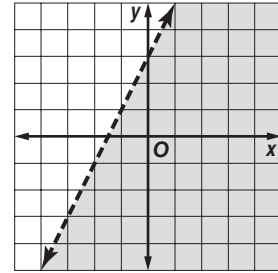
**Solve Linear Inequalities** We can use a coordinate plane to solve inequalities with one variable.

**Example** Use a graph to solve  $2x + 2 > -1$ .

**Step 1** First graph the boundary, which is the related function. Replace the inequality sign with an equals sign, and get 0 on a side by itself.

$2x + 2 > -1$	Original inequality
$2x + 2 = -1$	Change $>$ to $=$ .
$2x + 2 + 1 = -1 + 1$	Add 1 to each side.
$2x + 3 = 0$	Simplify.

Graph  $2x + 3 = y$  as a dashed line.



**Step 2** Choose  $(0, 0)$  as a test point, substituting these values into the original inequality give us  $3 > -5$ .

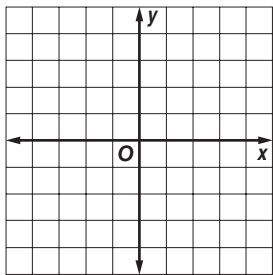
**Step 3** Because this statement is true, shade the half plane containing the point  $(0, 0)$ .

Notice that the  $x$ -intercept of the graph is at  $-1\frac{1}{2}$ . Because the half-plane to the right of the  $x$ -intercept is shaded, the solution is  $x > -1\frac{1}{2}$ .

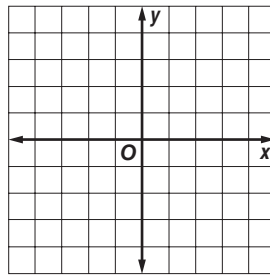
### Exercises

Use a graph to solve each inequality.

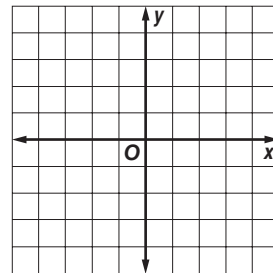
1.  $x + 7 \leq 5$



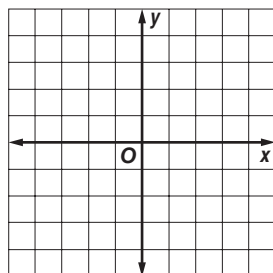
2.  $x - 2 > 2$



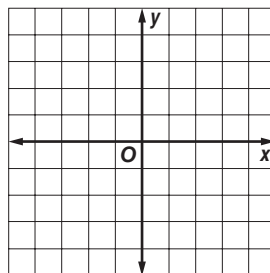
3.  $-x + 1 < -3$



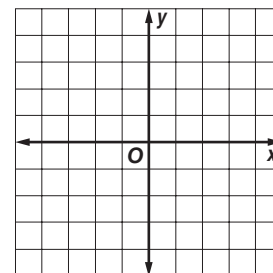
4.  $-x - 7 \geq -6$



5.  $3x - 20 < -17$



6.  $-2x + 11 \geq 15$

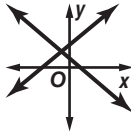
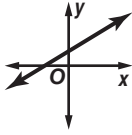
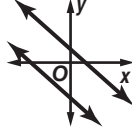




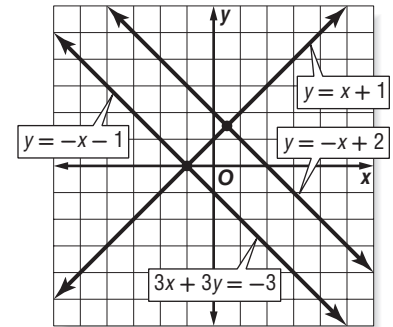
# 6-1 Study Guide and Intervention

## Graphing Systems of Equations

**Possible Number of Solutions** Two or more linear equations involving the same variables form a **system of equations**. A solution of the system of equations is an ordered pair of numbers that satisfies both equations. The table below summarizes information about systems of linear equations.

Graph of a System	intersecting lines	same line	parallel lines
			
Number of Solutions	exactly one solution	infinitely many solutions	no solution
Terminology	consistent and independent	consistent and dependent	inconsistent

**Example** Use the graph at the right to determine whether each system is *consistent* or *inconsistent* and if it is *independent* or *dependent*.



a.  $y = -x + 2$   
 $y = x + 1$

Since the graphs of  $y = -x + 2$  and  $y = x + 1$  intersect, there is one solution. Therefore, the system is consistent and independent.

b.  $y = -x + 2$   
 $3x + 3y = -3$

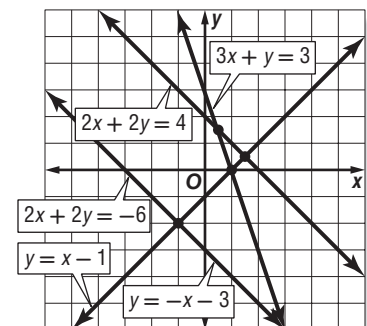
Since the graphs of  $y = -x + 2$  and  $3x + 3y = -3$  are parallel, there are no solutions. Therefore, the system is inconsistent.

c.  $3x + 3y = -3$   
 $y = -x - 1$

Since the graphs of  $3x + 3y = -3$  and  $y = -x - 1$  coincide, there are infinitely many solutions. Therefore, the system is consistent and dependent.

### Exercises

Use the graph at the right to determine whether each system is *consistent* or *inconsistent* and if it is *independent* or *dependent*.



1.  $y = -x - 3$   
 $y = x - 1$

2.  $2x + 2y = -6$   
 $y = -x - 3$

3.  $y = -x - 3$   
 $2x + 2y = 4$

4.  $2x + 2y = -6$   
 $3x + y = 3$

# 6-1 Study Guide and Intervention *(continued)*

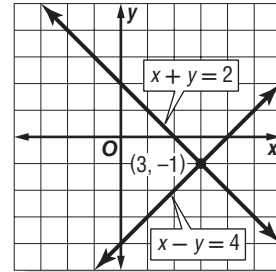
## Graphing Systems of Equations

**Solve by Graphing** One method of solving a system of equations is to graph the equations on the same coordinate plane.

**Example** Graph each system and determine the number of solutions that it has. If it has one solution, name it.

a.  $x + y = 2$   
 $x - y = 4$

The graphs intersect. Therefore, there is one solution. The point  $(3, -1)$  seems to lie on both lines. Check this estimate by replacing  $x$  with 3 and  $y$  with  $-1$  in each equation.



$$x + y = 2$$

$$3 + (-1) = 2 \quad 3$$

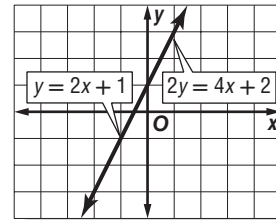
$$x - y = 4$$

$$3 - (-1) = 3 + 1 \text{ or } 4 \quad 3$$

The solution is  $(3, -1)$ .

b.  $y = 2x + 1$   
 $2y = 4x + 2$

The graphs coincide. Therefore there are infinitely many solutions.

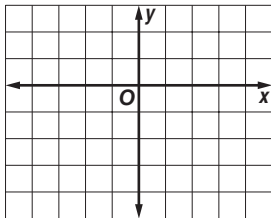


### Exercises

Graph each system and determine the number of solutions it has. If it has one solution, name it.

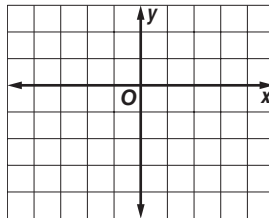
1.  $y = -2$

$3x - y = -1$



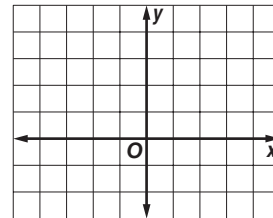
2.  $x = 2$

$2x + y = 1$



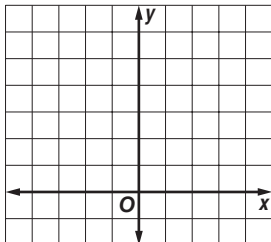
3.  $y = \frac{1}{2}x$

$x + y = 3$



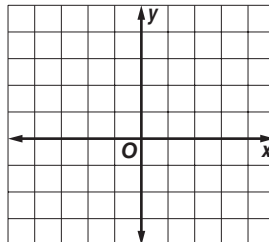
4.  $2x + y = 6$

$2x - y = -2$



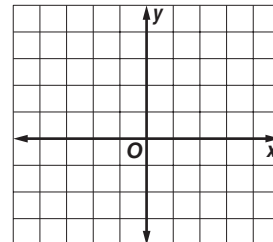
5.  $3x + 2y = 6$

$3x + 2y = -4$



6.  $2y = -4x + 4$

$y = -2x + 2$



**6-2 Study Guide and Intervention****Substitution****Solve by Substitution** One method of solving systems of equations is **substitution**.**Example 1** Use substitution to solve the system of equations.

$$y = 2x$$

$$4x - y = -4$$

Substitute  $2x$  for  $y$  in the second equation.

$$4x - y = -4 \quad \text{Second equation}$$

$$4x - 2x = -4 \quad y = 2x$$

$$2x = -4 \quad \text{Combine like terms.}$$

$$x = -2 \quad \text{Divide each side by 2 and simplify.}$$

Use  $y = 2x$  to find the value of  $y$ .

$$y = 2x \quad \text{First equation}$$

$$y = 2(-2) \quad x = -2$$

$$y = -4 \quad \text{Simplify.}$$

The solution is  $(-2, -4)$ .**Example 2** Solve for one variable, then substitute.

$$x + 3y = 7$$

$$2x - 4y = -6$$

Solve the first equation for  $x$  since the coefficient of  $x$  is 1.

$$x + 3y = 7 \quad \text{First equation}$$

$$x + 3y - 3y = 7 - 3y \quad \text{Subtract } 3y \text{ from each side.}$$

$$x = 7 - 3y \quad \text{Simplify.}$$

Find the value of  $y$  by substituting  $7 - 3y$  for  $x$  in the second equation.

$$2x - 4y = -6 \quad \text{Second equation}$$

$$2(7 - 3y) - 4y = -6 \quad x = 7 - 3y$$

$$14 - 6y - 4y = -6 \quad \text{Distributive Property}$$

$$14 - 10y = -6 \quad \text{Combine like terms.}$$

$$14 - 10y - 14 = -6 - 14 \quad \text{Subtract 14 from each side.}$$

$$-10y = -20 \quad \text{Simplify.}$$

$$y = 2 \quad \text{Divide each side by } -10 \text{ and simplify.}$$

Use  $y = 2$  to find the value of  $x$ .

$$x = 7 - 3y$$

$$x = 7 - 3(2)$$

$$x = 1$$

The solution is  $(1, 2)$ .**Exercises**

Use substitution to solve each system of equations.

$$1. y = 4x$$

$$3x - y = 1$$

$$2. x = 2y$$

$$y = x - 2$$

$$3. x = 2y - 3$$

$$x = 2y + 4$$

$$4. x - 2y = -1$$

$$3y = x + 4$$

$$5. x - 4y = 1$$

$$2x - 8y = 2$$

$$6. x + 2y = 0$$

$$3x + 4y = 4$$

$$7. 2b = 6a - 14$$

$$3a - b = 7$$

$$8. x + y = 16$$

$$2y = -2x + 2$$

$$9. y = -x + 3$$

$$2y + 2x = 4$$

$$10. x = 2y$$

$$0.25x + 0.5y = 10$$

$$11. x - 2y = -5$$

$$x + 2y = -1$$

$$12. -0.2x + y = 0.5$$

$$0.4x + y = 1.1$$

**6-2 Study Guide and Intervention** *(continued)***Substitution**

**Solve Real-World Problems** Substitution can also be used to solve real-world problems involving systems of equations. It may be helpful to use tables, charts, diagrams, or graphs to help you organize data.

**Example** **CHEMISTRY** How much of a 10% saline solution should be mixed with a 20% saline solution to obtain 1000 milliliters of a 12% saline solution?

Let  $s$  = the number of milliliters of 10% saline solution.

Let  $t$  = the number of milliliters of 20% saline solution.

Use a table to organize the information.

	10% saline	20% saline	12% saline
Total milliliters	$s$	$t$	1000
Milliliters of saline	$0.10s$	$0.20t$	$0.12(1000)$

Write a system of equations.

$$s + t = 1000$$

$$0.10s + 0.20t = 0.12(1000)$$

Use substitution to solve this system.

$$s + t = 1000$$

$$s = 1000 - t$$

$$0.10s + 0.20t = 0.12(1000)$$

$$0.10(1000 - t) + 0.20t = 0.12(1000)$$

$$100 - 0.10t + 0.20t = 0.12(1000)$$

$$100 + 0.10t = 0.12(1000)$$

$$0.10t = 20$$

$$\frac{0.10t}{0.10} = \frac{20}{0.10}$$

$$t = 200$$

$$s + t = 1000$$

$$s + 200 = 1000$$

$$s = 800$$

800 milliliters of 10% solution and 200 milliliters of 20% solution should be used.

First equation

Solve for  $s$ .

Second equation

$$s = 1000 - t$$

Distributive Property

Combine like terms.

Simplify.

Divide each side by 0.10.

Simplify.

First equation

$$t = 200$$

Solve for  $s$ .

**Exercises**

- SPORTS** At the end of the 2007–2008 football season, 38 Super Bowl games had been played with the current two football leagues, the American Football Conference (AFC) and the National Football Conference (NFC). The NFC won two more games than the AFC. How many games did each conference win?
- CHEMISTRY** A lab needs to make 100 gallons of an 18% acid solution by mixing a 12% acid solution with a 20% solution. How many gallons of each solution are needed?
- GEOMETRY** The perimeter of a triangle is 24 inches. The longest side is 4 inches longer than the shortest side, and the shortest side is three-fourths the length of the middle side. Find the length of each side of the triangle.

## 6-3 Study Guide and Intervention

### Elimination Using Addition and Subtraction

**Elimination Using Addition** In systems of equations in which the coefficients of the  $x$  or  $y$  terms are additive inverses, solve the system by adding the equations. Because one of the variables is eliminated, this method is called **elimination**.

**Example 1** Use elimination to solve the system of equations.

$$x - 3y = 7$$

$$3x + 3y = 9$$

Write the equations in column form and add to eliminate  $y$ .

$$\begin{array}{r} x - 3y = 7 \\ (+) 3x + 3y = 9 \\ \hline 4x = 16 \end{array}$$

Solve for  $x$ .

$$\begin{array}{r} \frac{4x}{4} = \frac{16}{4} \\ x = 4 \end{array}$$

Substitute 4 for  $x$  in either equation and solve for  $y$ .

$$\begin{array}{r} 4 - 3y = 7 \\ 4 - 3y - 4 = 7 - 4 \\ -3y = 3 \\ \frac{-3y}{-3} = \frac{3}{-3} \\ y = -1 \end{array}$$

The solution is  $(4, -1)$ .

**Example 2** The sum of two numbers is 70 and their difference is 24. Find the numbers.

Let  $x$  represent one number and  $y$  represent the other number.

$$\begin{array}{r} x + y = 70 \\ (+) x - y = 24 \\ \hline 2x = 94 \\ \frac{2x}{2} = \frac{94}{2} \\ x = 47 \end{array}$$

Substitute 47 for  $x$  in either equation.

$$\begin{array}{r} 47 + y = 70 \\ 47 + y - 47 = 70 - 47 \\ y = 23 \end{array}$$

The numbers are 47 and 23.

### Exercises

Use elimination to solve each system of equations.

1.  $x + y = -4$

$$x - y = 2$$

2.  $2x - 3y = 14$

$$x + 3y = -11$$

3.  $3x - y = -9$

$$-3x - 2y = 0$$

4.  $-3x - 4y = -1$

$$3x - y = -4$$

5.  $3x + y = 4$

$$2x - y = 6$$

6.  $-2x + 2y = 9$

$$2x - y = -6$$

7.  $2x + 2y = -2$

$$3x - 2y = 12$$

8.  $4x - 2y = -1$

$$-4x + 4y = -2$$

9.  $x - y = 2$

$$x + y = -3$$

10.  $2x - 3y = 12$

$$4x + 3y = 24$$

11.  $-0.2x + y = 0.5$

$$0.2x + 2y = 1.6$$

12.  $0.1x + 0.3y = 0.9$

$$0.1x - 0.3y = 0.2$$

13. Rema is older than Ken. The difference of their ages is 12 and the sum of their ages is 50. Find the age of each.

14. The sum of the digits of a two-digit number is 12. The difference of the digits is 2. Find the number if the units digit is larger than the tens digit.

**6-3 Study Guide and Intervention** *(continued)***Elimination Using Addition and Subtraction**

**Elimination Using Subtraction** In systems of equations where the coefficients of the  $x$  or  $y$  terms are the same, solve the system by subtracting the equations.

**Example**

Use elimination to solve the system of equations.

$$2x - 3y = 11$$

$$5x - 3y = 14$$

$$\begin{array}{r}
 2x - 3y = 11 \\
 (-) 5x - 3y = 14 \\
 \hline
 -3x \qquad = -3 \\
 \quad \frac{-3x}{-3} = \frac{-3}{-3} \\
 \qquad \quad x = 1 \\
 2(1) - 3y = 11 \\
 2 - 3y = 11 \\
 2 - 3y - 2 = 11 - 2 \\
 -3y = 9 \\
 \quad \frac{-3y}{-3} = \frac{9}{-3} \\
 \qquad \quad y = -3
 \end{array}$$

Write the equations in column form and subtract.

Subtract the two equations.  $y$  is eliminated.Divide each side by  $-3$ .

Simplify.

Substitute 1 for  $x$  in either equation.

Simplify.

Subtract 2 from each side.

Simplify.

Divide each side by  $-3$ .

Simplify.

The solution is  $(1, -3)$ .**Exercises**

Use elimination to solve each system of equations.

$$\begin{array}{l}
 1. \ 6x + 5y = 4 \\
 \quad 6x - 7y = -20
 \end{array}$$

$$\begin{array}{l}
 2. \ 3m - 4n = -14 \\
 \quad 3m + 2n = -2
 \end{array}$$

$$\begin{array}{l}
 3. \ 3a + b = 1 \\
 \quad a + b = 3
 \end{array}$$

$$\begin{array}{l}
 4. \ -3x - 4y = -23 \\
 \quad -3x + y = 2
 \end{array}$$

$$\begin{array}{l}
 5. \ x - 3y = 11 \\
 \quad 2x - 3y = 16
 \end{array}$$

$$\begin{array}{l}
 6. \ x - 2y = 6 \\
 \quad x + y = 3
 \end{array}$$

$$\begin{array}{l}
 7. \ 2a - 3b = -13 \\
 \quad 2a + 2b = 7
 \end{array}$$

$$\begin{array}{l}
 8. \ 4x + 2y = 6 \\
 \quad 4x + 4y = 10
 \end{array}$$

$$\begin{array}{l}
 9. \ 5x - y = 6 \\
 \quad 5x + 2y = 3
 \end{array}$$

$$\begin{array}{l}
 10. \ 6x - 3y = 12 \\
 \quad 4x - 3y = 24
 \end{array}$$

$$\begin{array}{l}
 11. \ x + 2y = 3.5 \\
 \quad x - 3y = -9
 \end{array}$$

$$\begin{array}{l}
 12. \ 0.2x + y = 0.7 \\
 \quad 0.2x + 2y = 1.2
 \end{array}$$

13. The sum of two numbers is 70. One number is ten more than twice the other number. Find the numbers.

14. **GEOMETRY** Two angles are supplementary. The measure of one angle is  $10^\circ$  more than three times the other. Find the measure of each angle.

## 6-4 Study Guide and Intervention

### Elimination Using Multiplication

**Elimination Using Multiplication** Some systems of equations cannot be solved simply by adding or subtracting the equations. In such cases, one or both equations must first be multiplied by a number before the system can be solved by elimination.

**Example 1** Use elimination to solve the system of equations.

$$\begin{aligned}x + 10y &= 3 \\4x + 5y &= 5\end{aligned}$$

If you multiply the second equation by  $-2$ , you can eliminate the  $y$  terms.

$$\begin{array}{r}x + 10y = 3 \\(+)\ -8x - 10y = -10 \\ \hline-7x \qquad = -7 \\ \frac{7x}{-7} = \frac{-7}{-7} \\x = 1\end{array}$$

Substitute 1 for  $x$  in either equation.

$$\begin{aligned}1 + 10y &= 3 \\1 + 10y - 1 &= 3 - 1 \\10y &= 2 \\ \frac{10y}{10} &= \frac{2}{10} \\y &= \frac{1}{5}\end{aligned}$$

The solution is  $\left(1, \frac{1}{5}\right)$ .

**Example 2** Use elimination to solve the system of equations.

$$\begin{aligned}3x - 2y &= -7 \\2x - 5y &= 10\end{aligned}$$

If you multiply the first equation by 2 and the second equation by  $-3$ , you can eliminate the  $x$  terms.

$$\begin{array}{r}6x - 4y = -14 \\(+)\ -6x + 15y = -30 \\ \hline11y = -44 \\ \frac{11y}{11} = \frac{-44}{11} \\y = -4\end{array}$$

Substitute  $-4$  for  $y$  in either equation.

$$\begin{aligned}3x - 2(-4) &= -7 \\3x + 8 &= -7 \\3x + 8 - 8 &= -7 - 8 \\3x &= -15 \\ \frac{3x}{3} &= \frac{-15}{3} \\x &= -5\end{aligned}$$

The solution is  $(-5, -4)$ .

### Exercises

Use elimination to solve each system of equations.

1.  $\begin{aligned}2x + 3y &= 6 \\x + 2y &= 5\end{aligned}$

2.  $\begin{aligned}2m + 3n &= 4 \\-m + 2n &= 5\end{aligned}$

3.  $\begin{aligned}3a - b &= 2 \\a + 2b &= 3\end{aligned}$

4.  $\begin{aligned}4x + 5y &= 6 \\6x - 7y &= -20\end{aligned}$

5.  $\begin{aligned}4x - 3y &= 22 \\2x - y &= 10\end{aligned}$

6.  $\begin{aligned}3x - 4y &= -4 \\x + 3y &= -10\end{aligned}$

7.  $\begin{aligned}4x - y &= 9 \\5x + 2y &= 8\end{aligned}$

8.  $\begin{aligned}4a - 3b &= -8 \\2a + 2b &= 3\end{aligned}$

9.  $\begin{aligned}2x + 2y &= 5 \\4x - 4y &= 10\end{aligned}$

10.  $\begin{aligned}6x - 4y &= -8 \\4x + 2y &= -3\end{aligned}$

11.  $\begin{aligned}4x + 2y &= -5 \\-2x - 4y &= 1\end{aligned}$

12.  $\begin{aligned}2x + y &= 3.5 \\-x + 2y &= 2.5\end{aligned}$

13. **GARDENING** The length of Sally's garden is 4 meters greater than 3 times the width. The perimeter of her garden is 72 meters. What are the dimensions of Sally's garden?

## 6-4 Study Guide and Intervention *(continued)*

### Elimination Using Multiplication

**Solve Real-World Problems** Sometimes it is necessary to use multiplication before elimination in real-world problems.

**Example**

**CANOEING** During a canoeing trip, it takes Raymond 4 hours to paddle 12 miles upstream. It takes him 3 hours to make the return trip paddling downstream. Find the speed of the canoe in still water.

**Read** You are asked to find the speed of the canoe in still water.

**Solve** Let  $c$  = the rate of the canoe in still water.  
Let  $w$  = the rate of the water current.

	$r$	$t$	$d$	$r \cdot t = d$
Against the Current	$c - w$	4	12	$(c - w)4 = 12$
With the Current	$c + w$	3	12	$(c + w)3 = 12$

So, our two equations are  $4c - 4w = 12$  and  $3c + 3w = 12$ .

Use elimination with multiplication to solve the system. Since the problem asks for  $c$ , eliminate  $w$ .

$$\begin{array}{rcl}
 4c - 4w = 12 & \Rightarrow \text{Multiply by } 3 \Rightarrow & 12c - 12w = 36 \\
 3c + 3w = 12 & \Rightarrow \text{Multiply by } 4 \Rightarrow (+) & 12c - 12w = 48 \\
 & & \underline{24c \qquad \qquad = 84} \\
 & & \frac{24c}{24} = \frac{84}{24} \\
 & & c = 3.5
 \end{array}$$

$w$  is eliminated.  
Divide by 24.  
Simplify.

The rate of the canoe in still water is 3.5 miles per hour.

### Exercises

- FLIGHT** An airplane traveling with the wind flies 450 miles in 2 hours. On the return trip, the plane takes 3 hours to travel the same distance. Find the speed of the airplane if the wind is still.
- FUNDRAISING** Benji and Joel are raising money for their class trip by selling gift wrapping paper. Benji raises \$24 by selling 5 rolls of red wrapping paper and 2 rolls of foil wrapping paper. Joel raises \$57 by selling 3 rolls of red wrapping paper and 6 rolls of foil wrapping paper. For how much are Benji and Joel selling each roll of red and foil wrapping paper?



## 6-5 Study Guide and Intervention

### Applying Systems of Linear Equations

**Determine The Best Method** You have learned five methods for solving systems of linear equations: graphing, substitution, elimination using addition, elimination using subtraction, and elimination using multiplication. For an exact solution, an algebraic method is best.

#### Example

At a baseball game, Henry bought 3 hotdogs and a bag of chips for \$14. Scott bought 2 hotdogs and a bag of chips for \$10. Each of the boys paid the same price for their hotdogs, and the same price for their chips. The following system of equations can be used to represent the situation. Determine the best method to solve the system of equations. Then solve the system.

$$3x + y = 14$$

$$2x + y = 10$$

- Since neither the coefficients of  $x$  nor the coefficients of  $y$  are additive inverses, you cannot use elimination using addition.
- Since the coefficient of  $y$  in both equations is 1, you can use elimination using subtraction. You could also use the substitution method or elimination using multiplication.

The following solution uses elimination by subtraction to solve this system.

$$\begin{array}{r} 3x + y = 14 \\ (-) 2x + (-) y = (-)10 \\ \hline \end{array}$$

$$\begin{array}{r} x = 4 \\ 3(4) + y = 14 \\ y = 2 \end{array}$$

Write the equations in column form and subtract.

The variable  $y$  is eliminated.

Substitute the value for  $x$  back into the first equation.

Solve for  $y$ .

This means that hot dogs cost \$4 each and a bag of chips costs \$2.

### Exercises

Determine the best method to solve each system of equations. Then solve the system.

$$\begin{array}{l} 1. \ 5x + 3y = 16 \\ \quad 3x - 5y = -4 \end{array}$$

$$\begin{array}{l} 2. \ 3x - 5y = 7 \\ \quad 2x + 5y = 13 \end{array}$$

$$\begin{array}{l} 3. \ y + 3x = 24 \\ \quad 5x - y = 8 \end{array}$$

$$\begin{array}{l} 4. \ -11x - 10y = 17 \\ \quad 5x - 7y = 50 \end{array}$$

**6-5 Study Guide and Intervention** *(continued)***Applying Systems of Linear Equations**

**Apply Systems Of Linear Equations** When applying systems of linear equations to problem situations, it is important to analyze each solution in the context of the situation.

**Example**

**BUSINESS** A T-shirt printing company sells T-shirts for \$15 each. The company has a fixed cost for the machine used to print the T-shirts and an additional cost per T-shirt. Use the table to estimate the number of T-shirts the company must sell in order for the income equal to expenses.

T-shirt Printing Cost	
Printing machine	\$3000.00
blank T-shirt	\$5.00

**Understand** You know the initial income and the initial expense and the rates of change of each quantity with each T-shirt sold.

**Plan** Write an equation to represent the income and the expenses. Then solve to find how many T-shirts need to be sold for both values to be equal.

**Solve** Let  $x$  = the number of T-shirts sold and let  $y$  = the total amount.

	total amount	initial amount	rate of change times number of T-shirts sold
--	--------------	----------------	--

$$\text{income} \quad y = 0 + 15x$$

$$\text{expenses} \quad y = 3000 + 5x$$

You can use substitution to solve this system.

$$y = 15x \quad \text{The first equation.}$$

$$15x = 3000 + 5x \quad \text{Substitute the value for } y \text{ into the second equation.}$$

$$10x = 3000 \quad \text{Subtract } 5x \text{ from each side and simplify.}$$

$$x = 300 \quad \text{Divide each side by } 10 \text{ and simplify.}$$

This means that if 300 T-shirts are sold, the income and expenses of the T-shirt company are equal.

**Check** Does this solution make sense in the context of the problem? After selling 100 T-shirts, the income would be about  $100 \times \$15$  or \$1500. The costs would be about  $\$3000 + 100 \times \$5$  or \$3500.

**Exercises**

**Refer to the example above. If the costs of the T-shirt company change to the given values and the selling price remains the same, determine the number of T-shirts the company must sell in order for income to equal expenses.**

1. printing machine: \$5000.00;  
T-shirt: \$10.00 each

2. printing machine: \$2100.00;  
T-shirt: \$8.00 each

3. printing machine: \$8800.00;  
T-shirt: \$4.00 each

4. printing machine: \$1200.00;  
T-shirt: \$12.00 each

## 6-6 Study Guide and Intervention

### Organizing Data Using Matrices

**Organize Data Using Matrices** A **matrix** is a rectangular arrangement of numbers in rows and columns enclosed in brackets. Matrices can be described by its dimensions or the number of rows and columns in the matrix. A matrix with  $m$  rows and  $n$  columns is an  $m \times n$  matrix.

**Example** State the dimensions of the matrix. Then identify the position of the circled element in the matrix.

$$A = \begin{bmatrix} -1 & 0 & \textcircled{4} \\ 2 & 2 & -7 \end{bmatrix}$$

Matrix  $A$  has 2 rows and 3 columns. Therefore, it is a  $2 \times 3$  matrix. The circled element is in the first row and third column.

### Exercises

State the dimensions of each matrix. Then identify the position of the circled element in each matrix.

1.  $\begin{bmatrix} 9 & 1 & -2 & 8 \\ 0 & \textcircled{-3} & 1 & 4 \end{bmatrix}$

2.  $\begin{bmatrix} 2 & 10 & -3 \\ -1 & 1 & 5 \\ -4 & \textcircled{0} & 8 \end{bmatrix}$

3.  $[2 \textcircled{-1} 5 14 0]$

4. The selling prices for various luxury condominiums are listed in the table to the right.

Condo Development	1 Bedroom	2 Bedrooms	3 Bedrooms
Foxpointe Estates	\$349,000	\$449,000	\$499,000
Condos at Salmon Brook	\$329,900	\$389,900	\$439,900
Kean Mills	\$499,000	\$649,000	\$799,000

- a. Write a matrix to organize the selling prices of the condos.
- b. What are the dimensions of the matrix?
- c. Which condo is the most expensive? least expensive?

**6-6 Study Guide and Intervention** *(continued)***Organizing Data Using Matrices**

**Matrix Operations** If two matrices have the same dimensions, they can be added or subtracted. You add or subtract matrices by adding or subtracting the corresponding elements of the matrices. You can also perform a **scalar multiplication** by multiplying each element of the matrix by a constant.

**Example 1**

If  $A = \begin{bmatrix} 2 & -1 & 8 \\ -3 & 4 & 0 \end{bmatrix}$  and

$B = \begin{bmatrix} 0 & 2 & -4 \\ 5 & -6 & 3 \end{bmatrix}$ , find  $A + B$ .

$$A + B = \begin{bmatrix} 2 & -1 & 8 \\ -3 & 4 & 0 \end{bmatrix} + \begin{bmatrix} 0 & 2 & -4 \\ 5 & -6 & 3 \end{bmatrix} \quad \text{Substitution}$$

$$= \begin{bmatrix} 2+0 & -1+2 & 8+(-4) \\ -3+5 & 4+(-6) & 0+3 \end{bmatrix} \quad \text{Definition of matrix addition}$$

$$= \begin{bmatrix} 2 & 1 & 4 \\ 2 & -2 & 3 \end{bmatrix} \quad \text{Simplify.}$$

**Example 2**

If  $C = \begin{bmatrix} 2 & -10 \\ -3 & 1 \end{bmatrix}$ , find  $-3C$ .

$$-3C = 3 \begin{bmatrix} 2 & -10 \\ -3 & 1 \end{bmatrix} \quad \text{Substitution}$$

$$= \begin{bmatrix} -3(2) & -3(-10) \\ -3(-3) & -3(1) \end{bmatrix} \quad \text{Definition of scalar multiplication}$$

$$= \begin{bmatrix} -6 & 30 \\ 9 & -3 \end{bmatrix} \quad \text{Simplify.}$$

**Exercises**

Perform the indicated matrix operations. If the matrix does not exist, write *impossible*.

1.  $\begin{bmatrix} 3 & -5 \\ 2 & 0 \end{bmatrix} + \begin{bmatrix} -1 & 4 \\ 7 & 3 \end{bmatrix}$

2.  $\begin{bmatrix} 2 \\ -3 \\ 1 \end{bmatrix} - [4 \quad -2 \quad 7]$

3.  $\begin{bmatrix} 2 & -1 \\ 5 & 0 \\ -3 & 4 \end{bmatrix} + \begin{bmatrix} 1 & 2 \\ -3 & 8 \\ 1 & 0 \end{bmatrix}$

4.  $\begin{bmatrix} 9 & -1 & 2 \\ 0 & 4 & 3 \end{bmatrix} - \begin{bmatrix} 3 & -2 & 0 \\ -4 & 3 & 5 \end{bmatrix}$

5.  $2 \begin{bmatrix} 2 & 4 \\ 0 & -1 \end{bmatrix}$

6.  $3 \begin{bmatrix} 2 & -1 & 4 \\ 0 & 1 & 3 \\ 2 & 5 & -2 \end{bmatrix}$

7.  $-2[1 \quad -2 \quad 0 \quad 4]$

8.  $5 \begin{bmatrix} -3 & 2 & -1 \\ 1 & 0 & 4 \end{bmatrix}$

**6-7 Study Guide and Intervention****Using Matrices to Solve Systems of Equations**

**Augmented Matrices** An augmented matrix consists of the coefficients and constant terms of a system of equations, separated by a dashed line.

**Example 1** Write an augmented matrix for each system of equations.

$$2x + 3y = 8$$

$$-x + 4y = 7$$

Place the coefficients of the equations and the constant terms into a matrix.

$$\begin{array}{l} 2x + 3y = 8 \\ -x + 4y = 7 \end{array} \rightarrow \left[ \begin{array}{cc|c} 2 & 3 & 8 \\ -1 & 4 & 7 \end{array} \right]$$

**Example 2** Write an augmented matrix for each system of equations.

$$x + 3y = 6$$

$$2y = 6$$

Place the coefficients of the equations and the constant terms into a matrix.

$$\begin{array}{l} x + 3y = 6 \\ 2y = 6 \end{array} \rightarrow \left[ \begin{array}{cc|c} 1 & 3 & 6 \\ 0 & 2 & 6 \end{array} \right]$$

**Exercises**

1.  $2x - 2y = 10$

$$-4x + y = -35$$

2.  $x - y = 3$

$$x - 2y = -1$$

3.  $-x = -4$

$$3x - 2y = 2$$

4.  $-x + y = 9$

$$4x - y = -6$$

5.  $-2x + 5y = 11$

$$3x - y = 0$$

6.  $2y = 8$

$$-3x = 12$$

7.  $x - y = 3$

$$2x = 12$$

8.  $2x - y = 1$

$$3x + y = 4$$

9.  $2x - y = 4$

$$10x - y = 24$$

10.  $-2x = -4$

$$x + 3y = 8$$

11.  $5x - 2y = 7$

$$x + 4y = 19$$

12.  $x - y = 5$

$$2x + 3y = 15$$

13.  $x + 4y = 10$

$$x - y = 0$$

14.  $3x - y = 1$

$$x + 2y = 19$$

15.  $4y = -2$

$$x + 2y = 3$$

**6-7 Study Guide and Intervention** *(continued)***Using Matrices to Solve Systems of Equations**

**Solve Systems of Equations** You can solve a system of equations using an augmented matrix. To do so, you must use row operations until the matrix takes the form

$\begin{bmatrix} 1 & 0 \\ 0 & 1 \end{bmatrix}$ , also known as the **identity matrix**.

**Example** Use an augmented matrix to solve the system of equations.

$$2x - y = 5$$

$$x + 3y = 6$$

Write the augmented matrix:  $\left[ \begin{array}{cc|c} 2 & -1 & 5 \\ 1 & 3 & 6 \end{array} \right]$ .

Notice that the first element in the second row is 1. Interchange the rows so 1 can be in the upper left-hand corner.

$$\left[ \begin{array}{cc|c} 2 & -1 & 5 \\ 1 & 3 & 6 \end{array} \right] \rightarrow \left[ \begin{array}{cc|c} 1 & 3 & 6 \\ 2 & -1 & 5 \end{array} \right]$$

To make the first element in the second row 0, multiply the first row by  $-2$  and add the result to row 2.

$$\left[ \begin{array}{cc|c} 1 & 3 & 6 \\ 2 & -1 & 5 \end{array} \right] \rightarrow \left[ \begin{array}{cc|c} 1 & 3 & 6 \\ 0 & -7 & -7 \end{array} \right]$$

To make the second element in the second row a 1, multiply the second row by  $-\frac{1}{7}$ .

$$\left[ \begin{array}{cc|c} 1 & 3 & 6 \\ 0 & -7 & -7 \end{array} \right] \rightarrow \left[ \begin{array}{cc|c} 1 & 3 & 6 \\ 0 & 1 & 1 \end{array} \right]$$

To make the second element in the first row a 0, multiply the second row by  $-3$  and add the result to row 1.

$$\left[ \begin{array}{cc|c} 1 & 3 & 6 \\ 0 & 1 & 1 \end{array} \right] \rightarrow \left[ \begin{array}{cc|c} 1 & 0 & 3 \\ 0 & 1 & 1 \end{array} \right]$$

The solution is  $(3, 1)$ .

**Exercises**

Use an augmented matrix to solve each system of equations.

1.  $x + 5y = -7$   
 $2x - y = 8$

2.  $2x - 2y = 6$   
 $x - 2y = -1$

3.  $-x = -3$   
 $2x + 6y = 0$

4.  $-x + y = 9$   
 $-4x + y = 6$

5.  $-2x + 2y = -8$   
 $3x - y = 4$

6.  $2y = 10$   
 $6x + y = -7$

# 6-8 Study Guide and Intervention

## Systems of Inequalities

**Systems of Inequalities** The solution of a **system of inequalities** is the set of all ordered pairs that satisfy both inequalities. If you graph the inequalities in the same coordinate plane, the solution is the region where the graphs overlap.

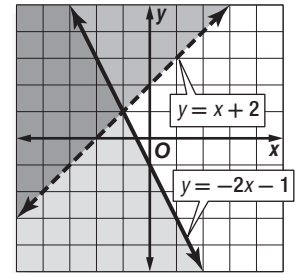
### Example 1 Solve the system of inequalities

by graphing.

$$y > x + 2$$

$$y \leq -2x - 1$$

The solution includes the ordered pairs in the intersection of the graphs. This region is shaded at the right. The graphs of  $y = x + 2$  and  $y = -2x - 1$  are boundaries of this region. The graph of  $y = x + 2$  is dashed and is not included in the graph of  $y > x + 2$ .



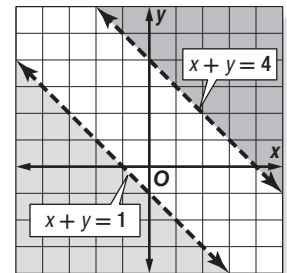
### Example 2 Solve the system of inequalities

by graphing.

$$x + y > 4$$

$$x + y < -1$$

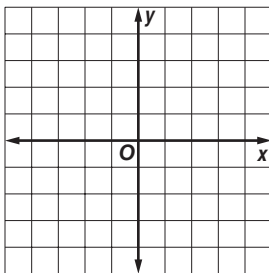
The graphs of  $x + y = 4$  and  $x + y = -1$  are parallel. Because the two regions have no points in common, the system of inequalities has no solution.



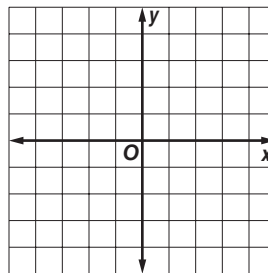
## Exercises

Solve each system of inequalities by graphing.

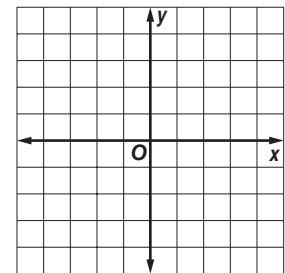
1.  $y > -1$   
 $x < 0$



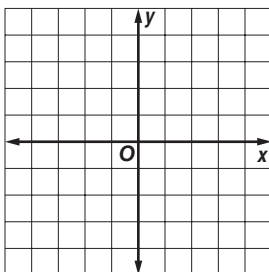
2.  $y > -2x + 2$   
 $y \leq x + 1$



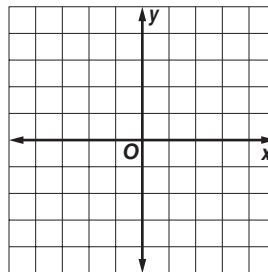
3.  $y < x + 1$   
 $3x + 4y \geq 12$



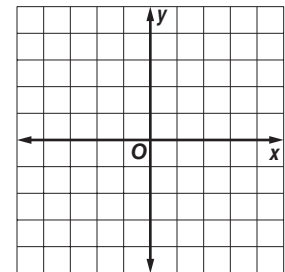
4.  $2x + y \geq 1$   
 $x - y \geq -2$



5.  $y \leq 2x + 3$   
 $y \geq -1 + 2x$



6.  $5x - 2y < 6$   
 $y > -x + 1$

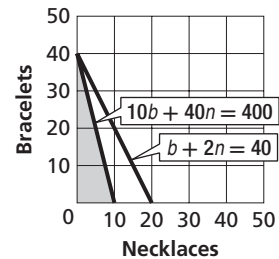


# 6-8 Study Guide and Intervention *(continued)*

## Systems of Inequalities

**Real-World Problems** In real-world problems, sometimes only whole numbers make sense for the solution, and often only positive values of  $x$  and  $y$  make sense.

**Example** **BUSINESS** AAA Gem Company produces necklaces and bracelets. In a 40-hour week, the company has 400 gems to use. A necklace requires 40 gems and a bracelet requires 10 gems. It takes 2 hours to produce a necklace and a bracelet requires one hour. How many of each type can be produced in a week?



Let  $n$  = the number of necklaces that will be produced and  $b$  = the number of bracelets that will be produced. Neither  $n$  or  $b$  can be a negative number, so the following system of inequalities represents the conditions of the problems.

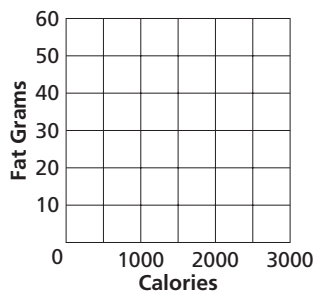
$$\begin{aligned} n &\geq 0 \\ b &\geq 0 \\ b + 2n &\leq 40 \\ 10b + 40n &\leq 400 \end{aligned}$$

The solution is the set ordered pairs in the intersection of the graphs. This region is shaded at the right. Only whole-number solutions, such as (5, 20) make sense in this problem.

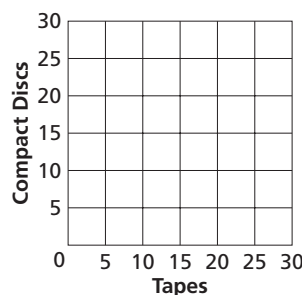
### Exercises

For each exercise, graph the solution set. List three possible solutions to the problem.

- 1. HEALTH** Mr. Flowers is on a restricted diet that allows him to have between 1600 and 2000 Calories per day. His daily fat intake is restricted to between 45 and 55 grams. What daily Calorie and fat intakes are acceptable?



- 2. RECREATION** Maria had \$150 in gift certificates to use at a record store. She bought fewer than 20 recordings. Each tape cost \$5.95 and each CD cost \$8.95. How many of each type of recording might she have bought?





# 7-1 Study Guide and Intervention

## Multiplying Monomials

**Monomials** A **monomial** is a number, a variable, or the product of a number and one or more variables with nonnegative integer exponents. An expression of the form  $x^n$  is called a **power** and represents the product you obtain when  $x$  is used as a factor  $n$  times. To multiply two powers that have the same base, add the exponents.

<b>Product of Powers</b>	For any number $a$ and all integers $m$ and $n$ , $a^m \cdot a^n = a^{m+n}$ .
--------------------------	---

### Example 1 Simplify $(3x^6)(5x^2)$ .

$$\begin{aligned} (3x^6)(5x^2) &= (3)(5)(x^6 \cdot x^2) && \text{Group the coefficients} \\ & && \text{and the variables} \\ &= (3 \cdot 5)(x^{6+2}) && \text{Product of Powers} \\ &= 15x^8 && \text{Simplify.} \end{aligned}$$

The product is  $15x^8$ .

### Example 2 Simplify $(-4a^3b)(3a^2b^5)$ .

$$\begin{aligned} (-4a^3b)(3a^2b^5) &= (-4)(3)(a^3 \cdot a^2)(b \cdot b^5) \\ &= -12(a^{3+2})(b^{1+5}) \\ &= -12a^5b^6 \end{aligned}$$

The product is  $-12a^5b^6$ .

## Exercises

Simplify each expression.

1.  $y(y^5)$

2.  $n^2 \cdot n^7$

3.  $(-7x^2)(x^4)$

4.  $x(x^2)(x^4)$

5.  $m \cdot m^5$

6.  $(-x^3)(-x^4)$

7.  $(2a^2)(8a)$

8.  $(rn)(rn^3)(n^2)$

9.  $(x^2y)(4xy^3)$

10.  $\frac{1}{3}(2a^3b)(6b^3)$

11.  $(-4x^3)(-5x^7)$

12.  $(-3j^2k^4)(2jk^6)$

13.  $(5a^2bc^3)\left(\frac{1}{5}abc^4\right)$

14.  $(-5xy)(4x^2)(y^4)$

15.  $(10x^3yz^2)(-2xy^5z)$

**7-1 Study Guide and Intervention** *(continued)***Multiplying Monomials**

**Simplify Expressions** An expression of the form  $(x^m)^n$  is called a **power of a power** and represents the product you obtain when  $x^m$  is used as a factor  $n$  times. To find the power of a power, multiply exponents.

<b>Power of a Power</b>	For any number $a$ and all integers $m$ and $n$ , $(a^m)^n = a^{mn}$ .
<b>Power of a Product</b>	For any number $a$ and all integers $m$ and $n$ , $(ab)^m = a^m b^m$ .

We can combine and use these properties to simplify expressions involving monomials.

**Example** Simplify  $(-2ab^2)^3(a^2)^4$ .

$$\begin{aligned}
 (-2ab^2)^3(a^2)^4 &= (-2ab^2)^3(a^8) && \text{Power of a Power} \\
 &= (-2)^3(a^3)(b^2)^3(a^8) && \text{Power of a Product} \\
 &= (-2)^3(a^3)(a^8)(b^2)^3 && \text{Group the coefficients and the variables} \\
 &= (-2)^3(a^{11})(b^2)^3 && \text{Product of Powers} \\
 &= -8a^{11}b^6 && \text{Power of a Power}
 \end{aligned}$$

The product is  $-8a^{11}b^6$ .

**Exercises**

Simplify each expression.

1.  $(y^5)^2$

2.  $(n^7)^4$

3.  $(x^2)^5(x^3)$

4.  $-3(ab^4)^3$

5.  $(-3ab^4)^3$

6.  $(4x^2b)^3$

7.  $(4a^2)^2(b^3)$

8.  $(4x)^2(b^3)$

9.  $(x^2y^4)^5$

10.  $(2a^3b^2)(b^3)^2$

11.  $(-4xy)^3(-2x^2)^3$

12.  $(-3j^2k^3)^2(2j^2k)^3$

13.  $(25a^2b)^3\left(\frac{1}{5}abf\right)^2$

14.  $(2xy)^2(-3x^2)(4y^4)$

15.  $(2x^3y^2z^2)^3(x^2z)^4$

16.  $(-2n^6y^5)(-6n^3y^2)(ny)^3$

17.  $(-3a^3n^4)(-3a^3n)^4$

18.  $-3(2x)^4(4x^5y)^2$

## 7-2 Study Guide and Intervention

### Dividing Monomials

**Quotients of Monomials** To divide two powers with the same base, subtract the exponents.

<b>Quotient of Powers</b>	For all integers $m$ and $n$ and any nonzero number $a$ , $\frac{a^m}{a^n} = a^{m-n}$ .
<b>Power of a Quotient</b>	For any integer $m$ and any real numbers $a$ and $b$ , $b \neq 0$ , $\left(\frac{a}{b}\right)^m = \frac{a^m}{b^m}$ .

**Example 1** Simplify  $\frac{a^4b^7}{ab^2}$ . Assume that no denominator equals zero.

$$\begin{aligned}\frac{a^4b^7}{ab^2} &= \left(\frac{a^4}{a}\right)\left(\frac{b^7}{b^2}\right) && \text{Group powers with the same base.} \\ &= (a^{4-1})(b^{7-2}) && \text{Quotient of Powers} \\ &= a^3b^5 && \text{Simplify.}\end{aligned}$$

The quotient is  $a^3b^5$ .

**Example 2** Simplify  $\left(\frac{2a^3b^5}{3b^2}\right)^3$ . Assume that no denominator equals zero.

$$\begin{aligned}\left(\frac{2a^3b^5}{3b^2}\right)^3 &= \frac{(2a^3b^5)^3}{(3b^2)^3} && \text{Power of a Quotient} \\ &= \frac{2^3(a^3)^3(b^5)^3}{(3)^3(b^2)^3} && \text{Power of a Product} \\ &= \frac{8a^9b^{15}}{27b^6} && \text{Power of a Power} \\ &= \frac{8a^9b^9}{27} && \text{Quotient of Powers}\end{aligned}$$

The quotient is  $\frac{8a^9b^9}{27}$ .

### Exercises

Simplify each expression. Assume that no denominator equals zero.

1.  $\frac{5^5}{5^2}$

2.  $\frac{m^6}{m^4}$

3.  $\frac{p^5n^4}{p^2n}$

4.  $\frac{a^2}{a}$

5.  $\frac{x^5y^3}{x^5y^2}$

6.  $\frac{-2y^7}{14y^5}$

7.  $\frac{xy^6}{y^4x}$

8.  $\left(\frac{2a^2b}{a}\right)^3$

9.  $\left(\frac{4p^4r^4}{3p^2r^2}\right)^3$

10.  $\left(\frac{2r^5w^3}{r^4w^3}\right)^4$

11.  $\left(\frac{3r^6n^3}{2r^5n}\right)^4$

12.  $\frac{r^7n^7t^2}{n^3r^3t^2}$

# 7-2 Study Guide and Intervention *(continued)*

## Dividing Monomials

**Negative Exponents** Any nonzero number raised to the zero power is 1; for example,  $(-0.5)^0 = 1$ . Any nonzero number raised to a negative power is equal to the reciprocal of the number raised to the opposite power; for example,  $6^{-3} = \frac{1}{6^3}$ . These definitions can be used to simplify expressions that have negative exponents.

<b>Zero Exponent</b>	For any nonzero number $a$ , $a^0 = 1$ .
<b>Negative Exponent Property</b>	For any nonzero number $a$ and any integer $n$ , $a^{-n} = \frac{1}{a^n}$ and $\frac{1}{a^{-n}} = a^n$ .

The simplified form of an expression containing negative exponents must contain only positive exponents.

### Example

**Simplify  $\frac{4a^{-3}b^6}{16a^2b^6c^{-5}}$ . Assume that no denominator equals zero.**

$$\begin{aligned} \frac{4a^{-3}b^6}{16a^2b^6c^{-5}} &= \left(\frac{4}{16}\right)\left(\frac{a^{-3}}{a^2}\right)\left(\frac{b^6}{b^6}\right)\left(\frac{1}{c^{-5}}\right) && \text{Group powers with the same base.} \\ &= \frac{1}{4}(a^{-3-2})(b^{6-6})(c^5) && \text{Quotient of Powers and Negative Exponent Properties} \\ &= \frac{1}{4}a^{-5}b^0c^5 && \text{Simplify.} \\ &= \frac{1}{4}\left(\frac{1}{a^5}\right)(1)c^5 && \text{Negative Exponent and Zero Exponent Properties} \\ &= \frac{c^5}{4a^5} && \text{Simplify.} \end{aligned}$$

The solution is  $\frac{c^5}{4a^5}$ .

## Exercises

Simplify each expression. Assume that no denominator equals zero.

- |  |   |   |
|--|---|---|
| 1. $\frac{2^2}{2^{-3}}$                  | 2. $\frac{m}{m^{-4}}$                         | 3. $\frac{p^{-8}}{p^3}$                 |
| 4. $\frac{b^{-4}}{b^{-5}}$               | 5. $\frac{(-x^{-1}y)^0}{4w^{-1}y^2}$          | 6. $\frac{(a^2b^3)^2}{(ab)^{-2}}$       |
| 7. $\frac{x^4y^0}{x^{-2}}$               | 8. $\frac{(6a^{-1}b)^2}{(b^2)^4}$             | 9. $\frac{(3rt)^2u^{-4}}{r^{-1}t^2u^7}$ |
| 10. $\frac{m^{-3}t^{-5}}{(m^2t^3)^{-1}}$ | 11. $\left(\frac{4m^2n^2}{8m^{-1}l}\right)^0$ | 12. $\frac{(-2mn^2)^{-3}}{4m^{-6}n^4}$  |

**7-3 Study Guide and Intervention****Scientific Notation**

**Scientific Notation** Very large and very small numbers are often best represented using a method known as **scientific notation**. Numbers written in scientific notation take the form  $a \times 10^n$ , where  $1 \leq a < 10$  and  $n$  is an integer. Any number can be written in scientific notation.

**Example 1** Express 34,020,000,000 in scientific notation.

**Step 1** Move the decimal point until it is to the right of the first nonzero digit. The result is a real number  $a$ . Here,  $a = 3.402$ .

**Step 2** Note the number of places  $n$  and the direction that you moved the decimal point. The decimal point moved 10 places to the left, so  $n = 10$ .

**Step 3** Because the decimal moved to the left, write the number as  $a \times 10^n$ .

$$34,020,000,000 = 3.4020000000 \times 10^{10}$$

**Step 4** Remove the extra zeros.  $3.402 \times 10^{10}$

**Example 2** Express  $4.11 \times 10^{-6}$  in standard notation.

**Step 1** The exponent is  $-6$ , so  $n = -6$ .

**Step 2** Because  $n < 0$ , move the decimal point 6 places to the left.

$$4.11 \times 10^{-6} \Rightarrow .00000411$$

**Step 3**  $4.11 \times 10^{-6} \Rightarrow 0.00000411$

Rewrite; insert a 0 before the decimal point.

**Exercises**

Express each number in scientific notation.

1. 5,100,000

2. 80,300,000,000

3. 14,250,000

4. 68,070,000,000,000

5. 14,000

6. 901,050,000,000

7. 0.0049

8. 0.000301

9. 0.0000000519

10. 0.000000185

11. 0.002002

12. 0.00000771

Express each number in standard form.

13.  $4.91 \times 10^4$

14.  $3.2 \times 10^{-5}$

15.  $6.03 \times 10^8$

16.  $2.001 \times 10^{-6}$

17.  $1.00024 \times 10^{10}$

18.  $5 \times 10^5$

19.  $9.09 \times 10^{-5}$

20.  $3.5 \times 10^{-2}$

21.  $1.7087 \times 10^7$

# 7-3 Study Guide and Intervention *(continued)*

## Scientific Notation

**Products and Quotients in Scientific Notation** You can use scientific notation to simplify multiplying and dividing very large and very small numbers.

**Example 1** Evaluate  $(9.2 \times 10^{-3})(4 \times 10^8)$ . Express the result in both scientific notation and standard form.

$(9.2 \times 10^{-3})(4 \times 10^8)$	Original Expression
$= (9.2 \times 4)(10^{-3} \times 10^8)$	Commutative and Associative Properties
$= 36.8 \times 10^5$	Product of Powers
$= (3.68 \times 10^1) \times 10^5$	$36.8 = 3.68 \times 10$
$= 3.68 \times 10^6$	Product of Powers
$= 3,680,000$	Standard Form

**Example 2** Evaluate  $\frac{(6.9 \times 10^7)}{(3 \times 10^5)}$ . Express the result in both scientific notation and standard form.

$\frac{(2.76 \times 10^7)}{(6.9 \times 10^5)}$	$= \left(\frac{2.76}{6.9}\right)\left(\frac{10^7}{10^5}\right)$	Product rule for fractions
	$= 0.4 \times 10^2$	Quotient of Powers
	$= 4.0 \times 10^{-1} \times 10^2$	$0.4 = 4.0 \times 10^{-1}$
	$= 4.0 \times 10^1$	Product of Powers
	$= 40$	Standard form

### Exercises

**Evaluate each product. Express the results in both scientific notation and standard form.**

- |   |  |
|---|--|
| 1. $(3.4 \times 10^3)(5 \times 10^4)$     | 2. $(2.8 \times 10^{-4})(1.9 \times 10^7)$ |
| 3. $(6.7 \times 10^{-7})(3 \times 10^3)$  | 4. $(8.1 \times 10^5)(2.3 \times 10^{-3})$ |
| 5. $(1.2 \times 10^{-11})(6 \times 10^6)$ | 6. $(5.9 \times 10^4)(7 \times 10^{-8})$   |

**Evaluate each quotient. Express the results in both scientific notation and standard form.**

- |  |  |
|--|--|
| 7. $\frac{(4.9 \times 10^{-3})}{(2.5 \times 10^{-4})}$ | 8. $\frac{5.8 \times 10^4}{5 \times 10^{-2}}$    |
| 9. $\frac{(1.6 \times 10^5)}{(4 \times 10^{-4})}$      | 10. $\frac{8.6 \times 10^6}{1.6 \times 10^{-3}}$ |
| 11. $\frac{(4.2 \times 10^{-2})}{(6 \times 10^{-7})}$  | 12. $\frac{8.1 \times 10^5}{2.7 \times 10^4}$    |

# 7-4 Study Guide and Intervention

## Polynomials

**Degree of a Polynomial** A **polynomial** is a monomial or a sum of monomials. A **binomial** is the sum of two monomials, and a **trinomial** is the sum of three monomials. Polynomials with more than three terms have no special name. The **degree** of a monomial is the sum of the exponents of all its variables. The **degree of the polynomial** is the same as the degree of the monomial term with the highest degree.

### Example

**Determine whether each expression is a polynomial. If so, identify the polynomial as a *monomial*, *binomial*, or *trinomial*. Then find the degree of the polynomial.**

Expression	Polynomial?	Monomial, Binomial, or Trinomial?	Degree of the Polynomial
$3x - 7xyz$	Yes. $3x - 7xyz = 3x + (-7xyz)$ , which is the sum of two monomials	binomial	3
$-25$	Yes. $-25$ is a real number.	monomial	0
$7n^3 + 3n^{-4}$	No. $3n^{-4} = \frac{3}{n^4}$ , which is not a monomial	none of these	—
$9x^3 + 4x + x + 4 + 2x$	Yes. The expression simplifies to $9x^3 + 7x + 4$ , which is the sum of three monomials	trinomial	3

## Exercises

**Determine whether each expression is a polynomial. If so, identify the polynomial as a *monomial*, *binomial*, or *trinomial*.**

1. 36

2.  $\frac{3}{q^2} + 5$

3.  $7x - x + 5$

4.  $8g^2h - 7gh + 2$

5.  $\frac{1}{4y^2} + 5y - 8$

6.  $6x + x^2$

**Find the degree of each polynomial.**

7.  $4x^2y^3z$

8.  $-2abc$

9.  $15m$

10.  $r + 5t$

11. 22

12.  $18x^2 + 4yz - 10y$

13.  $x^4 - 6x^2 - 2x^3 - 10$

14.  $2x^3y^2 - 4xy^3$

15.  $-2r^8x^4 + 7r^2x - 4r^7x^6$

16.  $9x^2 + yz^8$

17.  $8b + bc^5$

18.  $4x^4y - 8zx^2 + 2x^5$

19.  $4x^2 - 1$

20.  $9abc + bc - n^5$

21.  $h^3m + 6h^4m^2 - 7$

**7-4 Study Guide and Intervention** *(continued)***Polynomials**

**Write Polynomials in Standard Form** The terms of a polynomial are usually arranged so that the terms are in order from greatest degree to least degree. This is called the **standard form of a polynomial**.

**Example** Write  $-4x^2 + 9x^4 - 2x$  in standard form. Identify the leading coefficient.

**Step 1:** Find the degree of each term.

$$\text{Polynomial: } -4x^2 + 9x^4 - 2x$$

$$\text{Degree: } \quad \downarrow \quad \downarrow \quad \downarrow$$

$$\quad \quad \quad 2 \quad \quad 4 \quad \quad 1$$

**Step 2:** Write the terms in descending order:  $9x^4 - 4x^2 - 2x$ .

The leading coefficient is 9.

**Exercises**

Write each polynomial in standard form. Identify the leading coefficient.

1.  $5x + x^2 + 6$

2.  $6x + 9 - 4x^2$

3.  $x^4 + x^3 + x^2$

4.  $2x^3 - x + 3x^7$

5.  $2x + x^2 - 5$

6.  $20x - 10x^2 + 5x^3$

7.  $x^3 + x^5 - x^2$

8.  $x^4 + 4x^3 - 7x^5 + 1$

9.  $-3x^6 - x^5 + 2x^8$

10.  $2x^7 - x^8$

11.  $3x + 5x^4 - 2 - x^2$

12.  $-2x^4 + x - 4x^5 + 3$

13.  $2 - x^{12}$

14.  $5x^4 - 12x - 3x^6$

15.  $9x^9 - 9 + 3x^3 - 6x^6$



**7-5 Study Guide and Intervention****Adding and Subtracting Polynomials**

**Add Polynomials** To add polynomials, you can group like terms horizontally or write them in column form, aligning like terms vertically. **Like terms** are monomial terms that are either identical or differ only in their coefficients, such as  $3p$  and  $-5p$  or  $2x^2y$  and  $8x^2y$ .

**Example 1** Find  $(2x^2 + x - 8) + (3x - 4x^2 + 2)$ .

**Horizontal Method**

Group like terms.

$$\begin{aligned} (2x^2 + x - 8) + (3x - 4x^2 + 2) \\ = [(2x^2 + (-4x^2)) + (x + 3x) + [(-8) + 2]] \\ = -2x^2 + 4x - 6. \end{aligned}$$

The sum is  $-2x^2 + 4x - 6$ .

**Example 2** Find  $(3x^2 + 5xy) + (xy + 2x^2)$ .

**Vertical Method**

Align like terms in columns and add.

$$\begin{array}{r} 3x^2 + 5xy \\ (+) 2x^2 + xy \\ \hline 5x^2 + 6xy \end{array} \quad \text{Put the terms in descending order.}$$

The sum is  $5x^2 + 6xy$ .

**Exercises**

Find each sum.

1.  $(4a - 5) + (3a + 6)$

2.  $(6x + 9) + (4x^2 - 7)$

3.  $(6xy + 2y + 6x) + (4xy - x)$

4.  $(x^2 + y^2) + (-x^2 + y^2)$

5.  $(3p^2 - 2p + 3) + (p^2 - 7p + 7)$

6.  $(2x^2 + 5xy + 4y^2) + (-xy - 6x^2 + 2y^2)$

7.  $(5p + 2q) + (2p^2 - 8q + 1)$

8.  $(4x^2 - x + 4) + (5x + 2x^2 + 2)$

9.  $(6x^2 + 3x) + (x^2 - 4x - 3)$

10.  $(x^2 + 2xy + y^2) + (x^2 - xy - 2y^2)$

11.  $(2a - 4b - c) + (-2a - b - 4c)$

12.  $(6xy^2 + 4xy) + (2xy - 10xy^2 + y^2)$

13.  $(2p - 5r) + (3p + 6r) + (p - r)$

14.  $(2x^2 - 6) + (5x^2 + 2) + (-x^2 - 7)$

15.  $(3z^2 + 5z) + (z^2 + 2z) + (z - 4)$

16.  $(8x^2 + 4x + 3y^2 + y) + (6x^2 - x + 4y)$

**7-5 Study Guide and Intervention** *(continued)***Adding and Subtracting Polynomials**

**Subtract Polynomials** You can subtract a polynomial by adding its additive inverse. To find the additive inverse of a polynomial, replace each term with its additive inverse or opposite.

**Example** Find  $(3x^2 + 2x - 6) - (2x + x^2 + 3)$ .

**Horizontal Method**

Use additive inverses to rewrite as addition. Then group like terms.

$$\begin{aligned} (3x^2 + 2x - 6) - (2x + x^2 + 3) \\ &= (3x^2 + 2x - 6) + [(-2x) + (-x^2) + (-3)] \\ &= [3x^2 + (-x^2)] + [2x + (-2x)] + [-6 + (-3)] \\ &= 2x^2 + (-9) \\ &= 2x^2 - 9 \end{aligned}$$

The difference is  $2x^2 - 9$ .

**Vertical Method**

Align like terms in columns and subtract by adding the additive inverse.

$$\begin{array}{r} 3x^2 + 2x - 6 \\ (-) \quad x^2 + 2x + 3 \\ \hline 3x^2 + 2x - 6 \\ (+) -x^2 - 2x - 3 \\ \hline 2x^2 \qquad - 9 \end{array}$$

The difference is  $2x^2 - 9$ .

**Exercises**

Find each difference.

1.  $(3a - 5) - (5a + 1)$

2.  $(9x + 2) - (-3x^2 - 5)$

3.  $(9xy + y - 2x) - (6xy - 2x)$

4.  $(x^2 + y^2) - (-x^2 + y^2)$

5.  $(6p^2 + 4p + 5) - (2p^2 - 5p + 1)$

6.  $(6x^2 + 5xy - 2y^2) - (-xy - 2x^2 - 4y^2)$

7.  $(8p - 5r) - (-6p^2 + 6r - 3)$

8.  $(8x^2 - 4x - 3) - (-2x - x^2 + 5)$

9.  $(3x^2 - 2x) - (3x^2 + 5x - 1)$

10.  $(4x^2 + 6xy + 2y^2) - (-x^2 + 2xy - 5y^2)$

11.  $(2h - 6j - 2k) - (-7h - 5j - 4k)$

12.  $(9xy^2 + 5xy) - (-2xy - 8xy^2)$

13.  $(2a - 8b) - (-3a + 5b)$

14.  $(2x^2 - 8) - (-2x^2 - 6)$

15.  $(6z^2 + 4z + 2) - (4z^2 + z)$

16.  $(6x^2 - 5x + 1) - (-7x^2 - 2x + 4)$

**7-6 Study Guide and Intervention*****Multiplying a Polynomial by a Monomial***

**Polynomial Multiplied by Monomial** The Distributive Property can be used to multiply a polynomial by a monomial. You can multiply horizontally or vertically. Sometimes multiplying results in like terms. The products can be simplified by combining like terms.

**Example 1** Find  $-3x^2(4x^2 + 6x - 8)$ .

**Horizontal Method**

$$\begin{aligned} & -3x^2(4x^2 + 6x - 8) \\ &= -3x^2(4x^2) + (-3x^2)(6x) - (-3x^2)(8) \\ &= -12x^4 + (-18x^3) - (-24x^2) \\ &= -12x^4 - 18x^3 + 24x^2 \end{aligned}$$

**Vertical Method**

$$\begin{array}{r} 4x^2 + 6x - 8 \\ (\times) \quad \quad \quad -3x^2 \\ \hline -12x^4 - 18x^3 + 24x^2 \end{array}$$

The product is  $-12x^4 - 18x^3 + 24x^2$ .

**Example 2** Simplify  $-2(4x^2 + 5x) - x(x^2 + 6x)$ .

$$\begin{aligned} & -2(4x^2 + 5x) - x(x^2 + 6x) \\ &= -2(4x^2) + (-2)(5x) + (-x)(x^2) + (-x)(6x) \\ &= -8x^2 + (-10x) + (-x^3) + (-6x^2) \\ &= (-x^3) + [-8x^2 + (-6x^2)] + (-10x) \\ &= -x^3 - 14x^2 - 10x \end{aligned}$$

**Exercises**

Find each product.

1.  $x(5x + x^2)$

2.  $x(4x^2 + 3x + 2)$

3.  $-2xy(2y + 4x^2)$

4.  $-2g(g^2 - 2g + 2)$

5.  $3x(x^4 + x^3 + x^2)$

6.  $-4x(2x^3 - 2x + 3)$

7.  $-4ax(10 + 3x)$

8.  $3y(-4x - 6x^3 - 2y)$

9.  $2x^2y^2(3xy + 2y + 5x)$

Simplify each expression.

10.  $x(3x - 4) - 5x$

11.  $-x(2x^2 - 4x) - 6x^2$

12.  $6a(2a - b) + 2a(-4a + 5b)$

13.  $4r(2r^2 - 3r + 5) + 6r(4r^2 + 2r + 8)$

14.  $4n(3n^2 + n - 4) - n(3 - n)$

15.  $2b(b^2 + 4b + 8) - 3b(3b^2 + 9b - 18)$

16.  $-2z(4z^2 - 3z + 1) - z(3z^2 + 2z - 1)$

17.  $2(4x^2 - 2x) - 3(-6x^2 + 4) + 2x(x - 1)$

**7-6 Study Guide and Intervention** *(continued)****Multiplying a Polynomial by a Monomial***

**Solve Equations with Polynomial Expressions** Many equations contain polynomials that must be added, subtracted, or multiplied before the equation can be solved.

**Example** Solve  $4(n - 2) + 5n = 6(3 - n) + 19$ .

$4(n - 2) + 5n = 6(3 - n) + 19$	Original equation
$4n - 8 + 5n = 18 - 6n + 19$	Distributive Property
$9n - 8 = 37 - 6n$	Combine like terms.
$15n - 8 = 37$	Add $6n$ to both sides.
$15n = 45$	Add 8 to both sides.
$n = 3$	Divide each side by 15.

The solution is 3.

**Exercises**

Solve each equation.

1.  $2(a - 3) = 3(-2a + 6)$

2.  $3(x + 5) - 6 = 18$

3.  $3x(x - 5) - 3x^2 = -30$

4.  $6(x^2 + 2x) = 2(3x^2 + 12)$

5.  $4(2p + 1) - 12p = 2(8p + 12)$

6.  $2(6x + 4) + 2 = 4(x - 4)$

7.  $-2(4y - 3) - 8y + 6 = 4(y - 2)$

8.  $x(x + 2) - x(x - 6) = 10x - 12$

9.  $3(x^2 - 2x) = 3x^2 + 5x - 11$

10.  $2(4x + 3) + 2 = -4(x + 1)$

11.  $3(2h - 6) - (2h + 1) = 9$

12.  $3(y + 5) - (4y - 8) = -2y + 10$

13.  $3(2a - 6) - (-3a - 1) = 4a - 2$

14.  $5(2x^2 - 1) - (10x^2 - 6) = -(x + 2)$

15.  $3(x + 2) + 2(x + 1) = -5(x - 3)$

16.  $4(3p^2 + 2p) - 12p^2 = 2(8p + 6)$

**7-7 Study Guide and Intervention****Multiplying Polynomials**

**Multiply Binomials** To multiply two binomials, you can apply the Distributive Property twice. A useful way to keep track of terms in the product is to use the FOIL method as illustrated in Example 2.

**Example 1** Find  $(x + 3)(x - 4)$ .

**Horizontal Method**

$$\begin{aligned}(x + 3)(x - 4) &= x(x - 4) + 3(x - 4) \\ &= (x)(x) + x(-4) + 3(x) + 3(-4) \\ &= x^2 - 4x + 3x - 12 \\ &= x^2 - x - 12\end{aligned}$$

**Vertical Method**

$$\begin{array}{r} x + 3 \\ (\times) \quad x - 4 \\ \hline -4x - 12 \\ x^2 + 3x \\ \hline x^2 - x - 12\end{array}$$

The product is  $x^2 - x - 12$ .

**Example 2** Find  $(x - 2)(x + 5)$  using the FOIL method.

$$\begin{array}{cccc} & \text{First} & \text{Outer} & \text{Inner} & \text{Last} \\ (x - 2)(x + 5) & & & & \\ = & (x)(x) & + & (x)(5) & + & (-2)(x) & + & (-2)(5) \\ = & x^2 & + & 5x & + & (-2x) & - & 10 \\ = & x^2 & + & 3x & - & 10\end{array}$$

The product is  $x^2 + 3x - 10$ .

**Exercises**

Find each product.

1.  $(x + 2)(x + 3)$

2.  $(x - 4)(x + 1)$

3.  $(x - 6)(x - 2)$

4.  $(p - 4)(p + 2)$

5.  $(y + 5)(y + 2)$

6.  $(2x - 1)(x + 5)$

7.  $(3n - 4)(3n - 4)$

8.  $(8m - 2)(8m + 2)$

9.  $(k + 4)(5k - 1)$

10.  $(3x + 1)(4x + 3)$

11.  $(x - 8)(-3x + 1)$

12.  $(5t + 4)(2t - 6)$

13.  $(5m - 3n)(4m - 2n)$

14.  $(a - 3b)(2a - 5b)$

15.  $(8x - 5)(8x + 5)$

16.  $(2n - 4)(2n + 5)$

17.  $(4m - 3)(5m - 5)$

18.  $(7g - 4)(7g + 4)$

**7-7 Study Guide and Intervention** *(continued)***Multiplying Polynomials**

**Multiply Polynomials** The Distributive Property can be used to multiply any two polynomials.

**Example** Find  $(3x + 2)(2x^2 - 4x + 5)$ .

$$\begin{aligned} (3x + 2)(2x^2 - 4x + 5) &= 3x(2x^2 - 4x + 5) + 2(2x^2 - 4x + 5) && \text{Distributive Property} \\ &= 6x^3 - 12x^2 + 15x + 4x^2 - 8x + 10 && \text{Distributive Property} \\ &= 6x^3 - 8x^2 + 7x + 10 && \text{Combine like terms.} \end{aligned}$$

The product is  $6x^3 - 8x^2 + 7x + 10$ .

**Exercises**

Find each product.

1.  $(x + 2)(x^2 - 2x + 1)$

2.  $(x + 3)(2x^2 + x - 3)$

3.  $(2x - 1)(x^2 - x + 2)$

4.  $(p - 3)(p^2 - 4p + 2)$

5.  $(3k + 2)(k^2 + k - 4)$

6.  $(2t + 1)(10t^2 - 2t - 4)$

7.  $(3n - 4)(n^2 + 5n - 4)$

8.  $(8x - 2)(3x^2 + 2x - 1)$

9.  $(2a + 4)(2a^2 - 8a + 3)$

10.  $(3x - 4)(2x^2 + 3x + 3)$

11.  $(n^2 + 2n - 1)(n^2 + n + 2)$

12.  $(t^2 + 4t - 1)(2t^2 - t - 3)$

13.  $(y^2 - 5y + 3)(2y^2 + 7y - 4)$

14.  $(3b^2 - 2b + 1)(2b^2 - 3b - 4)$

**7-8 Study Guide and Intervention****Special Products**

**Squares of Sums and Differences** Some pairs of binomials have products that follow specific patterns. One such pattern is called the *square of a sum*. Another is called the *square of a difference*.

<b>Square of a sum</b>	$(a + b)^2 = (a + b)(a + b) = a^2 + 2ab + b^2$
<b>Square of a difference</b>	$(a - b)^2 = (a - b)(a - b) = a^2 - 2ab + b^2$

**Example 1 Find  $(3a + 4)(3a + 4)$ .**

Use the square of a sum pattern, with  $a = 3a$  and  $b = 4$ .

$$\begin{aligned}(3a + 4)(3a + 4) &= (3a)^2 + 2(3a)(4) + (4)^2 \\ &= 9a^2 + 24a + 16\end{aligned}$$

The product is  $9a^2 + 24a + 16$ .

**Example 2 Find  $(2z - 9)(2z - 9)$ .**

Use the square of a difference pattern with  $a = 2z$  and  $b = 9$ .

$$\begin{aligned}(2z - 9)(2z - 9) &= (2z)^2 - 2(2z)(9) + (9)(9) \\ &= 4z^2 - 36z + 81\end{aligned}$$

The product is  $4z^2 - 36z + 81$ .

**Exercises**

**Find each product.**

1.  $(x - 6)^2$

2.  $(3p + 4)^2$

3.  $(4x - 5)^2$

4.  $(2x - 1)^2$

5.  $(2h + 3)^2$

6.  $(m + 5)^2$

7.  $(a + 3)^2$

8.  $(3 - p)^2$

9.  $(x - 5y)^2$

10.  $(8y + 4)^2$

11.  $(8 + x)^2$

12.  $(3a - 2b)^2$

13.  $(2x - 8)^2$

14.  $(x^2 + 1)^2$

15.  $(m^2 - 2)^2$

16.  $(x^3 - 1)^2$

17.  $(2h^2 - k^2)^2$

18.  $\left(\frac{1}{4}x + 3\right)^2$

19.  $(x - 4y^2)^2$

20.  $(2p + 4r)^2$

21.  $\left(\frac{2}{3}x - 2\right)^2$

**7-8 Study Guide and Intervention** *(continued)***Special Products**

**Product of a Sum and a Difference** There is also a pattern for the product of a sum and a difference of the same two terms,  $(a + b)(a - b)$ . The product is called the **difference of squares**.

<b>Product of a Sum and a Difference</b>	$(a + b)(a - b) = a^2 - b^2$
--	------------------------------

**Example** Find  $(5x + 3y)(5x - 3y)$ .

$$(a + b)(a - b) = a^2 - b^2$$

Product of a Sum and a Difference

$$(5x + 3y)(5x - 3y) = (5x)^2 - (3y)^2$$

 $a = 5x$  and  $b = 3y$ 

$$= 25x^2 - 9y^2$$

Simplify.

The product is  $25x^2 - 9y^2$ .**Exercises**

Find each product.

1.  $(x - 4)(x + 4)$

2.  $(p + 2)(p - 2)$

3.  $(4x - 5)(4x + 5)$

4.  $(2x - 1)(2x + 1)$

5.  $(h + 7)(h - 7)$

6.  $(m - 5)(m + 5)$

7.  $(2d - 3)(2d + 3)$

8.  $(3 - 5q)(3 + 5q)$

9.  $(x - y)(x + y)$

10.  $(y - 4x)(y + 4x)$

11.  $(8 + 4x)(8 - 4x)$

12.  $(3a - 2b)(3a + 2b)$

13.  $(3y - 8)(3y + 8)$

14.  $(x^2 - 1)(x^2 + 1)$

15.  $(m^2 - 5)(m^2 + 5)$

16.  $(x^3 - 2)(x^3 + 2)$

17.  $(h^2 - k^2)(h^2 + k^2)$

18.  $\left(\frac{1}{4}x + 2\right)\left(\frac{1}{4}x - 2\right)$

19.  $(3x - 2y^2)(3x + 2y^2)$

20.  $(2p - 5r)(2p + 5r)$

21.  $\left(\frac{4}{3}x - 2y\right)\left(\frac{4}{3}x + 2y\right)$



**8-1 Study Guide and Intervention****Monomials and Factoring**

**Factor Monomials** A monomial is in factored form when it is expressed as the product of prime numbers and variables, and no variable has an exponent greater than 1.

**Example** Factor each monomial completely.

a.  $42a^3$

$$\begin{aligned} 42a^3 &= 2 \cdot 21 \cdot a \cdot a \cdot a \\ &= 2 \cdot 3 \cdot 7 \cdot a \cdot a \cdot a \end{aligned}$$

$$\begin{aligned} 42 &= 21 \cdot 2, \text{ and } a^3 = a \cdot a \cdot a \\ 21 &= 3 \cdot 7 \end{aligned}$$

Thus,  $42a^3$  in factored form is  $2 \cdot 3 \cdot 7 \cdot a \cdot a \cdot a$ .

b.  $-40x^2y^3$

$$\begin{aligned} -40x^2y^3 &= -1 \cdot 40x^2y^3 \\ &= -1 \cdot 2 \cdot 20 \cdot x \cdot x \cdot y \cdot y \cdot y \\ &= -1 \cdot 2 \cdot 2 \cdot 10 \cdot x \cdot x \cdot y \cdot y \cdot y \\ &= -1 \cdot 2 \cdot 2 \cdot 2 \cdot 5 \cdot x \cdot x \cdot y \cdot y \cdot y \end{aligned}$$

$$\begin{aligned} \text{Express } -40 \text{ as } -1 \cdot 40. \\ 40 &= 20 \cdot 2, x^2 = x \cdot x, \text{ and } y^3 = y \cdot y \cdot y \\ 20 &= 10 \cdot 2 \\ 10 &= 5 \cdot 2 \end{aligned}$$

Thus,  $-40x^2y^3$  in factored form is  $-1 \cdot 2 \cdot 2 \cdot 2 \cdot 5 \cdot x \cdot x \cdot y \cdot y \cdot y$ .

**Exercises**

Factor each monomial completely.

1.  $32x^2$

2.  $18m^2n$

3.  $49a^3b^2$

4.  $18y^3$

5.  $-9h^3jk^2$

6.  $-8d^2$

7.  $66q^3r^3$

8.  $140x^2y^4z$

9.  $-ab^2f^2$

10.  $-17t$

11.  $625jk^2$

12.  $47wx^3yz^2$

13.  $12r^4$

14.  $-38a^2b$

15.  $4mp$

**8-1 Study Guide and Intervention** *(continued)***Monomials and Factoring**

**Greatest Common Factor** The product of the common prime factors is called the greatest common factor (GCF) of the numbers. The greatest common factor is the greatest number that is a factor of both original numbers.

If two or more integers or monomials have no common prime factors, their GCF is 1 and the integers or monomials are said to be **relatively prime**.

**Example** Find the GCF of  $16xy^2z^2$  and  $72xyz^3$ .

$$16xy^2z^2 = \textcircled{2} \cdot \textcircled{2} \cdot \textcircled{2} \cdot 2 \cdot \textcircled{x} \cdot \textcircled{y} \cdot y \cdot \textcircled{z} \cdot \textcircled{z}$$

$$72xyz^3 = \textcircled{2} \cdot \textcircled{2} \cdot \textcircled{2} \cdot 3 \cdot 3 \cdot \textcircled{x} \cdot \textcircled{y} \cdot \textcircled{z} \cdot \textcircled{z} \cdot z$$

The GCF of  $16xy^2z^2$  and  $72xyz^3$  is  $2 \cdot 2 \cdot 2 \cdot x \cdot y \cdot z \cdot z$  or  $8xyz^2$ .

**Exercises**

Find the GCF of each set of monomials.

- |  |                              |
|--|------------------------------|
| 1. $49x, 343x^2$                         | 2. $4a^7b, 28ab$             |
| 3. $96y, 12x, 8y$                        | 4. $12a, 18abc$              |
| 5. $28y^2, 35xy, 49x^2yz$                | 6. $2m^2p, 12mp^2, 18mp$     |
| 7. $12x^2, 32x^2yz, 60xy^2$              | 8. $18a^3b^2, 36a^3b^2$      |
| 9. $15mn^2, 30m^3n^2, 90m^3$             | 10. $2x^2y, 9x^2y^3, 18xy^2$ |
| 11. $a^4b, 8a^3b^2$                      | 12. $ab^2, 5a^4b^2, 10b^3$   |
| 13. $2x^2y^2, 8xy^4, 12x^2y$             | 14. $6a^2b^5, 15a^3b^4$      |
| 15. $21a^4b^7f^2, 84a^3b^4, 28a^5b^2f^3$ | 16. $13x^2y^5, 5xy^3, x^4y$  |

**8-2 Study Guide and Intervention****Using the Distributive Property**

**Use the Distributive Property to Factor** The Distributive Property has been used to multiply a polynomial by a monomial. It can also be used to express a polynomial in factored form. Compare the two columns in the table below.

Multiplying	Factoring
$3(a + b) = 3a + 3b$	$3a + 3b = 3(a + b)$
$x(y - z) = xy - xz$	$xy - xz = x(y - z)$
$6y(2x + 1) = 6y(2x) + 6y(1)$ $= 12xy + 6y$	$12xy + 6y = 6y(2x) + 6y(1)$ $= 6y(2x + 1)$

**Example 1 Use the Distributive Property to factor  $12mp + 80m^2$ .**

Find the GCF of  $12mp$  and  $80m^2$ .

$$12mp = 2 \cdot 2 \cdot 3 \cdot m \cdot p$$

$$80m^2 = 2 \cdot 2 \cdot 2 \cdot 2 \cdot 5 \cdot m \cdot m$$

$$\text{GCF} = 2 \cdot 2 \cdot m \text{ or } 4m$$

Write each term as the product of the GCF and its remaining factors.

$$\begin{aligned} 12mp + 80m^2 &= 4m(3 \cdot p) + 4m(2 \cdot 2 \cdot 5 \cdot m) \\ &= 4m(3p) + 4m(20m) \\ &= 4m(3p + 20m) \end{aligned}$$

$$\text{Thus } 12mp + 80m^2 = 4m(3p + 20m).$$

**Example 2 Factor**

**$6ax + 3ay + 2bx + by$  by grouping.**

$$\begin{aligned} 6ax + 3ay + 2bx + by & \\ &= (6ax + 3ay) + (2bx + by) \\ &= 3a(2x + y) + b(2x + y) \\ &= (3a + b)(2x + y) \end{aligned}$$

Check using the FOIL method.

$$\begin{aligned} (3a + b)(2x + y) & \\ &= 3a(2x) + (3a)(y) + (b)(2x) + (b)(y) \\ &= 6ax + 3ay + 2bx + by \checkmark \end{aligned}$$

**Exercises**

**Factor each polynomial.**

1.  $24x + 48y$

2.  $30mp^2 + m^2p - 6p$

3.  $q^4 - 18q^3 + 22q$

4.  $9x^2 - 3x$

5.  $4m + 6p - 8mp$

6.  $45r^3 - 15r^2$

7.  $14t^3 - 42t^5 - 49t^4$

8.  $55p^2 - 11p^4 + 44p^5$

9.  $14y^3 - 28y^2 + y$

10.  $4x + 12x^2 + 16x^3$

11.  $4a^2b + 28ab^2 + 7ab$

12.  $6y + 12x - 8z$

13.  $x^2 + 2x + x + 2$

14.  $6y^2 - 4y + 3y - 2$

15.  $4m^2 + 4mp + 3mp + 3p^2$

16.  $12ax + 3xz + 4ay + yz$

17.  $12a^2 + 3a - 8a - 2$

18.  $xa + ya + x + y$

**8-2 Study Guide and Intervention** *(continued)***Using the Distributive Property**

**Solve Equations by Factoring** The following property, along with factoring, can be used to solve certain equations.

**Zero Product Property**

For any real numbers  $a$  and  $b$ , if  $ab = 0$ , then either  $a = 0$ ,  $b = 0$ , or both  $a$  and  $b$  equal 0.

**Example**

**Solve  $9x^2 + x = 0$ . Then check the solutions.**

Write the equation so that it is of the form  $ab = 0$ .

$$9x^2 + x = 0$$

Original equation

$$x(9x + 1) = 0$$

Factor the GCF of  $9x^2 + x$ , which is  $x$ .

$$x = 0 \text{ or } 9x + 1 = 0$$

Zero Product Property

$$x = 0 \quad x = -\frac{1}{9}$$

Solve each equation.

The solution set is  $\left\{0, -\frac{1}{9}\right\}$ .

**Check** Substitute 0 and  $-\frac{1}{9}$  for  $x$  in the original equation.

$$9x^2 + x = 0$$

$$9x^2 + x = 0$$

$$9(0)^2 + 0 \stackrel{?}{=} 0$$

$$9\left(-\frac{1}{9}\right)^2 + \left(-\frac{1}{9}\right) \stackrel{?}{=} 0$$

$$0 = 0 \checkmark$$

$$\frac{1}{9} + \left(-\frac{1}{9}\right) \stackrel{?}{=} 0$$

$$0 = 0 \checkmark$$

**Exercises**

**Solve each equation. Check your solutions.**

1.  $x(x + 3) = 0$

2.  $3m(m - 4) = 0$

3.  $(r - 3)(r + 2) = 0$

4.  $3x(2x - 1) = 0$

5.  $(4m + 8)(m - 3) = 0$

6.  $5t^2 = 25t$

7.  $(4c + 2)(2c - 7) = 0$

8.  $5p - 15p^2 = 0$

9.  $4y^2 = 28y$

10.  $12x^2 = -6x$

11.  $(4a + 3)(8a + 7) = 0$

12.  $8y = 12y^2$

13.  $x^2 = -2x$

14.  $(6y - 4)(y + 3) = 0$

15.  $4m^2 = 4m$

16.  $12x = 3x^2$

17.  $12a^2 = -3a$

18.  $(12a + 4)(3a - 1) = 0$

**8-3 Study Guide and Intervention****Quadratic Equations:  $x^2 + bx + c = 0$** 

**Factor  $x^2 + bx + c$**  To factor a trinomial of the form  $x^2 + bx + c$ , find two integers,  $m$  and  $p$ , whose sum is equal to  $b$  and whose product is equal to  $c$ .

<b>Factoring <math>x^2 + bx + c</math></b>	$x^2 + bx + c = (x + m)(x + p)$ , where $m + p = b$ and $mp = c$ .
--	--

**Example 1 Factor each polynomial.****a.  $x^2 + 7x + 10$** 

In this trinomial,  $b = 7$  and  $c = 10$ .

Factors of 10	Sum of Factors
1, 10	11
2, 5	7

Since  $2 + 5 = 7$  and  $2 \cdot 5 = 10$ , let  $m = 2$  and  $p = 5$ .

$$x^2 + 7x + 10 = (x + 5)(x + 2)$$

**b.  $x^2 - 8x + 7$** 

In this trinomial,  $b = -8$  and  $c = 7$ .

Notice that  $m + p$  is negative and  $mp$  is positive, so  $m$  and  $p$  are both negative. Since  $-7 + (-1) = -8$  and  $(-7)(-1) = 7$ ,  $m = -7$  and  $p = -1$ .

$$x^2 - 8x + 7 = (x - 7)(x - 1)$$

**Example 2 Factor  $x^2 + 6x - 16$ .**

In this trinomial,  $b = 6$  and  $c = -16$ . This means  $m + p$  is positive and  $mp$  is negative. Make a list of the factors of  $-16$ , where one factor of each pair is positive.

Factors of $-16$	Sum of Factors
1, $-16$	$-15$
$-1$ , 16	15
2, $-8$	$-6$
$-2$ , 8	6

Therefore,  $m = -2$  and  $p = 8$ .

$$x^2 + 6x - 16 = (x - 2)(x + 8)$$

**Exercises**

**Factor each polynomial.**

1.  $x^2 + 4x + 3$

2.  $m^2 + 12m + 32$

3.  $r^2 - 3r + 2$

4.  $x^2 - x - 6$

5.  $x^2 - 4x - 21$

6.  $x^2 - 22x + 121$

7.  $t^2 - 4t - 12$

8.  $p^2 - 16p + 64$

9.  $9 - 10x + x^2$

10.  $x^2 + 6x + 5$

11.  $a^2 + 8a - 9$

12.  $y^2 - 7y - 8$

13.  $x^2 - 2x - 3$

14.  $y^2 + 14y + 13$

15.  $m^2 + 9m + 20$

16.  $x^2 + 12x + 20$

17.  $a^2 - 14a + 24$

18.  $18 + 11y + y^2$

19.  $x^2 + 2xy + y^2$

20.  $a^2 - 4ab + 4b^2$

21.  $x^2 + 6xy - 7y^2$

**8-3 Study Guide and Intervention** *(continued)***Quadratic Equations:  $x^2 + bx + c = 0$** 

**Solve Equations by Factoring** Factoring and the Zero Product Property can be used to solve many equations of the form  $x^2 + bx + c = 0$ .

**Example 1** Solve  $x^2 + 6x = 7$ . Check your solutions.

$x^2 + 6x = 7$	Original equation
$x^2 + 6x - 7 = 0$	Rewrite equation so that one side equals 0.
$(x - 1)(x + 7) = 0$	Factor.
$x - 1 = 0$ or $x + 7 = 0$	Zero Product Property
$x = 1$ $x = -7$	Solve each equation.

The solution set is  $\{1, -7\}$ . Since  $1^2 + 6 = 7$  and  $(-7)^2 + 6(-7) = 7$ , the solutions check.

**Example 2** **ROCKET LAUNCH** A rocket is fired with an initial velocity of 2288 feet per second. How many seconds will it take for the rocket to hit the ground?

The formula  $h = vt - 16t^2$  gives the height  $h$  of the rocket after  $t$  seconds when the initial velocity  $v$  is given in feet per second.

$h = vt - 16t^2$	Formula
$0 = 2288t - 16t^2$	Substitute.
$0 = 16t(143 - t)$	Factor.
$16t = 0$ or $143 - t = 0$	Zero Product Property
$t = 0$ $t = 143$	Solve each equation.

The value  $t = 0$  represents the time at launch. The rocket returns to the ground in 143 seconds, or a little less than 2.5 minutes after launch.

**Exercises**

Solve each equation. Check the solutions.

- |                       |                       |                         |
|-----------------------|-----------------------|-------------------------|
| 1. $x^2 - 4x + 3 = 0$ | 2. $y^2 - 5y + 4 = 0$ | 3. $m^2 + 10m + 9 = 0$  |
| 4. $x^2 = x + 2$      | 5. $x^2 - 4x = 5$     | 6. $x^2 - 12x + 36 = 0$ |
| 7. $t^2 - 8 = -7t$    | 8. $p^2 = 9p - 14$    | 9. $-9 - 8x + x^2 = 0$  |
| 10. $x^2 + 6 = 5x$    | 11. $a^2 = 11a - 18$  | 12. $y^2 - 8y + 15 = 0$ |
| 13. $x^2 = 24 - 10x$  | 14. $a^2 - 18a = -72$ | 15. $b^2 = 10b - 16$    |

Use the formula  $h = vt - 16t^2$  to solve each problem.

- 16. FOOTBALL** A punter can kick a football with an initial velocity of 48 feet per second. How many seconds will it take for the ball to return to the ground?
- 17. BASEBALL** A ball is thrown up with an initial velocity of 32 feet per second. How many seconds will it take for the ball to return to the ground?
- 18. ROCKET LAUNCH** If a rocket is launched with an initial velocity of 1600 feet per second, when will the rocket be 14,400 feet high?

## 8-4 Study Guide and Intervention

### Quadratic Equations: $ax^2 + bx + c = 0$

**Factor  $ax^2 + bx + c$**  To factor a trinomial of the form  $ax^2 + bx + c$ , find two integers,  $m$  and  $p$  whose product is equal to  $ac$  and whose sum is equal to  $b$ . If there are no integers that satisfy these requirements, the polynomial is called a **prime polynomial**.

#### Example 1 Factor $2x^2 + 15x + 18$ .

In this example,  $a = 2$ ,  $b = 15$ , and  $c = 18$ . You need to find two numbers that have a sum of 15 and a product of  $2 \cdot 18$  or 36. Make a list of the factors of 36 and look for the pair of factors with a sum of 15.

Factors of 36	Sum of Factors
1, 36	37
2, 18	20
3, 12	15

Use the pattern  $ax^2 + mx + px + c$ , with  $a = 2$ ,  $m = 3$ ,  $p = 12$ , and  $c = 18$ .

$$\begin{aligned} 2x^2 + 15x + 18 &= 2x^2 + 3x + 12x + 18 \\ &= (2x^2 + 3x) + (12x + 18) \\ &= x(2x + 3) + 6(2x + 3) \\ &= (x + 6)(2x + 3) \end{aligned}$$

Therefore,  $2x^2 + 15x + 18 = (x + 6)(2x + 3)$ .

#### Example 2 Factor $3x^2 - 3x - 18$ .

Note that the GCF of the terms  $3x^2$ ,  $3x$ , and 18 is 3. First factor out this GCF.

$$3x^2 - 3x - 18 = 3(x^2 - x - 6).$$

Now factor  $x^2 - x - 6$ . Since  $a = 1$ , find the two factors of  $-6$  with a sum of  $-1$ .

Factors of $-6$	Sum of Factors
1, $-6$	$-5$
$-1$ , 6	5
$-2$ , 3	1
2, $-3$	$-1$

Now use the pattern  $(x + m)(x + p)$  with  $m = 2$  and  $p = -3$ .

$$x^2 - x - 6 = (x + 2)(x - 3)$$

The complete factorization is  $3x^2 - 3x - 18 = 3(x + 2)(x - 3)$ .

### Exercises

Factor each polynomial, if possible. If the polynomial cannot be factored using integers, write *prime*.

1.  $2x^2 - 3x - 2$

2.  $3m^2 - 8m - 3$

3.  $16r^2 - 8r + 1$

4.  $6x^2 + 5x - 6$

5.  $3x^2 + 2x - 8$

6.  $18x^2 - 27x - 5$

7.  $2a^2 + 5a + 3$

8.  $18y^2 + 9y - 5$

9.  $-4t^2 + 19t - 21$

10.  $8x^2 - 4x - 24$

11.  $28p^2 + 60p - 25$

12.  $48x^2 + 22x - 15$

13.  $3y^2 - 6y - 24$

14.  $4x^2 + 26x - 48$

15.  $8m^2 - 44m + 48$

16.  $6x^2 - 7x + 18$

17.  $2a^2 - 14a + 18$

18.  $18 + 11y + 2y^2$

# 8-4 Study Guide and Intervention *(continued)*

## Quadratic Equations: $ax^2 + bx + c = 0$

**Solve Equations by Factoring** Factoring and the Zero Product Property can be used to solve some equations of the form  $ax^2 + bx + c = 0$ .

**Example** Solve  $12x^2 + 3x = 2 - 2x$ . Check your solutions.

$12x^2 + 3x = 2 - 2x$  Original equation

$12x^2 + 5x - 2 = 0$  Rewrite equation so that one side equals 0.

$(3x + 2)(4x - 1) = 0$  Factor the left side.

$3x + 2 = 0$  or  $4x - 1 = 0$  Zero Product Property

$x = -\frac{2}{3}$                        $x = \frac{1}{4}$  Solve each equation.

The solution set is  $\left\{-\frac{2}{3}, \frac{1}{4}\right\}$ .

Since  $12\left(-\frac{2}{3}\right)^2 + 3\left(-\frac{2}{3}\right) = 2 - 2\left(-\frac{2}{3}\right)$  and  $12\left(\frac{1}{4}\right)^2 + 3\left(\frac{1}{4}\right) = 2 - 2\left(\frac{1}{4}\right)$ , the solutions check.

### Exercises

Solve each equation. Check the solutions.

1.  $8x^2 + 2x - 3 = 0$

2.  $3n^2 - 2n - 5 = 0$

3.  $2d^2 - 13d - 7 = 0$

4.  $4x^2 = x + 3$

5.  $3x^2 - 13x = 10$

6.  $6x^2 - 11x - 10 = 0$

7.  $2k^2 - 40 = -11k$

8.  $2p^2 = -21p - 40$

9.  $-7 - 18x + 9x^2 = 0$

10.  $12x^2 - 15 = -8x$

11.  $7a^2 = -65a - 18$

12.  $16y^2 - 2y - 3 = 0$

13.  $8x^2 + 5x = 3 + 7x$

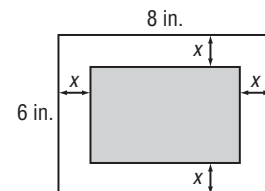
14.  $4a^2 - 18a + 5 = 15$

15.  $3b^2 - 18b = 10b - 49$

16. The difference of the squares of two consecutive odd integers is 24. Find the integers.

17. **GEOMETRY** The length of a Charlotte, North Carolina, conservatory garden is 20 yards greater than its width. The area is 300 square yards. What are the dimensions?

18. **GEOMETRY** A rectangle with an area of 24 square inches is formed by cutting strips of equal width from a rectangular piece of paper. Find the dimensions of the new rectangle if the original rectangle measures 8 inches by 6 inches.





**8-5 Study Guide and Intervention****Quadratic Equations: Differences of Squares**

**Factor Differences of Squares** The binomial expression  $a^2 - b^2$  is called the **difference of two squares**. The following pattern shows how to factor the difference of squares.

Difference of Squares	$a^2 - b^2 = (a - b)(a + b) = (a + b)(a - b)$ .
-----------------------	---

**Example 1** Factor each polynomial.

a.  $n^2 - 64$

$$\begin{aligned} n^2 - 64 &= n^2 - 8^2 && \text{Write in the form } a^2 - b^2. \\ &= (n + 8)(n - 8) && \text{Factor.} \end{aligned}$$

b.  $4m^2 - 81n^2$

$$\begin{aligned} 4m^2 - 81n^2 &= (2m)^2 - (9n)^2 && \text{Write in the form } a^2 - b^2. \\ &= (2m - 9n)(2m + 9n) && \text{Factor.} \end{aligned}$$

**Example 2** Factor each polynomial.

a.  $50a^2 - 72$

$$\begin{aligned} 50a^2 - 72 &= 2(25a^2 - 36) && \text{Find the GCF.} \\ &= 2[(5a)^2 - 6^2] && 25a^2 = 5a \cdot 5a \text{ and } 36 = 6 \cdot 6 \\ &= 2(5a + 6)(5a - 6) && \text{Factor the difference of squares.} \end{aligned}$$

b.  $4x^4 + 8x^3 - 4x^2 - 8x$

$$\begin{aligned} 4x^4 + 8x^3 - 4x^2 - 8x &&& \text{Original polynomial} \\ &= 4x(x^3 + 2x^2 - x - 2) && \text{Find the GCF.} \\ &= 4x[(x^3 + 2x^2) - (x + 2)] && \text{Group terms.} \\ &= 4x[x^2(x + 2) - 1(x + 2)] && \text{Find the GCF.} \\ &= 4x[(x^2 - 1)(x + 2)] && \text{Factor by grouping.} \\ &= 4x[(x - 1)(x + 1)(x + 2)] && \text{Factor the difference of squares.} \end{aligned}$$

**Exercises**

Factor each polynomial.

1.  $x^2 - 81$

2.  $m^2 - 100$

3.  $16n^2 - 25$

4.  $36x^2 - 100y^2$

5.  $49x^2 - 36$

6.  $16a^2 - 9b^2$

7.  $225b^2 - a^2$

8.  $72p^2 - 50$

9.  $-2 + 2x^2$

10.  $-81 + a^4$

11.  $6 - 54a^2$

12.  $8y^2 - 200$

13.  $4x^3 - 100x$

14.  $2y^4 - 32y^2$

15.  $8m^3 - 128m$

16.  $4x^2 - 25$

17.  $2a^3 - 98ab^2$

18.  $18y^2 - 72y^4$

19.  $169x^3 - x$

20.  $3a^4 - 3a^2$

21.  $3x^4 + 6x^3 - 3x^2 - 6x$

**8-5 Study Guide and Intervention** *(continued)***Quadratic Equations: Differences of Squares**

**Solve Equations by Factoring** Factoring and the Zero Product Property can be used to solve equations that can be written as the product of any number of factors set equal to 0.

**Example** Solve each equation. Check your solutions.

a.  $x^2 - \frac{1}{25} = 0$

$$x^2 - \frac{1}{25} = 0 \quad \text{Original equation}$$

$$x^2 - \left(\frac{1}{5}\right)^2 = 0 \quad x^2 = x \cdot x \text{ and } \frac{1}{25} = \left(\frac{1}{5}\right)\left(\frac{1}{5}\right)$$

$$\left(x + \frac{1}{5}\right)\left(x - \frac{1}{5}\right) = 0 \quad \text{Factor the difference of squares.}$$

$$x + \frac{1}{5} = 0 \quad \text{or} \quad x - \frac{1}{5} = 0 \quad \text{Zero Product Property}$$

$$x = -\frac{1}{5} \quad x = \frac{1}{5} \quad \text{Solve each equation.}$$

The solution set is  $\left\{-\frac{1}{5}, \frac{1}{5}\right\}$ . Since  $\left(-\frac{1}{5}\right)^2 - \frac{1}{25} = 0$  and  $\left(\frac{1}{5}\right)^2 - \frac{1}{25} = 0$ , the solutions check.

b.  $4x^3 = 9x$

$$4x^3 = 9x \quad \text{Original equation}$$

$$4x^3 - 9x = 0 \quad \text{Subtract } 9x \text{ from each side.}$$

$$x(4x^2 - 9) = 0 \quad \text{Find the GCF.}$$

$$x[(2x)^2 - 3^2] = 0 \quad 4x^2 = 2x \cdot 2x \text{ and } 9 = 3 \cdot 3$$

$$x[(2x)^2 - 3^2] = x[(2x - 3)(2x + 3)] \quad \text{Factor the difference of squares.}$$

$$x = 0 \quad \text{or} \quad (2x - 3) = 0 \quad \text{or} \quad (2x + 3) = 0 \quad \text{Zero Product Property}$$

$$x = 0 \quad x = \frac{3}{2} \quad x = -\frac{3}{2} \quad \text{Solve each equation.}$$

The solution set is  $\left\{0, \frac{3}{2}, -\frac{3}{2}\right\}$ .

Since  $4(0)^3 = 9(0)$ ,  $4\left(\frac{3}{2}\right)^3 = 9\left(\frac{3}{2}\right)$ , and  $4\left(-\frac{3}{2}\right)^3 = 9\left(-\frac{3}{2}\right)$ , the solutions check.

**Exercises**

Solve each equation by factoring. Check the solutions.

1.  $81x^2 = 49$

2.  $36n^2 = 1$

3.  $25d^2 - 100 = 0$

4.  $\frac{1}{4}x^2 = 25$

5.  $36 = \frac{1}{25}x^2$

6.  $\frac{49}{100} - x^2 = 0$

7.  $9x^3 = 25x$

8.  $7a^3 = 175a$

9.  $2m^3 = 32m$

10.  $16y^3 = 25y$

11.  $\frac{1}{64}x^2 = 49$

12.  $4a^3 - 64a = 0$

13.  $3b^3 - 27b = 0$

14.  $\frac{9}{25}m^2 = 121$

15.  $48n^3 = 147n$

**8-6 Study Guide and Intervention****Quadratic Equations: Perfect Squares****Factor Perfect Square Trinomials**

<b>Perfect Square Trinomial</b>	a trinomial of the form $a^2 + 2ab + b^2$ or $a^2 - 2ab + b^2$
---------------------------------	--

The patterns shown below can be used to factor perfect square trinomials.

Squaring a Binomial	Factoring a Perfect Square Trinomial
$(a + 4)^2 = a^2 + 2(a)(4) + 4^2$ $= a^2 + 8a + 16$	$a^2 + 8a + 16 = a^2 + 2(a)(4) + 4^2$ $= (a + 4)^2$
$(2x - 3)^2 = (2x)^2 - 2(2x)(3) + 3^2$ $= 4x^2 - 12x + 9$	$4x^2 - 12x + 9 = (2x)^2 - 2(2x)(3) + 3^2$ $= (2x - 3)^2$

**Example 1** Determine whether  $16n^2 - 24n + 9$  is a perfect square trinomial. If so, factor it.

Since  $16n^2 = (4n)(4n)$ , the first term is a perfect square.

Since  $9 = 3 \cdot 3$ , the last term is a perfect square.

The middle term is equal to  $2(4n)(3)$ .

Therefore,  $16n^2 - 24n + 9$  is a perfect square trinomial.

$$16n^2 - 24n + 9 = (4n)^2 - 2(4n)(3) + 3^2$$

$$= (4n - 3)^2$$

**Example 2** Factor  $16x^2 - 32x + 15$ .

Since 15 is not a perfect square, use a different factoring pattern.

$$16x^2 - 32x + 15 \quad \text{Original trinomial}$$

$$= 16x^2 + mx + px + 15 \quad \text{Write the pattern.}$$

$$= 16x^2 - 12x - 20x + 15 \quad m = -12 \text{ and } p = -20$$

$$= (16x^2 - 12x) - (20x - 15) \quad \text{Group terms.}$$

$$= 4x(4x - 3) - 5(4x - 3) \quad \text{Find the GCF.}$$

$$= (4x - 5)(4x - 3) \quad \text{Factor by grouping.}$$

$$\text{Therefore } 16x^2 - 32x + 15 = (4x - 5)(4x - 3).$$

**Exercises**

Determine whether each trinomial is a perfect square trinomial. Write *yes* or *no*. If so, factor it.

1.  $x^2 - 16x + 64$

2.  $m^2 + 10m + 25$

3.  $p^2 + 8p + 64$

Factor each polynomial, if possible. If the polynomial cannot be factored, write *prime*.

4.  $98x^2 - 200y^2$

5.  $x^2 + 22x + 121$

6.  $81 + 18j + j^2$

7.  $25c^2 - 10c - 1$

8.  $169 - 26r + r^2$

9.  $7x^2 - 9x + 2$

10.  $16m^2 + 48m + 36$

11.  $16 - 25a^2$

12.  $b^2 - 16b + 256$

13.  $36x^2 - 12x + 1$

14.  $16a^2 - 40ab + 25b^2$

15.  $8m^3 - 64m$

**8-6 Study Guide and Intervention** *(continued)***Quadratic Equations: Perfect Squares**

**Solve Equations with Perfect Squares** Factoring and the Zero Product Property can be used to solve equations that involve repeated factors. The repeated factor gives just one solution to the equation. You may also be able to use the **Square Root Property** below to solve certain equations.

**Square Root Property**For any number  $n > 0$ , if  $x^2 = n$ , then  $x = \pm \sqrt{n}$ .**Example****Solve each equation. Check your solutions.**

**a.  $x^2 - 6x + 9 = 0$**

$x^2 - 6x + 9 = 0$

Original equation

$x^2 - 2(3x) + 3^2 = 0$

Recognize a perfect square trinomial.

$(x - 3)(x - 3) = 0$

Factor the perfect square trinomial.

$x - 3 = 0$

Set repeated factor equal to 0.

$x = 3$

Solve.

The solution set is  $\{3\}$ . Since  $3^2 - 6(3) + 9 = 0$ , the solution checks.

**b.  $(a - 5)^2 = 64$**

$(a - 5)^2 = 64$

Original equation

$a - 5 = \pm \sqrt{64}$

Square Root Property

$a - 5 = \pm 8$

 $64 = 8 \cdot 8$ 

$a = 5 \pm 8$

Add 5 to each side.

$a = 5 + 8$  or  $a = 5 - 8$

Separate into 2 equations.

$a = 13$

$a = -3$

Solve each equation.

The solution set is  $\{-3, 13\}$ . Since  $(-3 - 5)^2 = 64$  and  $(13 - 5)^2 = 64$ , the solutions check.**Exercises****Solve each equation. Check the solutions.**

1.  $x^2 + 4x + 4 = 0$

2.  $16n^2 + 16n + 4 = 0$

3.  $25d^2 - 10d + 1 = 0$

4.  $x^2 + 10x + 25 = 0$

5.  $9x^2 - 6x + 1 = 0$

6.  $x^2 + x + \frac{1}{4} = 0$

7.  $25k^2 + 20k + 4 = 0$

8.  $p^2 + 2p + 1 = 49$

9.  $x^2 + 4x + 4 = 64$

10.  $x^2 - 6x + 9 = 25$

11.  $a^2 + 8a + 16 = 1$

12.  $16y^2 + 8y + 1 = 0$

13.  $(x + 3)^2 = 49$

14.  $(y + 6)^2 = 1$

15.  $(m - 7)^2 = 49$

16.  $(2x + 1)^2 = 1$

17.  $(4x + 3)^2 = 25$

18.  $(3h - 2)^2 = 4$

19.  $(x + 1)^2 = 7$

20.  $(y - 3)^2 = 6$

21.  $(m - 2)^2 = 5$

# 9-1 Study Guide and Intervention

## Graphing Quadratic Functions

### Characteristics of Quadratic Functions

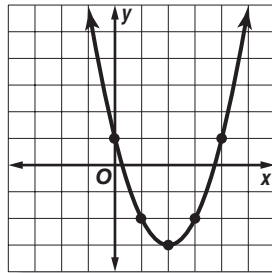
<b>Quadratic Function</b>	a function described by an equation of the form $f(x) = ax^2 + bx + c$ , where $a \neq 0$	<b>Example:</b> $y = 2x^2 + 3x + 8$
---------------------------	---	--

The parent graph of the family of quadratic functions is  $y = x^2$ . Graphs of quadratic functions have a general shape called a **parabola**. A parabola opens upward and has a **minimum point** when the value of  $a$  is positive, and a parabola opens downward and has a **maximum point** when the value of  $a$  is negative.

#### Example 1

- a. Use a table of values to graph  $y = x^2 - 4x + 1$ .

x	y
-1	6
0	1
1	-2
2	-3
3	-2
4	1



Graph the ordered pairs in the table and connect them with a smooth curve.

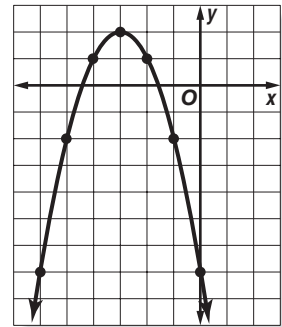
- b. What is the domain and range of this function?

The domain (the  $x$ -values) is all real numbers. The range (the  $y$ -values) is all real numbers greater than or equal to  $-3$ , which is the minimum.

#### Example 2

- a. Use a table of values to graph  $y = -x^2 - 6x - 7$ .

x	y
-6	-7
-5	-2
-4	1
-3	2
-2	1
-1	-2
0	-7



Graph the ordered pairs in the table and connect them with a smooth curve.

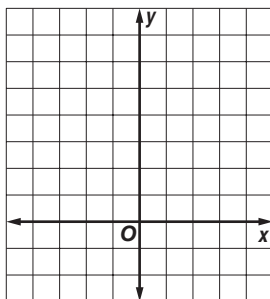
- b. What is the domain and range of this function?

The domain (the  $x$ -values) is all real numbers. The range (the  $y$ -values) is all real numbers less than or equal to  $2$ , which is the maximum.

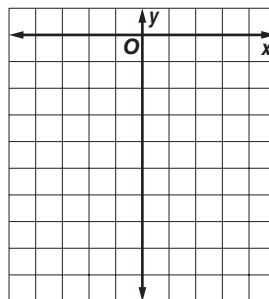
### Exercises

Use a table of values to graph each function. Determine the domain and range.

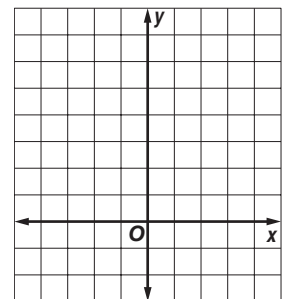
1.  $y = x^2 + 2$



2.  $y = -x^2 - 4$



3.  $y = x^2 - 3x + 2$



# 9-1 Study Guide and Intervention *(continued)*

## Graphing Quadratic Functions

**Symmetry and Vertices** Parabolas have a geometric property called **symmetry**. That is, if the figure is folded in half, each half will match the other half exactly. The vertical line containing the fold line is called the **axis of symmetry**. The axis of symmetry contains the minimum or maximum point of the parabola, the **vertex**.

<b>Axis of Symmetry</b>	For the parabola $y = ax^2 + bx + c$ , where $a \neq 0$ , the line $x = -\frac{b}{2a}$ is the axis of symmetry.	<b>Example:</b> The axis of symmetry of $y = x^2 + 2x + 5$ is the line $x = -1$ .
-------------------------	---	---

**Example** Consider the graph of  $y = 2x^2 + 4x + 1$ .

**a. Write the equation of the axis of symmetry.**

In  $y = 2x^2 + 4x + 1$ ,  $a = 2$  and  $b = 4$ .  
Substitute these values into the equation of the axis of symmetry.

$$x = -\frac{b}{2a}$$

$$x = -\frac{4}{2(2)} = -1$$

The axis of symmetry is  $x = -1$ .

**b. Find the coordinates of the vertex.**

Since the equation of the axis of symmetry is  $x = -1$  and the vertex lies on the axis, the  $x$ -coordinate of the vertex is  $-1$ .

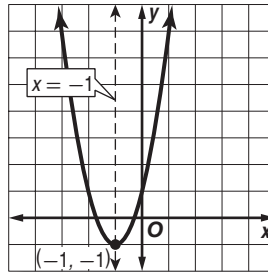
$y = 2x^2 + 4x + 1$	Original equation
$y = 2(-1)^2 + 4(-1) + 1$	Substitute.
$y = 2(1) - 4 + 1$	Simplify.
$y = -1$	

The vertex is at  $(-1, -1)$ .

**c. Identify the vertex as a maximum or a minimum.**

Since the coefficient of the  $x^2$ -term is positive, the parabola opens upward, and the vertex is a minimum point.

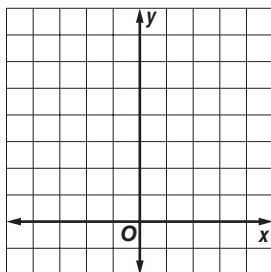
**d. Graph the function.**



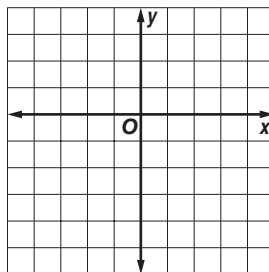
### Exercises

Consider each equation. Determine whether the function has *maximum* or *minimum* value. State the maximum or minimum value. What are the domain and range of the function? Find the equation of the axis of symmetry. Graph the function.

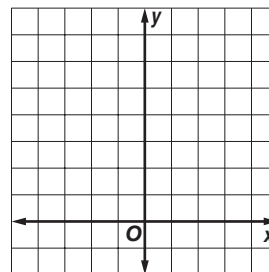
1.  $y = x^2 + 3$



2.  $y = -x^2 - 4x - 4$



3.  $y = x^2 + 2x + 3$



# 9-2 Study Guide and Intervention

## Solving Quadratic Equations by Graphing

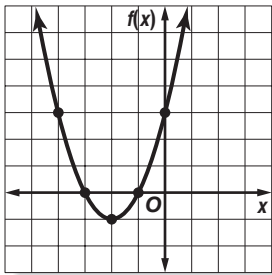
### Solve by Graphing

<b>Quadratic Equation</b>	an equation of the form $ax^2 + bx + c = 0$ , where $a \neq 0$
---------------------------	--

The solutions of a quadratic equation are called the **roots** of the equation. The roots of a quadratic equation can be found by graphing the related quadratic function  $f(x) = ax^2 + bx + c$  and finding the  $x$ -intercepts or **zeros** of the function.

**Example 1** Solve  $x^2 + 4x + 3 = 0$  by graphing.

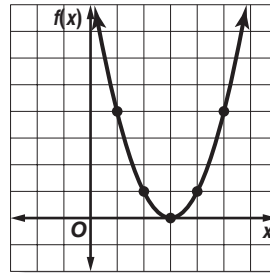
Graph the related function  $f(x) = x^2 + 4x + 3$ . The equation of the axis of symmetry is  $x = -\frac{4}{2(1)}$  or  $-2$ . The vertex is at  $(-2, -1)$ . Graph the vertex and several other points on either side of the axis of symmetry.



To solve  $x^2 + 4x + 3 = 0$ , you need to know where the value of  $f(x) = 0$ . This occurs at the  $x$ -intercepts,  $-3$  and  $-1$ . The solutions are  $-3$  and  $-1$ .

**Example 2** Solve  $x^2 - 6x + 9 = 0$  by graphing.

Graph the related function  $f(x) = x^2 - 6x + 9$ . The equation of the axis of symmetry is  $x = \frac{6}{2(1)}$  or  $3$ . The vertex is at  $(3, 0)$ . Graph the vertex and several other points on either side of the axis of symmetry.

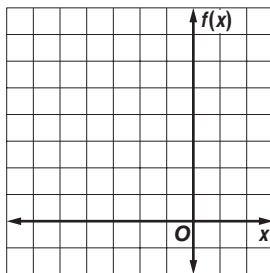


To solve  $x^2 - 6x + 9 = 0$ , you need to know where the value of  $f(x) = 0$ . The vertex of the parabola is the  $x$ -intercept. Thus, the only solution is  $3$ .

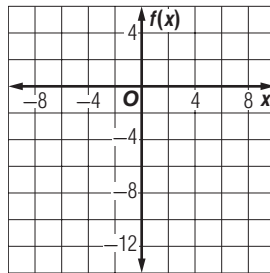
### Exercises

Solve each equation by graphing.

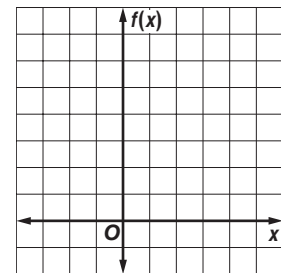
1.  $x^2 + 7x + 12 = 0$



2.  $x^2 - x - 12 = 0$



3.  $x^2 - 4x + 5 = 0$



# 9-2 Study Guide and Intervention *(continued)*

## Solving Quadratic Equations by Graphing

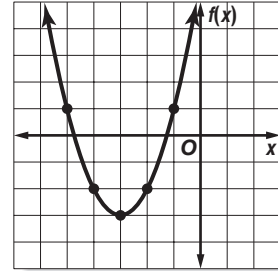
**Estimate Solutions** The roots of a quadratic equation may not be integers. If exact roots cannot be found, they can be estimated by finding the consecutive integers between which the roots lie.

**Example** Solve  $x^2 + 6x + 6 = 0$  by graphing. If integral roots cannot be found, estimate the roots by stating the consecutive integers between which the roots lie.

Graph the related function  $f(x) = x^2 + 6x + 6$ .

x	f(x)
-5	1
-4	-2
-3	-3
-2	-2
-1	1

Notice that the value of the function changes from negative to positive between the  $x$ -values of  $-5$  and  $-4$  and between  $-2$  and  $-1$ .

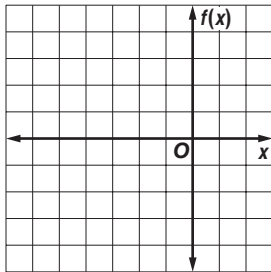


The  $x$ -intercepts of the graph are between  $-5$  and  $-4$  and between  $-2$  and  $-1$ . So one root is between  $-5$  and  $-4$ , and the other root is between  $-2$  and  $-1$ .

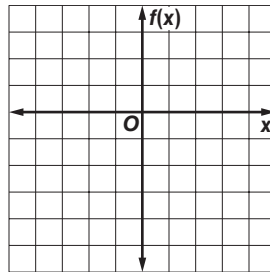
### Exercises

Solve each equation by graphing. If integral roots cannot be found, estimate the roots to the nearest tenth.

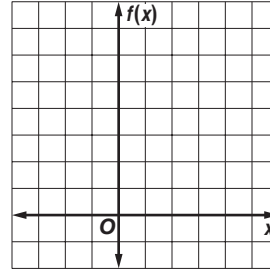
1.  $x^2 + 7x + 9 = 0$



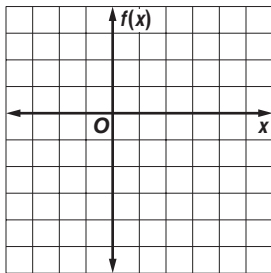
2.  $x^2 - x - 4 = 0$



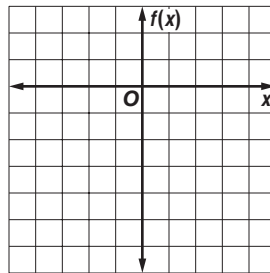
3.  $x^2 - 4x + 6 = 0$



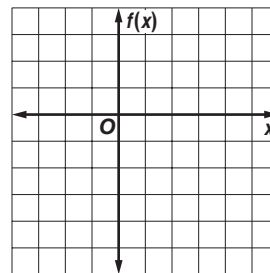
4.  $x^2 - 4x - 1 = 0$



5.  $4x^2 - 12x + 3 = 0$



6.  $x^2 - 2x - 4 = 0$





# 9-3 Study Guide and Intervention

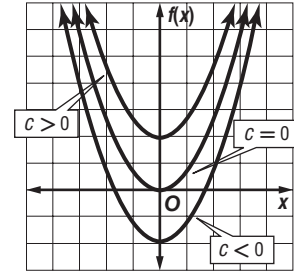
## Transformations of Quadratic Functions

**Translations** A **translation** is a change in the position of a figure either up, down, or diagonal. When a constant  $c$  is added to or subtracted from the parent function, the resulting function  $f(x) \pm c$  is a translation of the graph up or down.

The graph of  $f(x) = x^2 + c$  translates the graph of  $f(x) = x^2$  vertically.

If  $c > 0$ , the graph of  $f(x) = x^2$  is translated  $|c|$  units up.

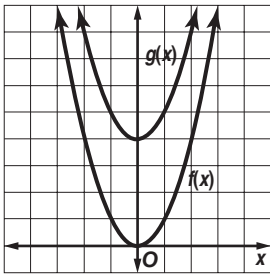
If  $c < 0$ , the graph of  $f(x) = x^2$  is translated  $|c|$  units down.



**Example** Describe how the graph of each function is related to the graph of  $f(x) = x^2$ .

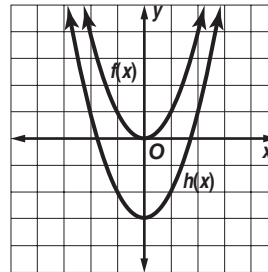
**a.**  $g(x) = x^2 + 4$

The function can be written as  $f(x) = x^2 + c$ . The value of  $c$  is 4, and  $4 > 0$ . Therefore, the graph of  $g(x) = x^2 + 4$  is a translation of the graph of  $f(x) = x^2$  up 4 units.



**b.**  $h(x) = x^2 - 3$

The function can be written as  $f(x) = x^2 + c$ . The value of  $c$  is  $-3$ , and  $-3 < 0$ . Therefore, the graph of  $g(x) = x^2 - 3$  is a translation of the graph of  $f(x) = x^2$  down 3 units.



### Exercises

Describe how the graph of each function is related to the graph of  $f(x) = x^2$ .

1.  $g(x) = x^2 + 1$

2.  $h(x) = x^2 - 6$

3.  $g(x) = x^2 - 1$

4.  $h(x) = 20 + x^2$

5.  $g(x) = -2 + x^2$

6.  $h(x) = -\frac{1}{2} + x^2$

7.  $g(x) = x^2 + \frac{8}{9}$

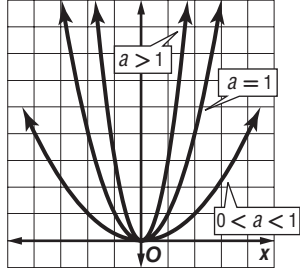
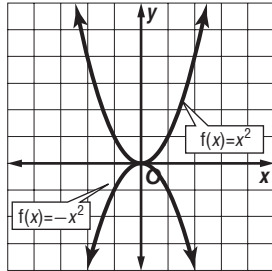
8.  $h(x) = x^2 - 0.3$

9.  $g(x) = x^2 - 4$

# 9-3 Study Guide and Intervention *(continued)*

## Transformations of Quadratic Functions

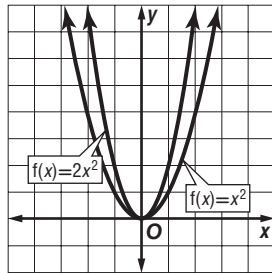
**Dilations and Reflections** A **dilation** is a transformation that makes the graph narrower or wider than the parent graph. A **reflection** flips a figure over the  $x$ - or  $y$ -axis.

<p>The graph of <math>f(x) = ax^2</math> stretches or vertically compresses the graph of <math>f(x) = x^2</math>.</p> <p>If <math> a  &gt; 1</math>, the graph of <math>f(x) = x^2</math> is stretched vertically.</p> <p>If <math>0 &lt;  a  &lt; 1</math>, the graph of <math>f(x) = x^2</math> is compressed vertically.</p>	
<p>The graph of the function <math>-f(x)</math> flips the graph of <math>f(x) = x^2</math> across the <math>x</math>-axis.</p> <p>The graph of the function <math>f(-x)</math> flips the graph of <math>f(x) = x^2</math> across the <math>y</math>-axis.</p>	

**Example** Describe how the graph of each function is related to the graph of  $f(x) = x^2$ .

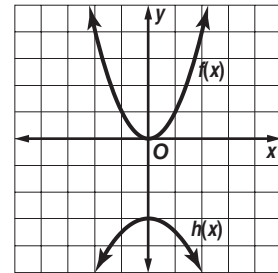
**a.  $g(x) = 2x^2$**

The function can be written as  $f(x) = ax^2$  where  $a = 2$ . Because  $|a| > 1$ , the graph of  $y = 2x^2$  is the graph of  $y = x^2$  that is stretched vertically.



**b.  $h(x) = -\frac{1}{2}x^2 - 3$**

The negative sign causes a reflection across the  $x$ -axis. Then a dilation occurs in which  $a = \frac{1}{2}$  and a translation in which  $c = -3$ . So the graph of  $y = -\frac{1}{2}x^2 - 3$  is reflected across the  $x$ -axis, dilated wider than the graph of  $f(x) = x^2$ , and translated down 3 units.



### Exercises

Describe how the graph of each function is related to the graph of  $f(x) = x^2$ .

1.  $h(x) = -5x^2$

2.  $g(x) = -x^2 + 1$

3.  $g(x) = -\frac{1}{4}x^2 - 1$

## 9-4 Study Guide and Intervention

### Solving Quadratic Equations by Completing the Square

**Complete the Square** Perfect square trinomials can be solved quickly by taking the square root of both sides of the equation. A quadratic equation that is not in perfect square form can be made into a perfect square by a method called **completing the square**.

#### Completing the Square

To complete the square for any quadratic equation of the form  $x^2 + bx$ :

**Step 1** Find one-half of  $b$ , the coefficient of  $x$ .

**Step 2** Square the result in Step 1.

**Step 3** Add the result of Step 2 to  $x^2 + bx$ .

$$x^2 + bx + \left(\frac{b}{2}\right)^2 = \left(x + \frac{b}{2}\right)^2$$

**Example** Find the value of  $c$  that makes  $x^2 + 2x + c$  a perfect square trinomial.

**Step 1** Find  $\frac{1}{2}$  of 2.  $\frac{2}{2} = 1$

**Step 2** Square the result of Step 1.  $1^2 = 1$

**Step 3** Add the result of Step 2 to  $x^2 + 2x$ .  $x^2 + 2x + 1$ .

Thus,  $c = 1$ . Notice that  $x^2 + 2x + 1$  equals  $(x + 1)^2$

### Exercises

Find the value of  $c$  that makes each trinomial a perfect square.

1.  $x^2 + 10x + c$

2.  $x^2 + 14x + c$

3.  $x^2 - 4x + c$

4.  $x^2 - 8x + c$

5.  $x^2 + 5x + c$

6.  $x^2 + 9x + c$

7.  $x^2 - 3x + c$

8.  $x^2 - 15x + c$

9.  $x^2 + 28x + c$

10.  $x + 22x + c$

**9-4 Study Guide and Intervention** *(continued)***Solving Quadratic Equations by Completing the Square**

**Solve by Completing the Square** Since few quadratic expressions are perfect square trinomials, the method of **completing the square** can be used to solve some quadratic equations. Use the following steps to complete the square for a quadratic expression of the form  $ax^2 + bx$ .

<b>Step 1</b>	Find $\frac{b}{2}$ .
<b>Step 2</b>	Find $\left(\frac{b}{2}\right)^2$ .
<b>Step 3</b>	Add $\left(\frac{b}{2}\right)^2$ to $ax^2 + bx$ .

**Example** Solve  $x^2 + 6x + 3 = 10$  by completing the square.

$$x^2 + 6x + 3 = 10 \quad \text{Original equation}$$

$$x^2 + 6x + 3 - 3 = 10 - 3 \quad \text{Subtract 3 from each side.}$$

$$x^2 + 6x = 7 \quad \text{Simplify.}$$

$$x^2 + 6x + 9 = 7 + 9 \quad \text{Since } \left(\frac{6}{2}\right)^2 = 9, \text{ add 9 to each side.}$$

$$(x + 3)^2 = 16 \quad \text{Factor } x^2 + 6x + 9.$$

$$x + 3 = \pm 4 \quad \text{Take the square root of each side.}$$

$$x = -3 + 4 \quad \text{Simplify.}$$

$$x = -3 + 4 \quad \text{or} \quad x = -3 - 4$$

$$= 1 \quad \quad \quad = -7$$

The solution set is  $\{-7, 1\}$ .

**Exercises**

Solve each equation by completing the square. Round to the nearest tenth if necessary.

1.  $x^2 - 4x + 3 = 0$

2.  $x^2 + 10x = -9$

3.  $x^2 - 8x - 9 = 0$

4.  $x^2 - 6x = 16$

5.  $x^2 - 4x - 5 = 0$

6.  $x^2 - 12x = 9$

7.  $x^2 + 8x = 20$

8.  $x^2 = 2x + 1$

9.  $x^2 + 20x + 11 = -8$

10.  $x^2 - 1 = 5x$

11.  $x^2 = 22x + 23$

12.  $x^2 - 8x = -7$

13.  $x^2 + 10x = 24$

14.  $x^2 - 18x = 19$

15.  $x^2 + 16x = -16$

16.  $4x^2 = 24 + 4x$

17.  $2x^2 + 4x + 2 = 8$

18.  $4x^2 = 40x + 44$

**9-5 Study Guide and Intervention****Solving Quadratic Equations by Using the Quadratic Formula**

**Quadratic Formula** To solve the standard form of the quadratic equation,  $ax^2 + bx + c = 0$ , use the **Quadratic Formula**.

<b>Quadratic Formula</b>	the formula $x = \frac{-b \pm \sqrt{b^2 - 4ac}}{2a}$ that gives the solutions of $ax^2 + bx + c = 0$ , where $a \neq 0$
--------------------------	---

**Example 1** Solve  $x^2 + 2x = 3$  by using the Quadratic Formula.

Rewrite the equation in standard form.

$$x^2 + 2x = 3 \quad \text{Original equation}$$

$$x^2 + 2x - 3 = 3 - 3 \quad \text{Subtract 3 from each side.}$$

$$x^2 + 2x - 3 = 0 \quad \text{Simplify.}$$

Now let  $a = 1$ ,  $b = 2$ , and  $c = -3$  in the Quadratic Formula.

$$x = \frac{-b \pm \sqrt{b^2 - 4ac}}{2a}$$

$$= \frac{-2 \pm \sqrt{(2)^2 - 4(1)(-3)}}{2(1)}$$

$$= \frac{-2 \pm \sqrt{16}}{2}$$

$$x = \frac{-2 + 4}{2} \quad \text{or} \quad x = \frac{-2 - 4}{2}$$

$$= 1 \quad \quad \quad = -3$$

The solution set is  $\{-3, 1\}$ .

**Example 2** Solve  $x^2 - 6x - 2 = 0$  by using the Quadratic Formula. Round to the nearest tenth if necessary.

For this equation  $a = 1$ ,  $b = -6$ , and  $c = -2$ .

$$x = \frac{-b \pm \sqrt{b^2 - 4ac}}{2a}$$

$$= \frac{6 \pm \sqrt{(-6)^2 - 4(1)(-2)}}{2(1)}$$

$$= \frac{6 \pm \sqrt{44}}{2}$$

$$x = \frac{6 \pm \sqrt{44}}{2} \quad \text{or} \quad x = \frac{6 - \sqrt{44}}{2}$$

$$\approx 6.3 \quad \quad \quad \approx -0.3$$

The solution set is  $\{-0.3, 6.3\}$ .

**Exercises**

Solve each equation by using the Quadratic Formula. Round to the nearest tenth if necessary.

1.  $x^2 - 3x + 2 = 0$

2.  $x^2 - 8x = -16$

3.  $16x^2 - 8x = -1$

4.  $x^2 + 5x = 6$

5.  $3x^2 + 2x = 8$

6.  $8x^2 - 8x - 5 = 0$

7.  $-4x^2 + 19x = 21$

8.  $2x^2 + 6x = 5$

9.  $48x^2 + 22x - 15 = 0$

10.  $8x^2 - 4x = 24$

11.  $2x^2 + 5x = 8$

12.  $8x^2 + 9x - 4 = 0$

13.  $2x^2 + 9x + 4 = 0$

14.  $8x^2 + 17x + 2 = 0$

**9-5 Study Guide and Intervention** *(continued)***Solving Quadratic Equations by Using the Quadratic Formula**

**The Discriminant** In the Quadratic Formula,  $x = \frac{-b \pm \sqrt{b^2 - 4ac}}{2a}$ , the expression under the radical sign,  $b^2 - 4ac$ , is called the **discriminant**. The discriminant can be used to determine the number of real roots for a quadratic equation.

<b>Case 1:</b> $b^2 - 4ac < 0$	no real roots
<b>Case 2:</b> $b^2 - 4ac = 0$	one real root
<b>Case 3:</b> $b^2 - 4ac > 0$	two real roots

**Example**

**State the value of the discriminant for each equation. Then determine the number of real solutions of the equation.**

**a.  $12x^2 + 5x = 4$**

Write the equation in standard form.

$$12x^2 + 5x = 4 \quad \text{Original equation}$$

$$12x^2 + 5x - 4 = 4 - 4 \quad \text{Subtract 4 from each side.}$$

$$12x^2 + 5x - 4 = 0 \quad \text{Simplify.}$$

Now find the discriminant.

$$\begin{aligned} b^2 - 4ac &= (5)^2 - 4(12)(-4) \\ &= 217 \end{aligned}$$

Since the discriminant is positive, the equation has two real roots.

**b.  $2x^2 + 3x = -4$**

$$2x^2 + 3x = -4 \quad \text{Original equation}$$

$$2x^2 + 3x + 4 = -4 + 4 \quad \text{Add 4 to each side.}$$

$$2x^2 + 3x + 4 = 0 \quad \text{Simplify.}$$

Find the discriminant.

$$\begin{aligned} b^2 - 4ac &= (3)^2 - 4(2)(4) \\ &= -23 \end{aligned}$$

Since the discriminant is negative, the equation has no real roots.

**Exercises**

**State the value of the discriminant for each equation. Then determine the number of real solutions of the equation.**

1.  $3x^2 + 2x - 3 = 0$

2.  $3x^2 - 7x - 8 = 0$

3.  $2x^2 - 10x - 9 = 0$

4.  $4x^2 = x + 4$

5.  $3x^2 - 13x = 10$

6.  $6x^2 - 10x + 10 = 0$

7.  $2x^2 - 20 = -x$

8.  $6x^2 = -11x - 40$

9.  $9 - 18x + 9x^2 = 0$

10.  $12x^2 + 9 = -6x$

11.  $9x^2 = 81$

12.  $16x^2 + 16x + 4 = 0$

13.  $8x^2 + 9x = 2$

14.  $4x^2 - 4x + 4 = 3$

15.  $3x^2 - 18x = -14$

# 9-6 Study Guide and Intervention

## Exponential Functions

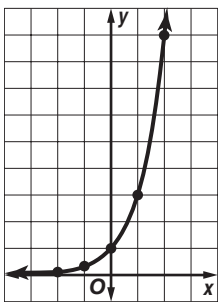
### Graph Exponential Functions

**Exponential Function** a function defined by an equation of the form  $y = ab^x$ , where  $a \neq 0$ ,  $b > 0$ , and  $b \neq 1$

You can use values of  $x$  to find ordered pairs that satisfy an exponential function. Then you can use the ordered pairs to graph the function.

**Example 1** Graph  $y = 3^x$ . Find the  $y$ -intercept and state the domain and range.

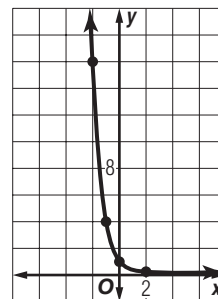
x	y
-2	$\frac{1}{9}$
-1	$\frac{1}{3}$
0	1
1	3
2	9



The  $y$ -intercept is 1.  
The domain is all real numbers, and the range is all positive numbers.

**Example 2** Graph  $y = \left(\frac{1}{4}\right)^x$ . Use the graph to approximate the value of  $\left(\frac{1}{4}\right)^{-0.5}$ .

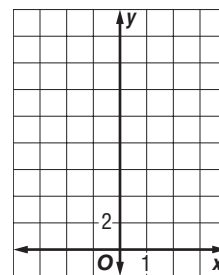
x	y
-2	16
-1	4
0	1
1	$\frac{1}{4}$
2	$\frac{1}{16}$



The value of  $\left(\frac{1}{4}\right)^{-0.5}$  is about 2.

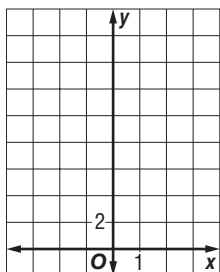
### Exercises

- Graph  $y = 0.3^x$ . Find the  $y$ -intercept. Then use the graph to approximate the value of  $0.3^{-1.5}$ . Use a calculator to confirm the value.

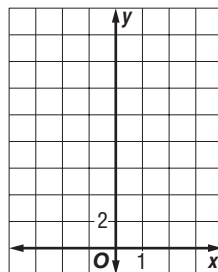


Graph each function. Find the  $y$ -intercept and state the domain and range.

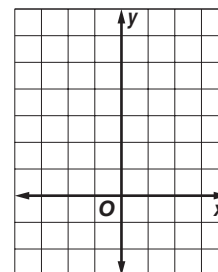
2.  $y = 3^x + 1$



3.  $y = \left(\frac{1}{3}\right)^x + 1$



4.  $y = \left(\frac{1}{2}\right)^x - 2$



# 9-6 Study Guide and Intervention *(continued)*

## Exponential Functions

**Identify Exponential Behavior** It is sometimes useful to know if a set of data is exponential. One way to tell is to observe the shape of the graph. Another way is to observe the pattern in the set of data.

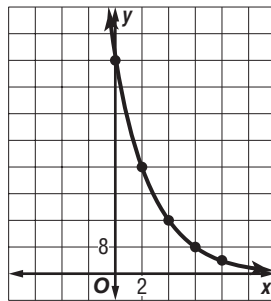
**Example** Determine whether the set of data shown below displays exponential behavior. Write *yes* or *no*. Explain why or why not.

x	0	2	4	6	8	10
y	64	32	16	8	4	2

**Method 1: Look for a Pattern**

The domain values increase by regular intervals of 2, while the range values have a common factor of  $\frac{1}{2}$ . Since the domain values increase by regular intervals and the range values have a common factor, the data are probably exponential.

**Method 2: Graph the Data**



The graph shows rapidly decreasing values of  $y$  as  $x$  increases. This is characteristic of exponential behavior.

### Exercises

Determine whether the set of data shown below displays exponential behavior. Write *yes* or *no*. Explain why or why not.

1. 

x	0	1	2	3
y	5	10	15	20

2. 

x	0	1	2	3
y	3	9	27	81

3. 

x	-1	1	3	5
y	32	16	8	4

4. 

x	-1	0	1	2	3
y	3	3	3	3	3

5. 

x	-5	0	5	10
y	1	0.5	0.25	0.125

6. 

x	0	1	2	3	4
y	$\frac{1}{3}$	$\frac{1}{9}$	$\frac{1}{27}$	$\frac{1}{81}$	$\frac{1}{243}$



# 9-7 Study Guide and Intervention

## Growth and Decay

**Exponential Growth** Population increases and growth of monetary investments are examples of **exponential growth**. This means that an initial amount increases at a steady rate over time.

<b>Exponential Growth</b>	<p>The general equation for exponential growth is <math>y = a(1 + r)^t</math>.</p> <ul style="list-style-type: none"> <li>• <math>y</math> represents the final amount.</li> <li>• <math>a</math> represents the initial amount.</li> <li>• <math>r</math> represents the rate of change expressed as a decimal.</li> <li>• <math>t</math> represents time.</li> </ul>
---------------------------	--

### Example 1

#### POPULATION The

population of Johnson City in 2000 was 25,000. Since then, the population has grown at an average rate of 3.2% each year.

- a. Write an equation to represent the population of Johnson City since 2000.

The rate 3.2% can be written as 0.032.

$$y = a(1 + r)^t$$

$$y = 25,000(1 + 0.032)^t$$

$$y = 25,000(1.032)^t$$

- b. According to the equation, what will the population of Johnson City be in the year 2010?

In 2010,  $t$  will equal  $2010 - 2000$  or 10.

Substitute 10 for  $t$  in the equation from part a.

$$y = 25,000(1.032)^{10} \quad t = 10$$

$$\approx 34,256$$

In 2010, the population of Johnson City will be about 34,256.

### Example 2

#### INVESTMENT The

Garcias have \$12,000 in a savings account. The bank pays 3.5% interest on savings accounts, compounded monthly. Find the balance in 3 years.

The rate 3.5% can be written as 0.035.

The special equation for compound interest is  $A = P \left(1 + \frac{r}{n}\right)^{nt}$ , where  $A$

represents the balance,  $P$  is the initial amount,  $r$  represents the annual rate expressed as a decimal,  $n$  represents the number of times the interest is compounded each year, and  $t$  represents the number of years the money is invested.

$$A = P \left(1 + \frac{r}{n}\right)^{nt}$$

$$A = 12,000 \left(1 + \frac{0.035}{12}\right)^{36}$$

$$A \approx 12,000(1.00292)^{36}$$

$$A \approx 13,328.09$$

In three years, the balance of the account will be \$13,328.09.

## Exercises

- POPULATION** The population of the United States has been increasing at an average annual rate of 0.91%. If the population of the United States was about 303,146,000 in the year 2008, predict the U.S. population in the year 2012.
- INVESTMENT** Determine the amount of an investment of \$2500 if it is invested at an interest rate of 5.25% compounded monthly for 4 years.
- POPULATION** It is estimated that the population of the world is increasing at an average annual rate of 1.3%. If the population of the world was about 6,641,000,000 in the year 2008, predict the world population in the year 2015.
- INVESTMENT** Determine the amount of an investment of \$100,000 if it is invested at an interest rate of 5.2% compounded quarterly for 12 years.

**9-7 Study Guide and Intervention** *(continued)***Growth and Decay**

**Exponential Decay** Radioactive decay and depreciation are examples of **exponential decay**. This means that an initial amount decreases at a steady rate over a period of time.

<b>Exponential Decay</b>	<p>The general equation for exponential decay is <math>y = a(1 - r)^t</math>.</p> <ul style="list-style-type: none"> <li>• <math>y</math> represents the final amount.</li> <li>• <math>a</math> represents the initial amount.</li> <li>• <math>r</math> represents the rate of decay expressed as a decimal.</li> <li>• <math>t</math> represents time.</li> </ul>
--------------------------	--

**Example**

**DEPRECIATION** The original price of a tractor was \$45,000. The value of the tractor decreases at a steady rate of 12% per year.

**a. Write an equation to represent the value of the tractor since it was purchased.**

The rate 12% can be written as 0.12.

$$y = a(1 - r)^t \quad \text{General equation for exponential decay}$$

$$y = 45,000(1 - 0.12)^t \quad a = 45,000 \text{ and } r = 0.12$$

$$y = 45,000(0.88)^t \quad \text{Simplify.}$$

**b. What is the value of the tractor in 5 years?**

$$y = 45,000(0.88)^t \quad \text{Equation for decay from part a}$$

$$y = 45,000(0.88)^5 \quad t = 5$$

$$y \approx 23,747.94 \quad \text{Use a calculator.}$$

In 5 years, the tractor will be worth about \$23,747.94.

**Exercises**

- 1. POPULATION** The population of Bulgaria has been decreasing at an annual rate of 0.89%. If the population of Bulgaria was about 7,450,349 in the year 2005, predict its population in the year 2015.
- 2. DEPRECIATION** Mr. Gossell is a machinist. He bought some new machinery for about \$125,000. He wants to calculate the value of the machinery over the next 10 years for tax purposes. If the machinery depreciates at the rate of 15% per year, what is the value of the machinery (to the nearest \$100) at the end of 10 years?
- 3. ARCHAEOLOGY** The *half-life* of a radioactive element is defined as the time that it takes for one-half a quantity of the element to decay. Radioactive carbon-14 is found in all living organisms and has a half-life of 5730 years. Consider a living organism with an original concentration of carbon-14 of 100 grams.
  - a.** If the organism lived 5730 years ago, what is the concentration of carbon-14 today?
  - b.** If the organism lived 11,460 years ago, determine the concentration of carbon-14 today.
- 4. DEPRECIATION** A new car costs \$32,000. It is expected to depreciate 12% each year for 4 years and then depreciate 8% each year thereafter. Find the value of the car in 6 years.

## 9-8 Study Guide and Intervention

### Geometric Sequences as Exponential Functions

**Recognize Geometric Sequences** A geometric sequence is a sequence in which each term after the first is found by multiplying the previous term by a nonzero constant  $r$  called the **common ratio**. The common ratio can be found by dividing any term by its previous term.

**Example 1** Determine whether the sequence is *arithmetic*, *geometric*, or *neither*: 21, 63, 189, 567, ...

Find the ratios of the consecutive terms. If the ratios are constant, the sequence is geometric.

$$\begin{array}{ccccccc} 21 & & 63 & & 189 & & 567 \\ & \nearrow & & \nearrow & & \nearrow & \\ \frac{63}{21} & = & \frac{189}{63} & = & \frac{567}{189} & = & 3 \end{array}$$

Because the ratios are constant, the sequence is geometric. The common ratio is 3.

**Example 2** Find the next three terms in this geometric sequence: -1215, 405, -135, 45, ...

**Step 1** Find the common ratio.

$$\begin{array}{ccccccc} -1215 & & 405 & & -135 & & 45 \\ & \nearrow & & \nearrow & & \nearrow & \\ \frac{405}{-1215} & = & \frac{-135}{405} & = & \frac{45}{-135} & = & -\frac{1}{3} \end{array}$$

The value of  $r$  is  $-\frac{1}{3}$ .

**Step 2** Multiply each term by the common ratio to find the next three terms.

$$\begin{array}{ccccccc} 45 & & -15 & & 5 & & -\frac{5}{3} \\ & \nearrow & & \nearrow & & \nearrow & \\ \times \left(-\frac{5}{3}\right) & & \times \left(-\frac{5}{3}\right) & & \times \left(-\frac{5}{3}\right) & & \end{array}$$

The next three terms of the sequence are -15, 5, and  $-\frac{5}{3}$ .

### Exercises

Determine whether each sequence is *arithmetic*, *geometric*, or *neither*. Explain.

1. 1, 2, 4, 8, ...

2. 9, 14, 6, 11, ...

3.  $\frac{2}{3}, \frac{1}{3}, \frac{1}{6}, \frac{1}{12}, \dots$

4. -2, 5, 12, 19, ...

Find the next three terms in each geometric sequence.

5. 648, -216, 72, ...

6. 25, -5, 1, ...

7.  $\frac{1}{16}, \frac{1}{2}, 4, \dots$

8. 72, 36, 18, ...

# 9-8 Study Guide and Intervention *(continued)*

## Geometric Sequences as Exponential Functions

**Geometric Sequences and Functions** The  $n$ th term  $a_n$  of a geometric sequence with first term  $a_1$  and common ratio  $r$  is given by the following formula, where  $n$  is any positive integer:  $a_n = a_1 \cdot r^{n-1}$ .

**Example** a. Write an equation for the  $n$ th term of the geometric sequence 5, 20, 80, 320, . . .

The first term of the sequence is 320. So,  $a_1 = 320$ . Now find the common ratio.

$$\begin{array}{ccccccc}
 5 & & 20 & & 80 & & 320 \\
 & \curvearrowright & & \curvearrowright & & \curvearrowright & \\
 & \frac{20}{5} & = & \frac{80}{20} & = & \frac{320}{80} & = 4
 \end{array}$$

The common ratio is 4. So,  $r = 4$ .

$$\begin{array}{ll}
 a_n = a_1 \cdot r^{n-1} & \text{Formula for } n\text{th term} \\
 a_n = 5 \cdot 4^{n-1} & a_1 = 5 \text{ and } r = 4
 \end{array}$$

b. Find the seventh term of this sequence.

Because we are looking for the seventh term,  $n = 7$ .

$$\begin{array}{ll}
 a_n = a_1 \cdot r^{n-1} & \text{Formula for } n\text{th term} \\
 a_7 = 5 \cdot 4^{7-1} & n = 7 \\
 = 5 \cdot 4^6 & \text{Simplify.} \\
 = 5 \cdot 4096 & 4^6 = 4096 \\
 = 20,480 & \text{Multiply.}
 \end{array}$$

The seventh term of the sequence is 20,480.

### Exercises

- Write an equation for the  $n$ th term of the geometric sequence  $-2, 10, -50, \dots$ . Find the eleventh term of this sequence.
- Write an equation for the  $n$ th term of the geometric sequence  $512, 128, 32, \dots$ . Find the sixth term of this sequence.
- Write an equation for the  $n$ th term of the geometric sequence  $\frac{4}{9}, 4, 36, \dots$ . Find the eighth term of this sequence.
- Write an equation for the  $n$ th term of the geometric sequence  $6, -54, 486, \dots$ . Find the ninth term of this sequence.
- Write an equation for the  $n$ th term of the geometric sequence  $100, 80, 64, \dots$ . Find the seventh term of this sequence.
- Write an equation for the  $n$ th term of the geometric sequence  $\frac{2}{5}, \frac{1}{10}, \frac{1}{40}, \dots$ . Find the sixth term of this sequence.
- Write an equation for the  $n$ th term of the geometric sequence  $\frac{3}{8}, -\frac{3}{2}, 6, \dots$ . Find the tenth term of this sequence.
- Write an equation for the  $n$ th term of the geometric sequence  $-3, -21, -147, \dots$ . Find the fifth term of this sequence.

# 9-9 Study Guide and Intervention

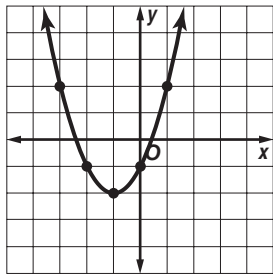
## Analyzing Functions with Successive Differences and Ratios

**Identify Functions** Linear functions, quadratic functions, and exponential functions can all be used to model data. The general forms of the equations are listed below.

Linear Function	$y = mx + b$
Quadratic Function	$y = ax^2 + bx + c$
Exponential Function	$y = ab^x$

You can also identify data as linear, quadratic, or exponential based on patterns of behavior of their  $y$ -values.

**Example 1** Graph the set of ordered pairs  $\{(-3, 2), (-2, -1), (-1, -2), (0, -1), (1, 2)\}$ . Determine whether the ordered pairs represent a *linear* function, a *quadratic* function, or an *exponential* function.



The ordered pairs appear to represent a quadratic function.

**Example 2** Look for a pattern in the table to determine which model best describes the data.

x	-2	-1	0	1	2
y	4	2	1	0.5	0.25

Start by comparing the first differences.

$$4 \xrightarrow{-2} 2 \xrightarrow{-1} 1 \xrightarrow{-0.5} 0.5 \xrightarrow{-0.25} 0.25$$

The first differences are not all equal. The table does not represent a linear function. Find the second differences and compare.

$$-2 \xrightarrow{+1} -1 \xrightarrow{+0.5} -0.5 \xrightarrow{+0.25} -0.25$$

The table does not represent a quadratic function. Find the ratios of the  $y$ -values.

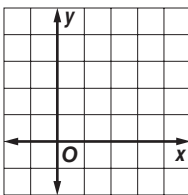
$$4 \xrightarrow{\times 0.5} 2 \xrightarrow{\times 0.5} 1 \xrightarrow{\times 0.5} 0.5 \xrightarrow{\times 0.5} 0.25$$

The ratios are equal. Therefore, the table can be modeled by an exponential function.

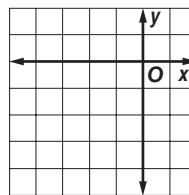
### Exercises

Graph each set of ordered pairs. Determine whether the ordered pairs represent a *linear* function, a *quadratic* function, or an *exponential* function.

1.  $(0, -1), (1, 1), (2, 3), (3, 5)$



2.  $(-3, -1), (-2, -4), (-1, -5), (0, -4), (1, -1)$



Look for a pattern in each table to determine which model best describes the data.

3.

x	-2	-1	0	1	2
y	6	5	4	3	2

4.

x	-2	-1	0	1	2
y	6.25	2.5	1	0.4	0.16

# 9-9 Study Guide and Intervention *(continued)*

## Analyzing Functions with Successive Differences and Ratios

**Write Equations** Once you find the model that best describes the data, you can write an equation for the function.

<b>Basic Forms</b>	Linear Function	$y = mx + b$
	Quadratic Function	$y = ax^2$
	Exponential Function	$y = ab^x$

**Example** Determine which model best describes the data. Then write an equation for the function that models the data.

<b>x</b>	0	1	2	3	4
<b>y</b>	3	6	12	24	48

**Step 1** Determine whether the data is modeled by a linear, quadratic, or exponential function.

First differences:  $3 \xrightarrow{+3} 6 \xrightarrow{+6} 12 \xrightarrow{+12} 24 \xrightarrow{+24} 48$

Second differences:  $3 \xrightarrow{+3} 6 \xrightarrow{+6} 12 \xrightarrow{+12} 24$

y-value ratios:  $3 \xrightarrow{\times 2} 6 \xrightarrow{\times 2} 12 \xrightarrow{\times 2} 24 \xrightarrow{\times 2} 48$

The ratios of successive y-values are equal. Therefore, the table of values can be modeled by an exponential function.

**Step 2** Write an equation for the function that models the data. The equation has the form  $y = ab^x$ . The y-value ratio is 2, so this is the value of the base.

$y = ab^x$  Equation for exponential function

$3 = a(2)^0$   $x = 0, y = 5,$  and  $b = 2$

$3 = a$  Simplify.

An equation that models the data is  $y = 3 \cdot 2^x$ . To check the results, you can verify that the other ordered pairs satisfy the function.

### Exercises

Look for a pattern in each table of values to determine which model best describes the data. Then write an equation for the function that models the data.

1. 

<b>x</b>	-2	-1	0	1	2
<b>y</b>	12	3	0	3	12

2. 

<b>x</b>	-1	0	1	2	3
<b>y</b>	-2	1	4	7	10

3. 

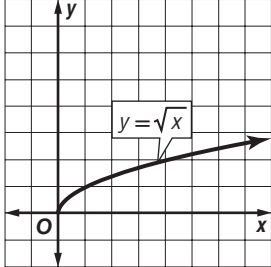
<b>x</b>	-1	0	1	2	3
<b>y</b>	0.75	3	12	48	192

# 10-1 Study Guide and Intervention

## Square Root Functions

**Dilations of Radical Functions** A **square root function** contains the square root of a variable. Square root functions are a type of **radical function**.

In order for a square root to be a real number, the **radicand**, or the expression under the radical sign, cannot be negative. Values that make the radicand negative are not included in the domain.

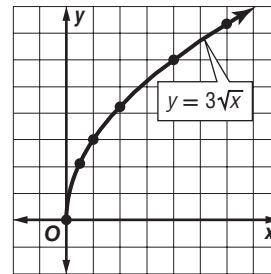
<b>Square Root Function</b>	Parent function: $f(x) = \sqrt{x}$ Type of graph: curve Domain: $\{x   x \geq 0\}$ Range: $\{y   y \geq 0\}$	
-----------------------------	---	---

**Example** Graph  $y = 3\sqrt{x}$ . State the domain and range.

**Step 1** Make a table. Choose nonnegative values for  $x$ .

$x$	$y$
0	0
0.5	$\approx 2.12$
1	3
2	$\approx 4.24$
4	6
6	$\approx 7.35$

**Step 2** Plot points and draw a smooth curve.

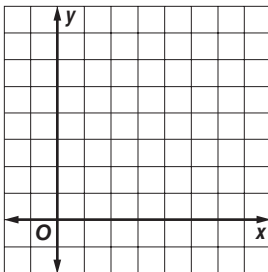


The domain is  $\{x | x \geq 0\}$  and the range is  $\{y | y \geq 0\}$ .

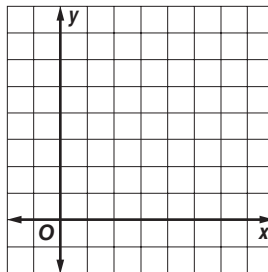
### Exercises

Graph each function, and compare to the parent graph. State the domain and range.

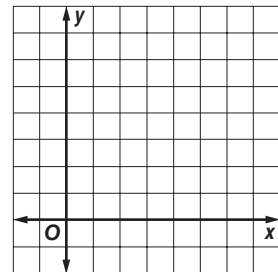
1.  $y = \frac{3}{2}\sqrt{x}$



2.  $y = 4\sqrt{x}$



3.  $y = \frac{5}{2}\sqrt{x}$



# 10-1 Study Guide and Intervention *(continued)*

## Square Root Functions

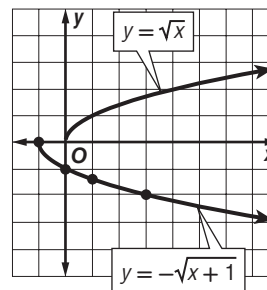
**Reflections and Translations of Radical Functions** Radical functions, like quadratic functions, can be translated horizontally and vertically, as well as reflected across the  $x$ -axis. To draw the graph of  $y = a\sqrt{x + h}$ , follow these steps.

<b>Graphs of Square Root Functions</b>	<p><b>Step 1</b> Draw the graph of <math>y = +c\sqrt{x}</math>. The graph starts at the origin and passes through the point at <math>(1, a)</math>. If <math>a &gt; 0</math>, the graph is in the 1st quadrant. If <math>a &lt; 0</math>, the graph is reflected across the <math>x</math>-axis and is in the 4th quadrant.</p> <p><b>Step 2</b> Translate the graph <math> c </math> units up if <math>c</math> is positive and down if <math>c</math> is negative.</p> <p><b>Step 3</b> Translate the graph <math> h </math> units left if <math>h</math> is positive and right if <math>h</math> is negative.</p>
--	--

**Example** Graph  $y = -\sqrt{x + 1}$  and compare to the parent graph. State the domain and range.

**Step 1** Make a table of values.

$x$	-1	0	1	3	8
$y$	0	-1	-1.41	-2	-3

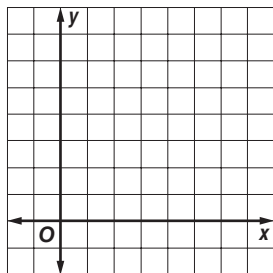


**Step 2** This is a horizontal translation 1 unit to the left of the parent function and reflected across the  $x$ -axis. The domain is  $\{x|x \geq -1\}$  and the range is  $\{y|y \leq 0\}$ .

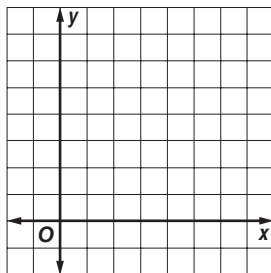
### Exercises

Graph each function, and compare to the parent graph. State the domain and range.

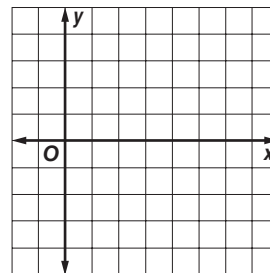
1.  $y = \sqrt{x} + 3$



2.  $y = \sqrt{x - 1}$



3.  $y = -\sqrt{x - 1}$





# 10-2 Study Guide and Intervention

## Simplifying Radical Expressions

**Product Property of Square Roots** The **Product Property of Square Roots** and prime factorization can be used to simplify expressions involving irrational square roots. When you simplify radical expressions with variables, use absolute value to ensure nonnegative results.

<b>Product Property of Square Roots</b>	For any numbers $a$ and $b$ , where $a \geq 0$ and $b \geq 0$ , $\sqrt{ab} = \sqrt{a} \cdot \sqrt{b}$ .
---	---

### Example 1 Simplify $\sqrt{180}$ .

$$\begin{aligned} \sqrt{180} &= \sqrt{2 \cdot 2 \cdot 3 \cdot 3 \cdot 5} && \text{Prime factorization of 180} \\ &= \sqrt{2^2} \cdot \sqrt{3^2} \cdot \sqrt{5} && \text{Product Property of Square Roots} \\ &= 2 \cdot 3 \cdot \sqrt{5} && \text{Simplify.} \\ &= 6\sqrt{5} && \text{Simplify.} \end{aligned}$$

### Example 2 Simplify $\sqrt{120a^2 \cdot b^5 \cdot c^4}$ .

$$\begin{aligned} &\sqrt{120a^2 \cdot b^5 \cdot c^4} \\ &= \sqrt{2^3 \cdot 3 \cdot 5 \cdot a^2 \cdot b^5 \cdot c^4} \\ &= \sqrt{2^2} \cdot \sqrt{2} \cdot \sqrt{3} \cdot \sqrt{5} \cdot \sqrt{a^2} \cdot \sqrt{b^4 \cdot b} \cdot \sqrt{c^4} \\ &= 2 \cdot \sqrt{2} \cdot \sqrt{3} \cdot \sqrt{5} \cdot |a| \cdot b^2 \cdot \sqrt{b} \cdot c^2 \\ &= 2|a|b^2c^2\sqrt{30b} \end{aligned}$$

## Exercises

Simplify each expression.

1.  $\sqrt{28}$

2.  $\sqrt{68}$

3.  $\sqrt{60}$

4.  $\sqrt{75}$

5.  $\sqrt{162}$

6.  $\sqrt{3} \cdot \sqrt{6}$

7.  $\sqrt{2} \cdot \sqrt{5}$

8.  $\sqrt{5} \cdot \sqrt{10}$

9.  $\sqrt{4a^2}$

10.  $\sqrt{9x^4}$

11.  $\sqrt{300a^4}$

12.  $\sqrt{128c^6}$

13.  $4\sqrt{10} \cdot 3\sqrt{6}$

14.  $\sqrt{3x^2} \cdot 3\sqrt{3x^4}$

15.  $\sqrt{20a^2b^4}$

16.  $\sqrt{100x^3y}$

17.  $\sqrt{24a^4b^2}$

18.  $\sqrt{81x^4y^2}$

19.  $\sqrt{150a^2b^2c}$

20.  $\sqrt{72a^6b^3c^2}$

21.  $\sqrt{45x^2y^5z^8}$

22.  $\sqrt{98x^4y^6z^2}$

**10-2 Study Guide and Intervention** *(continued)***Simplifying Radical Expressions**

**Quotient Property of Square Roots** A fraction containing radicals is in simplest form if no radicals are left in the denominator. The **Quotient Property of Square Roots** and **rationalizing the denominator** can be used to simplify radical expressions that involve division. When you rationalize the denominator, you multiply the numerator and denominator by a radical expression that gives a rational number in the denominator.

**Quotient Property of Square Roots**For any numbers  $a$  and  $b$ , where  $a \geq 0$  and  $b > 0$ ,  $\sqrt{\frac{a}{b}} = \frac{\sqrt{a}}{\sqrt{b}}$ .**Example**Simplify  $\sqrt{\frac{56}{45}}$ .

$$\begin{aligned}\sqrt{\frac{56}{45}} &= \sqrt{\frac{4 \cdot 14}{9 \cdot 5}} \\ &= \frac{2 \cdot \sqrt{14}}{3 \cdot \sqrt{15}} \\ &= \frac{2\sqrt{14}}{3\sqrt{5}} \cdot \frac{\sqrt{5}}{\sqrt{5}} \\ &= \frac{2\sqrt{70}}{15}\end{aligned}$$

Simplify the numerator and denominator.

Multiply by  $\frac{\sqrt{5}}{\sqrt{5}}$  to rationalize the denominator.

Product Property of Square Roots

**Exercises**

Simplify each expression.

1.  $\frac{\sqrt{9}}{\sqrt{18}}$

2.  $\frac{\sqrt{8}}{\sqrt{24}}$

3.  $\frac{\sqrt{100}}{\sqrt{121}}$

4.  $\frac{\sqrt{75}}{\sqrt{3}}$

5.  $\frac{8\sqrt{2}}{2\sqrt{8}}$

6.  $\sqrt{\frac{2}{5}} \cdot \sqrt{\frac{6}{5}}$

7.  $\sqrt{\frac{3}{4}} \cdot \sqrt{\frac{5}{2}}$

8.  $\sqrt{\frac{5}{7}} \cdot \sqrt{\frac{2}{5}}$

9.  $\sqrt{\frac{3a^2}{10b^6}}$

10.  $\sqrt{\frac{x^6}{y^4}}$

11.  $\sqrt{\frac{100a^4}{144b^8}}$

12.  $\sqrt{\frac{75b^3c^6}{a^2}}$

13.  $\frac{\sqrt{4}}{3 - \sqrt{5}}$

14.  $\frac{\sqrt{8}}{2 + \sqrt{3}}$

15.  $\frac{\sqrt{5}}{5 + \sqrt{5}}$

16.  $\frac{\sqrt{8}}{2\sqrt{7} + 4\sqrt{10}}$

**10-3 Study Guide and Intervention****Operations with Radical Expressions**

**Add or Subtract Radical Expressions** When adding or subtracting radical expressions, use the Associative and Distributive Properties to simplify the expressions. If radical expressions are not in simplest form, simplify them.

**Example 1** Simplify  $10\sqrt{6} - 5\sqrt{3} + 6\sqrt{3} - 4\sqrt{6}$ .

$$\begin{aligned} 10\sqrt{6} - 5\sqrt{3} + 6\sqrt{3} - 4\sqrt{6} &= (10 - 4)\sqrt{6} + (-5 + 6)\sqrt{3} && \text{Associative and Distributive Properties} \\ &= 6\sqrt{6} + \sqrt{3} && \text{Simplify.} \end{aligned}$$

**Example 2** Simplify  $3\sqrt{12} + 5\sqrt{75}$ .

$$\begin{aligned} 3\sqrt{12} + 5\sqrt{75} &= 3\sqrt{2^2 \cdot 3} + 5\sqrt{5^2 \cdot 3} && \text{Simplify.} \\ &= 3 \cdot 2\sqrt{3} + 5 \cdot 5\sqrt{3} && \text{Simplify.} \\ &= 6\sqrt{3} + 25\sqrt{3} && \text{Simplify.} \\ &= 31\sqrt{3} && \text{Distributive Property} \end{aligned}$$

**Exercises**

Simplify each expression.

1.  $2\sqrt{5} + 4\sqrt{5}$

2.  $\sqrt{6} - 4\sqrt{6}$

3.  $\sqrt{8} - \sqrt{2}$

4.  $3\sqrt{75} + 2\sqrt{5}$

5.  $\sqrt{20} + 2\sqrt{5} - 3\sqrt{5}$

6.  $2\sqrt{3} + \sqrt{6} - 5\sqrt{3}$

7.  $\sqrt{12} + 2\sqrt{3} - 5\sqrt{3}$

8.  $3\sqrt{6} + 3\sqrt{2} - \sqrt{50} + \sqrt{24}$

9.  $\sqrt{8a} - \sqrt{2a} + 5\sqrt{2a}$

10.  $\sqrt{54} + \sqrt{24}$

11.  $\sqrt{3} + \sqrt{\frac{1}{3}}$

12.  $\sqrt{12} + \sqrt{\frac{1}{3}}$

13.  $\sqrt{54} - \sqrt{\frac{1}{6}}$

14.  $\sqrt{80} - \sqrt{20} + \sqrt{180}$

15.  $\sqrt{50} + \sqrt{18} - \sqrt{75} + \sqrt{27}$

16.  $2\sqrt{3} - 4\sqrt{45} + 2\sqrt{\frac{1}{3}}$

17.  $\sqrt{125} - 2\sqrt{\frac{1}{5}} + \sqrt{\frac{1}{3}}$

18.  $\sqrt{\frac{2}{3}} + 3\sqrt{3} - 4\sqrt{\frac{1}{12}}$

**10-3 Study Guide and Intervention** *(continued)***Operations with Radical Expressions**

**Multiply Radical Expressions** Multiplying two radical expressions with different radicands is similar to multiplying binomials.

**Example** Multiply  $(3\sqrt{2} - 2\sqrt{5})(4\sqrt{20} + \sqrt{8})$ .

Use the FOIL method.

$$\begin{aligned} (3\sqrt{2} - 2\sqrt{5})(4\sqrt{20} + \sqrt{8}) &= (3\sqrt{2})(4\sqrt{20}) + (3\sqrt{2})(\sqrt{8}) + (-2\sqrt{5})(4\sqrt{20}) + (-2\sqrt{5})(\sqrt{8}) \\ &= 12\sqrt{40} + 3\sqrt{16} - 8\sqrt{100} - 2\sqrt{40} && \text{Multiply.} \\ &= 12\sqrt{2^2 \cdot 10} + 3 \cdot 4 - 8 \cdot 10 - 2\sqrt{2^2 \cdot 10} && \text{Simplify.} \\ &= 24\sqrt{10} + 12 - 80 - 4\sqrt{10} && \text{Simplify.} \\ &= 20\sqrt{10} - 68 && \text{Combine like terms.} \end{aligned}$$

**Exercises**

Simplify each expression.

1.  $2(\sqrt{3} + 4\sqrt{5})$

2.  $\sqrt{6}(\sqrt{3} - 2\sqrt{6})$

3.  $\sqrt{5}(\sqrt{5} - \sqrt{2})$

4.  $\sqrt{2}(3\sqrt{7} + 2\sqrt{5})$

5.  $(2 - 4\sqrt{2})(2 + 4\sqrt{2})$

6.  $(3 + \sqrt{6})^2$

7.  $(2 - 2\sqrt{5})^2$

8.  $3\sqrt{2}(\sqrt{8} + \sqrt{24})$

9.  $\sqrt{8}(\sqrt{2} + 5\sqrt{8})$

10.  $(\sqrt{5} - 3\sqrt{2})(\sqrt{5} + 3\sqrt{2})$

11.  $(\sqrt{3} + \sqrt{6})^2$

12.  $(\sqrt{2} - 2\sqrt{3})^2$

13.  $(\sqrt{5} - \sqrt{2})(\sqrt{2} + \sqrt{6})$

14.  $(\sqrt{8} - \sqrt{2})(\sqrt{3} + \sqrt{6})$

15.  $(\sqrt{5} - \sqrt{18})(7\sqrt{5} + \sqrt{3})$

16.  $(2\sqrt{3} - \sqrt{45})(\sqrt{12} + 2\sqrt{6})$

17.  $(2\sqrt{5} - 2\sqrt{3})(\sqrt{10} + \sqrt{6})$

18.  $(\sqrt{2} + 3\sqrt{3})(\sqrt{12} - 4\sqrt{8})$

# 10-4 Study Guide and Intervention

## Radical Equations

**Radical Equations** Equations containing radicals with variables in the radicand are called **radical equations**. These can be solved by first using the following steps.

**Step 1** Isolate the radical on one side of the equation.

**Step 2** Square each side of the equation to eliminate the radical.

**Example 1** Solve  $16 = \frac{\sqrt{x}}{2}$  for  $x$ .

$$16 = \frac{\sqrt{x}}{2} \quad \text{Original equation}$$

$$2(16) = 2\left(\frac{\sqrt{x}}{2}\right) \quad \text{Multiply each side by 2.}$$

$$32 = \sqrt{x} \quad \text{Simplify.}$$

$$(32)^2 = (\sqrt{x})^2 \quad \text{Square each side.}$$

$$1024 = x \quad \text{Simplify.}$$

The solution is 1024, which checks in the original equation.

**Example 2** Solve  $\sqrt{4x - 7} + 2 = 7$ .

$$\sqrt{4x - 7} + 2 = 7 \quad \text{Original equation}$$

$$\sqrt{4x - 7} + 2 - 2 = 7 - 2 \quad \text{Subtract 2 from each side.}$$

$$\sqrt{4x - 7} = 5 \quad \text{Simplify.}$$

$$(\sqrt{4x - 7})^2 = 5^2 \quad \text{Square each side.}$$

$$4x - 7 = 25 \quad \text{Simplify.}$$

$$4x - 7 + 7 = 25 + 7 \quad \text{Add 7 to each side.}$$

$$4x = 32 \quad \text{Simplify.}$$

$$x = 8 \quad \text{Divide each side by 4.}$$

The solution is 8, which checks in the original equation.

## Exercises

Solve each equation. Check your solution.

1.  $\sqrt{a} = 8$

2.  $\sqrt{a} + 6 = 32$

3.  $2\sqrt{x} = 8$

4.  $7 = \sqrt{26 - n}$

5.  $\sqrt{-a} = 6$

6.  $\sqrt{3r^2} = 3$

7.  $2\sqrt{3} = \sqrt{y}$

8.  $2\sqrt{3a} - 2 = 7$

9.  $\sqrt{x - 4} = 6$

10.  $\sqrt{2m + 3} = 5$

11.  $\sqrt{3b - 2} + 19 = 24$

12.  $\sqrt{4x - 1} = 3$

13.  $\sqrt{3r + 2} = 2\sqrt{3}$

14.  $\sqrt{\frac{x}{2}} = \frac{1}{2}$

15.  $\sqrt{\frac{x}{8}} = 4$

16.  $\sqrt{6x^2 + 5x} = 2$

17.  $\sqrt{\frac{x}{3}} + 6 = 8$

18.  $2\sqrt{\frac{3x}{5}} + 3 = 11$

**10-4 Study Guide and Intervention** *(continued)***Radical Equations**

**Extraneous Solutions** To solve a radical equation with a variable on both sides, you need to square each side of the equation. Squaring each side of an equation sometimes produces **extraneous solutions**, or solutions that are not solutions of the original equation. Therefore, it is very important that you check each solution.

**Example 1** Solve  $\sqrt{x + 3} = x - 3$ .

$\sqrt{x + 3} = x - 3$	Original equation
$(\sqrt{x + 3})^2 = (x - 3)^2$	Square each side.
$x + 3 = x^2 - 6x + 9$	Simplify.
$0 = x^2 - 7x + 6$	Subtract $x$ and 3 from each side.
$0 = (x - 1)(x - 6)$	Factor.
$x - 1 = 0$ or $x - 6 = 0$	Zero Product Property
$x = 1$ $x = 6$	Solve.

<b>CHECK</b> $\sqrt{x + 3} = x - 3$	$\sqrt{x + 3} = x - 3$
$\sqrt{1 + 3} \stackrel{?}{=} 1 - 3$	$\sqrt{6 + 3} \stackrel{?}{=} 6 - 3$
$\sqrt{4} \stackrel{?}{=} -2$	$\sqrt{9} \stackrel{?}{=} 3$
$2 \neq -2$	$3 = 3 \checkmark$

Since  $x = 1$  does not satisfy the original equation,  $x = 6$  is the only solution.

**Exercises**

Solve each equation. Check your solution.

1.  $\sqrt{a} = a$

2.  $\sqrt{a + 6} = a$

3.  $2\sqrt{x} = x$

4.  $n = \sqrt{2 - n}$

5.  $\sqrt{-a} = a$

6.  $\sqrt{10 - 6k} + 3 = k$

7.  $\sqrt{y - 1} = y - 1$

8.  $\sqrt{3a - 2} = a$

9.  $\sqrt{x + 2} = x$

10.  $\sqrt{2b + 5} = b - 5$

11.  $\sqrt{3b + 6} = b + 2$

12.  $\sqrt{4x - 4} = x$

13.  $r + \sqrt{2 - r} = 2$

14.  $\sqrt{x^2 + 10x} = x + 4$

15.  $-2\sqrt{\frac{x}{8}} = 15$

16.  $\sqrt{6x^2 - 4x} = x + 2$

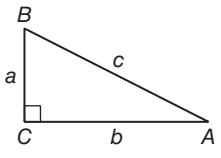
17.  $\sqrt{2y^2 - 64} = y$

18.  $\sqrt{3x^2 + 12x + 1} = x + 5$

# 10-5 Study Guide and Intervention

## The Pythagorean Theorem

**The Pythagorean Theorem** The side opposite the right angle in a right triangle is called the **hypotenuse**. This side is always the longest side of a right triangle. The other two sides are called the **legs** of the triangle. To find the length of any side of a right triangle, given the lengths of the other two sides, you can use the **Pythagorean Theorem**.

<b>Pythagorean Theorem</b>	If $a$ and $b$ are the measures of the legs of a right triangle and $c$ is the measure of the hypotenuse, then $c^2 = a^2 + b^2$ .	
----------------------------	--	---

### Example

**Find the length of the missing side.**

$$c^2 = a^2 + b^2$$

Pythagorean Theorem

$$c^2 = 5^2 + 12^2$$

$a = 5$  and  $b = 12$

$$c^2 = 169$$

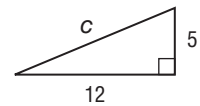
Simplify.

$$c = \sqrt{169}$$

Take the square root of each side.

$$c = 13$$

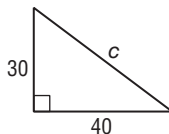
The length of the hypotenuse is 13.



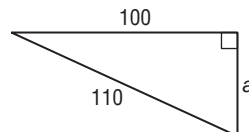
### Exercises

**Find the length of each missing side. If necessary, round to the nearest hundredth.**

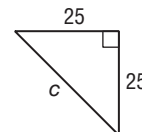
1.



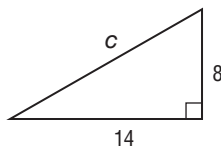
2.



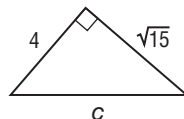
3.



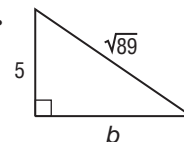
4.



5.



6.



**10-5 Study Guide and Intervention** *(continued)***The Pythagorean Theorem**

**Right Triangles** If  $a$  and  $b$  are the measures of the shorter sides of a triangle,  $c$  is the measure of the longest side, and  $c^2 = a^2 + b^2$ , then the triangle is a right triangle.

**Example** Determine whether the following side measures form right triangles.

**a. 10, 12, 14**

Since the measure of the longest side is 14, let  $c = 14$ ,  $a = 10$ , and  $b = 12$ .

$$c^2 = a^2 + b^2 \quad \text{Pythagorean Theorem}$$

$$14^2 \stackrel{?}{=} 10^2 + 12^2 \quad a = 10, b = 12, c = 14$$

$$196 \stackrel{?}{=} 100 + 144 \quad \text{Multiply.}$$

$$196 \neq 244 \quad \text{Add.}$$

Since  $c^2 \neq a^2 + b^2$ , the triangle is not a right triangle.

**b. 7, 24, 25**

Since the measure of the longest side is 25, let  $c = 25$ ,  $a = 7$ , and  $b = 24$ .

$$c^2 = a^2 + b^2 \quad \text{Pythagorean Theorem}$$

$$25^2 \stackrel{?}{=} 7^2 + 24^2 \quad a = 7, b = 24, c = 25$$

$$625 \stackrel{?}{=} 49 + 576 \quad \text{Multiply.}$$

$$625 = 625 \quad \text{Add.}$$

Since  $c^2 = a^2 + b^2$ , the triangle is a right triangle.

**Exercises**

Determine whether each set of measures can be sides of a right triangle. Then determine whether they form a Pythagorean triple.

1. 14, 48, 50

2. 6, 8, 10

3. 8, 8, 10

4. 90, 120, 150

5. 15, 20, 25

6. 4, 8,  $4\sqrt{5}$

7. 2, 2,  $\sqrt{8}$

8. 4, 4,  $\sqrt{20}$

9. 25, 30, 35

10. 24, 36, 48

11. 18, 80, 82

12. 150, 200, 250

13. 100, 200, 300

14. 500, 1200, 1300

15. 700, 1000, 1300



# 10-6 Study Guide and Intervention

## The Distance and Midpoint Formulas

**Distance Formula** The Pythagorean Theorem can be used to derive the **Distance Formula** shown below. The Distance Formula can then be used to find the distance between any two points in the coordinate plane.

<b>Distance Formula</b>	The distance between any two points with coordinates $(x_1, y_1)$ and $(x_2, y_2)$ is given by $d = \sqrt{(x_2 - x_1)^2 + (y_2 - y_1)^2}$
-------------------------	---

**Example 1** Find the distance between the points at  $(-5, 2)$  and  $(4, 5)$ .

$$\begin{aligned}
 d &= \sqrt{(x_2 - x_1)^2 + (y_2 - y_1)^2} && \text{Distance Formula} \\
 &= \sqrt{(4 - (-5))^2 + (5 - 2)^2} && (x_1, y_1) = (-5, 2), (x_2, y_2) = (4, 5) \\
 &= \sqrt{9^2 + 3^2} && \text{Simplify.} \\
 &= \sqrt{81 + 9} && \text{Evaluate squares and simplify.} \\
 &= \sqrt{90}
 \end{aligned}$$

The distance is  $\sqrt{90}$ , or about 9.49 units.

**Example 2** Jill draws a line segment from point  $(1, 4)$  on her computer screen to point  $(98, 49)$ . How long is the segment?

$$\begin{aligned}
 d &= \sqrt{(x_2 - x_1)^2 + (y_2 - y_1)^2} \\
 &= \sqrt{(98 - 1)^2 + (49 - 4)^2} \\
 &= \sqrt{97^2 + 45^2} \\
 &= \sqrt{9409 + 2025} \\
 &= \sqrt{11,434}
 \end{aligned}$$

The segment is about 106.93 units long.

### Exercises

Find the distance between the points with the given coordinates.

- |                        |                      |                          |
|------------------------|----------------------|--------------------------|
| 1. $(1, 5), (3, 1)$    | 2. $(0, 0), (6, 8)$  | 3. $(-2, -8), (7, -3)$   |
| 4. $(6, -7), (-2, 8)$  | 5. $(1, 5), (-8, 4)$ | 6. $(3, -4), (-4, -4)$   |
| 7. $(-1, 4), (3, 2)$   | 8. $(0, 0), (-3, 5)$ | 9. $(2, -6), (-7, 1)$    |
| 10. $(-2, -5), (0, 8)$ | 11. $(3, 4), (0, 0)$ | 12. $(3, -4), (-4, -16)$ |

Find the possible values of  $a$  if the points with the given coordinates are the indicated distance apart.

- |                                     |                              |                                       |
|-------------------------------------|------------------------------|---------------------------------------|
| 13. $(1, a), (3, -2); d = \sqrt{5}$ | 14. $(0, 0), (a, 4); d = 5$  | 15. $(2, -1), (a, 3); d = 5$          |
| 16. $(1, -3), (a, 21); d = 25$      | 17. $(1, a), (-2, 4); d = 3$ | 18. $(3, -4), (-4, a); d = \sqrt{65}$ |

**10-6 Study Guide and Intervention** *(continued)***The Distance and Midpoint Formulas**

**Midpoint Formula** The point that is equidistance from both of the endpoints is called the **midpoint**. You can find the coordinates of the midpoint by using the Midpoint Formula.

<b>Midpoint Formula</b>	The midpoint $M$ of a line segment with endpoints at $(x_1, y_1)$ and $(x_2, y_2)$ is given by $M\left(\frac{x_1 + x_2}{2}, \frac{y_1 + y_2}{2}\right)$ .
-------------------------	---

**Example 1** Find the coordinates of the midpoint of the segment with endpoints at  $(-2, 5)$  and  $(4, 9)$ .

$$\begin{aligned}
 M\left(\frac{x_1 + x_2}{2}, \frac{y_1 + y_2}{2}\right) & \quad \text{Midpoint Formula} \\
 = M\left(\frac{-2 + 4}{2}, \frac{5 + 9}{2}\right) & \quad (x_1, y_1) = (-2, 5) \text{ and } (x_2, y_2) = (4, 9) \\
 = M\left(\frac{2}{2}, \frac{14}{2}\right) & \quad \text{Simplify the numerators.} \\
 = M(1, 3) & \quad \text{Simplify.}
 \end{aligned}$$

**Exercises**

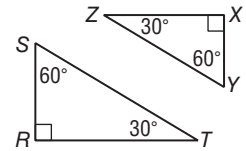
Find the coordinates of the midpoint of the segment with the given endpoints.

- |                         |                         |                        |
|-------------------------|-------------------------|------------------------|
| 1. $(1, 6), (3, 10)$    | 2. $(4, -2), (0, 6)$    | 3. $(7, 2), (13, -4)$  |
| 4. $(-1, 2), (1, 0)$    | 5. $(-3, -3), (5, -11)$ | 6. $(0, 8), (-6, 0)$   |
| 7. $(4, -3), (-2, 3)$   | 8. $(9, -1), (3, -7)$   | 9. $(2, -1), (8, 7)$   |
| 10. $(1, 4), (-3, 12)$  | 11. $(4, 0), (-2, 6)$   | 12. $(1, 9), (7, 1)$   |
| 13. $(12, 0), (2, -6)$  | 14. $(1, 1), (9, -9)$   | 15. $(4, 5), (-2, -1)$ |
| 16. $(1, -14), (-5, 0)$ | 17. $(2, 2), (6, 8)$    | 18. $(-7, 3), (5, -3)$ |

# 10-7 Study Guide and Intervention

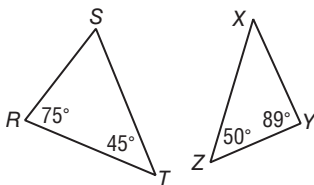
## Similar Triangles

**Similar Triangles**  $\triangle RST$  is **similar** to  $\triangle XYZ$ . The angles of the two triangles have equal measure. They are called **corresponding angles**. The sides opposite the corresponding angles are called **corresponding sides**.



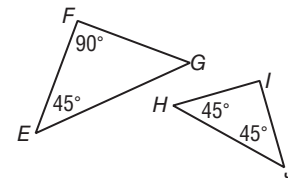
<b>Similar Triangles</b>	If two triangles are similar, then the measures of their corresponding sides are proportional and the measures of their corresponding angles are equal.	$\triangle ABC \sim \triangle DEF$ $\frac{AB}{DE} = \frac{BC}{EF} = \frac{AC}{DF}$	
--------------------------	---	--	--

**Example 1** Determine whether the pair of triangles is similar. Justify your answer.



Since corresponding angles do not have the equal measures, the triangles are not similar.

**Example 2** Determine whether the pair of triangles is similar. Justify your answer.

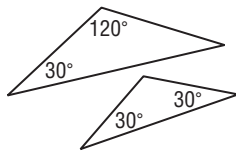


The measure of  $\angle G = 180^\circ - (90^\circ + 45^\circ) = 45^\circ$ .  
 The measure of  $\angle I = 180^\circ - (45^\circ + 45^\circ) = 90^\circ$ .  
 Since corresponding angles have equal measures,  $\triangle EFG \sim \triangle HIJ$ .

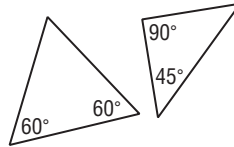
### Exercises

Determine whether each pair of triangles is similar. Justify your answer.

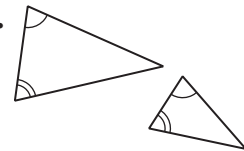
1.



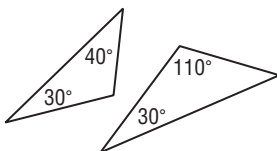
2.



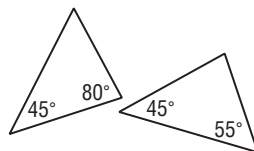
3.



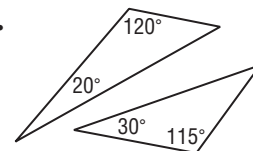
4.



5.



6.



# 10-7 Study Guide and Intervention *(continued)*

## Similar Triangles

**Find Unknown Measures** If some of the measurements are known, proportions can be used to find the measures of the other sides of similar triangles.

### Example INDIRECT MEASUREMENT

$\triangle ABC \sim \triangle AED$  in the figure at the right.  
Find the height of the apartment building.

Let  $BC = x$ .

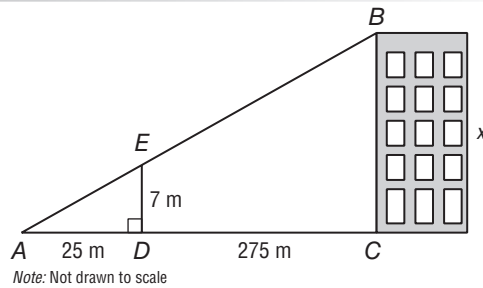
$$\frac{ED}{BC} = \frac{AD}{AC}$$

$$\frac{7}{x} = \frac{25}{300} \quad ED = 7, AD = 25, AC = 300$$

$$25x = 2100 \quad \text{Find the cross products.}$$

$$x = 84$$

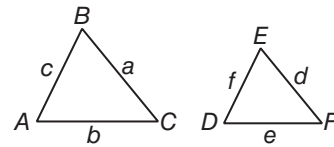
The apartment building is 84 meters high.



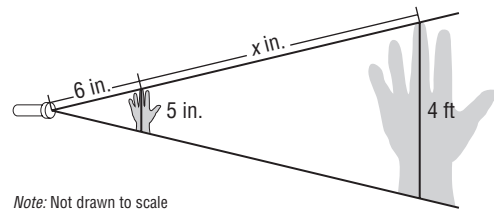
### Exercises

Find the missing measures for the pair of similar triangles if  $\triangle ABC \sim \triangle DEF$ .

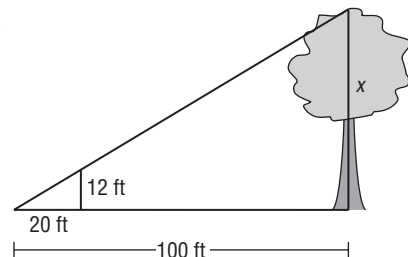
- $c = 15, d = 8, e = 6, f = 10$
- $c = 20, a = 12, b = 8, f = 15$
- $a = 8, d = 8, e = 6, f = 7$
- $a = 20, d = 10, e = 8, f = 10$
- $c = 5, d = 10, e = 8, f = 8$
- $a = 25, b = 20, c = 15, f = 12$
- $b = 8, d = 8, e = 4, f = 10$



**8. INDIRECT MEASUREMENT** Bruce likes to amuse his brother by shining a flashlight on his hand and making a shadow on the wall. How far is it from the flashlight to the wall?



**9. INDIRECT MEASUREMENT** A forest ranger uses similar triangles to find the height of a tree. Find the height of the tree.



# 10-8 Study Guide and Intervention

## Trigonometric Ratios

**Trigonometric Ratios** Trigonometry is the study of relationships of the angles and the sides of a right triangle. The three most common trigonometric ratios are the **sine**, **cosine**, and **tangent**.

$\text{sine of } \angle A = \frac{\text{leg opposite } \angle A}{\text{hypotenuse}}$ $\text{sine of } \angle B = \frac{\text{leg opposite } \angle B}{\text{hypotenuse}}$	$\sin A = \frac{a}{c}$ $\sin B = \frac{b}{c}$	
$\text{cosine of } \angle A = \frac{\text{leg adjacent to } \angle A}{\text{hypotenuse}}$ $\text{cosine of } \angle B = \frac{\text{leg adjacent to } \angle B}{\text{hypotenuse}}$	$\cos A = \frac{b}{c}$ $\cos B = \frac{a}{c}$	
$\text{tangent of } \angle A = \frac{\text{leg opposite } \angle A}{\text{leg adjacent to } \angle A}$ $\text{tangent of } \angle B = \frac{\text{leg opposite } \angle B}{\text{leg adjacent to } \angle B}$	$\tan A = \frac{a}{b}$ $\tan B = \frac{b}{a}$	

**Example** Find the values of the three trigonometric ratios for angle A.

**Step 1** Use the Pythagorean Theorem to find BC.

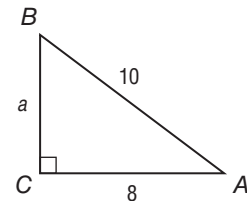
$$a^2 + b^2 = c^2 \quad \text{Pythagorean Theorem}$$

$$a^2 + 8^2 = 10^2 \quad b = 8 \text{ and } c = 10$$

$$a^2 + 64 = 100 \quad \text{Simplify.}$$

$$a^2 = 36 \quad \text{Subtract 64 from both sides.}$$

$$a = 6 \quad \text{Take the square root of each side.}$$

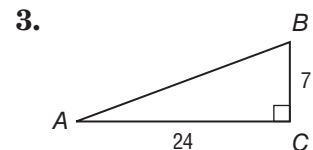
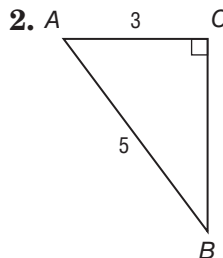
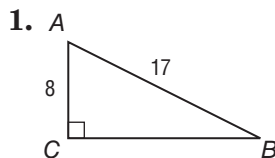


**Step 2** Use the side lengths to write the trigonometric ratios.

$$\sin A = \frac{\text{opp}}{\text{hyp}} = \frac{6}{10} = \frac{3}{5} \quad \cos A = \frac{\text{adj}}{\text{hyp}} = \frac{8}{10} = \frac{4}{5} \quad \tan A = \frac{\text{opp}}{\text{adj}} = \frac{6}{8} = \frac{3}{4}$$

### Exercises

Find the values of the three trigonometric ratios for angle A.



Use a calculator to find the value of each trigonometric ratio to the nearest ten-thousandth.

4.  $\sin 40^\circ$

5.  $\cos 25^\circ$

6.  $\tan 85^\circ$

# 10-8 Study Guide and Intervention *(continued)*

## Trigonometric Ratios

**Use Trigonometric Ratios** When you find all of the unknown measures of the sides and angles of a right triangle, you are **solving the triangle**. You can find the missing measures of a right triangle if you know the measure of two sides of the triangle, or the measure of one side and the measure of one acute angle.

**Example** Solve the triangle. Round each side length to the nearest tenth.

**Step 1** Find the measure of  $\angle B$ . The sum of the measures of the angles in a triangle is 180.

$$180^\circ - (90^\circ + 38^\circ) = 52^\circ$$

The measure of  $\angle B$  is  $52^\circ$ .

**Step 2** Find the measure of  $\overline{AB}$ . Because you are given the measure of the side adjacent to  $\angle A$  and are finding the measure of the hypotenuse, use the cosine ratio.

$$\cos 38^\circ = \frac{13}{c} \quad \text{Definition of cosine}$$

$$c \cos 38^\circ = 13 \quad \text{Multiply each side by } c.$$

$$c = \frac{13}{\cos 38^\circ} \quad \text{Divide each side by } \cos 38^\circ.$$

So the measure of  $\overline{AB}$  is about 16.5.

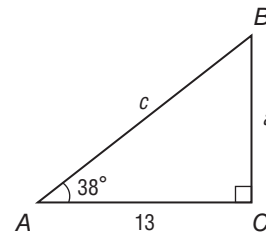
**Step 3** Find the measure of  $\overline{BC}$ . Because you are given the measure of the side adjacent to  $\angle A$  and are finding the measure of the side opposite  $\angle A$ , use the tangent ratio.

$$\tan 38^\circ = \frac{a}{13} \quad \text{Definition of tangent}$$

$$13 \tan 38^\circ = a \quad \text{Multiply each side by 13.}$$

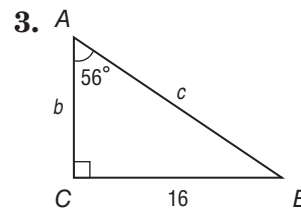
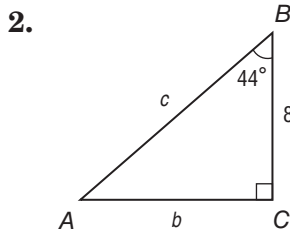
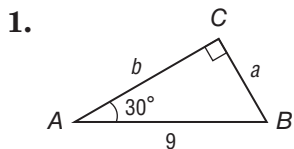
$$10.2 \approx a \quad \text{Use a calculator.}$$

So the measure of  $\overline{BC}$  is about 10.2.



## Exercises

Solve each right triangle. Round each side length to the nearest tenth.



# 11-1 Study Guide and Intervention

## Inverse Variation

**Identify and Use Inverse Variations** An **inverse variation** is an equation in the form of  $y = \frac{k}{x}$  or  $xy = k$ . If two points  $(x_1, y_1)$  and  $(x_2, y_2)$  are solutions of an inverse variation, then  $x_1 \cdot y_1 = k$  and  $x_2 \cdot y_2 = k$ .

<b>Product Rule <math>k</math> or Inverse Variation</b>	$x_1 \cdot y_1 = x_2 \cdot y_2$
---	---------------------------------

From the product rule, you can form the proportion  $\frac{x_1}{x_2} = \frac{y_1}{y_2}$ .

**Example** If  $y$  varies inversely as  $x$  and  $y = 12$  when  $x = 4$ , find  $x$  when  $y = 18$ .

**Method 1** Use the product rule.

$$\begin{aligned} x_1 \cdot y_1 &= x_2 \cdot y_2 && \text{Product rule for inverse variation} \\ 4 \cdot 12 &= x_2 \cdot 18 && x_1 = 4, y_1 = 12, y_2 = 18 \\ \frac{48}{18} &= x_2 && \text{Divide each side by 18.} \\ \frac{8}{3} &= x_2 && \text{Simplify.} \end{aligned}$$

**Method 2** Use a proportion.

$$\begin{aligned} \frac{x_1}{x_2} &= \frac{y_1}{y_2} && \text{Proportion for inverse variation} \\ \frac{4}{x_2} &= \frac{18}{12} && x_1 = 4, y_1 = 12, y_2 = 18 \\ 48 &= 18x_2 && \text{Cross multiply.} \\ \frac{8}{3} &= x_2 && \text{Simplify.} \end{aligned}$$

Both methods show that  $x_2 = \frac{8}{3}$  when  $y = 18$ .

### Exercises

Determine whether each table or equation represents an *inverse* or a *direct* variation. Explain.

1. 

x	y
3	6
5	10
8	16
12	24

2.  $y = 6x$

3.  $xy = 15$

Assume that  $y$  varies inversely as  $x$ . Write an inverse variation equation that relates  $x$  and  $y$ . Then solve.

4. If  $y = 10$  when  $x = 5$ ,  
find  $y$  when  $x = 2$ .

5. If  $y = 8$  when  $x = -2$ ,  
find  $y$  when  $x = 4$ .

6. If  $y = 100$  when  $x = 120$ ,  
find  $x$  when  $y = 20$ .

7. If  $y = -16$  when  $x = 4$ ,  
find  $x$  when  $y = 32$ .

8. If  $y = -7.5$  when  $x = 25$ , find  $y$  when  $x = 5$ .

9. **DRIVING** The Gerardi family can travel to Oshkosh, Wisconsin, from Chicago, Illinois, in 4 hours if they drive an average of 45 miles per hour. How long would it take them if they increased their average speed to 50 miles per hour?

10. **GEOMETRY** For a rectangle with given area, the width of the rectangle varies inversely as the length. If the width of the rectangle is 40 meters when the length is 5 meters, find the width of the rectangle when the length is 20 meters.

# 11-1 Study Guide and Intervention *(continued)*

## Inverse Variation

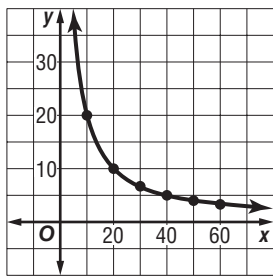
**Graph Inverse Variations** Situations in which the values of  $y$  decrease as the values of  $x$  increase are examples of **inverse variation**. We say that  $y$  varies inversely as  $x$ , or  $y$  is inversely proportional to  $x$ .

<b>Inverse Variation Equation</b>	an equation of the form $xy = k$ , where $k \neq 0$
-----------------------------------	---

**Example 1** Suppose you drive 200 miles without stopping. The time it takes to travel a distance varies inversely as the rate at which you travel. Let  $x =$  speed in miles per hour and  $y =$  time in hours. Graph the variation.

The equation  $xy = 200$  can be used to represent the situation. Use various speeds to make a table.

$x$	$y$
10	20
20	10
30	6.7
40	5
50	4
60	3.3



**Example 2** Graph an inverse variation in which  $y$  varies inversely as  $x$  and  $y = 3$  when  $x = 12$ .

Solve for  $k$ .

$$xy = k$$

$$12(3) = k$$

$$36 = k$$

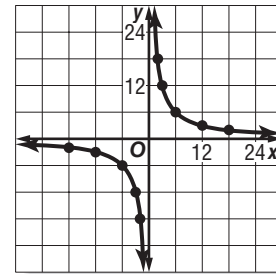
Inverse variation equation

$$x = 12 \text{ and } y = 3$$

Simplify.

Choose values for  $x$  and  $y$ , which have a product of 36.

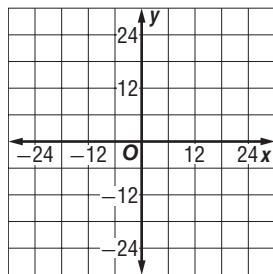
$x$	$y$
-6	-6
-3	-12
-2	-18
2	18
3	12
6	6



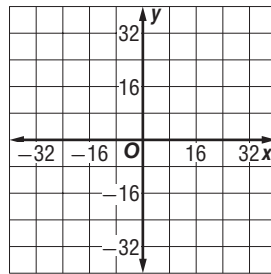
## Exercises

Graph each variation if  $y$  varies inversely as  $x$ .

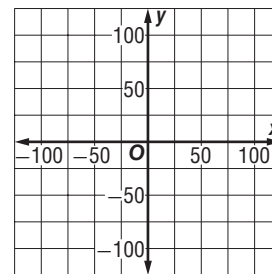
1.  $y = 9$  when  $x = -3$



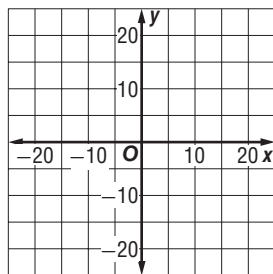
2.  $y = 12$  when  $x = 4$



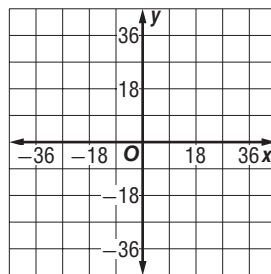
3.  $y = -25$  when  $x = 5$



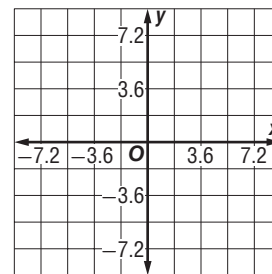
4.  $y = 4$  when  $x = 5$



5.  $y = -18$  when  $x = -9$



6.  $y = 4.8$  when  $x = 5.4$





# 11-2 Study Guide and Intervention

## Rational Functions

**Identify Excluded Values** The function  $y = \frac{10}{x}$  is an example of a **rational function**. Because division by zero is undefined, any value of a variable that results in a denominator of zero must be excluded from the domain of that variable. These are called **excluded values** of the rational function.

**Example** State the excluded value for each function.

**a.**  $y = \frac{3}{x}$   
 The denominator cannot equal zero.  
 The excluded value is  $x = 0$ .

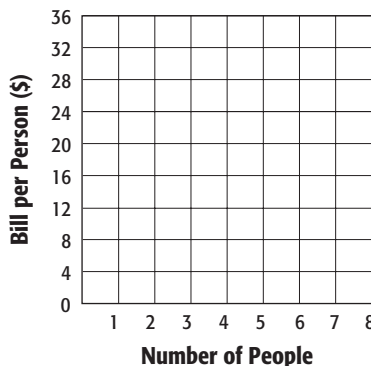
**b.**  $y = \frac{4}{x - 5}$   
 $x - 5 = 0$       Set the denominator equal to 0.  
 $x = 5$               Add 5 to each side.  
 The excluded value is  $x = 5$ .

### Exercises

State the excluded value for each function.

- |                                |                                |                                |
|--------------------------------|--------------------------------|--------------------------------|
| 1. $y = \frac{2}{x}$           | 2. $y = \frac{1}{x - 4}$       | 3. $y = \frac{x - 3}{x + 1}$   |
| 4. $y = \frac{4}{x - 2}$       | 5. $y = \frac{x}{2x - 4}$      | 6. $y = -\frac{5}{3x}$         |
| 7. $y = \frac{3x - 2}{x + 3}$  | 8. $y = \frac{x - 1}{5x + 10}$ | 9. $y = \frac{x + 1}{x}$       |
| 10. $y = \frac{x - 7}{2x + 8}$ | 11. $y = \frac{x - 5}{6x}$     | 12. $y = \frac{x - 2}{x + 11}$ |
| 13. $y = \frac{7}{3x + 21}$    | 14. $y = \frac{3x - 4}{x + 4}$ | 15. $y = \frac{x}{7x - 35}$    |

**16. DINING** Mya and her friends are eating at a restaurant. The total bill of \$36 is split among  $x$  friends. The amount each person pays  $y$  is given by  $y = \frac{36}{x}$ , where  $x$  is the number of people. Graph the function.



# 11-2 Study Guide and Intervention *(continued)*

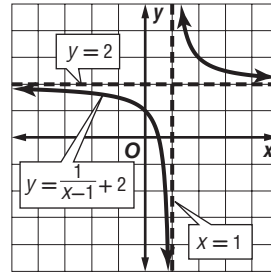
## Rational Functions

**Identify and Use Asymptotes** Because excluded values are undefined, they affect the graph of the function. An **asymptote** is a line that the graph of a function approaches.

A rational function in the form  $y = \frac{a}{x - b} + c$  has a vertical asymptote at the  $x$ -value that makes the denominator equal zero,  $x = b$ . It has a horizontal asymptote at  $y = c$ .

**Example** Identify the asymptotes of  $y = \frac{1}{x - 1} + 2$ . Then graph the function.

**Step 1** Identify and graph the asymptotes using dashed lines.  
 vertical asymptote:  $x = 1$   
 horizontal asymptote:  $y = 2$



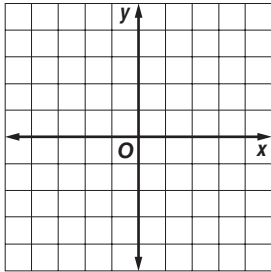
**Step 2** Make a table of values and plot the points.  
 Then connect them.

$x$	-1	0	2	3
$y$	1.5	1	3	2.5

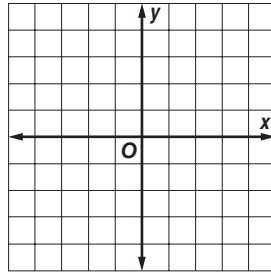
## Exercises

Identify the asymptotes of each function. Then graph the function.

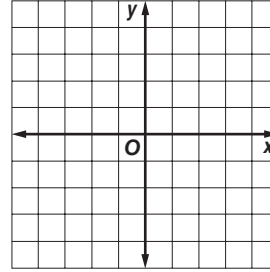
1.  $y = \frac{3}{x}$



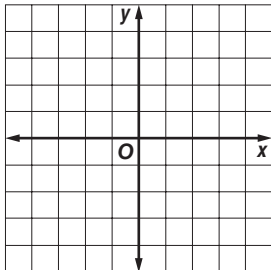
2.  $y = \frac{-2}{x}$



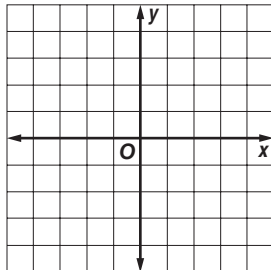
3.  $y = \frac{4}{x} + 1$



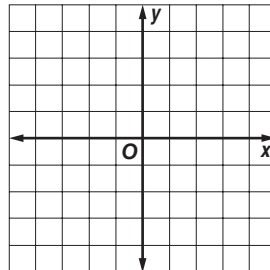
4.  $y = \frac{2}{x} - 3$



5.  $y = \frac{2}{x + 1}$



6.  $y = \frac{-2}{x - 3}$



**11-3 Study Guide and Intervention*****Simplifying Rational Expressions*****Identify Excluded Values**

<b>Rational Expression</b>	an algebraic fraction with numerator and denominator that are polynomials	<b>Example:</b> $\frac{x^2 + 1}{y^2}$
----------------------------	---	---------------------------------------

Because a rational expression involves division, the denominator cannot equal zero. Any value of the denominator that results in division by zero is called an **excluded value** of the denominator.

**Example 1** State the excluded value of  $\frac{4m - 8}{m + 2}$ .

Exclude the values for which  $m + 2 = 0$ .

$$m + 2 = 0 \quad \text{The denominator cannot equal 0.}$$

$$m + 2 - 2 = 0 - 2 \quad \text{Subtract 2 from each side.}$$

$$m = -2 \quad \text{Simplify.}$$

Therefore,  $m$  cannot equal  $-2$ .

**Example 2** State the excluded values of  $\frac{x^2 + 1}{x^2 - 9}$ .

Exclude the values for which  $x^2 - 9 = 0$ .

$$x^2 - 9 = 0 \quad \text{The denominator cannot equal 0.}$$

$$(x + 3)(x - 3) = 0 \quad \text{Factor.}$$

$$x + 3 = 0 \quad \text{or} \quad x - 3 = 0 \quad \text{Zero Product Property}$$

$$= -3 \qquad \qquad \qquad = 3$$

Therefore,  $x$  cannot equal  $-3$  or  $3$ .

**Exercises**

State the excluded values for each rational expression.

1.  $\frac{2b}{b^2 - 8}$

2.  $\frac{12 - a}{32 + a}$

3.  $\frac{x^2 - 2}{x^2 + 4}$

4.  $\frac{m^2 - 4}{2m^2 - 8}$

5.  $\frac{2n - 12}{n^2 - 4}$

6.  $\frac{2x + 18}{x^2 - 16}$

7.  $\frac{x^2 - 4}{x^2 + 4x + 4}$

8.  $\frac{a - 1}{a^2 + 5a + 6}$

9.  $\frac{k^2 - 2k + 1}{k^2 + 4k + 3}$

10.  $\frac{m^2 - 1}{2m^2 - m - 1}$

11.  $\frac{25 - n^2}{n^2 - 4n - 5}$

12.  $\frac{2x^2 + 5x + 1}{x^2 - 10x + 16}$

13.  $\frac{n^2 - 2n - 3}{n^2 + 4n - 5}$

14.  $\frac{y^2 - y - 2}{3y^2 - 12}$

15.  $\frac{k^2 + 2k - 3}{k^2 - 20k + 64}$

16.  $\frac{x^2 + 4x + 4}{4x^2 + 11x - 3}$

**11-3 Study Guide and Intervention** *(continued)***Simplifying Rational Expressions**

**Simplify Expressions** Factoring polynomials is a useful tool for simplifying rational expressions. To simplify a rational expression, first factor the numerator and denominator. Then divide each by the greatest common factor.

**Example 1** Simplify  $\frac{54z^3}{24yz}$ .

$$\begin{aligned} \frac{54z^3}{24yz} &= \frac{(6z)(9z^2)}{(6z)(4y)} && \text{The GCF of the numerator and the denominator is } 6z. \\ &= \frac{\cancel{6z}^1(9z^2)}{\cancel{6z}^1(4y)} && \text{Divide the numerator and denominator by } 6z. \\ &= \frac{9z^2}{4y} && \text{Simplify.} \end{aligned}$$

**Example 2** Simplify  $\frac{3x - 9}{x^2 - 5x + 6}$ . State the excluded values of  $x$ .

$$\begin{aligned} \frac{3x - 9}{x^2 - 5x + 6} &= \frac{3(x - 3)}{(x - 2)(x - 3)} && \text{Factor.} \\ &= \frac{3\cancel{(x - 3)}^1}{(x - 2)\cancel{(x - 3)}_1} && \text{Divide by the GCF, } x - 3. \\ &= \frac{3}{x - 2} && \text{Simplify.} \end{aligned}$$

Exclude the values for which  $x^2 - 5x + 6 = 0$ .

$$x^2 - 5x + 6 = 0$$

$$(x - 2)(x - 3) = 0$$

$$x = 2 \quad \text{or} \quad x = 3$$

Therefore,  $x \neq 2$  and  $x \neq 3$ .

**Exercises**

Simplify each expression. State the excluded values of the variables.

1.  $\frac{12ab}{a^2b^2}$

2.  $\frac{7n^3}{21n^8}$

3.  $\frac{x + 2}{x^2 - 4}$

4.  $\frac{m^2 - 4}{m^2 + 6m + 8}$

5.  $\frac{2n - 8}{n^2 - 16}$

6.  $\frac{x^2 + 2x + 1}{x^2 - 1}$

7.  $\frac{x^2 - 4}{x^2 + 4x + 4}$

8.  $\frac{a^2 + 3a + 2}{a^2 + 5a + 6}$

9.  $\frac{k^2 - 1}{k^2 + 4k + 3}$

10.  $\frac{m^2 - 2m + 1}{2m^2 - m - 1}$

11.  $\frac{n^2 - 25}{n^2 - 4n - 5}$

12.  $\frac{x^2 + x - 6}{2x^2 - 8}$

13.  $\frac{n^2 + 7n + 12}{n^2 + 2n - 8}$

14.  $\frac{y^2 - y - 2}{y^2 - 10y + 16}$

# 11-4 Study Guide and Intervention

## Multiplying and Dividing Rational Expressions

**Multiply Rational Expressions** To multiply rational expressions, you multiply the numerators and multiply the denominators. Then simplify.

**Example 1** Find  $\frac{2c^2f}{5ab^2} \cdot \frac{a^2b}{3cf}$ .

$$\begin{aligned} \frac{2c^2f}{5ab^2} \cdot \frac{a^2b}{3cf} &= \frac{2a^2bc^2f}{15ab^2cf} && \text{Multiply.} \\ &= \frac{\overset{1}{(abc)}(2ac)}{\overset{1}{(abc)}(15b)} && \text{Simplify.} \\ &= \frac{2ac}{15b} && \text{Simplify.} \end{aligned}$$

**Example 2** Find  $\frac{x^2 - 16}{2x + 8} \cdot \frac{x + 4}{x^2 + 8x + 16}$ .

$$\begin{aligned} \frac{x^2 - 16}{2x + 8} \cdot \frac{x + 4}{x^2 + 8x + 16} &= \frac{(x - 4)(x + 4)}{2(x + 4)} \cdot \frac{x + 4}{(x + 4)(x + 4)} && \text{Factor.} \\ &= \frac{(x - 4)\cancel{(x + 4)}^1}{\cancel{2(x + 4)}_1} \cdot \frac{\cancel{x + 4}^1}{(x + 4)\cancel{(x + 4)}_1} && \text{Simplify.} \\ &= \frac{x - 4}{2x + 8} && \text{Multiply.} \end{aligned}$$

### Exercises

Find each product.

- $\frac{6ab}{a^2b^2} \cdot \frac{a^2}{b^2}$
- $\frac{mp^2}{3} \cdot \frac{4}{mp}$
- $\frac{x + 2}{x - 4} \cdot \frac{x - 4}{x - 1}$
- $\frac{m - 5}{8} \cdot \frac{16}{m - 5}$
- $\frac{2n - 8}{n + 2} \cdot \frac{2n + 4}{n - 4}$
- $\frac{x^2 - 64}{2x + 16} \cdot \frac{x + 8}{x^2 + 16x + 64}$
- $\frac{8x + 8}{x^2 - 2x + 1} \cdot \frac{x - 1}{2x + 2}$
- $\frac{a^2 - 25}{a + 2} \cdot \frac{a^2 - 4}{a - 5}$
- $\frac{x^2 + 6x + 8}{2x^2 + 9x + 4} \cdot \frac{2x^2 - x - 1}{x^2 - 3x + 2}$
- $\frac{m^2 - 1}{2m^2 - m - 1} \cdot \frac{2m + 1}{m^2 - 2m + 1}$
- $\frac{n^2 - 1}{n^2 - 7n + 10} \cdot \frac{n^2 - 25}{n^2 + 6n + 5}$
- $\frac{3p - 3r}{10pr} \cdot \frac{20p^2r^2}{p^2 - r^2}$
- $\frac{a^2 + 7a + 12}{a^2 + 2a - 8} \cdot \frac{a^2 + 3a - 10}{a^2 + 2a - 8}$
- $\frac{v^2 - 4v - 21}{3v^2 + 6v} \cdot \frac{v^2 + 8v}{v^2 + 11v + 24}$

# 11-4 Study Guide and Intervention *(continued)*

## Multiplying and Dividing Rational Expressions

**Divide Rational Expressions** To divide rational expressions, multiply by the reciprocal of the divisor. Then simplify.

**Example 1** Find  $\frac{12c^2f}{5a^2b^2} \div \frac{c^2f^2}{10ab}$ .

$$\begin{aligned} \frac{12c^2f}{5a^2b^2} \div \frac{c^2f^2}{10ab} &= \frac{12c^2f}{5a^2b^2} \times \frac{10ab}{c^2f^2} \\ &= \frac{12^1 c^2 f^1}{5^1 a^2 b^2} \times \frac{2^1 10^1 a b^1}{1^1 c^2 f^2} \\ &= \frac{24}{abf} \end{aligned}$$

**Example 2** Find  $\frac{x^2 + 6x - 27}{x^2 + 11x + 18} \div \frac{x - 3}{x^2 + x - 2}$ .

$$\begin{aligned} \frac{x^2 + 6x - 27}{x^2 + 11x + 18} \div \frac{x - 3}{x^2 + x - 2} &= \frac{x^2 + 6x - 27}{x^2 + 11x + 18} \times \frac{x^2 + x - 2}{x - 3} \\ &= \frac{(x + 9)(x - 3)}{(x + 9)(x + 2)} \times \frac{(x + 2)(x - 1)}{x - 3} \\ &= \frac{\cancel{1}(x + 9)\cancel{(x - 3)}^1}{\cancel{1}(x + 9)(x + 2)} \times \frac{\cancel{1}(x + 2)(x - 1)}{\cancel{x - 3}^1} \\ &= x - 1 \end{aligned}$$

### Exercises

Find each quotient.

- $\frac{12ab}{a^2b^2} \div \frac{b}{a}$
- $\frac{n}{4} \div \frac{n}{p}$
- $\frac{3xy^2}{8} \div 6xy$
- $\frac{m - 5}{8} \div \frac{m - 5}{16}$
- $\frac{2n - 4}{2n} \div \frac{n^2 - 4}{n}$
- $\frac{y^2 - 36}{y^2 - 49} \div \frac{y + 6}{y + 7}$
- $\frac{x^2 - 5x + 6}{5} \div \frac{x - 3}{15}$
- $\frac{a^2b^3c}{3r^2t} \div \frac{6a^2bc}{8rt^2u}$
- $\frac{x^2 + 6x + 8}{x^2 + 4x + 4} \div \frac{x + 4}{x + 2}$
- $\frac{m^2 - 49}{m} \div \frac{m^2 - 13m + 42}{3m^2}$
- $\frac{n^2 - 5n + 6}{n^2 + 3n} \div \frac{3 - n}{4n + 12}$
- $\frac{p^2 - 2pr + r^2}{p + r} \div \frac{p^2 - r^2}{p + r}$
- $\frac{a^2 + 7a + 12}{a^2 + 3a - 10} \div \frac{a^2 - 9}{a^2 - 25}$
- $\frac{a^2 - 9}{2a^2 + 13a - 7} \div \frac{a + 3}{4a^2 - 1}$

# 11-5 Study Guide and Intervention

## Dividing Polynomials

**Divide Polynomials by Monomials** To divide a polynomial by a monomial, divide each term of the polynomial by the monomial.

**Example 1** Find  $(4r^2 - 12r) \div (2r)$ .

$$\begin{aligned} (4r^2 - 12r) \div 2r &= \frac{4r^2 - 12r}{2r} \\ &= \frac{4r^2}{2r} - \frac{12r}{2r} && \text{Divide each term.} \\ &= \frac{\cancel{2}^1 \cancel{4}^2 r^{\cancel{2}^1}}{\cancel{2}^1 r} - \frac{\cancel{12}^6 r^{\cancel{1}^1}}{\cancel{2}^1 r} && \text{Simplify.} \\ &= 2r - 6 && \text{Simplify.} \end{aligned}$$

**Example 2** Find  $(3x^2 - 8x + 4) \div (4x)$ .

$$\begin{aligned} (3x^2 - 8x + 4) \div 4x &= \frac{3x^2 - 8x + 4}{4x} \\ &= \frac{3x^2}{4x} - \frac{8x}{4x} + \frac{4}{4x} \\ &= \frac{\cancel{3}^3 x^{\cancel{2}^1}}{\cancel{4}^4 x} - \frac{\cancel{8}^4 x^{\cancel{1}^1}}{\cancel{4}^4 x} + \frac{4}{4x} \\ &= \frac{3x}{4} - 2 + \frac{1}{x} \end{aligned}$$

### Exercises

Find each quotient.

1.  $(x^3 + 2x^2 - x) \div x$

2.  $(2x^3 + 12x^2 - 8x) \div (2x)$

3.  $(x^2 + 3x - 4) \div x$

4.  $(4m^2 + 6m - 8) \div (2m^2)$

5.  $(3x^3 + 15x^2 - 21x) \div (3x)$

6.  $(8m^2p^2 + 4mp - 8p) \div p$

7.  $(8y^4 + 16y^2 - 4) \div (4y^2)$

8.  $(16x^4y^2 + 24xy + 5) \div (xy)$

9.  $\frac{15x^2 - 25x + 30}{5}$

10.  $\frac{10a^2b + 12ab - 8b}{2a}$

11.  $\frac{6x^3 + 9x^2 + 9}{3x}$

12.  $\frac{m^2 - 12m + 42}{3m^2}$

13.  $\frac{m^2p^2 - 5mp + 6}{m^2p^2}$

14.  $\frac{p^2 - 4pr + 6r^2}{pr}$

15.  $\frac{6a^2b^2 - 8ab + 12}{2a^2}$

16.  $\frac{2x^2y^3 - 4x^2y^2 - 8xy}{2a^2b^2}$

17.  $\frac{9x^2y^2z - 2xyz + 12x}{xy}$

18.  $\frac{2a^3b^3 + 8a^2b^2 - 10ab + 12}{2a^2b^2}$

**11-5 Study Guide and Intervention** *(continued)***Dividing Polynomials**

**Divide Polynomials by Binomials** To divide a polynomial by a binomial, factor the dividend if possible and divide both dividend and divisor by the GCF. If the polynomial cannot be factored, use long division.

**Example** Find  $(x^2 + 7x + 10) \div (x + 3)$ .

**Step 1** Divide the first term of the dividend,  $x^2$  by the first term of the divisor,  $x$ .

$$\begin{array}{r} x \\ x + 3 \overline{)x^2 + 7x + 10} \\ \underline{(-) x^2 + 3x} \phantom{0} \\ 4x \phantom{0} \end{array}$$

Multiply  $x$  and  $x + 3$ .

Subtract.

**Step 2** Bring down the next term, 10. Divide the first term of  $4x + 10$  by  $x$ .

$$\begin{array}{r} x + 4 \\ x + 3 \overline{)x^2 + 7x + 10} \\ \underline{x^2 + 3x} \phantom{0} \\ 4x + 10 \\ \underline{(-) 4x + 12} \\ -2 \end{array}$$

Multiply 4 and  $x + 3$ .

Subtract.

The quotient is  $x + 4$  with remainder  $-2$ . The quotient can be written as  $x + 4 + \frac{-2}{x + 3}$ .

**Exercises**

Find each quotient.

1.  $(b^2 - 5b + 6) \div (b - 2)$

2.  $(x^2 - x - 6) \div (x - 3)$

3.  $(x^2 + 3x - 4) \div (x - 1)$

4.  $(m^2 + 2m - 8) \div (m + 4)$

5.  $(x^2 + 5x + 6) \div (x + 2)$

6.  $(m^2 + 4m + 4) \div (m + 2)$

7.  $(2y^2 + 5y + 2) \div (y + 2)$

8.  $(8y^2 - 15y - 2) \div (y - 2)$

9.  $\frac{8x^2 - 6x - 9}{4x + 3}$

10.  $\frac{m^2 - 5m - 6}{m - 6}$

11.  $\frac{x^3 + 1}{x - 2}$

12.  $\frac{6m^3 + 11m^2 + 4m + 35}{2m + 5}$

13.  $\frac{6a^2 + 7a + 5}{2a + 5}$

14.  $\frac{8p^3 + 27}{2p + 3}$



# 11-6 Study Guide and Intervention

## Adding and Subtracting Rational Expressions

**Add and Subtract Rational Expressions with Like Denominators** To add rational expressions with like denominators, add the numerators and then write the sum over the common denominator. To subtract fractions with like denominators, subtract the numerators. If possible, simplify the resulting rational expression.

**Example 1** Find  $\frac{5n}{15} + \frac{7n}{15}$ .

$$\begin{aligned} \frac{5n}{15} + \frac{7n}{15} &= \frac{5n + 7n}{15} && \text{Add the numerators.} \\ &= \frac{12n}{5} && \text{Simplify.} \\ &= \frac{\cancel{12}n}{\cancel{15}^3} && \text{Divide by 3.} \\ &= \frac{4n}{5} && \text{Simplify.} \end{aligned}$$

**Example 2** Find  $\frac{3x + 2}{x - 2} - \frac{4x}{x - 2}$ .

$$\begin{aligned} \frac{3x + 2}{x - 2} - \frac{4x}{x - 2} &= \frac{3x + 2 - 4x}{x - 2} && \text{The common denominator is } x - 2. \\ &= \frac{2 - x}{x - 2} && \text{Subtract.} \\ &= \frac{-1(x - 2)}{x - 2} && 2 - x = -1(x - 2) \\ &= \frac{\cancel{-1}(\cancel{x - 2})^1}{\cancel{x - 2}^1} && \\ &= \frac{-1}{1} && \text{Simplify.} \\ &= -1 \end{aligned}$$

### Exercises

Find each sum or difference.

1.  $\frac{3}{a} + \frac{4}{a}$

2.  $\frac{x^2}{8} + \frac{x}{8}$

3.  $\frac{5x}{9} - \frac{x}{9}$

4.  $\frac{11x}{15y} - \frac{x}{15y}$

5.  $\frac{2a - 4}{a - 4} + \frac{-a}{a - 4}$

6.  $\frac{m + 1}{2m - 1} + \frac{3m - 3}{2m - 1}$

7.  $\frac{y + 7}{y + 6} - \frac{1}{y + 6}$

8.  $\frac{3y + 5}{5} - \frac{2y}{5}$

9.  $\frac{x + 1}{x - 2} + \frac{x - 5}{x - 2}$

10.  $\frac{5a}{3b^2} + \frac{10a}{3b^2}$

11.  $\frac{x^2 + x}{x} - \frac{x^2 + 5x}{x}$

12.  $\frac{5a + 2}{a^2} - \frac{4a + 2}{a^2}$

13.  $\frac{3x + 2}{x + 2} + \frac{x + 6}{x + 2}$

14.  $\frac{a - 4}{a + 1} + \frac{a + 6}{a + 1}$

# 11-6 Study Guide and Intervention *(continued)*

## Adding and Subtracting Rational Expressions

**Add and Subtract Rational Expressions with Unlike Denominators** Adding or subtracting rational expressions with unlike denominators is similar to adding and subtracting fractions with unlike denominators.

<b>Adding and Subtracting Rational Expressions</b>	<p>Step 1 Find the LCD of the expressions.</p> <p>Step 2 Change each expression into an equivalent expression with the LCD as the denominator.</p> <p>Step 3 Add or subtract just as with expressions with like denominators.</p> <p>Step 4 Simplify if necessary.</p>
--	--

**Example 1** Find  $\frac{n+3}{n} + \frac{8n-4}{4n}$ .

Factor each denominator.

$$n = n$$

$$4n = 4 \cdot n$$

LCD =  $4n$

Since the denominator of  $\frac{8n-4}{4n}$  is already  $4n$ , only  $\frac{n+3}{n}$  needs to be renamed.

$$\frac{n+3}{n} + \frac{8n-4}{4n} = \frac{4(n+3)}{4n} + \frac{8n-4}{4n}$$

$$= \frac{4n+12}{4n} + \frac{8n-4}{4n}$$

$$= \frac{12n+8}{4n}$$

$$= \frac{3n+2}{n}$$

**Example 2** Find  $\frac{3x}{x^2-4x} - \frac{1}{x-4}$ .

$$\frac{3x}{x^2-4x} - \frac{1}{x-4} = \frac{3x}{x(x-4)} - \frac{1}{x-4}$$

Factor the denominator.

$$= \frac{3x}{x(x-4)} - \frac{1}{x-4} \cdot \frac{x}{x}$$

The LCD is  $x(x-4)$ .

$$= \frac{3x}{x(x-4)} - \frac{x}{x(x-4)}$$

$1 \cdot x = x$

$$= \frac{2x}{x(x-4)}$$

Subtract numerators.

$$= \frac{2}{x-4}$$

Simplify.

### Exercises

Find each sum or difference.

1.  $\frac{1}{a} + \frac{7}{3a}$
2.  $\frac{1}{6x} + \frac{3}{8}$
3.  $\frac{5}{9x} - \frac{1}{x^2}$
4.  $\frac{6}{x^2} - \frac{3}{x^3}$
5.  $\frac{8}{4a^2} + \frac{6}{3a}$
6.  $\frac{4}{h+1} + \frac{2}{h+2}$
7.  $\frac{y}{y-3} - \frac{3}{y+3}$
8.  $\frac{y}{y-7} - \frac{y+3}{y^2-4y-21}$
9.  $\frac{a}{a+4} + \frac{4}{a-4}$
10.  $\frac{6}{3(m+1)} + \frac{2}{3(m-1)}$
11.  $\frac{4}{x-2y} - \frac{2}{x+2y}$
12.  $\frac{a-6b}{2a^2-5ab+2b^2} - \frac{7}{a-2b}$
13.  $\frac{y+2}{y^2+5y+6} + \frac{2-y}{y^2+y-6}$
14.  $\frac{q}{q^2-16} + \frac{q+1}{q^2+5q+4}$

**11-7 Study Guide and Intervention****Mixed Expressions and Complex Fractions**

**Simplify Mixed Expressions** Algebraic expressions such as  $a + \frac{b}{c}$  and  $5 + \frac{x+y}{x+3}$  are called **mixed expressions**. Changing mixed expressions to rational expressions is similar to changing mixed numbers to improper fractions.

**Example 1** Simplify  $5 + \frac{2}{n}$ .

$$5 + \frac{2}{n} = \frac{5 \cdot n}{n} + \frac{2}{n} \quad \text{LCD is } n.$$

$$= \frac{5n + 2}{n} \quad \text{Add the numerators.}$$

$$\text{Therefore, } 5 + \frac{2}{n} = \frac{5n + 2}{n}.$$

**Example 2** Simplify  $2 + \frac{3}{n+3}$ .

$$2 + \frac{3}{n+3} = \frac{2(n+3)}{n+3} + \frac{3}{n+3}$$

$$= \frac{2n+6}{n+3} + \frac{3}{n+3}$$

$$= \frac{2n+6+3}{n+3}$$

$$= \frac{2n+9}{n+3}$$

$$\text{Therefore, } 2 + \frac{3}{n+3} = \frac{2n+9}{n+3}.$$

**Exercises**

Write each mixed expression as a rational expression.

1.  $4 + \frac{6}{a}$

2.  $\frac{1}{9x} - 3$

3.  $3x - \frac{1}{x^2}$

4.  $\frac{4}{x^2} - 2$

5.  $10 + \frac{60}{x+5}$

6.  $\frac{h}{h+4} + 2$

7.  $\frac{y}{y-2} + y^2$

8.  $4 - \frac{4}{2x+1}$

9.  $1 + \frac{1}{x}$

10.  $\frac{4}{m-2} - 2m$

11.  $x^2 + \frac{x+2}{x-3}$

12.  $a - 3 + \frac{a-2}{a+3}$

13.  $4m + \frac{3p}{2t}$

14.  $2q^2 + \frac{q}{p+q}$

15.  $\frac{2}{y^2-1} - 4y^2$

16.  $t^2 + \frac{p+t}{p-t}$

# 11-7 Study Guide and Intervention *(continued)*

## Mixed Expressions and Complex Fractions

**Simplify Complex Fractions** If a fraction has one or more fractions in the numerator or denominator, it is called a **complex fraction**.

<b>Simplifying a Complex Fraction</b>	Any complex fraction $\frac{\frac{a}{b}}{\frac{c}{d}}$ where $b \neq 0$ , $c \neq 0$ , and $d \neq 0$ , can be expressed as $\frac{ad}{bc}$ .
---------------------------------------	---

**Example** Simplify  $\frac{2 + \frac{4}{a}}{\frac{a+2}{3}}$ .

$$\frac{2 + \frac{4}{a}}{\frac{a+2}{3}} = \frac{\frac{2a}{a} + \frac{4}{a}}{\frac{a+2}{3}}$$

Find the LCD for the numerator and rewrite as like fractions.

$$= \frac{\frac{2a+4}{a}}{\frac{a+2}{3}}$$

Simplify the numerator.

$$= \frac{2a+4}{a} \cdot \frac{3}{a+2}$$

Rewrite as the product of the numerator and the reciprocal of the denominator.

$$= \frac{2(a+2)}{a} \cdot \frac{3}{a+2}$$

Factor.

$$= \frac{6}{a}$$

Divide and simplify.

### Exercises

Simplify each expression.

1.  $\frac{2\frac{2}{5}}{3\frac{3}{4}}$

2.  $\frac{\frac{3}{x}}{\frac{4}{y}}$

3.  $\frac{\frac{x}{y^3}}{\frac{x^3}{y^2}}$

4.  $\frac{1 - \frac{1}{x}}{1 + \frac{1}{x}}$

5.  $\frac{1 - \frac{1}{x}}{1 - \frac{1}{x^2}}$

6.  $\frac{\frac{1}{x-3}}{\frac{2}{x^2-9}}$

7.  $\frac{\frac{x^2-25}{y}}{x^3-5x^2}$

8.  $\frac{\frac{x-12}{x-1}}{\frac{x-8}{x-2}}$

9.  $\frac{\frac{3}{y+2} - \frac{2}{y-2}}{\frac{1}{y+2} - \frac{2}{y-2}}$

# 11-8 Study Guide and Intervention

## Rational Functions and Equations

**Solve Rational Equations** Rational equations are equations that contain rational expressions. To solve equations containing rational expressions, multiply each side of the equation by the least common denominator.

Rational equations can be used to solve **work problems** and **rate problems**.

**Example 1** Solve  $\frac{x-3}{3} + \frac{x}{2} = 4$ .

$$\frac{x-3}{3} + \frac{x}{2} = 4$$

$$6\left(\frac{x-3}{3} + \frac{x}{2}\right) = 6(4) \quad \text{The LCD is 6.}$$

$$2(x-3) + 3x = 24 \quad \text{Distributive Property}$$

$$2x - 6 + 3x = 24 \quad \text{Distributive Property}$$

$$5x = 30 \quad \text{Simplify.}$$

$$x = 6 \quad \text{Divide each side by 5.}$$

The solution is 6.

**Example 2** Solve  $\frac{15}{x^2-1} = \frac{5}{2(x-1)}$ . State any extraneous solutions.

$$\frac{15}{x^2-1} = \frac{5}{2(x-1)} \quad \text{Original equation}$$

$$30(x-1) = 5(x^2-1) \quad \text{Cross multiply.}$$

$$30x - 30 = 5x^2 - 5 \quad \text{Distributive Property}$$

$$0 = 5x^2 - 30x + 30 - 5 \quad \text{Add } -30x + 30 \text{ to each side.}$$

$$0 = 5x^2 - 30x + 25 \quad \text{Simplify.}$$

$$0 = 5(x^2 - 6x + 5) \quad \text{Factor.}$$

$$0 = 5(x-1)(x-5) \quad \text{Factor.}$$

$$x = 1 \quad \text{or} \quad x = 5 \quad \text{Zero Product Property}$$

The number 1 is an extraneous solution, since 1 is an excluded value for  $x$ . So, 5 is the solution of the equation.

### Exercises

Solve each equation. State any extraneous solutions.

1.  $\frac{x-5}{5} + \frac{x}{4} = 8$

2.  $\frac{3}{x} = \frac{6}{x+1}$

3.  $\frac{x-1}{5} = \frac{2x-2}{15}$

4.  $\frac{8}{n-1} = \frac{10}{n+1}$

5.  $t - \frac{4}{t+3} = t + 3$

6.  $\frac{m+4}{m} + \frac{m}{3} = \frac{m}{3}$

7.  $\frac{q+4}{q-1} + \frac{q}{q+1} = 2$

8.  $\frac{5-2x}{2} - \frac{4x+3}{6} = \frac{7x+2}{6}$

9.  $\frac{m+1}{m-1} - \frac{m}{1-m} = 1$

10.  $\frac{x^2-9}{x-3} + x^2 = 9$

11.  $\frac{2}{x^2-36} - \frac{1}{x-6} = 0$

12.  $\frac{4z}{z^2+4z+3} = \frac{6}{z+3} + \frac{4}{z+1}$

13.  $\frac{4}{4-p} - \frac{p^2}{p-4} = 4$

14.  $\frac{x^2-16}{x-4} + x^2 = 16$

**11-8 Study Guide and Intervention** *(continued)***Functions and Rational Equations**

**Use Rational Equations to Solve Problems** Rational equation can be used to solve **work problems** and **rate problems**.

**Example**

**WORK PROBLEM** Marla can paint Percy's kitchen in 3 hours. Percy can paint it in 2 hours. Working together, how long will it take Marla and Percy to paint the kitchen?

In  $t$  hours, Marla completes  $t \cdot \frac{1}{3}$  of the job and Percy completes  $t \cdot \frac{1}{2}$  of the job. So an equation for completing the whole job is  $\frac{t}{3} + \frac{t}{2} = 1$ .

$$\frac{t}{3} + \frac{t}{2} = 1$$

$$2t + 3t = 6 \quad \text{Multiply each term by 6.}$$

$$5t = 6 \quad \text{Add like terms.}$$

$$t = \frac{6}{5} \quad \text{Solve.}$$

So it will take Marla and Percy  $1\frac{1}{5}$  hours to paint the room if they work together.

**Exercises**

- 1. GREETING CARDS** It takes Kenesha 45 minutes to prepare 20 greeting cards. It takes Paula 30 minutes to prepare the same number of cards. Working together at this rate, how long will it take them to prepare the cards?
- 2. BOATING** A motorboat went upstream at 15 miles per hour and returned downstream at 20 miles per hour. How far did the boat travel one way if the round trip took 3.5 hours?
- 3. FLOORING** Maya and Reginald are installing hardwood flooring. Maya can install flooring in a room in 4 hours. Reginald can install flooring in a room in 3 hours. How long would it take them if they worked together?
- 4. BICYCLING** Stefan is bicycling on a bike trail at an average of 10 miles per hour. Erik starts bicycling on the same trail 30 minutes later. If Erik averages 16 miles per hour, how long will it take him to pass Stefan?

# 12-1 Study Guide and Intervention

## Designing a Survey

**Design a Survey** A **biased sample** is one in which one or more parts of the population is favored over the other. Random samples are unbiased because each unit is selected without favoritism.

Biased samples include **convenience samples** in which members of the population are included because they are the most convenient to choose. A **voluntary response** sample is another type of biased sample that includes only those members of the population who choose to participate in the sampling.

### Example

**SCHOOL** The principal of a high school wanted to know if students in the school liked the attendance policy. He decided to survey the students in the third-hour study hall about whether they like the attendance policy. Fewer than one fourth of the students in the school have a study hall.

**a. Identify the sample and suggest a population from which it is chosen.**

The sample includes only those students in the third-hour study hall. The population is the entire student body.

**b. Classify the sample as *convenience* or *voluntary response*.**

This sample is a convenience sample because it is convenient to sample students in a study hall during a certain period of the day.

## Exercises

**Identify each sample, suggest a population from which it was selected. Then classify the sample as *convenience* or *voluntary response*.**

- 1. SCHOOL** The high school administration wanted to evaluate how homecoming week was conducted at the school. Each female member of the Student Council at the high school was asked if she liked homecoming activities.
- 2. MANUFACTURING** A clothing company wanted to check quality control of all its products. The plant manager decided to look at every fourth item inspected by Inspector X. There are 10 inspectors in the plant.
- 3. SCHOOL** The counselors of a high school sent out a survey to senior students with questions about their plans for college. Some students did not plan to attend college. 40% of the seniors sent responses back.
- 4. BUSINESS** A marketing group was asked to compile data on the effectiveness of advertisements for household products across the country. The group chose to conduct surveys at shopping malls. Every person walking by a survey taker in a shopping mall was asked if he/she would participate in a survey about household products.

**12-1 Study Guide and Intervention** *(continued)***Designing a Survey**

**Sampling Techniques** Suppose you want to survey students about their choice of radio stations. All students make up the **population** you want to survey. A **sample** is some portion of the larger group that you select to represent the entire group. A **census** would include all students within the population. A **random sample** of a population is selected so that it is representative of the entire population.

<b>Simple Random Sample</b>	a sample that is as likely to be chosen as another from a population
<b>Stratified Random Sample</b>	A population is first divided into similar, nonoverlapping groups. A simple random sample is then chosen from each group.
<b>Systematic Random Sample</b>	Items are selected according to a specified time or interval.

**Example 1 SCHOOL** Ten students are chosen randomly from each high school class to be on an advisory committee with the principal.

- a. Identify the sample and suggest a population from which it was chosen.

The sample is 4 groups of 10 students each from the freshmen, sophomore, junior, and senior classes. The population is the entire student body of the school.

- b. Classify the sample as *simple*, *stratified*, or *systematic*.

This is a stratified random sample because the population was first divided into nonoverlapping groups and then a random sample was chosen from each group.

**Example 2 DOOR PRIZES** Each of the participants in a conference was given a numbered name tag. Twenty-five numbers were chosen at random to receive a door prize.

- a. Identify the sample and suggest a population from which it was chosen.

The sample was 25 participants of the conference. The population was all of the participants of the conference.

- b. Classify the sample as *simple*, *stratified*, or *systematic*.

Since the numbers were chosen randomly, this is a simple random sample because each participant was equally likely to be chosen.

**Exercises**

Identify each sample, suggest a population from which it was selected. Then classify the sample as *simple*, *stratified*, or *systematic*. Explain your reasoning.

- SCHOOL** Each student in a class of 25 students was given a number at the beginning of the year. Periodically, the teacher chooses 4 numbers at random to display their homework on a projector.
- GARDENING** A gardener divided a lot into 25-square-foot sections. He then took 2 soil samples from each and tested the samples for mineral content.
- SCHOOL** One hundred students in the lunch room are chosen for a survey. All students in the school eat lunch at the same time.
- SHOPPING** Every tenth person leaving a grocery store was asked if they would participate in a community survey.



# 12-2 Study Guide and Intervention

## Analyzing Survey Results

**Summarize Survey Results** To make survey data more useful, it can be summarized according to measures of central tendency: **mean**, **median**, and **mode**.

Type	Description	Most Useful When
mean	the sum of the data divided by the number of items in the data set	The data sets have no outliers.
median	the middle number of the ordered data, or the mean of the middle two numbers	The data sets have no outliers, but there are no big gaps in the middle of the data.
mode	the number or numbers that occur the most often	The data set has many repeated numbers.

### Example

**Which measure of central tendency best represents the data?**

**Justify your answer. Then find the measure.**

- a. RESTAURANTS** A restaurant records the number of people who order soup at lunch each day: {26, 25, 30, 32, 27, 28}.

List the values from least to greatest: 25, 26, 27, 28, 30, 32. The data set does not have any outliers, and does not have any repeated numbers. The mean would best represent the data.

$$\frac{25 + 26 + 27 + 28 + 30 + 32}{6} = 28$$

The mean of the data is 28.

- b. SOCCER** A soccer team keeps a record of the number of points it scores in each game: {2, 3, 2, 1, 4, 3, 1, 3, 3, 4}.

List the values from least to greatest: 1, 1, 2, 2, 3, 3, 3, 3, 4, 4. The data set has four sets of repeated numbers. The mode best represents the data.

The mode is 3, the number that occurs the most often.

## Exercises

**Which measure of central tendency best represents the data? Justify your answer. Then find the measure.**

- DEFECTS** A furniture manufacturer keeps records of how many units are defective each day: {7, 12, 9, 8, 10, 14, 8}.
- SCIENCE TESTS** Mr. Wharton records his students' scores on the last science test: {94, 88, 88, 94, 94, 84, 94, 88, 84, 94}.
- PUPPIES** A veterinarian keeps records of the weights of puppies in ounces: {4.1, 3.8, 5.0, 4.6, 5.6, 4.7, 11.6}.
- COMMUTING** The local newspaper conducted a telephone survey of commuters to see how they get to work each day. The responses were: commuter rail, 22; bus, 17; subway, 18; walking, 15; car, 224.

**12-2 Study Guide and Intervention** *(continued)***Analyzing Survey Results**

**Evaluate Survey Results** After a survey's data has been summarized and a report of the findings and conclusions has been made, it is important to be able to judge the reliability of the report. You can do this by verifying that the sample is truly random, that the sample is large enough to be an accurate representative of the population, and that the source of the data is a reliable one. Also check graphs accompanying surveys for misleading results.

**Example** **MUSIC** Given the following portion of a survey report, evaluate the validity of the information and conclusion.

**Question:** What is your favorite band?

**Sample:** 100 concertgoers were randomly selected.

**Conclusion:** America's favorite band is October Hope.

Results	
Choice	Response
October Hope	40%
Rayne	20%
Weimar Republic	10%
Larry Blodgett Trio	30%

**Source:** October Hope Fan Club

The report says that concertgoers were chosen randomly, but there is no guarantee that a group of concertgoers is representative of America as a whole. In addition, a sample size of 100 may be too small to draw a conclusion from.

Also, the report's source is the "October Hope Fan Club," which may be biased, considering that the report cites October Hope as America's favorite band.

**Exercises**

**Given the following portion of a survey report, evaluate the validity of the information and conclusion.**

- 1. SCHOOL UNIFORMS** Survey USA polled 500 randomly selected adults in Cincinnati, Ohio, by telephone.

**Question:** Should public school students wear uniforms?

**Results:** should, 58%; should not, 36%; not sure, 6%

**Conclusion:** Adults in Cincinnati believe students should wear uniforms to school.

- 2. ELECTIONS** State Representative Beck commissioned a poll of 400 randomly selected adults visiting a mall in her district.

**Question:** Do you approve of the job State Representative Beck is doing?

**Results:** yes, 44%; no, 32%; undecided, 24%

**Conclusion:** Senator Beck will win re-election.

# 12-3 Study Guide and Intervention

## Statistics and Parameters

**Statistics and Parameters** A **statistic** is a quantity calculated from a sample. A **parameter** is a characteristic of the population of a whole. Statistics can change from sample to sample while parameters do not.

**Example** Identify the sample and the population for each situation. Then describe the sample statistic and the population parameter.

- a. **At a local supermarket, a random sample of 50 shoppers is selected. The median amount spent at the supermarket is calculated for the sample.**

Sample: the group of 50 shoppers

Population: all shoppers at the supermarket

Sample statistic: median amount spent of customers in the sample

Population parameter: median amount spent at the supermarket

- b. **Every 20 minutes at a furniture factory, a finished sofa is pulled from the assembly line and checked for defects. The mean number of defective sofas of a day's sample is then calculated.**

Sample: the sofas checked for defects

Population: all sofas manufactured

Sample statistic: mean number of defective sofas in the sample

Population parameter: mean number of defective sofas manufactured

## Exercises

Identify the sample and the population for each situation. Then describe the sample statistic and the population parameter.

- 1. WEATHER** A meteorologist places ten weather stations in a county to measure rainfall. The median annual rainfall is calculated for the sample.
- 2. BOTANY** A scientist randomly selects 20 trees in a forest. The mean height of the 20 trees is then calculated.
- 3. POLITICS** A political reporter randomly selects 25 congressional districts across the country. The mean number of votes cast in the 25 congressional districts is calculated.

**12-3 Study Guide and Intervention** *(continued)***Statistics and Parameters**

**Statistical Analysis** The **mean absolute deviation** is the average of the absolute values of the differences between the mean and each value in the data set. It is used to predict errors and judge equality. The **standard deviation** is the calculated value that shows how data deviate from the mean of the set of data. The **variance** of data is the square of the standard deviation.

**Example**

**EMPLOYMENT** Employees at a law firm keep track of how many hours they work each week: {44, 48, 44, 40, 59}.

**a. Find the mean absolute deviation.**

**Step 1** Find the mean. For this set of data, the mean is 47.

**Step 2** Find the sum of the absolute values of the differences between each value in the set of data and the mean.

$$|44 - 47| + |48 - 47| + |44 - 47| + |40 - 47| + |59 - 47| = 3 + 1 + 3 + 7 + 12 = 26$$

**Step 3** Divide the sum by the number of values in the set of data:  
 $26 \div 5 \neq 5.2$

The mean absolute deviation is 5.2.

**b. Find the variance and standard deviation.**

**Step 1** To find the variance, square the difference between each number and the mean. Then divide by the number of values.

$$\begin{aligned} \sigma^2 &= \frac{(44 - 47)^2 + (48 - 47)^2 + (44 - 47)^2 + (40 - 47)^2 + (59 - 47)^2}{5} \\ &= \frac{(-3)^2 + (1)^2 + (-3)^2 + (-7)^2 + (12)^2}{5} = \frac{9 + 1 + 9 + 49 + 144}{5} = \frac{188}{5} \end{aligned}$$

**Step 2** The standard deviation is the square root of the variance.

$$\begin{aligned} \sqrt{\sigma^2} &= \sqrt{\frac{188}{5}} \\ \sigma &\approx 6.13 \end{aligned}$$

The variance of the data set is  $\frac{188}{5}$  and the standard deviation is approximately 6.13.

**Exercises**

**Find the mean, mean absolute deviation, variance, and standard deviation for each set of data.**

1. {2, 4, 9, 5}

2. {13, 17, 17, 22, 16}

# 12-4 Study Guide and Intervention

## Permutations and Combinations

**Permutations** An arrangement or listing in which order or placement is important is called a **permutation**. For example, the arrangement AB of choices A and B is different from the arrangement BA of these same two choices.

<b>Permutations</b>	$P(n, r) = \frac{n!}{(n-r)!}$
---------------------	-------------------------------

### Example 1 Find $P(6, 2)$ .

$$P(n, r) = \frac{n!}{(n-r)!} \quad \text{Definition of } p(n, r)$$

$$P(6, 2) = \frac{6!}{(6-2)!} \quad n = 6, r = 2$$

$$= \frac{6!}{4!} \quad \text{Simplify.}$$

$$= \frac{6 \cdot 5 \cdot 4 \cdot 3 \cdot 2 \cdot 1}{4 \cdot 3 \cdot 2 \cdot 1} \quad \text{Definition of factorial}$$

$$= 6 \cdot 5 \text{ or } 30 \quad \text{Simplify.}$$

There are 30 permutations of 6 objects taken 2 at a time.

### Example 2 **PASSWORDS** A specific program requires the user to enter a 5-digit password. The digits cannot repeat and can be any five of the digits 1, 2, 3, 4, 7, 8, and 9.

a. How many different passwords are possible?

$$P(n, r) = \frac{n!}{(n-r)!}$$

$$P(7, 5) = \frac{7!}{(7-5)!}$$

$$= \frac{7 \cdot 6 \cdot 5 \cdot 4 \cdot 3 \cdot 2 \cdot 1}{2 \cdot 1}$$

$$= 7 \cdot 6 \cdot 5 \cdot 4 \cdot 3 \text{ or } 2520$$

There are 2520 ways to create a password.

b. What is the probability that the first two digits are odd numbers with the other digits any of the remaining numbers?

$$P(\text{first two digits odd}) = \frac{\text{number of favorable outcomes}}{\text{number of possible outcomes}}$$

Since there are 4 odd digits, the number of choices for the first digit is 4, and the number of choices for the second digit is 3. Then there are 5 choices left for the third digit, 4 for the fourth, and 3 for the fifth, so the number of favorable outcomes is  $4 \cdot 3 \cdot 5 \cdot 4 \cdot 3$ , or 720.

$$\text{The probability is } \frac{720}{2520} \approx 28.6\%.$$

## Exercises

Evaluate each expression.

1.  $P(7, 4)$

2.  $P(12, 7)$

3.  $[P(9, 9)][P(16, 2)]$

4. **CLUBS** A club with ten members wants to choose a president, vice-president, secretary, and treasurer. Six of the members are women, and four are men.

a. How many different sets of officers are possible?

b. What is the probability that all officers will be women.

**12-4 Study Guide and Intervention** *(continued)***Permutations and Combinations**

**Combinations** An arrangement or listing in which order is not important is called a combination. For example, AB and BA are the same combination of A and B.

Combinations	$C(n, r) = \frac{n!}{(n-r)! r!}$
--------------	----------------------------------

**Example**

**A club with ten members wants to choose a committee of four members. Six of the members are women, and four are men.**

**a. How many different committees are possible?**

$$\begin{aligned} C(n, r) &= \frac{n!}{(n-r)! r!} && \text{Definition of combination} \\ &= \frac{10!}{(10-4)! 4!} && n = 10, r = 4 \\ &= \frac{10 \cdot 9 \cdot 8 \cdot 7}{4!} && \text{Divide by the GCF } 6!. \\ &= 210 && \text{Simplify.} \end{aligned}$$

There are 210 ways to choose a committee of four when order is not important.

**b. If the committee is chosen randomly, what is the probability that two members of the committee are men?**

There are  $C(4, 2) = \frac{4!}{(4-2)! 2!} = 6$  ways to choose two men randomly, and there are

$C(6, 2) = \frac{6!}{(6-4)! 4!} = 15$  ways to choose two women randomly. By the Fundamental

Counting Principle, there are  $6 \cdot 15$  or 90 ways to choose a committee with two men and two women.

$$\begin{aligned} \text{Probability (2 men and 2 women)} &= \frac{\text{number of favorable outcomes}}{\text{number of possible outcomes}} \\ &= \frac{90}{210} \text{ or about } 42.9\% \end{aligned}$$

**Exercises**

**Evaluate each expression.**

1.  $C(7, 3)$

2.  $C(12, 8)$

3.  $C(9, 9)$

**4. COMMITTEES** In how many ways can a club with 9 members choose a two-member sub-committee?

**5. BOOK CLUBS** A book club offers its members a book each month for a year from a selection of 24 books. Ten of the books are biographies and 14 of the books are fiction.

**a.** How many ways could the members select 12 books?

**b.** What is the probability that 5 biographies and 7 fiction books will be chosen?

# 12-5 Study Guide and Intervention

## Probability of Compound Events

**Independent and Dependent Events** Compound events are made up of two or more simple events. The events can be **independent events** or they can be **dependent events**.

<b>Probability of Independent Events</b>	Outcome of first event does not affect outcome of second.	$P(A \text{ and } B) = P(A) \cdot P(B)$	Example: rolling a 6 on a die and then rolling a 5
<b>Probability of Dependent Events</b>	Outcome of first event does affect outcome of second.	$P(A \text{ and } B) = P(A) \cdot P(B \text{ following } A)$	Example: without replacing the first card, choosing an ace and then a king from a deck of cards

**Example 1** Find the probability that you will roll a six and then a five when you roll a die twice.

By the definition of independent events,  $P(A \text{ and } B) = P(A) \cdot P(B)$

$$\text{First roll: } P(6) = \frac{1}{6}$$

$$\text{Second roll: } P(5) = \frac{1}{6}$$

$$\begin{aligned} P(6 \text{ and } 5) &= P(6) \cdot P(5) \\ &= \frac{1}{6} \cdot \frac{1}{6} \\ &= \frac{1}{36} \end{aligned}$$

The probability that you will roll a six and then roll a five is  $\frac{1}{36}$ .

**Example 2** A bag contains 3 red marbles, 2 green marbles, and 4 blue marbles. Two marbles are drawn randomly from the bag and not replaced. Find the probability that both marbles are blue.

By the definition of dependent events,  $P(A \text{ and } B) = P(A) \cdot P(B \text{ following } A)$

$$\text{First marble: } P(\text{blue}) = \frac{4}{9}$$

$$\text{Second marble: } P(\text{blue}) = \frac{3}{8}$$

$$\begin{aligned} P(\text{blue, blue}) &= \frac{4}{9} \cdot \frac{3}{8} \\ &= \frac{12}{72} \\ &= \frac{1}{6} \end{aligned}$$

The probability of drawing two blue marbles is  $\frac{1}{6}$ .

### Exercises

A bag contains 3 red, 4 blue, and 6 yellow marbles. One marble is selected at a time, and once a marble is selected, it is not replaced. Find each probability.

- $P(2 \text{ yellow})$
- $P(\text{red, yellow})$
- $P(\text{blue, red, yellow})$
- George has two red socks and two white socks in a drawer. What is the probability of picking a red sock and a white sock in that order if the first sock is not replaced?
- Phyllis drops a penny in a pond, and then she drops a nickel in the pond. What is the probability that both coins land with tails showing?
- A die is rolled and a penny is dropped. Find the probability of rolling a two and showing a tail.

**12-5 Study Guide and Intervention** *(continued)***Probability of Compound Events**

**Mutually Exclusive and Inclusive Events** Events that cannot occur at the same time are called mutually exclusive. If two events are not mutually exclusive, they are called inclusive.

<b>Probability of Mutually Exclusive Events</b>	$P(A \text{ or } B) = P(A) + P(B)$	$P(\text{rolling a 2 or a 3 on a die}) = P(2) + P(3) = \frac{1}{3}$
<b>Probability of Inclusive Events</b>	$P(A \text{ or } B) = P(A) + P(B) - P(A \text{ and } B)$	$P(\text{king or heart}) = P(K) + P(H) - P(K \text{ and } H) = \frac{9}{26}$

**Example**

**A card is drawn from a standard deck of playing cards. Find the probability of drawing a king or a queen.**

Drawing a king or a queen are mutually exclusive events.

By the definition of mutually exclusive events,  $P(A \text{ or } B) = P(A) + P(B)$ .

$$P(A) = P(\text{king}) = \frac{4}{52} = \frac{1}{13} \quad P(B) = P(\text{queen}) = \frac{4}{52} = \frac{1}{13}$$

$$\begin{aligned} P(\text{king or queen}) &= \frac{1}{13} + \frac{1}{13} \\ &= \frac{2}{13} \end{aligned}$$

The probability of drawing a king or a queen is  $\frac{2}{13}$ .

**Exercises**

**A bag contains 2 red, 5 blue, and 7 yellow marbles. Find each probability.**

- $P(\text{yellow or red})$
- $P(\text{red or not yellow})$
- $P(\text{blue or red or yellow})$

**A card is drawn from a standard deck of playing cards. Find each probability.**

- $P(\text{jack or red})$
- $P(\text{red or black})$
- $P(\text{jack or clubs})$
- $P(\text{queen or less than 3})$
- $P(5 \text{ or } 6)$
- $P(\text{diamond or spade})$

- In a math class, 12 out of 15 girls are 14 years old and 14 out of 17 boys are 14 years old. What is the probability of selecting a girl or a 14-year old from this class?



# 12-6 Study Guide and Intervention

## Probability Distributions

**Random Variables and Probability** A random variable  $X$  is a variable whose value is the numerical outcome of a random event.

**Example** A teacher asked her students how many siblings they have. The results are shown in the table at the right.

Number of Siblings	Number of Students
0	1
1	15
2	8
3	2
4	1

- a. Find the probability that a randomly selected student has 2 siblings.

The random variable  $X$  can equal 0, 1, 2, 3, or 4. In the table, the value  $X = 2$  is paired with 8 outcomes, and there are 27 students surveyed.

$$P(X = 2) = \frac{2 \text{ siblings}}{27 \text{ students surveyed}}$$

$$= \frac{8}{27}$$

The probability that a randomly selected student has 2 siblings is  $\frac{8}{27}$ , or 29.6%.

- b. Find the probability that a randomly selected student has at least three siblings.

$$P(X \geq 3) = \frac{2 + 1}{27}$$

The probability that a randomly selected student has at least 3 siblings is  $\frac{1}{9}$ , or 11.1%.

### Exercises

For Exercises 1–3, use the grade distribution shown at the right. A grade of A = 5, B = 4, C = 3, D = 2, F = 1.

X = Grade	5	4	3	2	1
Number of students	6	9	5	4	1

- Find the probability that a randomly selected student in this class received a grade of C.
- Find the probability that a randomly selected student in this class received a grade lower than a C.
- What is the probability that a randomly selected student in this class passes the course, that is, gets at least a D?
- The table shows the results of tossing 3 coins 50 times. What is the probability of getting 2 or 3 heads?

X = Number of Heads	0	1	2	3
Number of Times	6	20	19	5

# 12-6 Study Guide and Intervention *(continued)*

## Probability Distributions

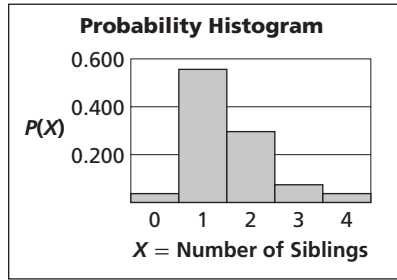
**Probability Distributions** The probabilities associated with every possible value of the random variable  $X$  make up what are called the **probability distribution** for that variable. A probability distribution has the following properties.

<b>Properties of a Probability Distribution</b>	<ol style="list-style-type: none"> <li>The probability of each value of <math>X</math> is greater than or equal to 0.</li> <li>The probabilities for all values of <math>X</math> add up to 1.</li> </ol>
---	---

The probability distribution for a random variable can be given in a table or in a **probability histogram** and used to obtain other information.

**Example** The data from the example on the previous page can be used to determine a probability distribution and to make a probability histogram.

$X = \text{Number of Siblings}$	$P(X)$
0	0.037
1	0.556
2	0.296
3	0.074
4	0.037



a. Show that the distribution is valid.

For each value of  $X$ , the probability is greater than or equal to 0 and less than or equal to 1. Also, the sum of the probabilities is 1.

b. What is the probability that a student chosen at random has fewer than 2 siblings?


Because the events are independent, the probability of fewer than 2 siblings is the sum of the probability of 0 siblings and the probability of 1 sibling, or  $0.037 + 0.556 = 0.593$ .

### Exercises

The table at the right shows the probability distribution for students by school enrollment in the United States in 2000. Use the table for Exercises 1–3.

$X = \text{Type of School}$	$P(X)$
Elementary = 1	0.562
Secondary = 2	0.215
Higher Education = 3	0.223

Source: U.S. Census Bureau



- Show that the distribution is valid.
- If a student is chosen at random, what is the probability that the student is in elementary or secondary school?
- Make a probability histogram of the data.

# 12-7 Study Guide and Intervention

## Probability Simulations

**Theoretical and Experimental Probability** The probability used to describe events mathematically is called **theoretical probability**. For example, the mathematical probability of rolling a 4 with a number cube is  $\frac{1}{6}$ , or  $P(4) = \frac{1}{6}$ . **Experimental probability** is the ratio of the number of times an outcome occurs in an experiment to the total number of events or trials, known as the **relative frequency**.

<b>Experimental Probability</b>	$\frac{\text{frequency of an outcome}}{\text{total number of trials}}$
---------------------------------	--

**Example 1** Matt recorded that it rained 8 times in November and snowed 3 times. The other days, it was sunny. There are 30 days in November. Suppose Matt uses these results to predict November's weather next year. What is the probability that a day in November will be sunny?

$$\begin{aligned} \text{Experimental Probability} &= \frac{\text{frequency of outcome}}{\text{total number of trials}} \\ &= \frac{(30 - 8 - 3)}{30} \\ &= \frac{19}{30} = 63.3\% \end{aligned}$$

The probability that it will be sunny on a day in November is 63.3%.

**Example 2** A football team noticed that 9 of the last 20 coin tosses to choose which team would receive the ball first resulted in tails. What is the experimental probability of the coin landing on tails? What is the theoretical probability?

$$\begin{aligned} \text{Experimental Probability} &= \frac{\text{frequency of outcome}}{\text{total number of trials}} \\ &= \frac{\text{number of tails}}{\text{total number of tosses}} \\ &= \frac{9}{20} = 45\% \end{aligned}$$

In this case, the experimental probability that a coin toss will be tails is 45%. If the coin is fair, the mathematical probability is 50%.

### Exercises

- 1. DIE ROLL** A math class decided to test whether a die is fair, that is, whether the experimental probability equals the theoretical probability. The results for 100 rolls are shown at the right.

1: 1	2: 15
3: 4	4: 13
5: 15	6: 42

- What is the theoretical probability of rolling a 6?
- What is the experimental probability of rolling a 6?
- Is the die fair? Explain your reasoning.

**12-7 Study Guide and Intervention** *(continued)***Probability Simulations**

**Performing Simulations** A method that is often used to find experimental probability is a **simulation**. A simulation allows you to use objects to act out an event that would be difficult or impractical to perform.


**Example** In one baseball season, Pete was able to get a base hit 42 of the 254 times he was at bat.

**a. What could be used to simulate his getting a base hit?**

First find the experimental probability.

$$\begin{aligned} \text{Experimental Probability} &= \frac{\text{frequency of outcome}}{\text{total number of trials}} \\ &= \frac{42}{254} \text{ or } 16.5\% \end{aligned}$$

Notice that the experimental probability is about  $\frac{1}{6}$ . Therefore use a spinner like the one at the right with 6 equally likely outcomes.



**b. Describe a way to simulate his next 10 times at bat.**

Let an outcome of 1 correspond to Pete's getting a base hit. Let all other outcomes correspond to his *not* getting a hit. Spin the spinner once to simulate a time at bat. Record the result and repeat this 9 more times.

**Exercises**

- 1. GUESSING** What could you use to simulate the outcome of guessing on a 20 question true-false test?
- 2. GUESSING** What could you use to simulate the outcome of guessing on a 20-question multiple choice test with 4 alternative answers labeled A, B, C, and D for each question?
- 3. PROMOTIONS** Main Street Supermarket randomly gives each shopper a free two-liter bottle of cola during the Saturday shopping hours. The supermarket sells 6 different types of cola.
  - a.** What could be used to perform a simulation of this situation?
  - b.** How could you use this simulation to model the next 50 bottles of cola given out.
- 4. PICNICS** At a picnic, there were 2 peanut butter sandwiches, 2 chicken sandwiches, a tuna sandwich, and a turkey sandwich in a cooler. Describe a simulation that could be used to find the probability of randomly picking a certain sandwich from the cooler.