

Lesson 8-2

Example 1

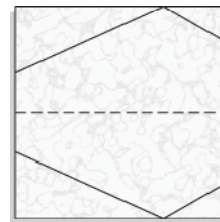
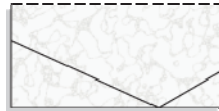
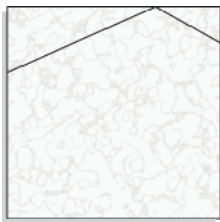
PAPER FOLDING Construct a copy of each figure.

a. an obtuse angle

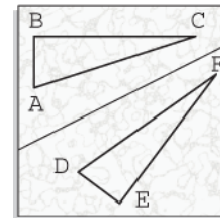
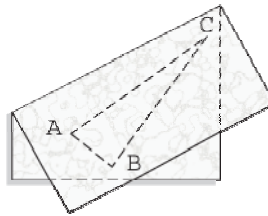
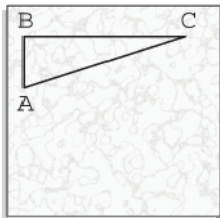
b. a right triangle

Solution

a. First, draw an angle that is greater than a right angle on paper. Fold just below or above the original angle and trace the image. The new angle is a copy of the original.



b. First, draw $\triangle ABC$. Then make a fold just below one of the sides of the triangle and trace the image. The new triangle, $\triangle DEF$, is a copy of the original.

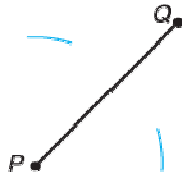


Example 2

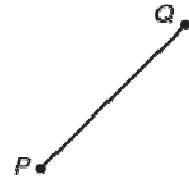
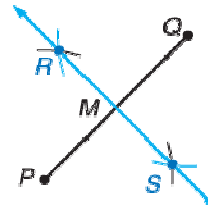
Use a compass and straightedge to construct the perpendicular bisector of \overline{PQ}

Solution

Step 1 Place the point of the compass at P . Open the compass a little more than half the length of \overline{PQ} . Draw one arc above and another below \overline{PQ} .



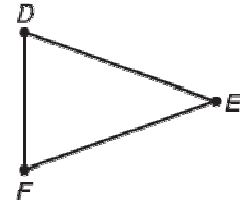
Step 2 Place the compass point at Q . With the setting used in Step 1, draw arcs above and below \overline{PQ} . Label the points of intersection R and S . Draw \overline{RS} . Label the midpoint of \overline{PQ} as M .



Example 3

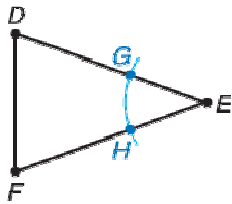
SPORTS A pennant for a college basketball team has the shape of an isosceles triangle.

Use a compass and straightedge to construct the angle bisector of $\angle DEF$, which is a 40° angle.

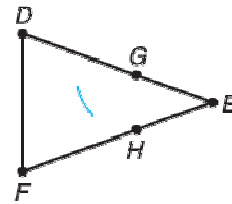


Solution

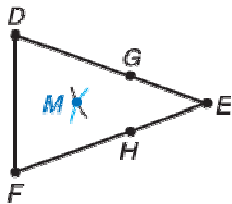
Step 1 With the compass point at E , draw an arc that intersects \overline{ED} and \overline{EF} . Label the intersection points G and H .



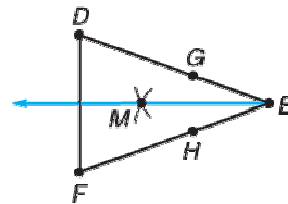
Step 2 With compass point at G , adjust the compass so that the opening is a little greater than half the length of \overline{GH} . Draw an arc inside $\angle DEF$.



Step 3 Place the compass point at H . With the setting used in Step 2, draw an arc that intersects the first arc at M .



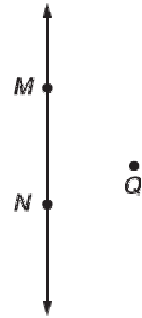
Step 4 Draw \overline{EM} , the angle bisector.



Checking with a protractor reveals that $\angle DEM$ and $\angle FEM$ are both 20° angles.

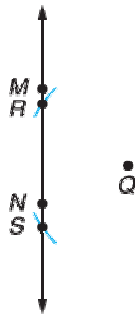
Example 4

Construct a line perpendicular to \overline{MN} through point Q.

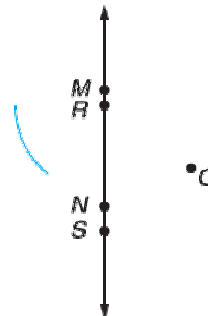


Solution

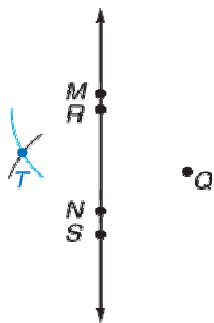
Step 1 With the compass point at Q, draw an arc that intersects \overline{MN} at R and S.



Step 2 With the compass point at R, open the compass a little more than half the length of \overline{RS} . Draw an arc to the left of \overline{MN} .



Step 3 Place the compass point at S. With the setting used in Step 2, draw an arc to the left of \overline{MN} that intersects the first arc. Label the point of intersection T.



Step 4 Draw \overline{QT} , which will be perpendicular to \overline{MN} .

